


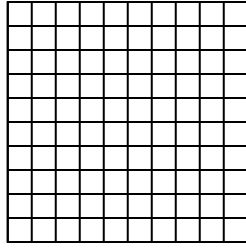


Wende die visuelle Methode an um jede Aufgabe zu lösen.

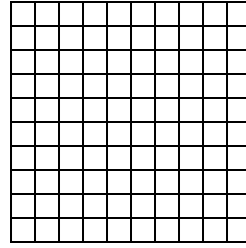
1)  $0,8 \cdot 0,5 =$




2)  $0,7 \cdot 0,9 =$




3)  $0,1 \cdot 0,9 =$



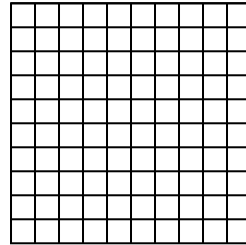
4)  $0,1 \cdot 0,8 =$




5)  $0,5 \cdot 0,5 =$




6)  $0,2 \cdot 0,6 =$



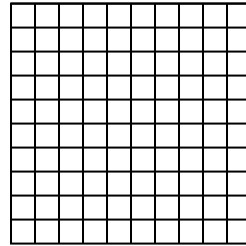
7)  $0,6 \cdot 0,9 =$




8)  $0,2 \cdot 0,9 =$




9)  $0,3 \cdot 0,3 =$




10)  $0,6 \cdot 0,7 =$




11)  $0,7 \cdot 0,4 =$




12)  $0,6 \cdot 0,4 =$




13)  $0,8 \cdot 0,4 =$



14)  $0,7 \cdot 0,8 =$



15)  $0,9 \cdot 0,2 =$

Antworten

1. \_\_\_\_\_

2. \_\_\_\_\_

3. \_\_\_\_\_

4. \_\_\_\_\_

5. \_\_\_\_\_

6. \_\_\_\_\_

7. \_\_\_\_\_

8. \_\_\_\_\_

9. \_\_\_\_\_

10. \_\_\_\_\_

11. \_\_\_\_\_

12. \_\_\_\_\_

13. \_\_\_\_\_

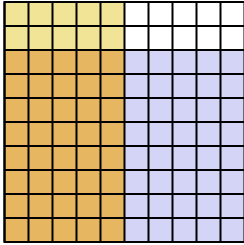
14. \_\_\_\_\_

15. \_\_\_\_\_

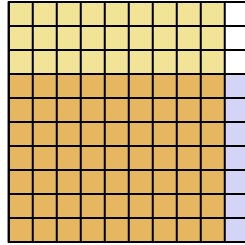


Wende die visuelle Methode an um jede Aufgabe zu lösen.

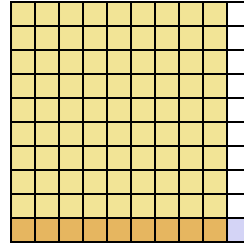
1)  $0,8 \cdot 0,5 =$



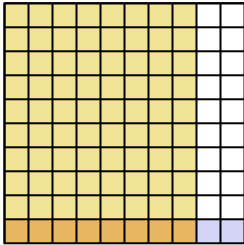
2)  $0,7 \cdot 0,9 =$



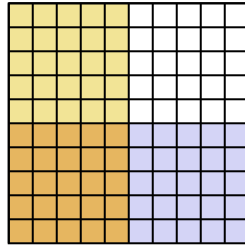
3)  $0,1 \cdot 0,9 =$



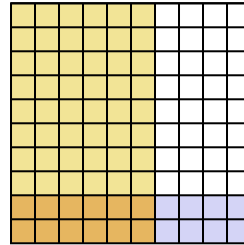
4)  $0,1 \cdot 0,8 =$



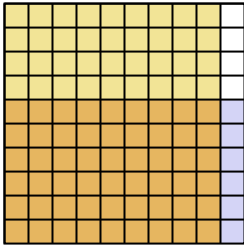
5)  $0,5 \cdot 0,5 =$



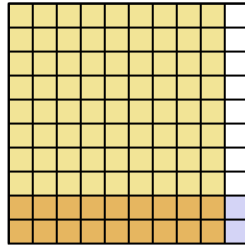
6)  $0,2 \cdot 0,6 =$



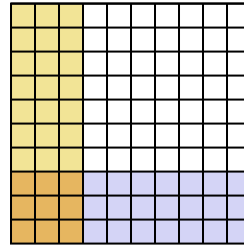
7)  $0,6 \cdot 0,9 =$



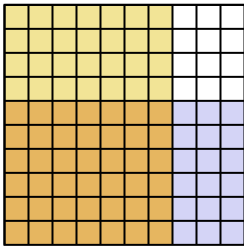
8)  $0,2 \cdot 0,9 =$



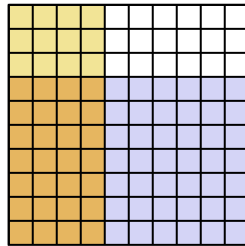
9)  $0,3 \cdot 0,3 =$



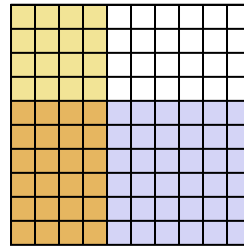
10)  $0,6 \cdot 0,7 =$



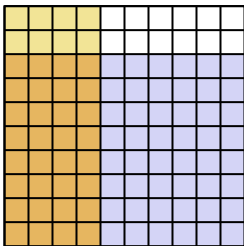
11)  $0,7 \cdot 0,4 =$



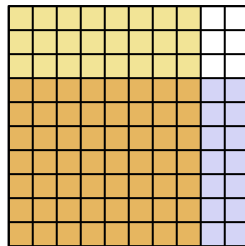
12)  $0,6 \cdot 0,4 =$



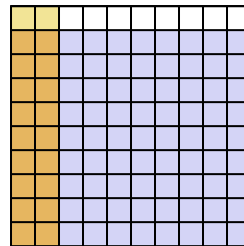
13)  $0,8 \cdot 0,4 =$



14)  $0,7 \cdot 0,8 =$



15)  $0,9 \cdot 0,2 =$

**Antworten**

1.  $\frac{40}{100} = 0,4$

2.  $\frac{63}{100} = 0,63$

3.  $\frac{9}{100} = 0,09$

4.  $\frac{8}{100} = 0,08$

5.  $\frac{25}{100} = 0,25$

6.  $\frac{12}{100} = 0,12$

7.  $\frac{54}{100} = 0,54$

8.  $\frac{18}{100} = 0,18$

9.  $\frac{9}{100} = 0,09$

10.  $\frac{42}{100} = 0,42$

11.  $\frac{28}{100} = 0,28$

12.  $\frac{24}{100} = 0,24$

13.  $\frac{32}{100} = 0,32$

14.  $\frac{56}{100} = 0,56$

15.  $\frac{18}{100} = 0,18$