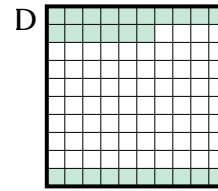
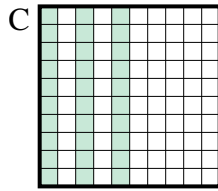
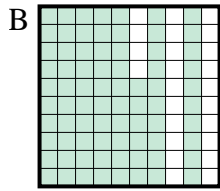
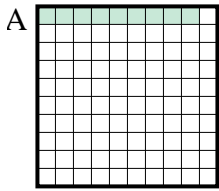


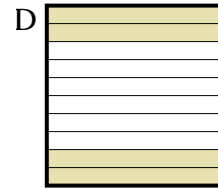
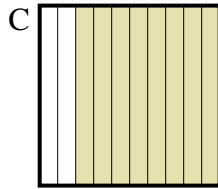
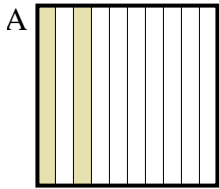


Bestimme, welcher Buchstabe die Frage richtig beantwortet.

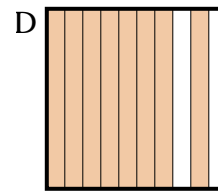
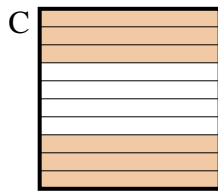
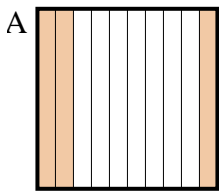
1) Which 10×10 grid is shaded to represent the decimal number that, when added to 0,91, results in a total of 1,00?



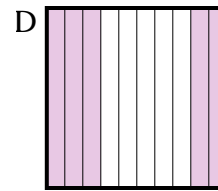
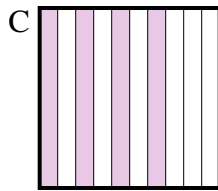
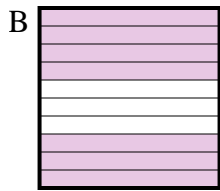
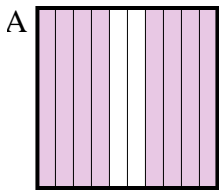
2) Which 10×1 grid is shaded to represent the decimal number that, when added to 0,6, results in a total of 1,00?



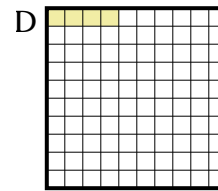
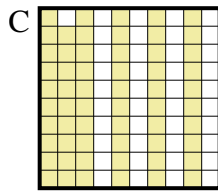
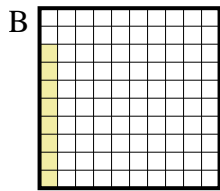
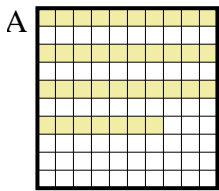
3) Which 10×1 grid is shaded to represent the decimal number that, when added to 0,4, results in a total of 1,00?



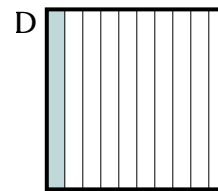
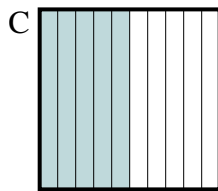
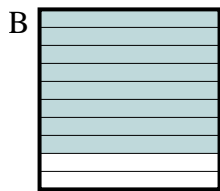
4) Which 10×1 grid is shaded to represent the decimal number that, when added to 0,2, results in a total of 1,00?



5) Which 10×10 grid is shaded to represent the decimal number that, when added to 0,96, results in a total of 1,00?



6) Which 10×1 grid is shaded to represent the decimal number that, when added to 0,5, results in a total of 1,00?



Antworten

1. _____

2. _____

3. _____

4. _____

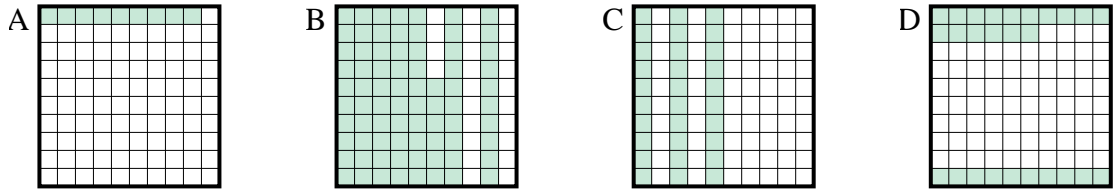
5. _____

6. _____

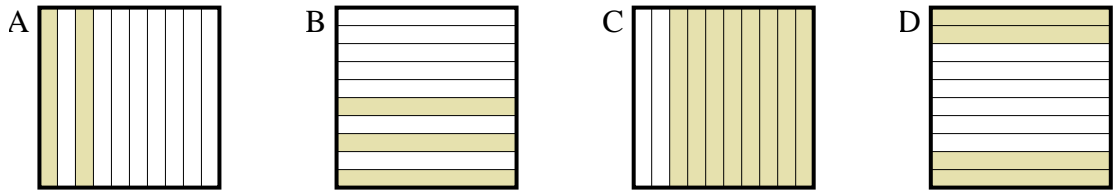


Bestimme, welcher Buchstabe die Frage richtig beantwortet.

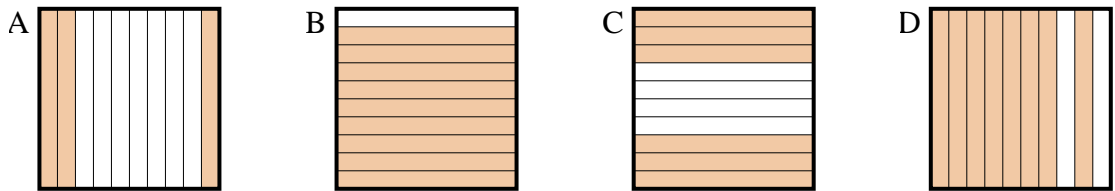
1) Which 10×10 grid is shaded to represent the decimal number that, when added to 0,91, results in a total of 1,00?



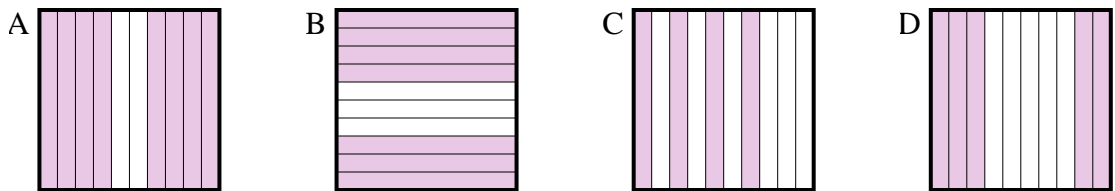
2) Which 10×1 grid is shaded to represent the decimal number that, when added to 0,6, results in a total of 1,00?



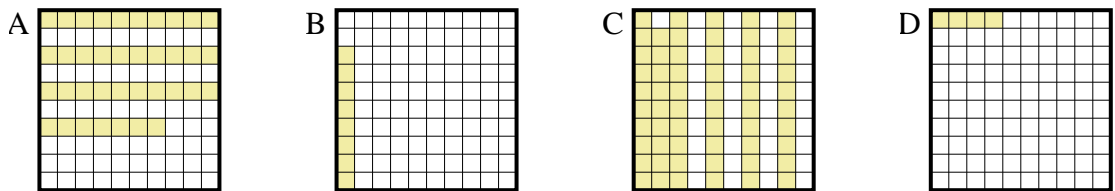
3) Which 10×1 grid is shaded to represent the decimal number that, when added to 0,4, results in a total of 1,00?



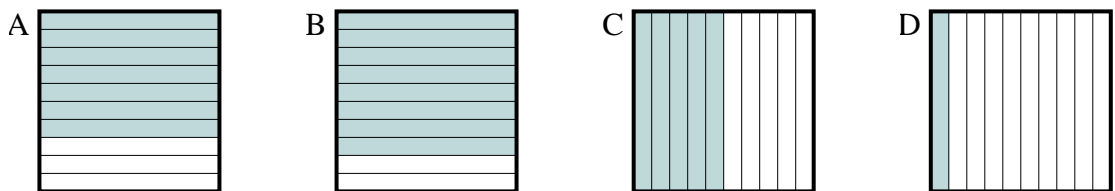
4) Which 10×1 grid is shaded to represent the decimal number that, when added to 0,2, results in a total of 1,00?



5) Which 10×10 grid is shaded to represent the decimal number that, when added to 0,96, results in a total of 1,00?



6) Which 10×1 grid is shaded to represent the decimal number that, when added to 0,5, results in a total of 1,00?



Antworten

1. **A**

2. **D**

3. **C**

4. **A**

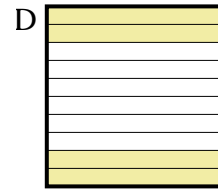
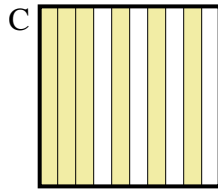

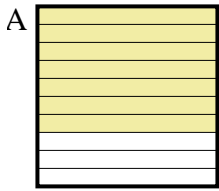
5. **D**

6. **C**

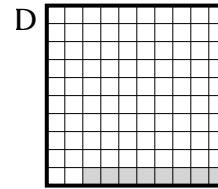
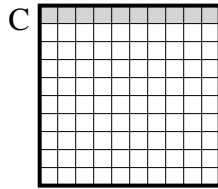
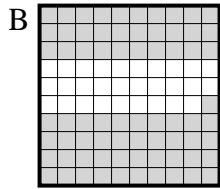
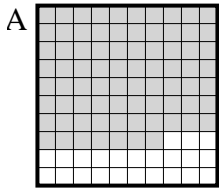


Bestimme, welcher Buchstabe die Frage richtig beantwortet.

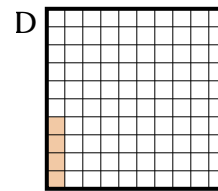
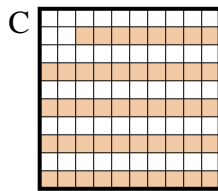
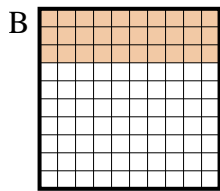
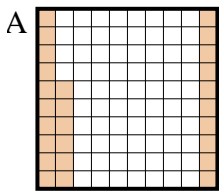
1) Which 10×1 grid is shaded to represent the decimal number that, when added to 0,3, results in a total of 1,00?



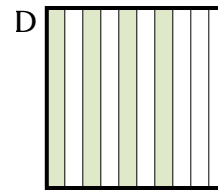
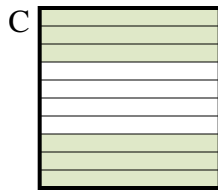
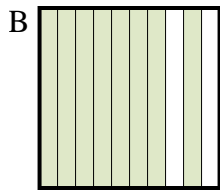

2) Which 10×10 grid is shaded to represent the decimal number that, when added to 0,92, results in a total of 1,00?



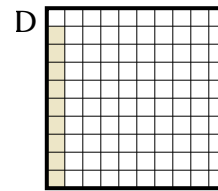
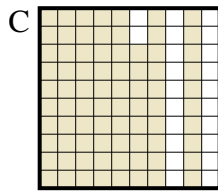
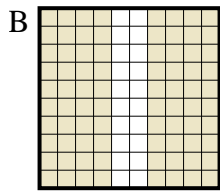
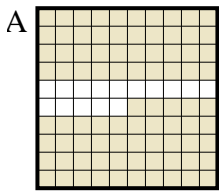
3) Which 10×10 grid is shaded to represent the decimal number that, when added to 0,96, results in a total of 1,00?



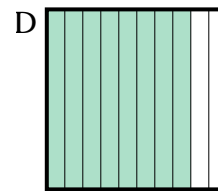
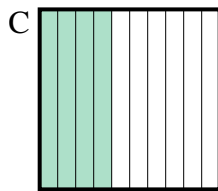
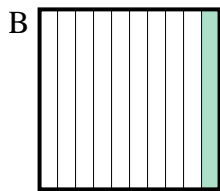
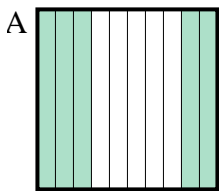
4) Which 10×1 grid is shaded to represent the decimal number that, when added to 0,8, results in a total of 1,00?



5) Which 10×10 grid is shaded to represent the decimal number that, when added to 0,91, results in a total of 1,00?



6) Which 10×1 grid is shaded to represent the decimal number that, when added to 0,2, results in a total of 1,00?



Antworten

1. _____

2. _____

3. _____

4. _____

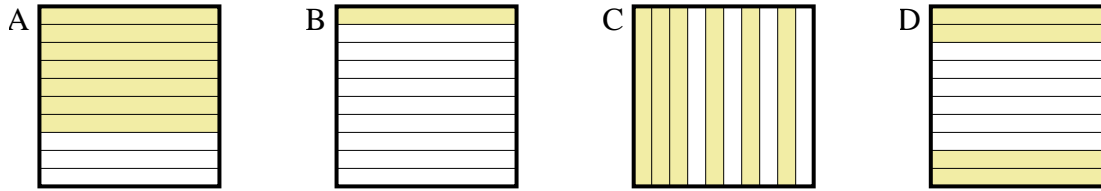
5. _____

6. _____

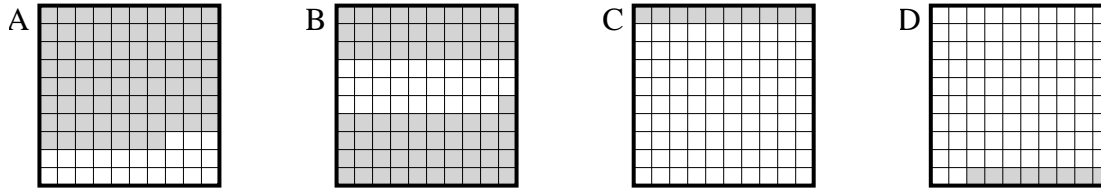


Bestimme, welcher Buchstabe die Frage richtig beantwortet.

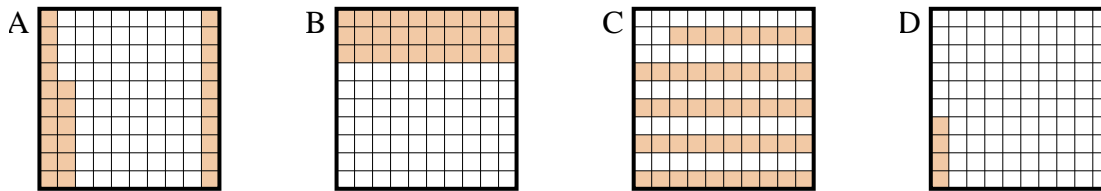
1) Which 10×1 grid is shaded to represent the decimal number that, when added to 0,3, results in a total of 1,00?



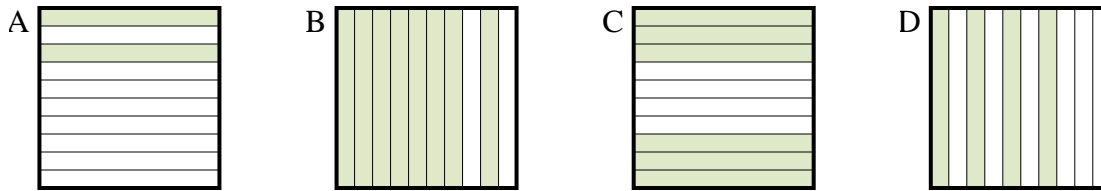
2) Which 10×10 grid is shaded to represent the decimal number that, when added to 0,92, results in a total of 1,00?



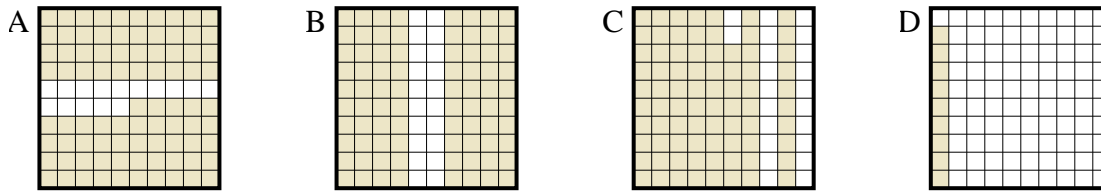
3) Which 10×10 grid is shaded to represent the decimal number that, when added to 0,96, results in a total of 1,00?



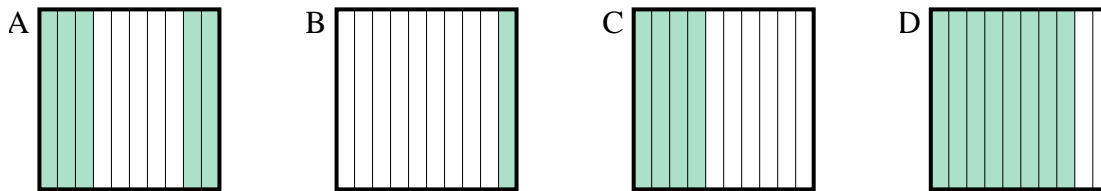
4) Which 10×1 grid is shaded to represent the decimal number that, when added to 0,8, results in a total of 1,00?



5) Which 10×10 grid is shaded to represent the decimal number that, when added to 0,91, results in a total of 1,00?



6) Which 10×1 grid is shaded to represent the decimal number that, when added to 0,2, results in a total of 1,00?



Antworten

1. **A**

2. **D**

3. **D**

4. **A**

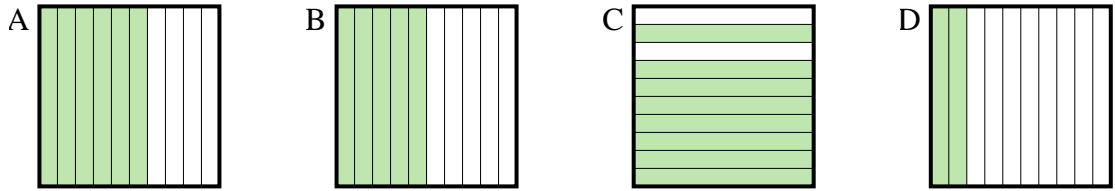
5. **D**

6. **D**

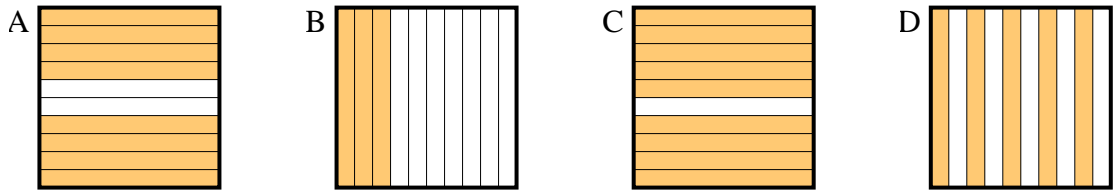


Bestimme, welcher Buchstabe die Frage richtig beantwortet.

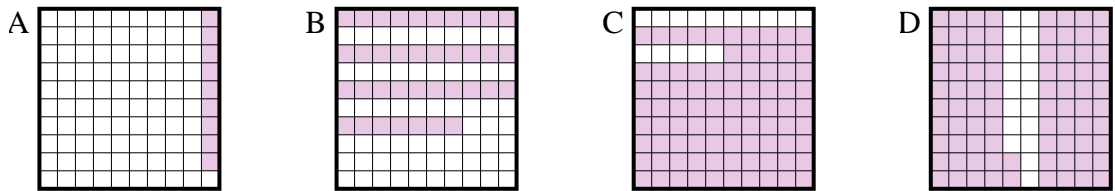
1) Which 10x1 grid is shaded to represent the decimal number that, when added to 0,5, results in a total of 1,00?



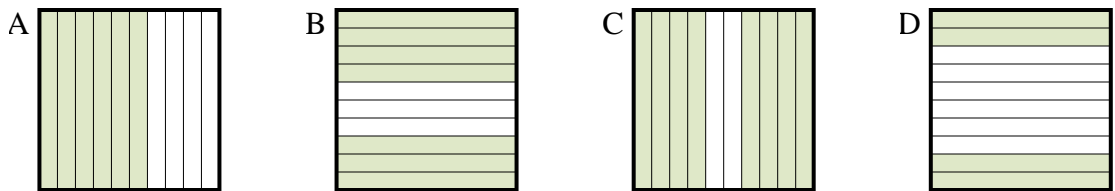
2) Which 10x1 grid is shaded to represent the decimal number that, when added to 0,7, results in a total of 1,00?



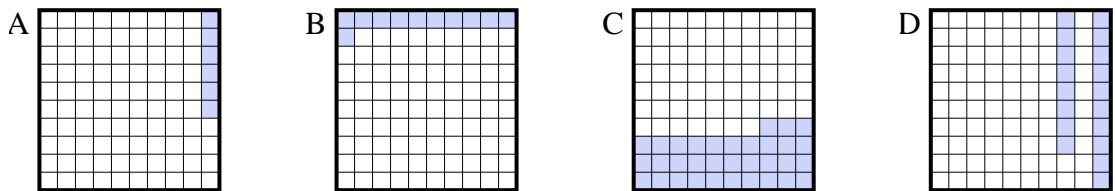
3) Which 10x10 grid is shaded to represent the decimal number that, when added to 0,91, results in a total of 1,00?



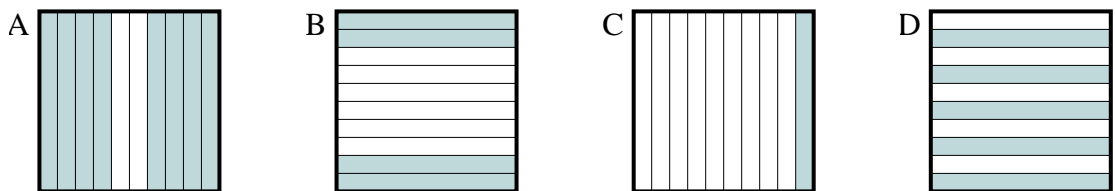
4) Which 10x1 grid is shaded to represent the decimal number that, when added to 0,3, results in a total of 1,00?



5) Which 10x10 grid is shaded to represent the decimal number that, when added to 0,94, results in a total of 1,00?

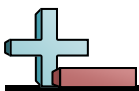


6) Which 10x1 grid is shaded to represent the decimal number that, when added to 0,6, results in a total of 1,00?



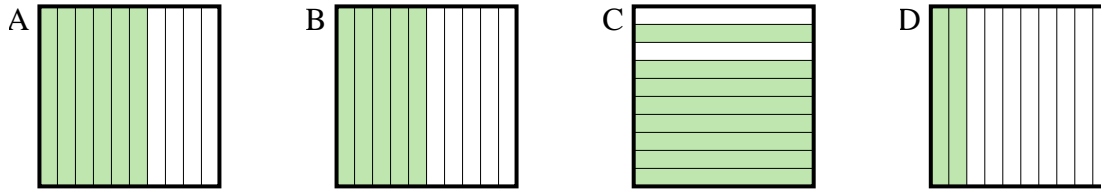
Antworten

- 1. _____
- 2. _____
- 3. _____
- 4. _____
- 5. _____
- 6. _____

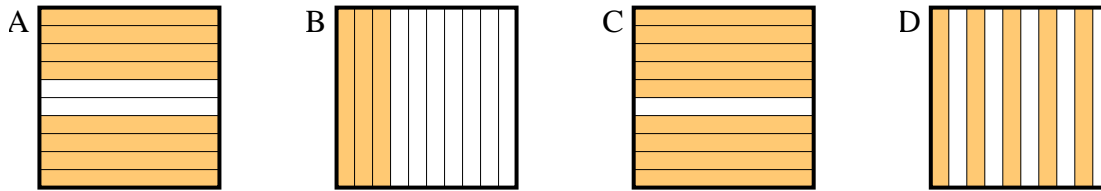


Bestimme, welcher Buchstabe die Frage richtig beantwortet.

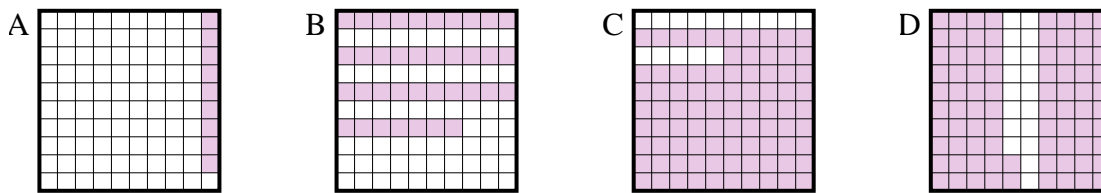
- 1) Which 10×1 grid is shaded to represent the decimal number that, when added to 0,5, results in a total of 1,00?



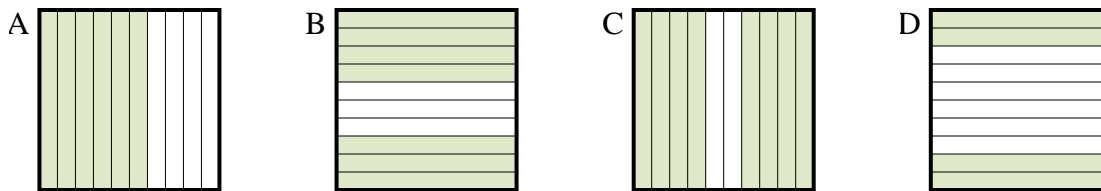
- 2) Which 10×1 grid is shaded to represent the decimal number that, when added to 0,7, results in a total of 1,00?



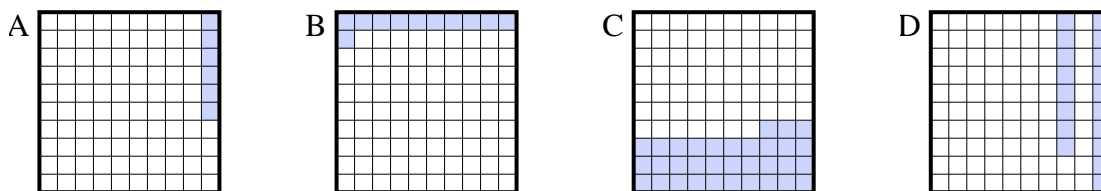
- 3) Which 10×10 grid is shaded to represent the decimal number that, when added to 0,91, results in a total of 1,00?



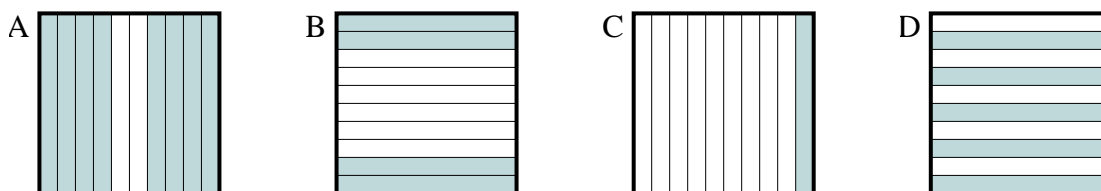
- 4) Which 10×1 grid is shaded to represent the decimal number that, when added to 0,3, results in a total of 1,00?



- 5) Which 10×10 grid is shaded to represent the decimal number that, when added to 0,94, results in a total of 1,00?



- 6) Which 10×1 grid is shaded to represent the decimal number that, when added to 0,6, results in a total of 1,00?

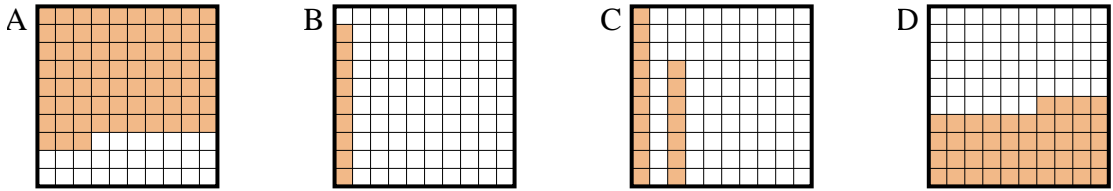
Antworten

1. **B**
 2. **B**
 3. **A**
 4. **B**
 5. **A**
 6. **B**

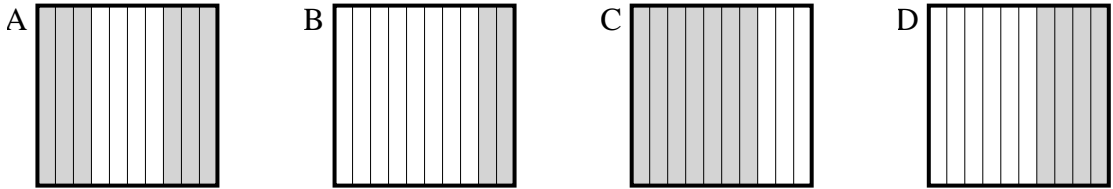


Bestimme, welcher Buchstabe die Frage richtig beantwortet.

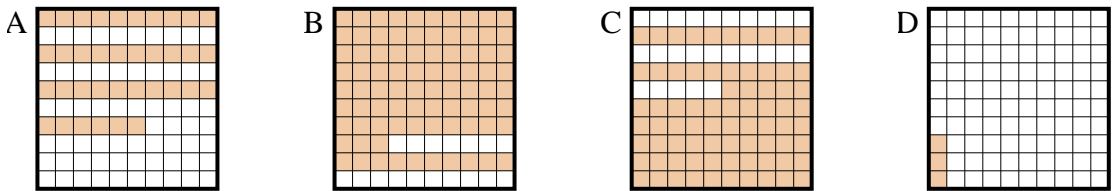
1) Which 10×10 grid is shaded to represent the decimal number that, when added to 0,91, results in a total of 1,00?



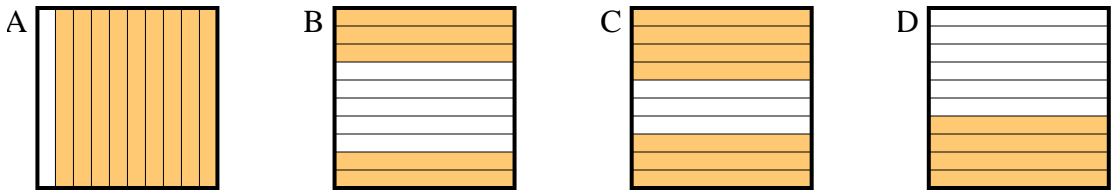
2) Which 10×1 grid is shaded to represent the decimal number that, when added to 0,3, results in a total of 1,00?



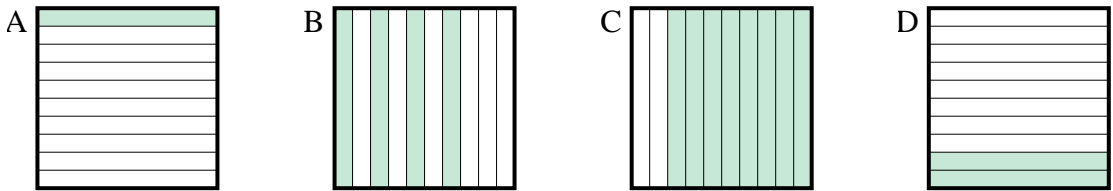
3) Which 10×10 grid is shaded to represent the decimal number that, when added to 0,97, results in a total of 1,00?



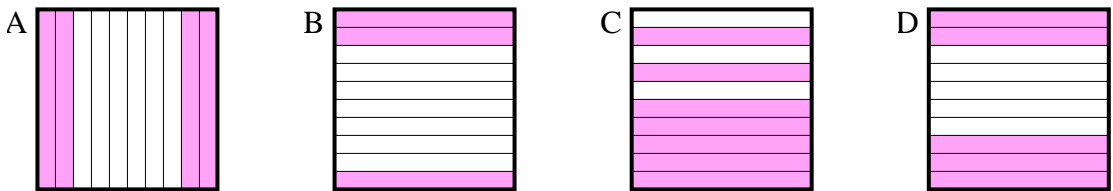
4) Which 10×1 grid is shaded to represent the decimal number that, when added to 0,5, results in a total of 1,00?



5) Which 10×1 grid is shaded to represent the decimal number that, when added to 0,2, results in a total of 1,00?

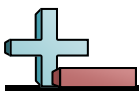


6) Which 10×1 grid is shaded to represent the decimal number that, when added to 0,7, results in a total of 1,00?



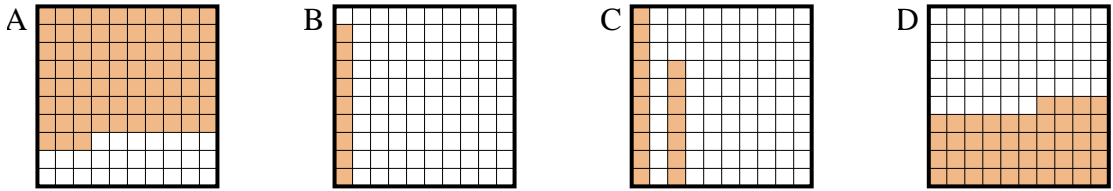
Antworten

1. _____
2. _____
3. _____
4. _____
5. _____
6. _____

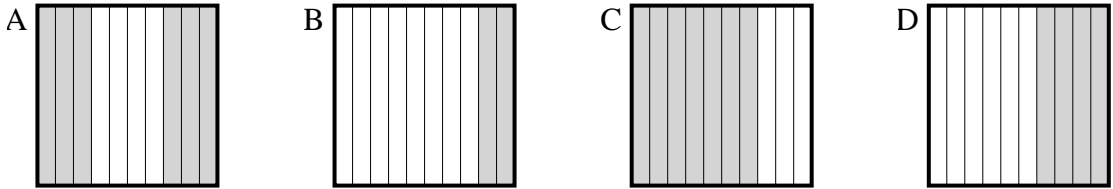


Bestimme, welcher Buchstabe die Frage richtig beantwortet.

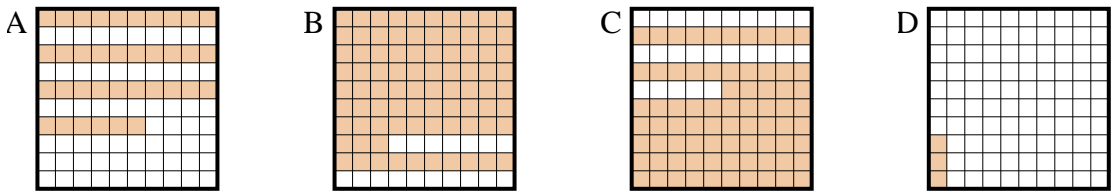
1) Which 10×10 grid is shaded to represent the decimal number that, when added to 0,91, results in a total of 1,00?



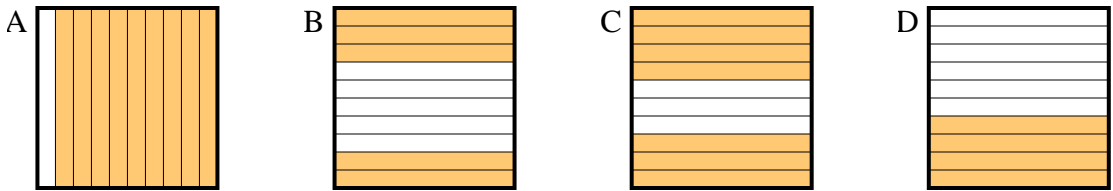
2) Which 10×1 grid is shaded to represent the decimal number that, when added to 0,3, results in a total of 1,00?



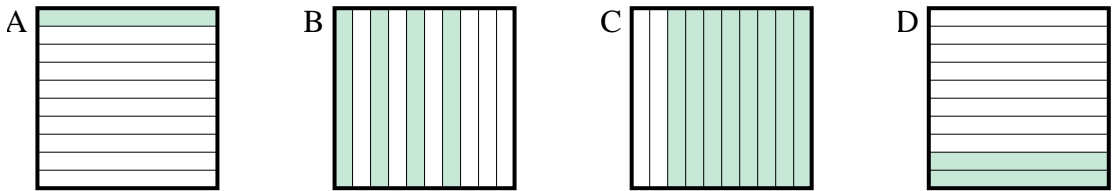
3) Which 10×10 grid is shaded to represent the decimal number that, when added to 0,97, results in a total of 1,00?



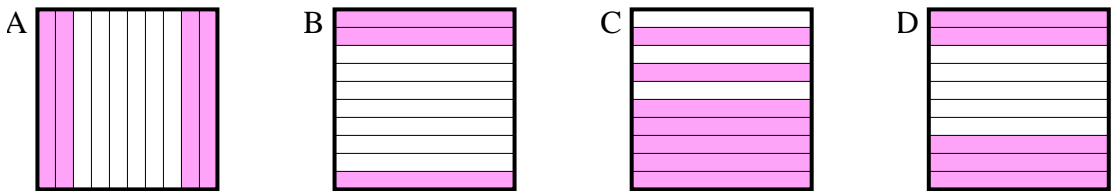
4) Which 10×1 grid is shaded to represent the decimal number that, when added to 0,5, results in a total of 1,00?



5) Which 10×1 grid is shaded to represent the decimal number that, when added to 0,2, results in a total of 1,00?



6) Which 10×1 grid is shaded to represent the decimal number that, when added to 0,7, results in a total of 1,00?



Antworten

1. **B**

2. **C**

3. **D**

4. **B**

5. **C**

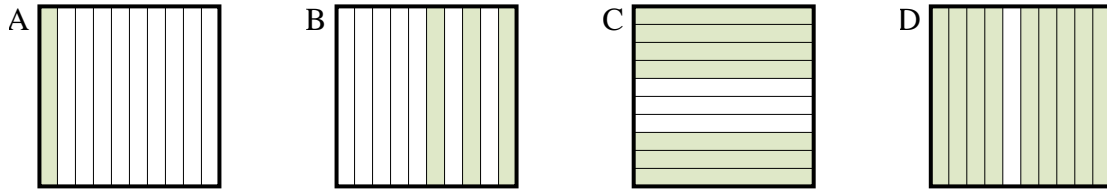
6. **B**



Bestimme, welcher Buchstabe die Frage richtig beantwortet.

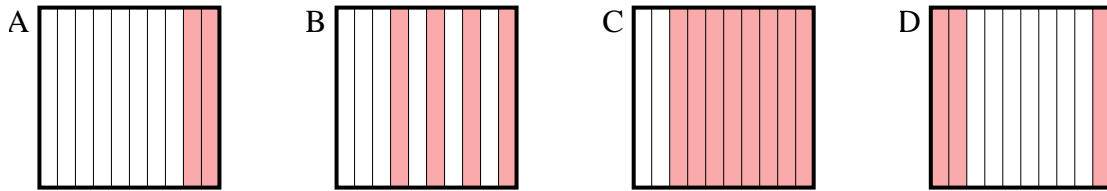
Antworten

1) Which 10×1 grid is shaded to represent the decimal number that, when added to 0,3, results in a total of 1,00?



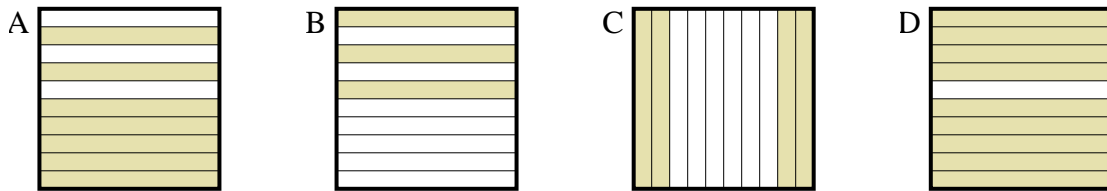
1. _____

2) Which 10×1 grid is shaded to represent the decimal number that, when added to 0,8, results in a total of 1,00?



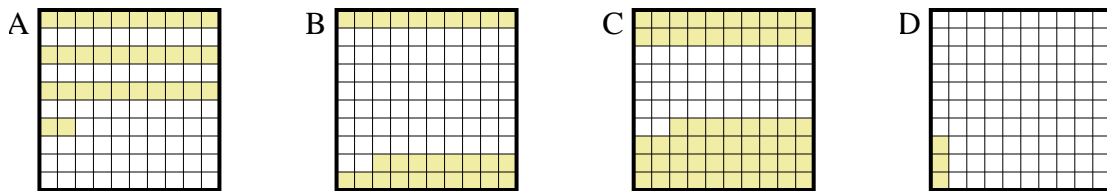
2. _____

3) Which 10×1 grid is shaded to represent the decimal number that, when added to 0,7, results in a total of 1,00?



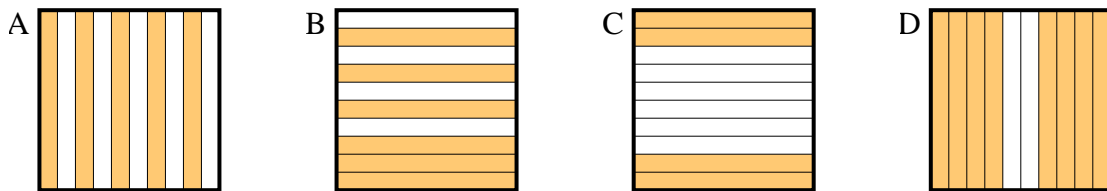
3. _____

4) Which 10×10 grid is shaded to represent the decimal number that, when added to 0,97, results in a total of 1,00?



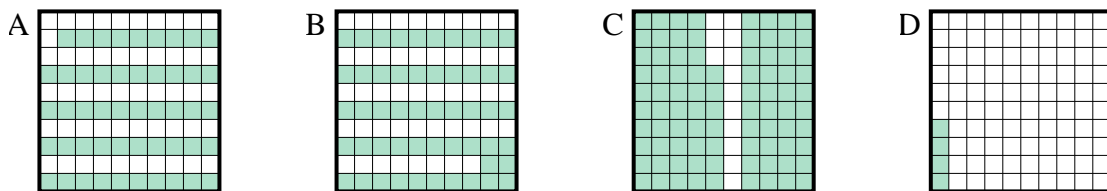
4. _____

5) Which 10×1 grid is shaded to represent the decimal number that, when added to 0,4, results in a total of 1,00?



5. _____

6) Which 10×10 grid is shaded to represent the decimal number that, when added to 0,96, results in a total of 1,00?

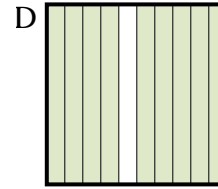
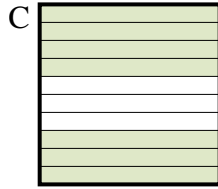
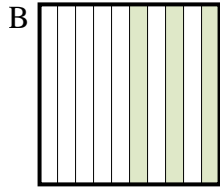
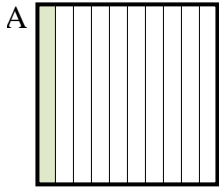


6. _____

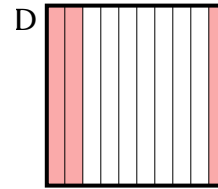
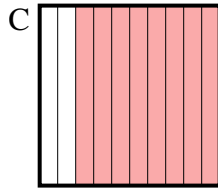
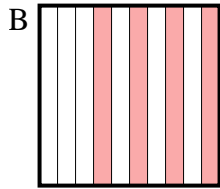
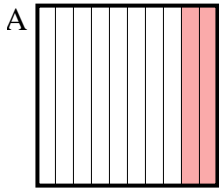


Bestimme, welcher Buchstabe die Frage richtig beantwortet.


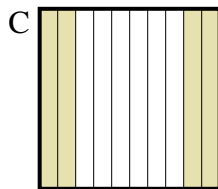


- 1) Which 10×1 grid is shaded to represent the decimal number that, when added to 0,3, results in a total of 1,00?



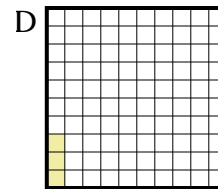
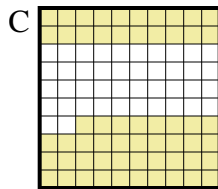
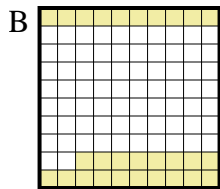
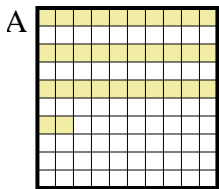
- 2) Which 10×1 grid is shaded to represent the decimal number that, when added to 0,8, results in a total of 1,00?



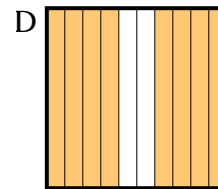
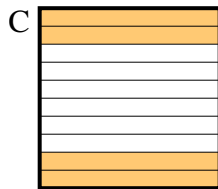
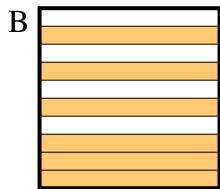
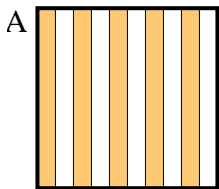
- 3) Which 10×1 grid is shaded to represent the decimal number that, when added to 0,7, results in a total of 1,00?



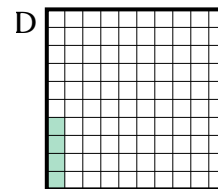
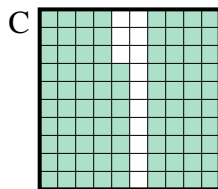
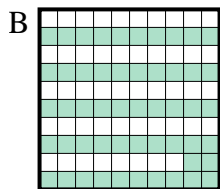
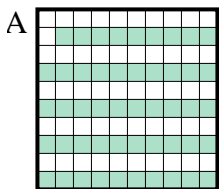
- 4) Which 10×10 grid is shaded to represent the decimal number that, when added to 0,97, results in a total of 1,00?



- 5) Which 10×1 grid is shaded to represent the decimal number that, when added to 0,4, results in a total of 1,00?



- 6) Which 10×10 grid is shaded to represent the decimal number that, when added to 0,96, results in a total of 1,00?

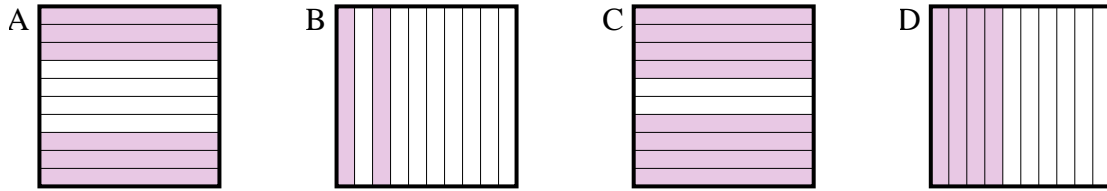
Antworten1. **C** 2. **A** 3. **B** 4. **D** 5. **B** 6. **D**



Bestimme, welcher Buchstabe die Frage richtig beantwortet.

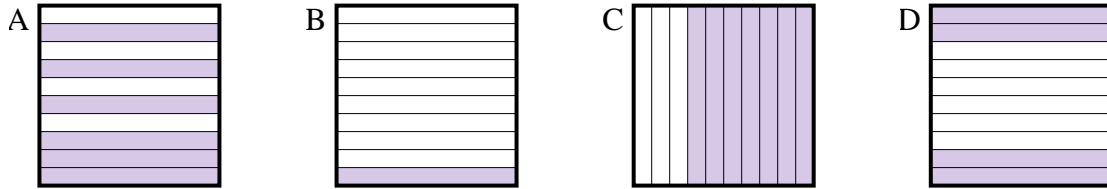
Antworten

1) Which 10×1 grid is shaded to represent the decimal number that, when added to 0,2, results in a total of 1,00?



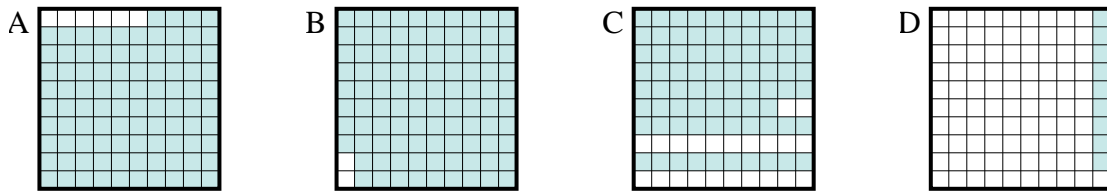
1. _____

2) Which 10×1 grid is shaded to represent the decimal number that, when added to 0,3, results in a total of 1,00?



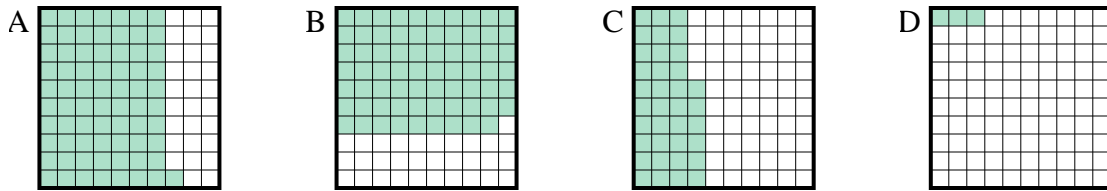
2. _____

3) Which 10×10 grid is shaded to represent the decimal number that, when added to 0,91, results in a total of 1,00?



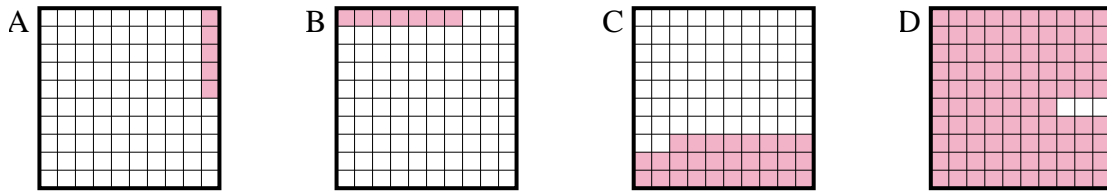
3. _____

4) Which 10×10 grid is shaded to represent the decimal number that, when added to 0,97, results in a total of 1,00?



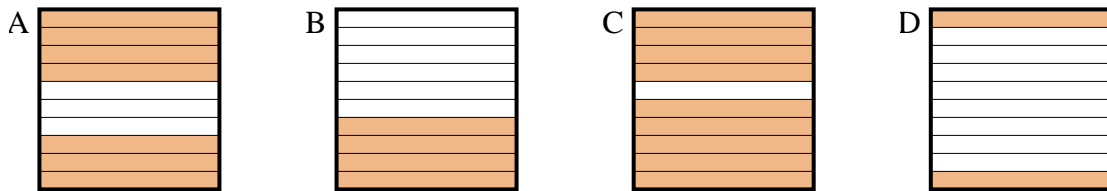
4. _____

5) Which 10×10 grid is shaded to represent the decimal number that, when added to 0,93, results in a total of 1,00?



5. _____

6) Which 10×1 grid is shaded to represent the decimal number that, when added to 0,1, results in a total of 1,00?

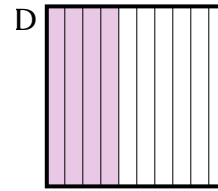
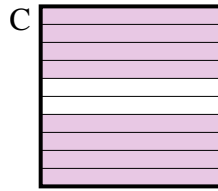
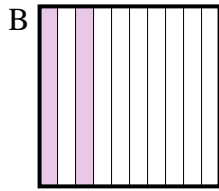
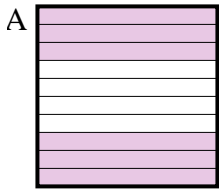


6. _____

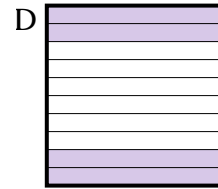
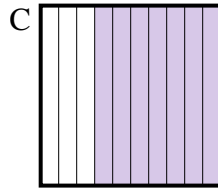
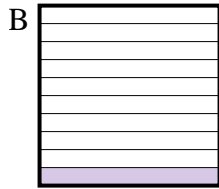
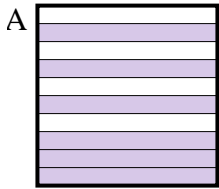


Bestimme, welcher Buchstabe die Frage richtig beantwortet.

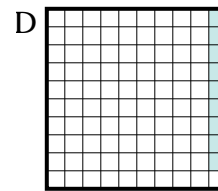
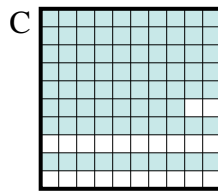
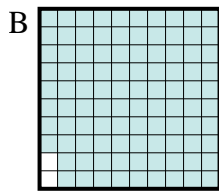
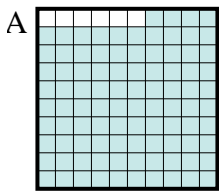
- 1) Which 10×1 grid is shaded to represent the decimal number that, when added to 0,2, results in a total of 1,00?



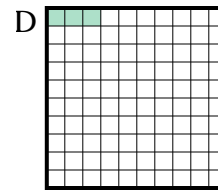
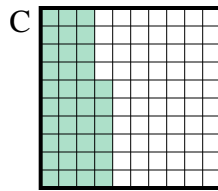
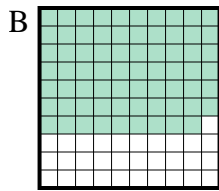
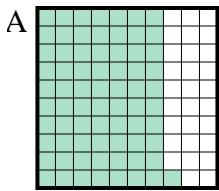
- 2) Which 10×1 grid is shaded to represent the decimal number that, when added to 0,3, results in a total of 1,00?



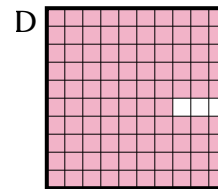
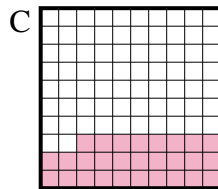
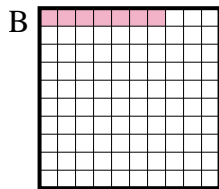
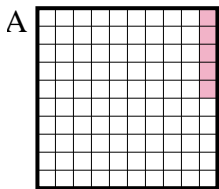
- 3) Which 10×10 grid is shaded to represent the decimal number that, when added to 0,91, results in a total of 1,00?



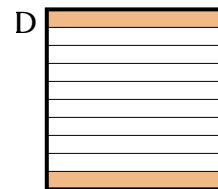
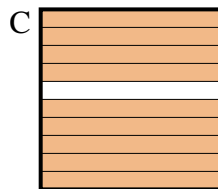
- 4) Which 10×10 grid is shaded to represent the decimal number that, when added to 0,97, results in a total of 1,00?



- 5) Which 10×10 grid is shaded to represent the decimal number that, when added to 0,93, results in a total of 1,00?



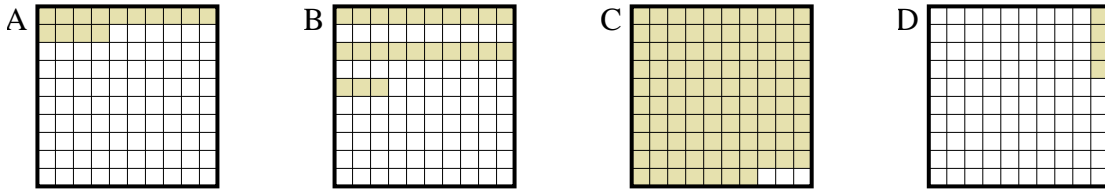
- 6) Which 10×1 grid is shaded to represent the decimal number that, when added to 0,1, results in a total of 1,00?

Antworten1. **C** 2. **C** 3. **D** 4. **D** 5. **B** 6. **C**

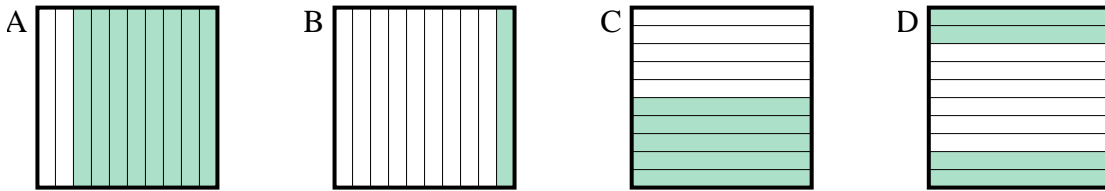


Bestimme, welcher Buchstabe die Frage richtig beantwortet.

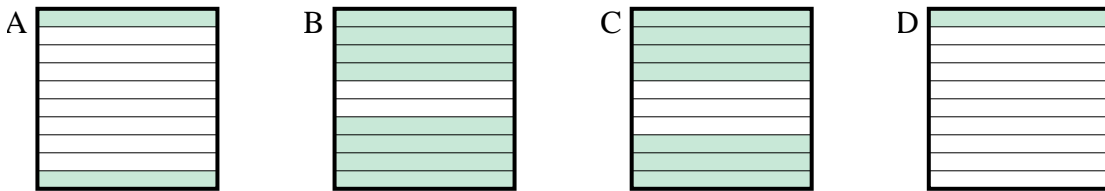
1) Which 10×10 grid is shaded to represent the decimal number that, when added to 0,96, results in a total of 1,00?



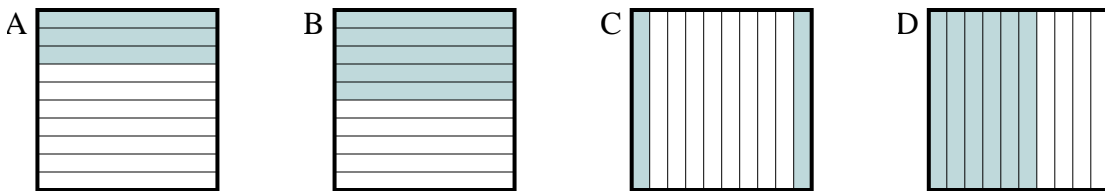
2) Which 10×1 grid is shaded to represent the decimal number that, when added to 0,6, results in a total of 1,00?



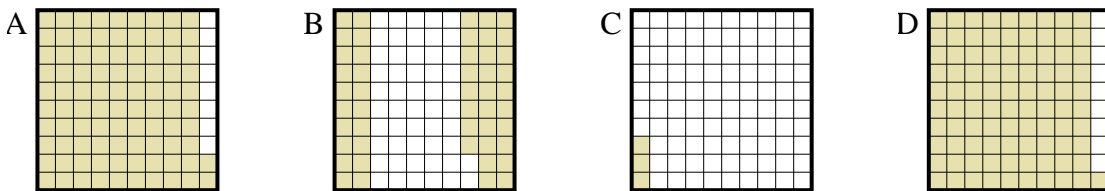
3) Which 10×1 grid is shaded to represent the decimal number that, when added to 0,2, results in a total of 1,00?



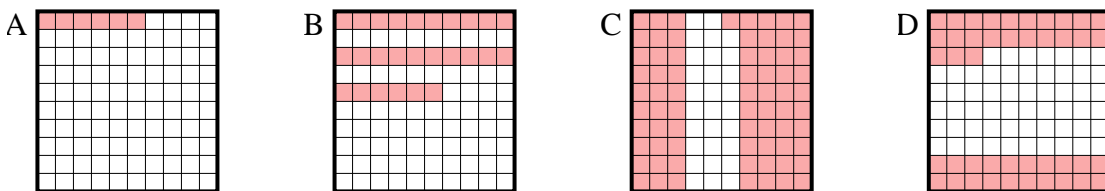
4) Which 10×1 grid is shaded to represent the decimal number that, when added to 0,8, results in a total of 1,00?



5) Which 10×10 grid is shaded to represent the decimal number that, when added to 0,97, results in a total of 1,00?

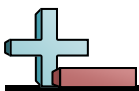


6) Which 10×10 grid is shaded to represent the decimal number that, when added to 0,94, results in a total of 1,00?



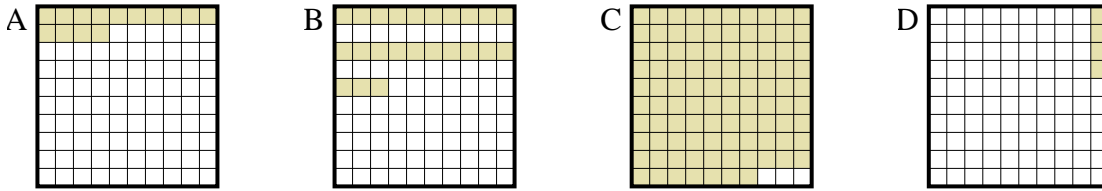
Antworten

1. _____
2. _____
3. _____
4. _____
5. _____
6. _____

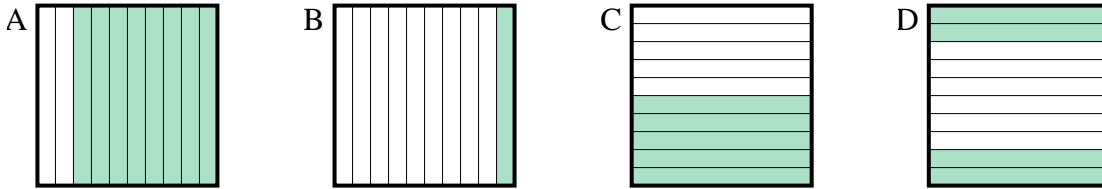


Bestimme, welcher Buchstabe die Frage richtig beantwortet.

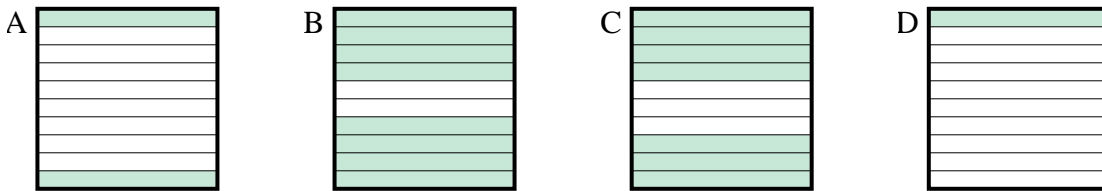
- 1) Which 10×10 grid is shaded to represent the decimal number that, when added to 0,96, results in a total of 1,00?



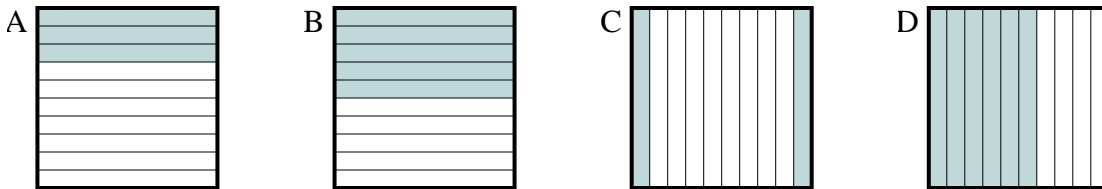
- 2) Which 10×1 grid is shaded to represent the decimal number that, when added to 0,6, results in a total of 1,00?



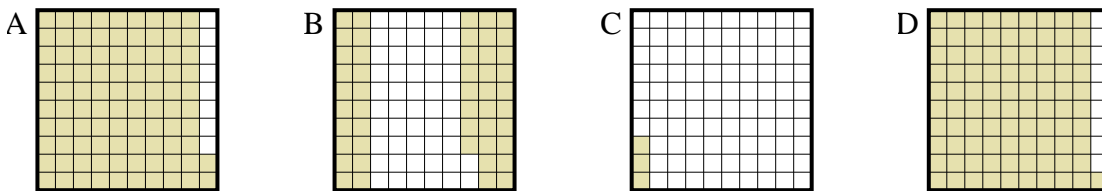
- 3) Which 10×1 grid is shaded to represent the decimal number that, when added to 0,2, results in a total of 1,00?



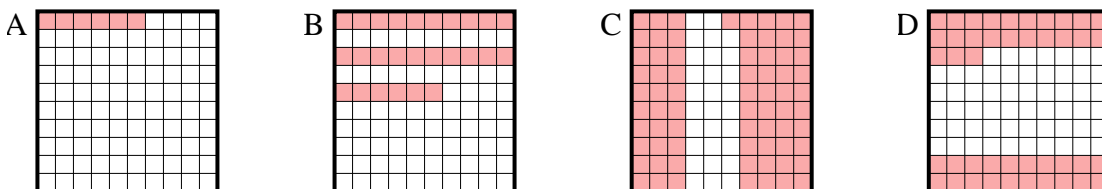
- 4) Which 10×1 grid is shaded to represent the decimal number that, when added to 0,8, results in a total of 1,00?



- 5) Which 10×10 grid is shaded to represent the decimal number that, when added to 0,97, results in a total of 1,00?



- 6) Which 10×10 grid is shaded to represent the decimal number that, when added to 0,94, results in a total of 1,00?

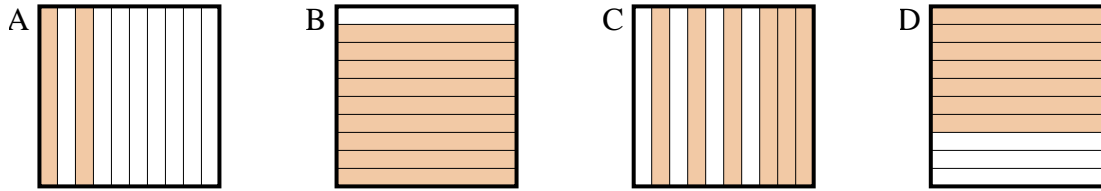
Antworten

1. **D**
2. **D**
3. **B**
4. **C**
5. **C**
6. **A**

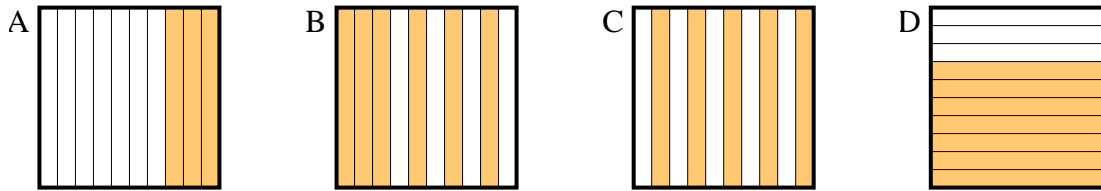


Bestimme, welcher Buchstabe die Frage richtig beantwortet.

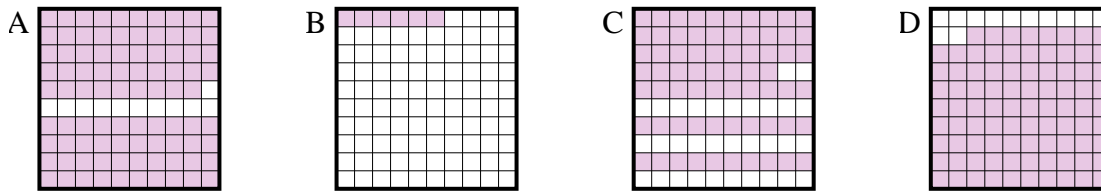
1) Which 10×1 grid is shaded to represent the decimal number that, when added to 0,8, results in a total of 1,00?



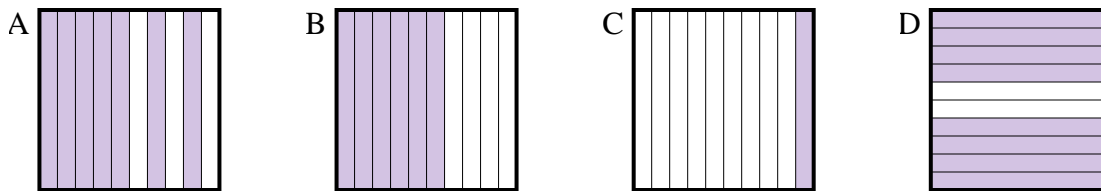
2) Which 10×1 grid is shaded to represent the decimal number that, when added to 0,4, results in a total of 1,00?



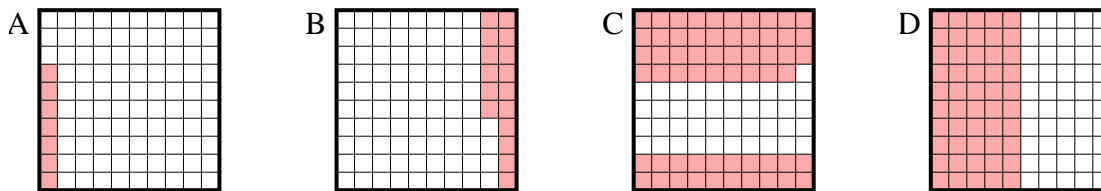
3) Which 10×10 grid is shaded to represent the decimal number that, when added to 0,94, results in a total of 1,00?



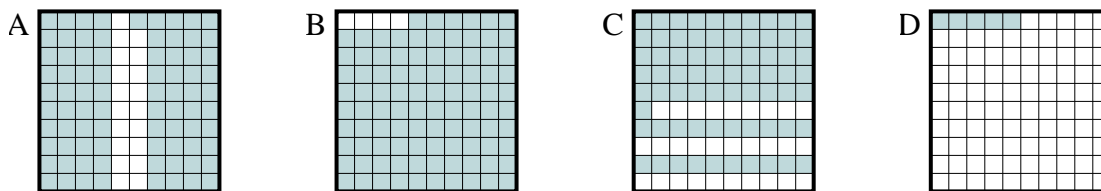
4) Which 10×1 grid is shaded to represent the decimal number that, when added to 0,3, results in a total of 1,00?



5) Which 10×10 grid is shaded to represent the decimal number that, when added to 0,93, results in a total of 1,00?

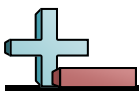


6) Which 10×10 grid is shaded to represent the decimal number that, when added to 0,95, results in a total of 1,00?



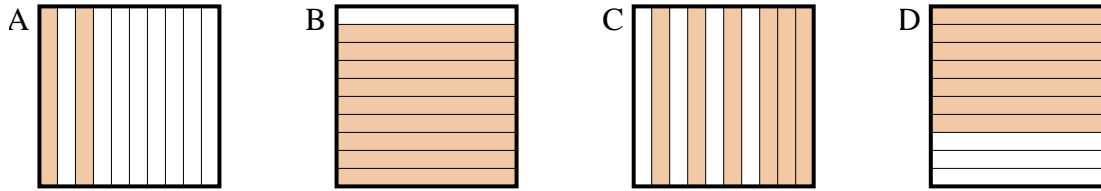
Antworten

1. _____
2. _____
3. _____
4. _____
5. _____
6. _____

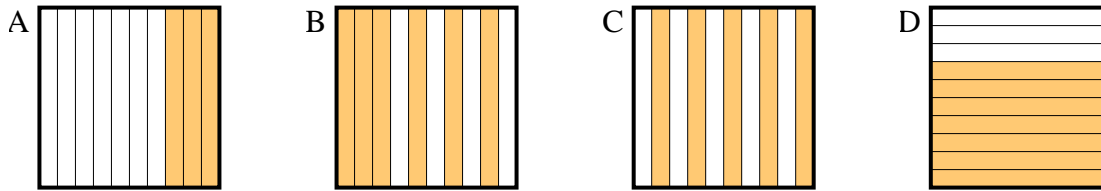


Bestimme, welcher Buchstabe die Frage richtig beantwortet.

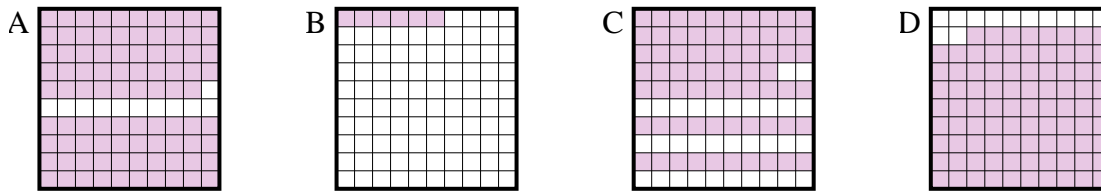
1) Which 10×1 grid is shaded to represent the decimal number that, when added to 0,8, results in a total of 1,00?



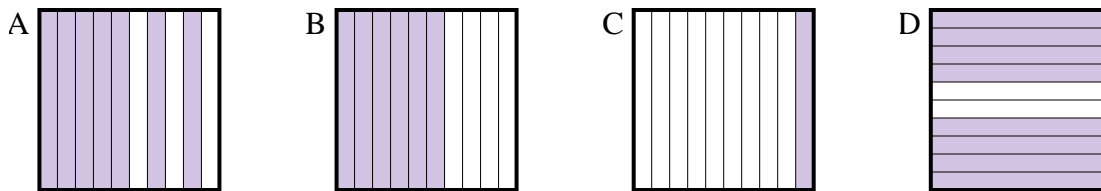
2) Which 10×1 grid is shaded to represent the decimal number that, when added to 0,4, results in a total of 1,00?



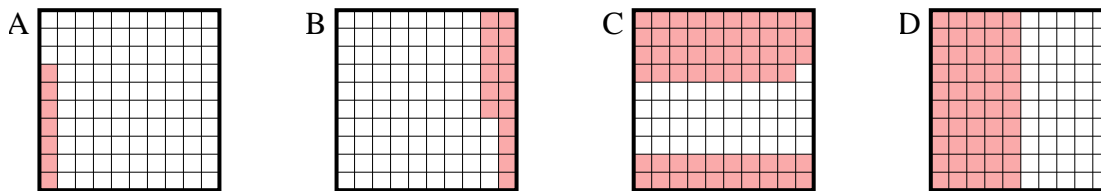
3) Which 10×10 grid is shaded to represent the decimal number that, when added to 0,94, results in a total of 1,00?



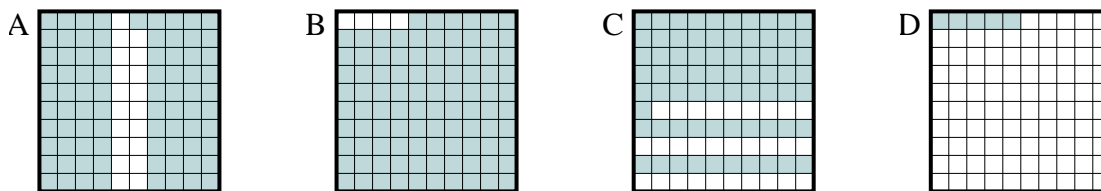
4) Which 10×1 grid is shaded to represent the decimal number that, when added to 0,3, results in a total of 1,00?



5) Which 10×10 grid is shaded to represent the decimal number that, when added to 0,93, results in a total of 1,00?



6) Which 10×10 grid is shaded to represent the decimal number that, when added to 0,95, results in a total of 1,00?



Antworten

1. **A**

2. **B**

3. **B**

4. **A**

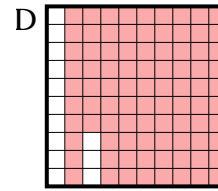
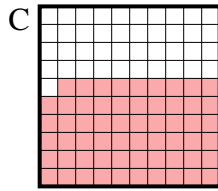
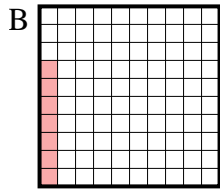
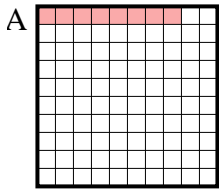
5. **A**

6. **D**

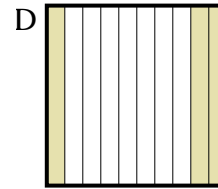
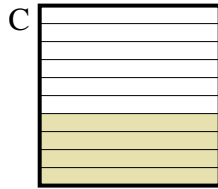
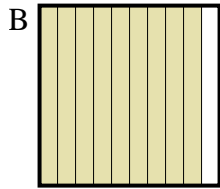
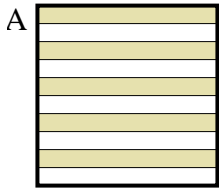


Bestimme, welcher Buchstabe die Frage richtig beantwortet.

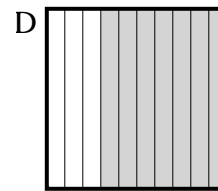
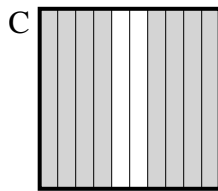
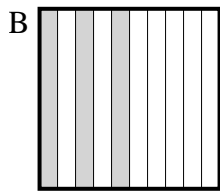
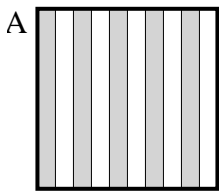
1) Which 10×10 grid is shaded to represent the decimal number that, when added to 0,92, results in a total of 1,00?



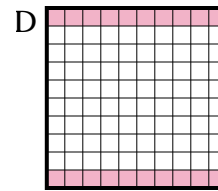
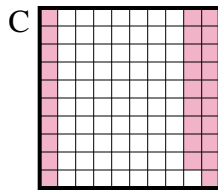
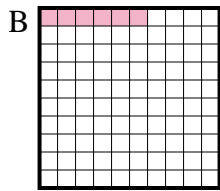
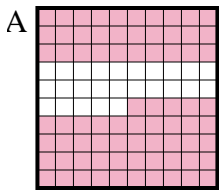
2) Which 10×1 grid is shaded to represent the decimal number that, when added to 0,7, results in a total of 1,00?



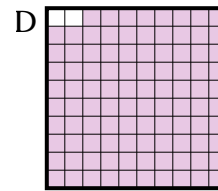
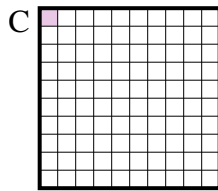
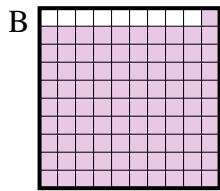
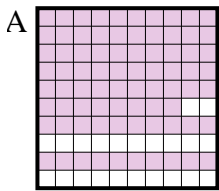
3) Which 10×1 grid is shaded to represent the decimal number that, when added to 0,3, results in a total of 1,00?



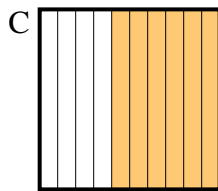
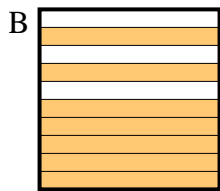
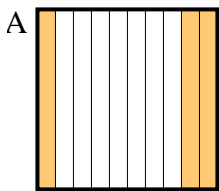
4) Which 10×10 grid is shaded to represent the decimal number that, when added to 0,94, results in a total of 1,00?



5) Which 10×10 grid is shaded to represent the decimal number that, when added to 0,99, results in a total of 1,00?



6) Which 10×1 grid is shaded to represent the decimal number that, when added to 0,1, results in a total of 1,00?



Antworten

1. _____

2. _____

3. _____

4. _____

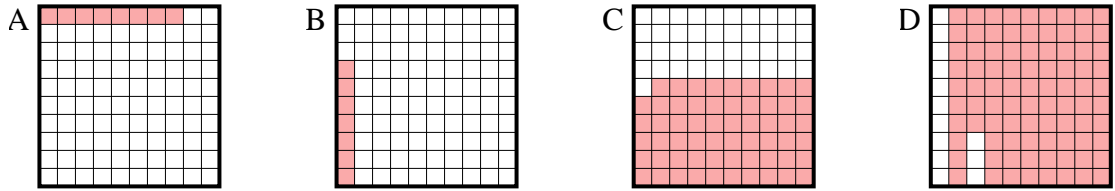
5. _____

6. _____

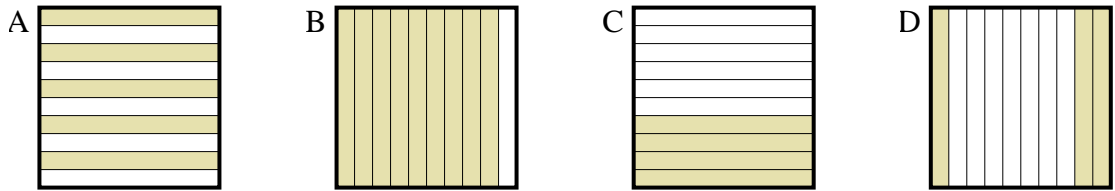


Bestimme, welcher Buchstabe die Frage richtig beantwortet.

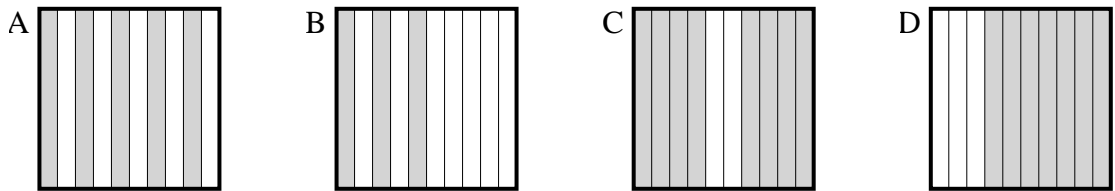
1) Which 10×10 grid is shaded to represent the decimal number that, when added to 0,92, results in a total of 1,00?



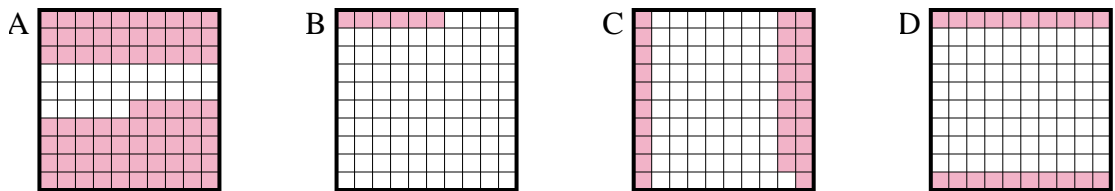
2) Which 10×1 grid is shaded to represent the decimal number that, when added to 0,7, results in a total of 1,00?



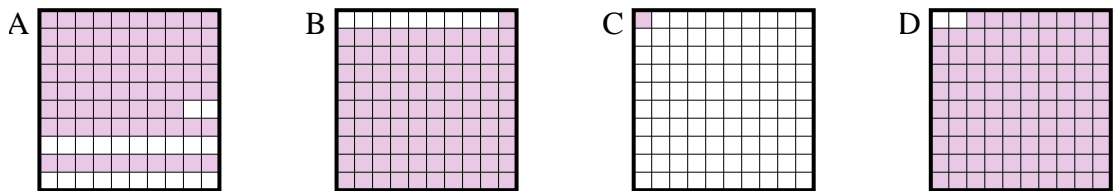
3) Which 10×1 grid is shaded to represent the decimal number that, when added to 0,3, results in a total of 1,00?



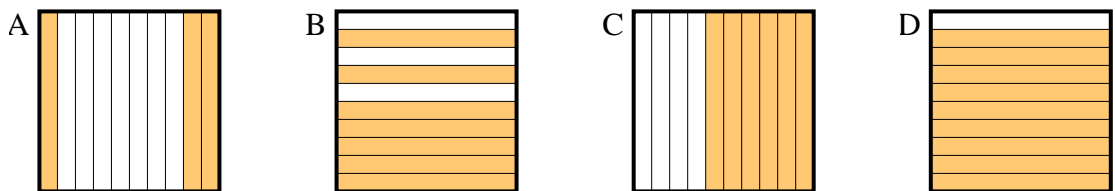
4) Which 10×10 grid is shaded to represent the decimal number that, when added to 0,94, results in a total of 1,00?



5) Which 10×10 grid is shaded to represent the decimal number that, when added to 0,99, results in a total of 1,00?



6) Which 10×1 grid is shaded to represent the decimal number that, when added to 0,1, results in a total of 1,00?



Antworten

1. **A**

2. **D**

3. **D**

4. **B**

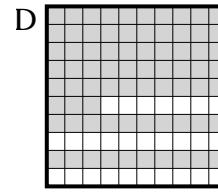
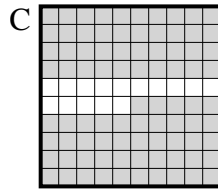
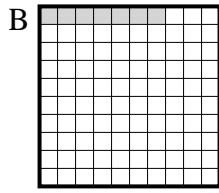
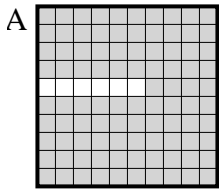
5. **C**

6. **D**

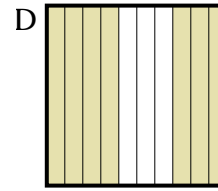
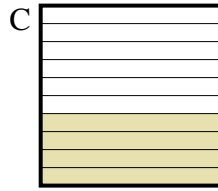
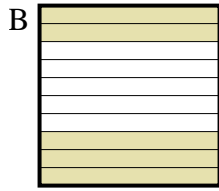
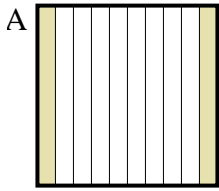


Bestimme, welcher Buchstabe die Frage richtig beantwortet.

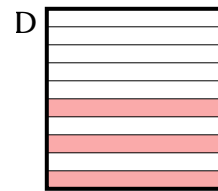
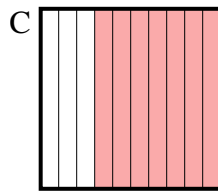
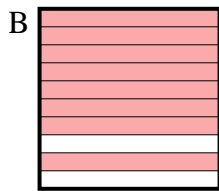
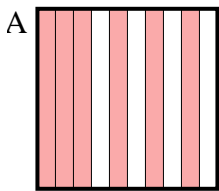
- 1) Which 10×10 grid is shaded to represent the decimal number that, when added to 0,93, results in a total of 1,00?



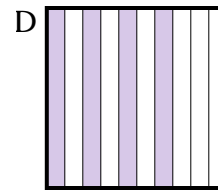
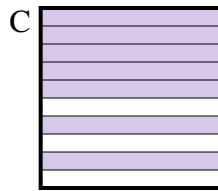
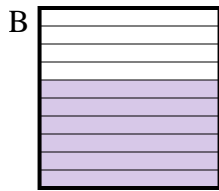
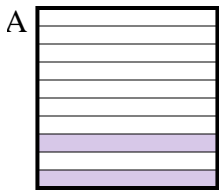
- 2) Which 10×1 grid is shaded to represent the decimal number that, when added to 0,6, results in a total of 1,00?



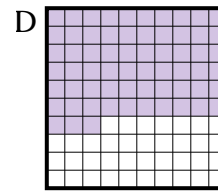
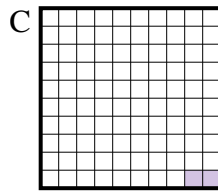
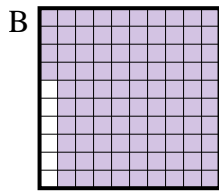
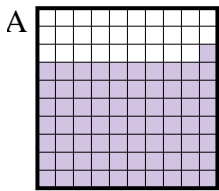
- 3) Which 10×1 grid is shaded to represent the decimal number that, when added to 0,4, results in a total of 1,00?



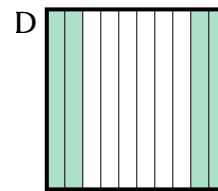
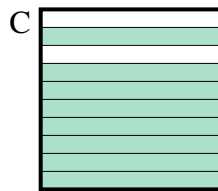
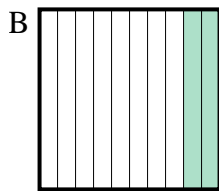
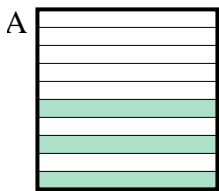
- 4) Which 10×1 grid is shaded to represent the decimal number that, when added to 0,3, results in a total of 1,00?



- 5) Which 10×10 grid is shaded to represent the decimal number that, when added to 0,98, results in a total of 1,00?



- 6) Which 10×1 grid is shaded to represent the decimal number that, when added to 0,7, results in a total of 1,00?

Antworten

1. _____

2. _____

3. _____

4. _____

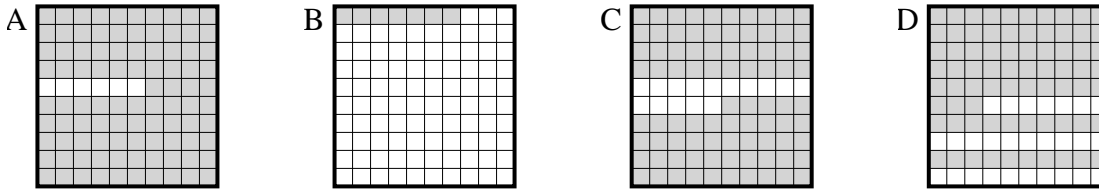
5. _____

6. _____

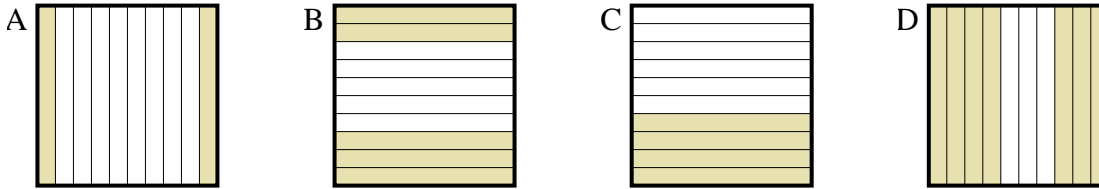


Bestimme, welcher Buchstabe die Frage richtig beantwortet.

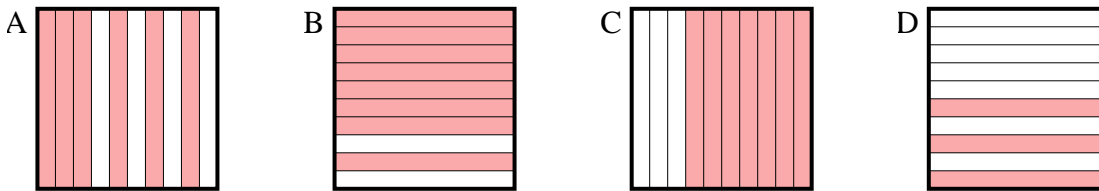
- 1) Which 10×10 grid is shaded to represent the decimal number that, when added to 0,93, results in a total of 1,00?



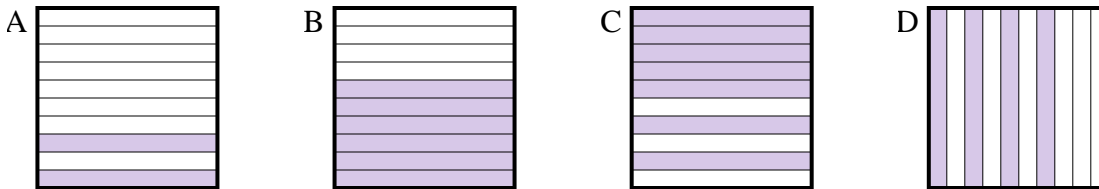
- 2) Which 10×1 grid is shaded to represent the decimal number that, when added to 0,6, results in a total of 1,00?



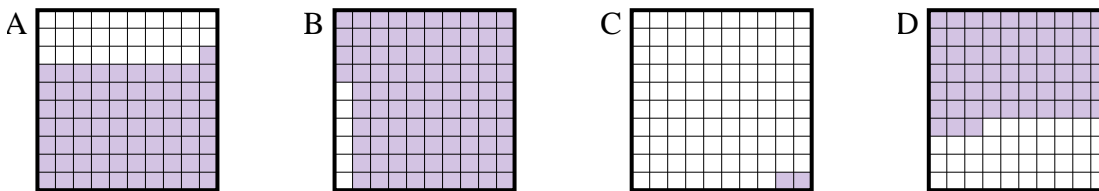
- 3) Which 10×1 grid is shaded to represent the decimal number that, when added to 0,4, results in a total of 1,00?



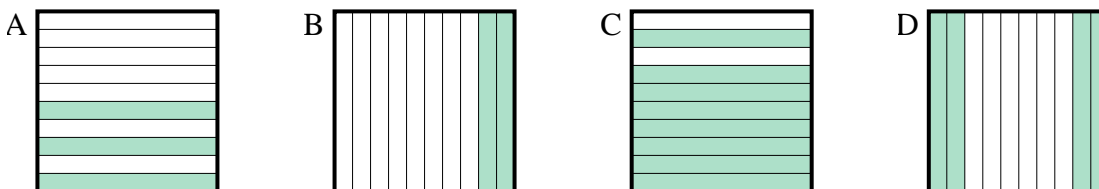
- 4) Which 10×1 grid is shaded to represent the decimal number that, when added to 0,3, results in a total of 1,00?



- 5) Which 10×10 grid is shaded to represent the decimal number that, when added to 0,98, results in a total of 1,00?



- 6) Which 10×1 grid is shaded to represent the decimal number that, when added to 0,7, results in a total of 1,00?

Antworten

1. **B**
 2. **C**
 3. **A**
 4. **C**
 5. **C**
 6. **A**