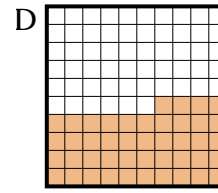
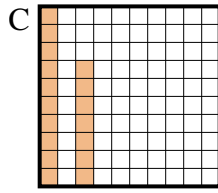
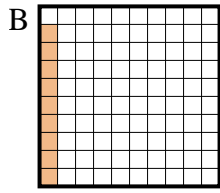
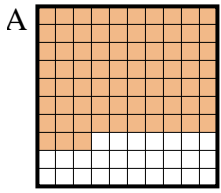


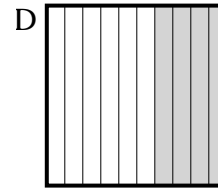
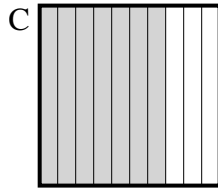
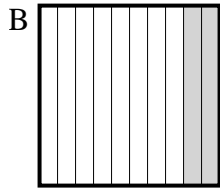
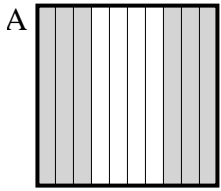


Bestimme, welcher Buchstabe die Frage richtig beantwortet.

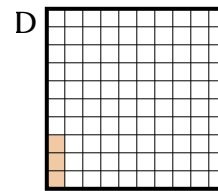
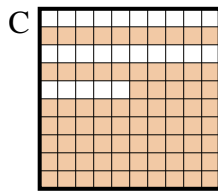
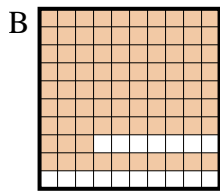
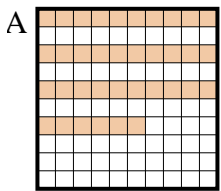
- 1) Which  $10 \times 10$  grid is shaded to represent the decimal number that, when added to 0,91, results in a total of 1,00?



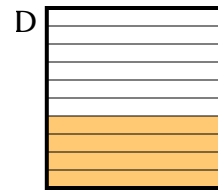
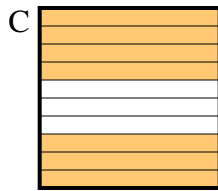
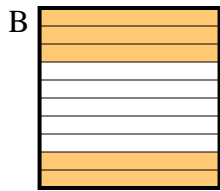
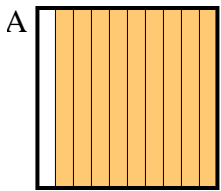
- 2) Which  $10 \times 1$  grid is shaded to represent the decimal number that, when added to 0,3, results in a total of 1,00?



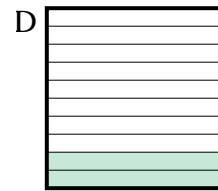
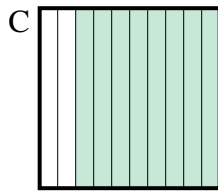
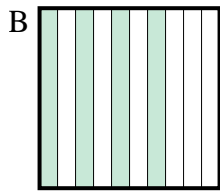

- 3) Which  $10 \times 10$  grid is shaded to represent the decimal number that, when added to 0,97, results in a total of 1,00?



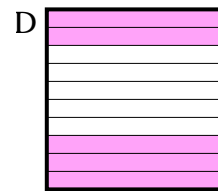
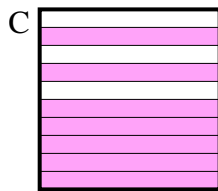
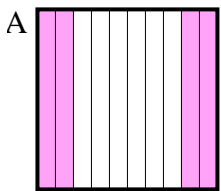
- 4) Which  $10 \times 1$  grid is shaded to represent the decimal number that, when added to 0,5, results in a total of 1,00?



- 5) Which  $10 \times 1$  grid is shaded to represent the decimal number that, when added to 0,2, results in a total of 1,00?



- 6) Which  $10 \times 1$  grid is shaded to represent the decimal number that, when added to 0,7, results in a total of 1,00?

Antworten

1. \_\_\_\_\_

2. \_\_\_\_\_

3. \_\_\_\_\_

4. \_\_\_\_\_

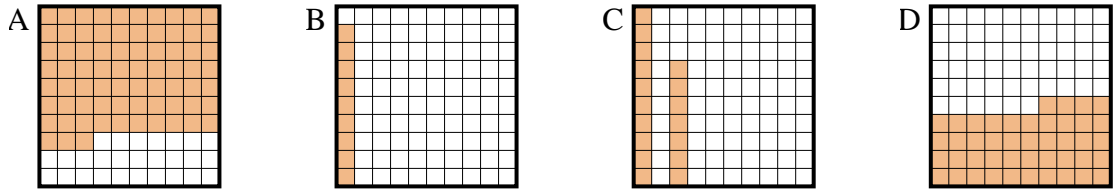
5. \_\_\_\_\_

6. \_\_\_\_\_



Bestimme, welcher Buchstabe die Frage richtig beantwortet.

1) Which 10×10 grid is shaded to represent the decimal number that, when added to 0,91, results in a total of 1,00?



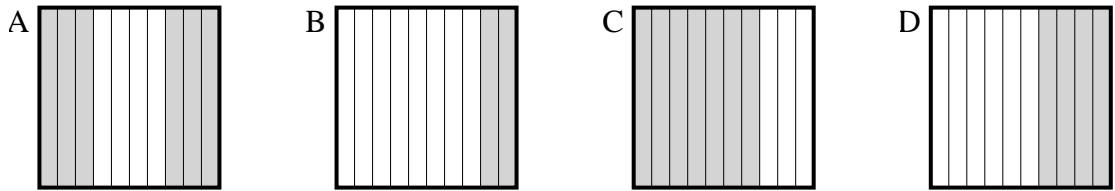
Antworten

1.     **B**    

2.     **C**    

3.     **D**    

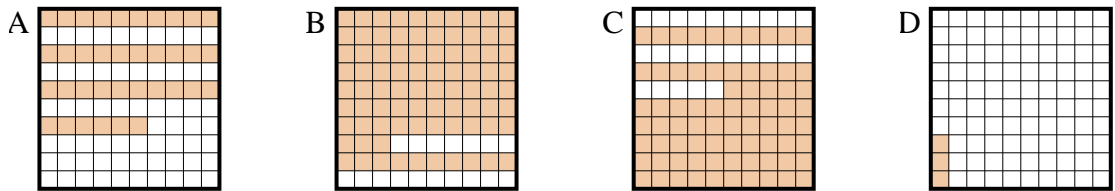
2) Which 10×1 grid is shaded to represent the decimal number that, when added to 0,3, results in a total of 1,00?



4.     **B**    

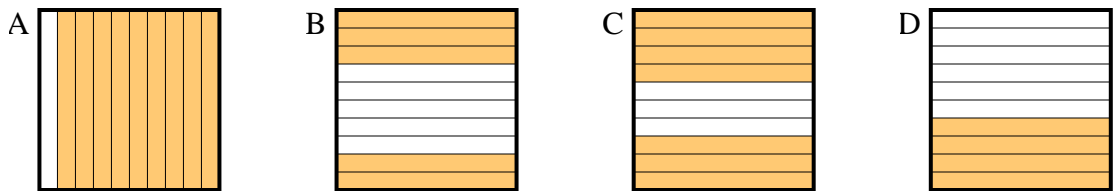
5.     **C**    

3) Which 10×10 grid is shaded to represent the decimal number that, when added to 0,97, results in a total of 1,00?

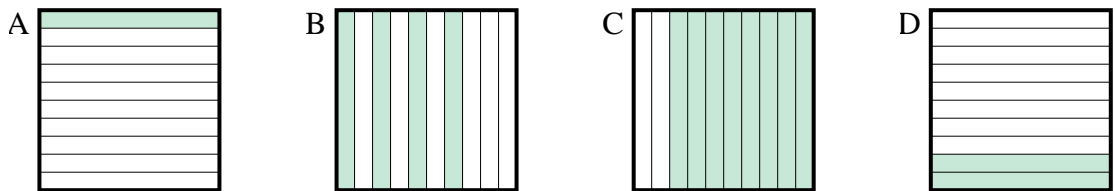


6.     **B**    

4) Which 10×1 grid is shaded to represent the decimal number that, when added to 0,5, results in a total of 1,00?



5) Which 10×1 grid is shaded to represent the decimal number that, when added to 0,2, results in a total of 1,00?



6) Which 10×1 grid is shaded to represent the decimal number that, when added to 0,7, results in a total of 1,00?

