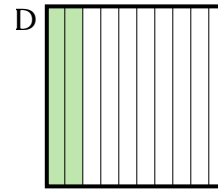
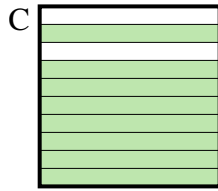
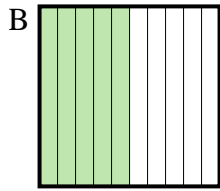
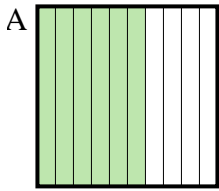


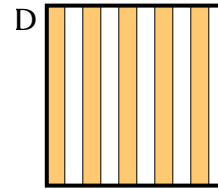
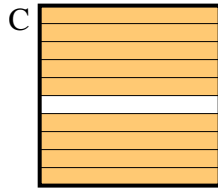
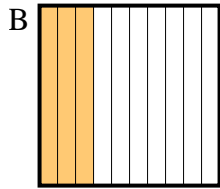
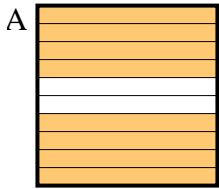


Bestimme, welcher Buchstabe die Frage richtig beantwortet.

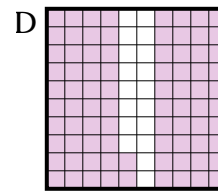
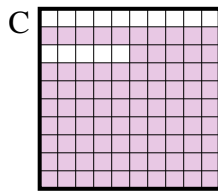
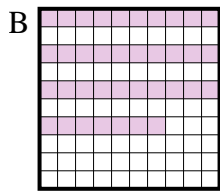
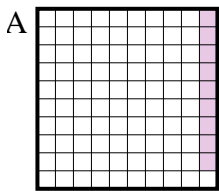
1) Which  $10 \times 1$  grid is shaded to represent the decimal number that, when added to 0,5, results in a total of 1,00?



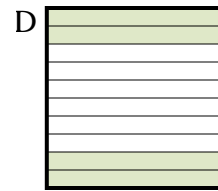
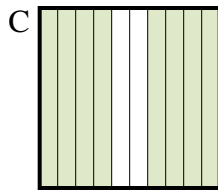
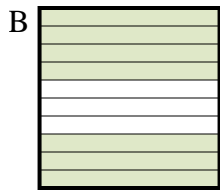
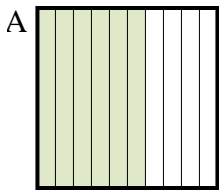
2) Which  $10 \times 1$  grid is shaded to represent the decimal number that, when added to 0,7, results in a total of 1,00?



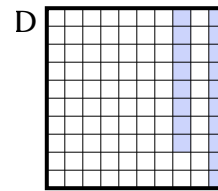
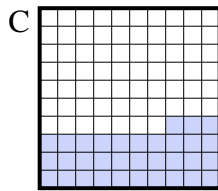
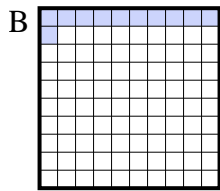
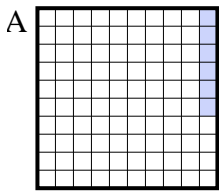
3) Which  $10 \times 10$  grid is shaded to represent the decimal number that, when added to 0,91, results in a total of 1,00?



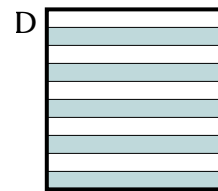
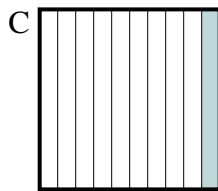
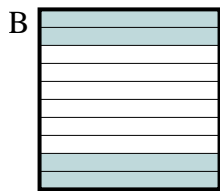
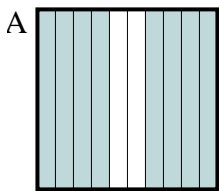
4) Which  $10 \times 1$  grid is shaded to represent the decimal number that, when added to 0,3, results in a total of 1,00?



5) Which  $10 \times 10$  grid is shaded to represent the decimal number that, when added to 0,94, results in a total of 1,00?



6) Which  $10 \times 1$  grid is shaded to represent the decimal number that, when added to 0,6, results in a total of 1,00?



Antworten

1. \_\_\_\_\_

2. \_\_\_\_\_

3. \_\_\_\_\_

4. \_\_\_\_\_

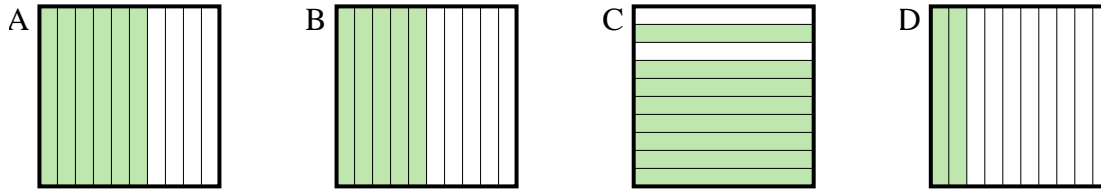
5. \_\_\_\_\_

6. \_\_\_\_\_

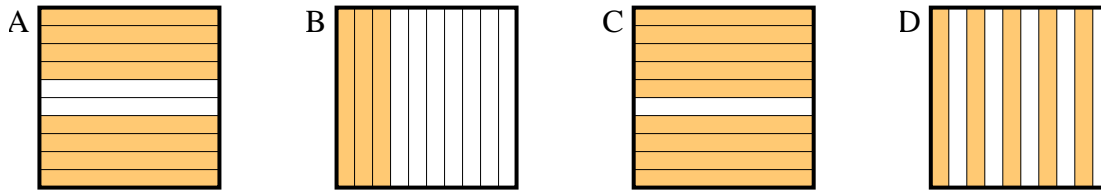


Bestimme, welcher Buchstabe die Frage richtig beantwortet.

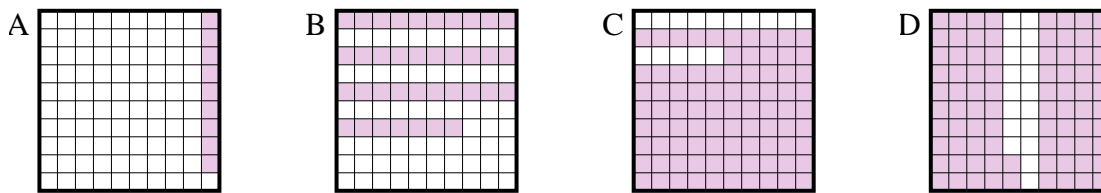
- 1) Which  $10 \times 1$  grid is shaded to represent the decimal number that, when added to 0,5, results in a total of 1,00?



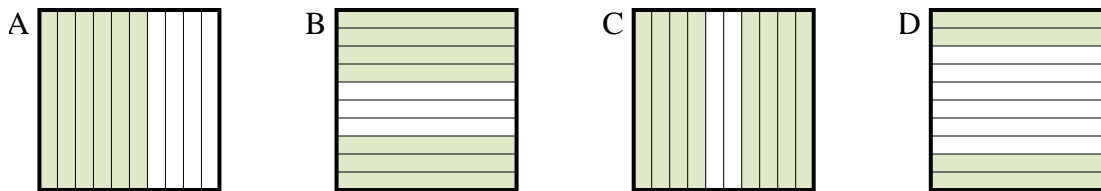
- 2) Which  $10 \times 1$  grid is shaded to represent the decimal number that, when added to 0,7, results in a total of 1,00?



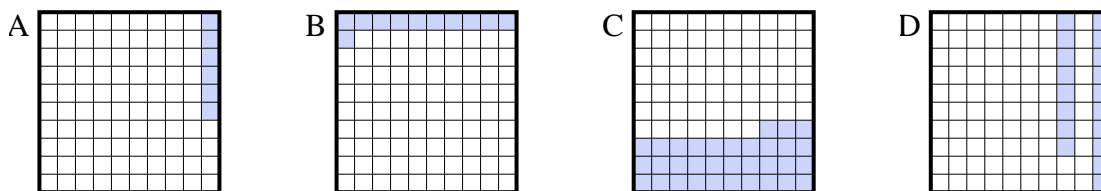
- 3) Which  $10 \times 10$  grid is shaded to represent the decimal number that, when added to 0,91, results in a total of 1,00?



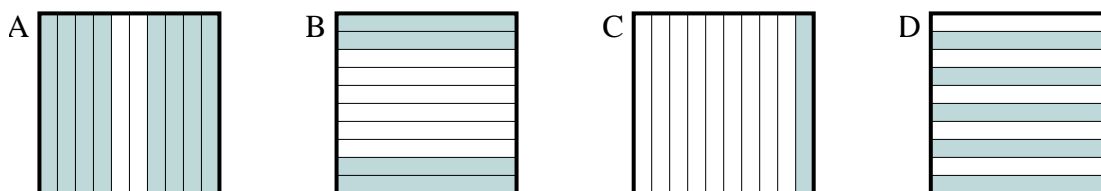
- 4) Which  $10 \times 1$  grid is shaded to represent the decimal number that, when added to 0,3, results in a total of 1,00?



- 5) Which  $10 \times 10$  grid is shaded to represent the decimal number that, when added to 0,94, results in a total of 1,00?



- 6) Which  $10 \times 1$  grid is shaded to represent the decimal number that, when added to 0,6, results in a total of 1,00?

Antworten

1.     **B**      
 2.     **B**      
 3.     **A**      
 4.     **B**      
 5.     **A**      
 6.     **B**