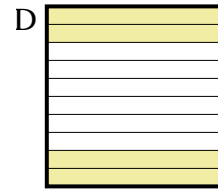
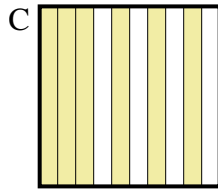

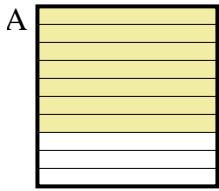


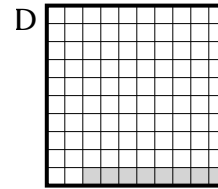
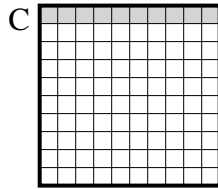
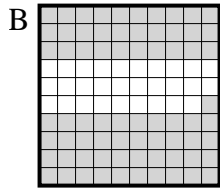
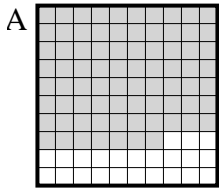


Bestimme, welcher Buchstabe die Frage richtig beantwortet.

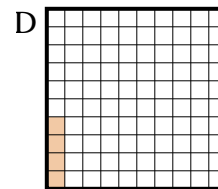
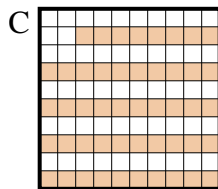
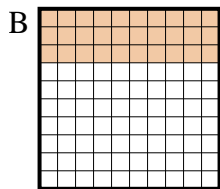
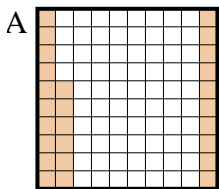
1) Which 10×1 grid is shaded to represent the decimal number that, when added to 0,3, results in a total of 1,00?



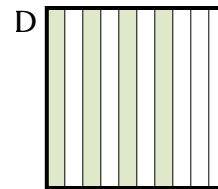
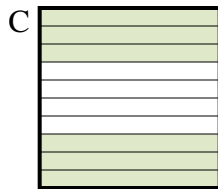
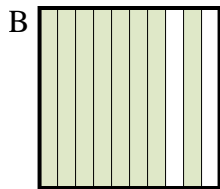

2) Which 10×10 grid is shaded to represent the decimal number that, when added to 0,92, results in a total of 1,00?



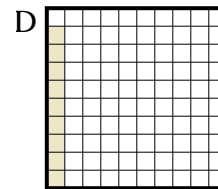
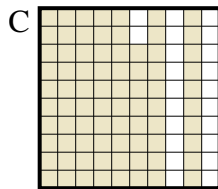
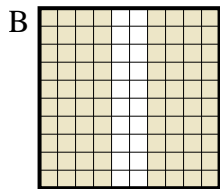
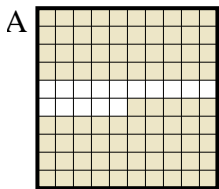
3) Which 10×10 grid is shaded to represent the decimal number that, when added to 0,96, results in a total of 1,00?



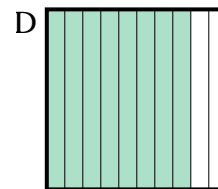
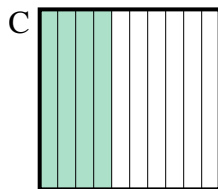
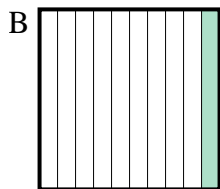
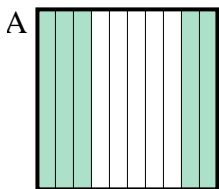
4) Which 10×1 grid is shaded to represent the decimal number that, when added to 0,8, results in a total of 1,00?



5) Which 10×10 grid is shaded to represent the decimal number that, when added to 0,91, results in a total of 1,00?



6) Which 10×1 grid is shaded to represent the decimal number that, when added to 0,2, results in a total of 1,00?



Antworten

1. _____

2. _____

3. _____

4. _____

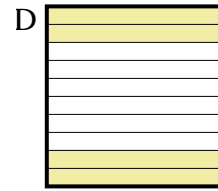
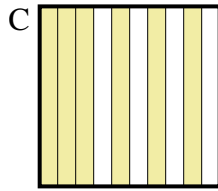

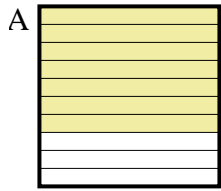
5. _____

6. _____

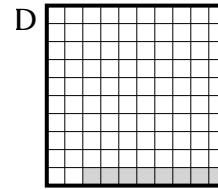
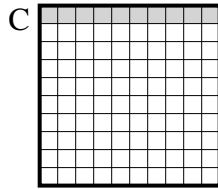
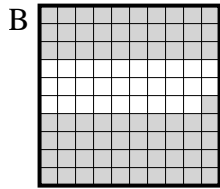
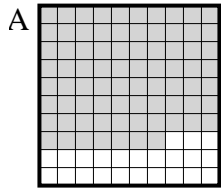


Bestimme, welcher Buchstabe die Frage richtig beantwortet.

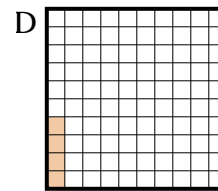
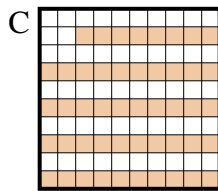
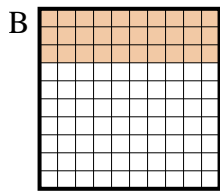
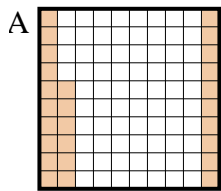
1) Which 10×1 grid is shaded to represent the decimal number that, when added to 0,3, results in a total of 1,00?



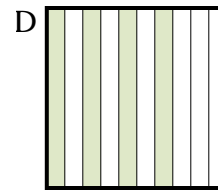
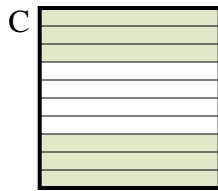
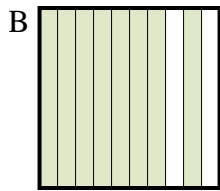

2) Which 10×10 grid is shaded to represent the decimal number that, when added to 0,92, results in a total of 1,00?



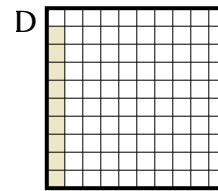
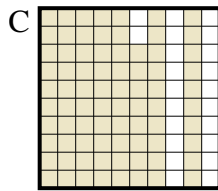
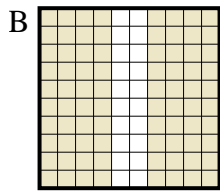
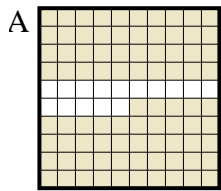
3) Which 10×10 grid is shaded to represent the decimal number that, when added to 0,96, results in a total of 1,00?



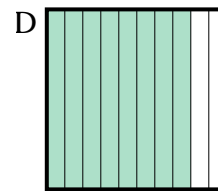
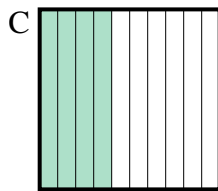
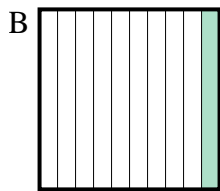
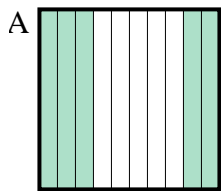
4) Which 10×1 grid is shaded to represent the decimal number that, when added to 0,8, results in a total of 1,00?



5) Which 10×10 grid is shaded to represent the decimal number that, when added to 0,91, results in a total of 1,00?



6) Which 10×1 grid is shaded to represent the decimal number that, when added to 0,2, results in a total of 1,00?



Antworten

1. **A**

2. **D**

3. **D**

4. **A**

5. **D**

6. **D**