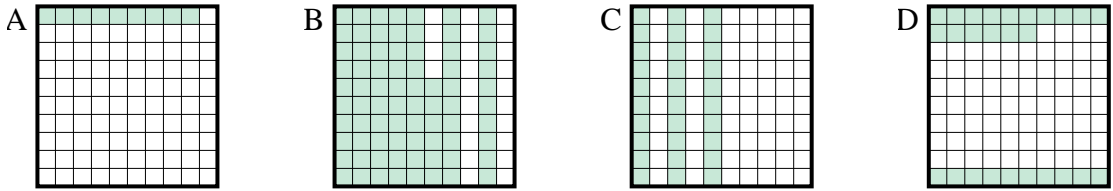
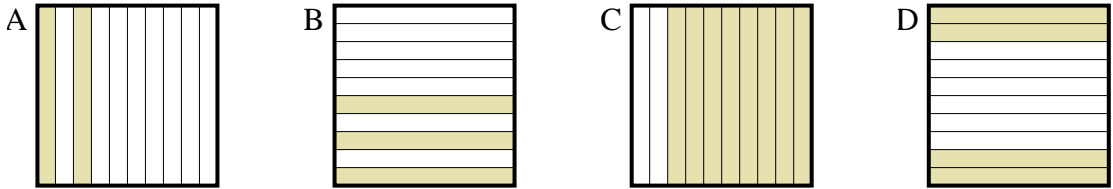


Bestimme, welcher Buchstabe die Frage richtig beantwortet.

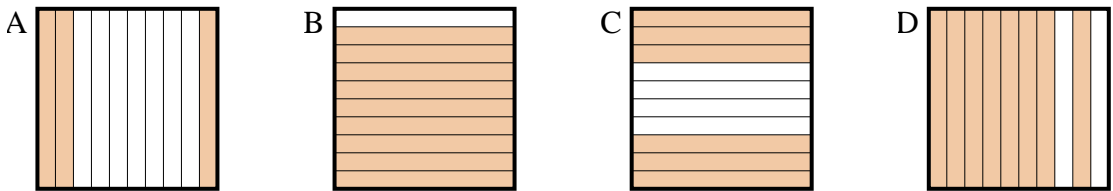
1) Which 10×10 grid is shaded to represent the decimal number that, when added to 0,91, results in a total of 1,00?



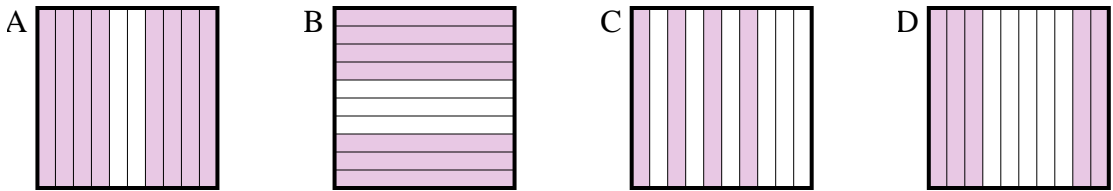
2) Which 10×1 grid is shaded to represent the decimal number that, when added to 0,6, results in a total of 1,00?



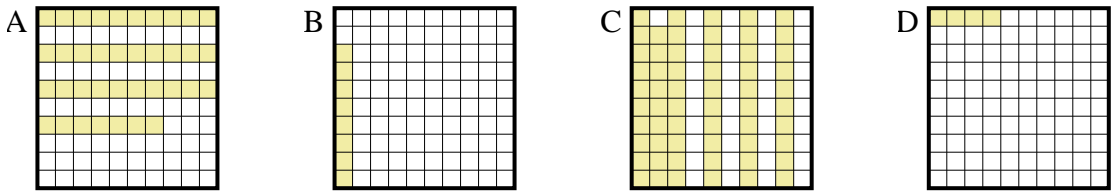
3) Which 10×1 grid is shaded to represent the decimal number that, when added to 0,4, results in a total of 1,00?



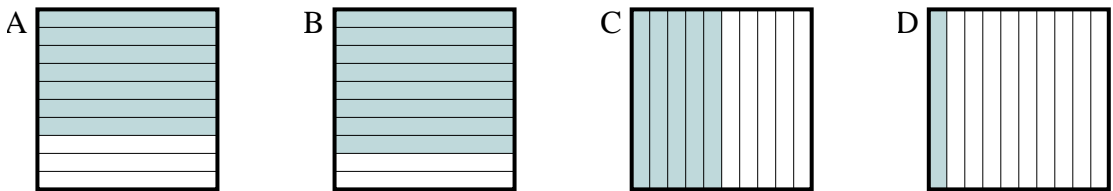
4) Which 10×1 grid is shaded to represent the decimal number that, when added to 0,2, results in a total of 1,00?



5) Which 10×10 grid is shaded to represent the decimal number that, when added to 0,96, results in a total of 1,00?



6) Which 10×1 grid is shaded to represent the decimal number that, when added to 0,5, results in a total of 1,00?



Antworten

1. _____

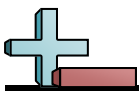
2. _____

3. _____

4. _____

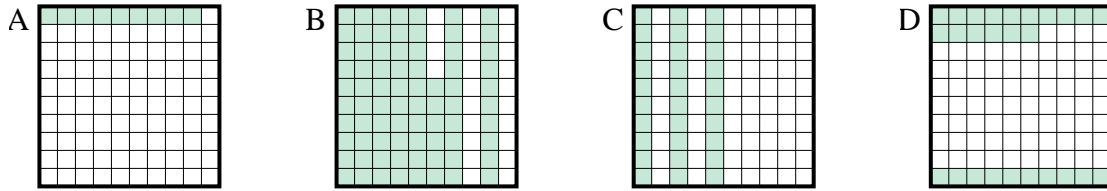
5. _____

6. _____

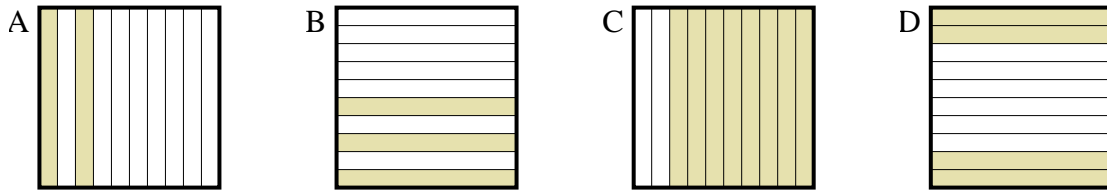


Bestimme, welcher Buchstabe die Frage richtig beantwortet.

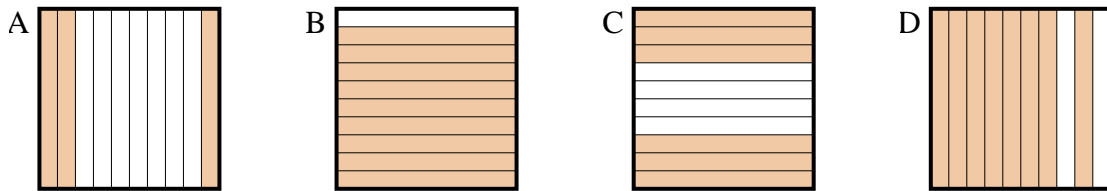
1) Which 10×10 grid is shaded to represent the decimal number that, when added to 0,91, results in a total of 1,00?



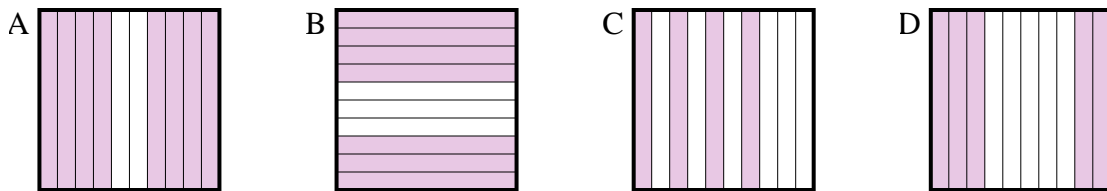
2) Which 10×1 grid is shaded to represent the decimal number that, when added to 0,6, results in a total of 1,00?



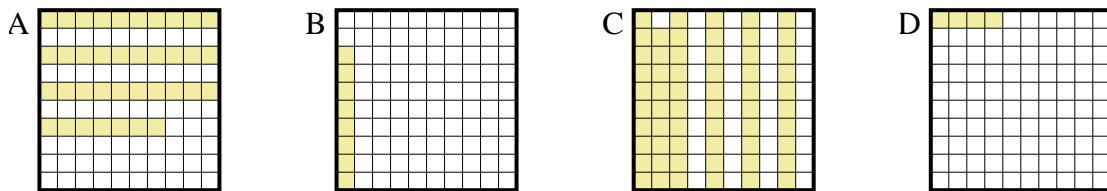
3) Which 10×1 grid is shaded to represent the decimal number that, when added to 0,4, results in a total of 1,00?



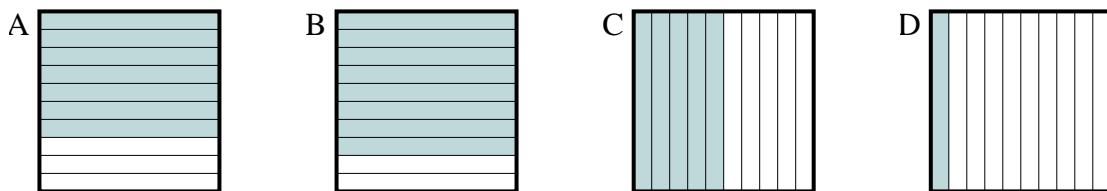
4) Which 10×1 grid is shaded to represent the decimal number that, when added to 0,2, results in a total of 1,00?



5) Which 10×10 grid is shaded to represent the decimal number that, when added to 0,96, results in a total of 1,00?



6) Which 10×1 grid is shaded to represent the decimal number that, when added to 0,5, results in a total of 1,00?



Antworten

1. **A**

2. **D**

3. **C**

4. **A**

5. **D**

6. **C**