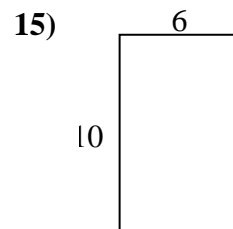
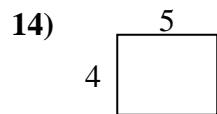
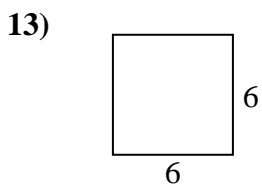
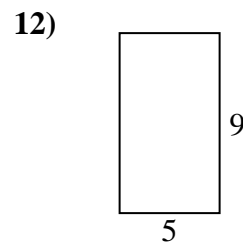
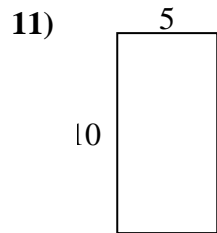
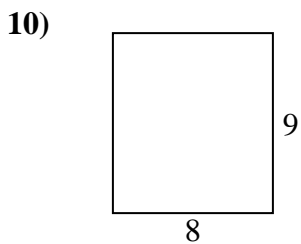
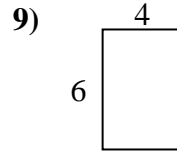
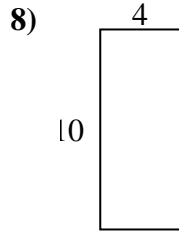
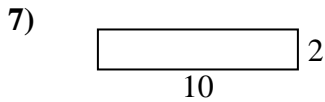
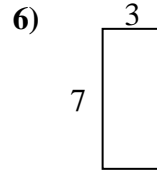
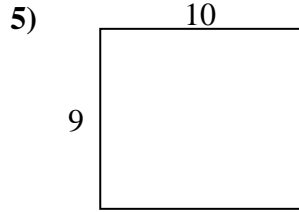
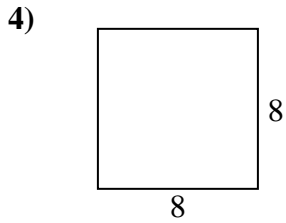
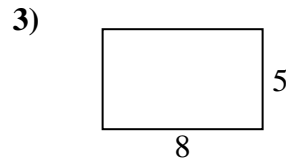
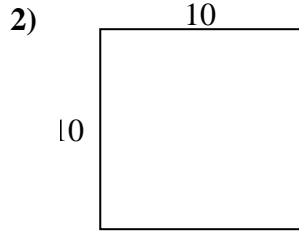
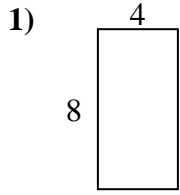




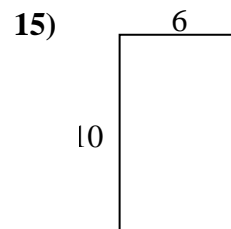
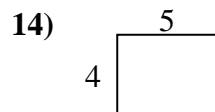
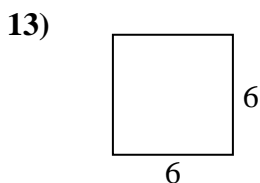
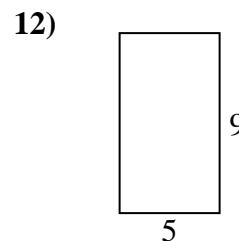
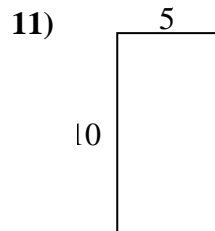
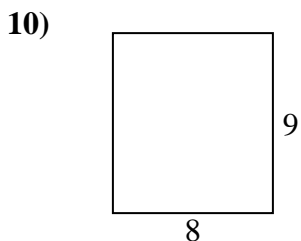
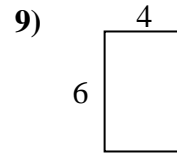
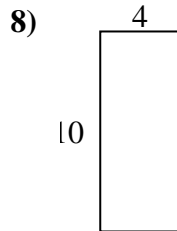
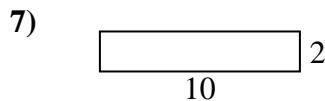
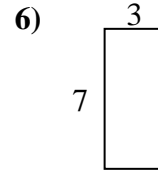
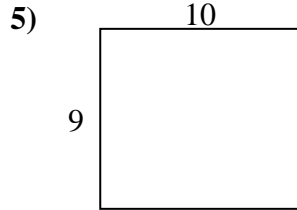
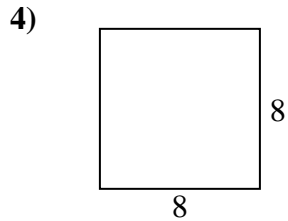
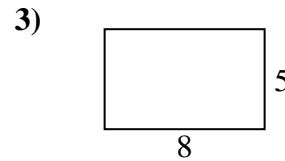
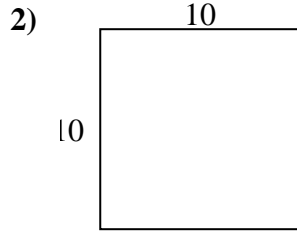
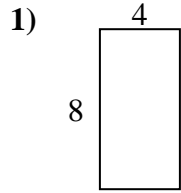
Bestimme den Umfang und die Fläche jeder Figur. Jede Figur ist in Zentimeter (cm). Nicht maßstäblich.

Antworten

1. \_\_\_\_\_
2. \_\_\_\_\_
3. \_\_\_\_\_
4. \_\_\_\_\_
5. \_\_\_\_\_
6. \_\_\_\_\_
7. \_\_\_\_\_
8. \_\_\_\_\_
9. \_\_\_\_\_
10. \_\_\_\_\_
11. \_\_\_\_\_
12. \_\_\_\_\_
13. \_\_\_\_\_
14. \_\_\_\_\_
15. \_\_\_\_\_



Bestimme den Umfang und die Fläche jeder Figur. Jede Figur ist in Zentimeter (cm). Nicht maßstäblich.

**Antworten**

1.	<u>24 cm</u>	<u>32 cm<sup>2</sup></u>
2.	<u>40 cm</u>	<u>100 cm<sup>2</sup></u>
3.	<u>26 cm</u>	<u>40 cm<sup>2</sup></u>
4.	<u>32 cm</u>	<u>64 cm<sup>2</sup></u>
5.	<u>38 cm</u>	<u>90 cm<sup>2</sup></u>
6.	<u>20 cm</u>	<u>21 cm<sup>2</sup></u>
7.	<u>24 cm</u>	<u>20 cm<sup>2</sup></u>
8.	<u>28 cm</u>	<u>40 cm<sup>2</sup></u>
9.	<u>20 cm</u>	<u>24 cm<sup>2</sup></u>
10.	<u>34 cm</u>	<u>72 cm<sup>2</sup></u>
11.	<u>30 cm</u>	<u>50 cm<sup>2</sup></u>
12.	<u>28 cm</u>	<u>45 cm<sup>2</sup></u>
13.	<u>24 cm</u>	<u>36 cm<sup>2</sup></u>
14.	<u>18 cm</u>	<u>20 cm<sup>2</sup></u>
15.	<u>32 cm</u>	<u>60 cm<sup>2</sup></u>