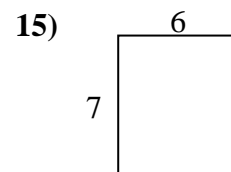
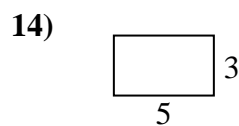
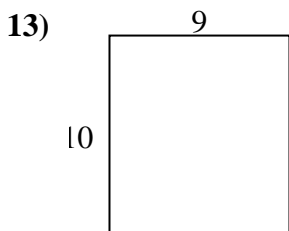
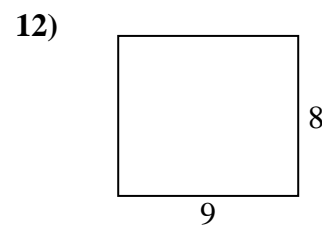
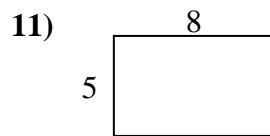
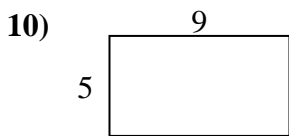
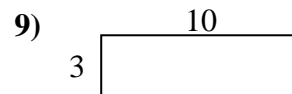
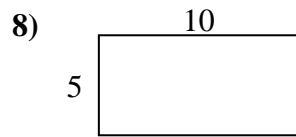
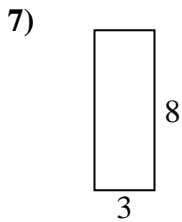
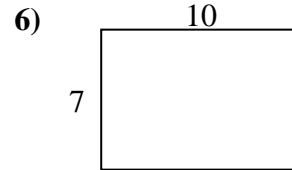
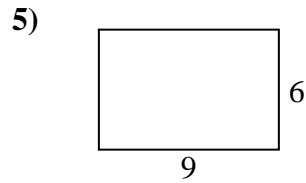
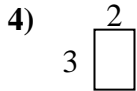
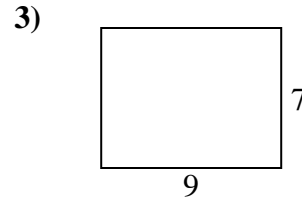
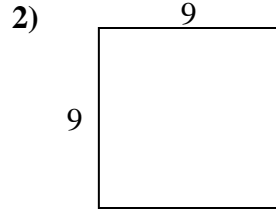
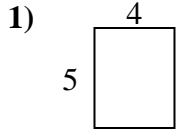




Bestimme den Umfang und die Fläche jeder Figur. Jede Figur ist in Zentimeter (cm).

Nicht maßstäblich.

Antworten

1. \_\_\_\_\_

2. \_\_\_\_\_

3. \_\_\_\_\_

4. \_\_\_\_\_

5. \_\_\_\_\_

6. \_\_\_\_\_

7. \_\_\_\_\_

8. \_\_\_\_\_

9. \_\_\_\_\_

10. \_\_\_\_\_

11. \_\_\_\_\_

12. \_\_\_\_\_

13. \_\_\_\_\_

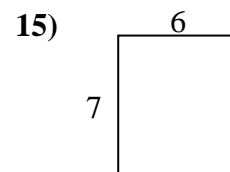
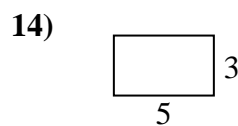
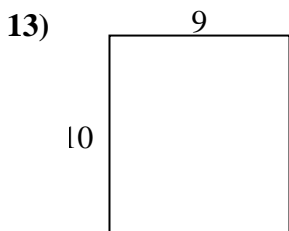
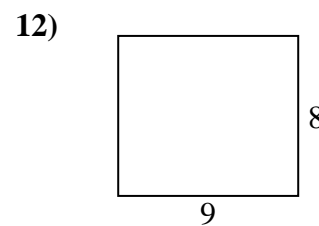
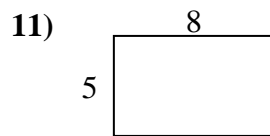
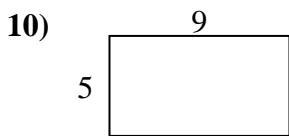
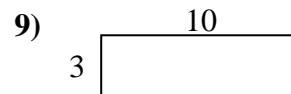
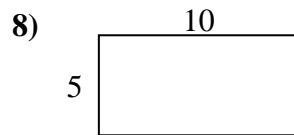
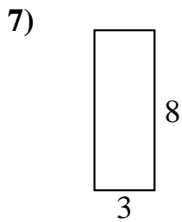
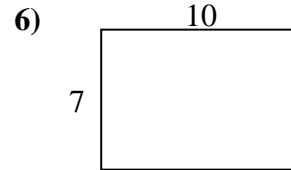
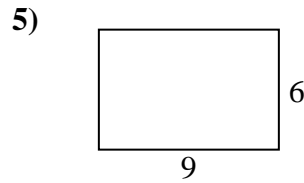
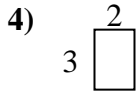
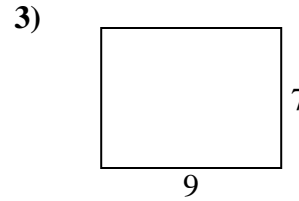
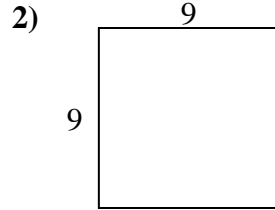
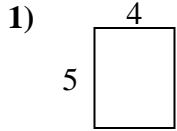
14. \_\_\_\_\_

15. \_\_\_\_\_



Bestimme den Umfang und die Fläche jeder Figur. Jede Figur ist in Zentimeter (cm).

Nicht maßstäblich.

Antworten

- |     |              |                          |
|-----|--------------|--------------------------|
| 1.  | <u>18 cm</u> | <u>20 cm<sup>2</sup></u> |
| 2.  | <u>36 cm</u> | <u>81 cm<sup>2</sup></u> |
| 3.  | <u>32 cm</u> | <u>63 cm<sup>2</sup></u> |
| 4.  | <u>10 cm</u> | <u>6 cm<sup>2</sup></u>  |
| 5.  | <u>30 cm</u> | <u>54 cm<sup>2</sup></u> |
| 6.  | <u>34 cm</u> | <u>70 cm<sup>2</sup></u> |
| 7.  | <u>22 cm</u> | <u>24 cm<sup>2</sup></u> |
| 8.  | <u>30 cm</u> | <u>50 cm<sup>2</sup></u> |
| 9.  | <u>26 cm</u> | <u>30 cm<sup>2</sup></u> |
| 10. | <u>28 cm</u> | <u>45 cm<sup>2</sup></u> |
| 11. | <u>26 cm</u> | <u>40 cm<sup>2</sup></u> |
| 12. | <u>34 cm</u> | <u>72 cm<sup>2</sup></u> |
| 13. | <u>38 cm</u> | <u>90 cm<sup>2</sup></u> |
| 14. | <u>16 cm</u> | <u>15 cm<sup>2</sup></u> |
| 15. | <u>26 cm</u> | <u>42 cm<sup>2</sup></u> |