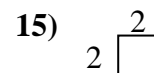
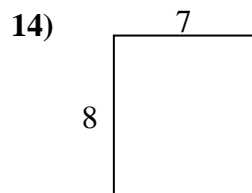
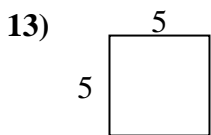
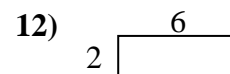
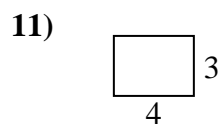
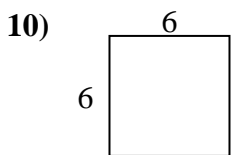
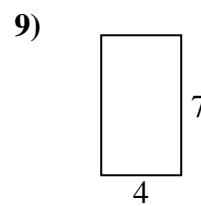
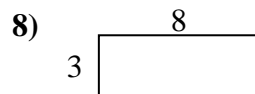
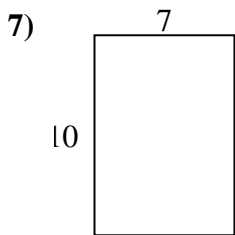
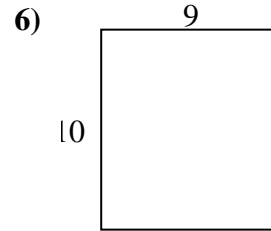
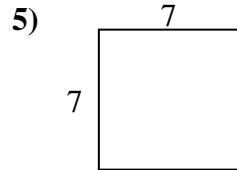
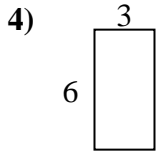
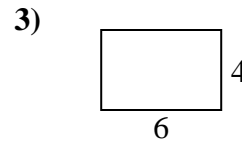

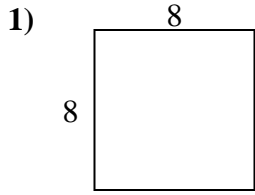




Bestimme den Umfang und die Fläche jeder Figur. Jede Figur ist in Zentimeter (cm).

Nicht maßstäblich.

Antworten

1. \_\_\_\_\_

2. \_\_\_\_\_

3. \_\_\_\_\_

4. \_\_\_\_\_

5. \_\_\_\_\_

6. \_\_\_\_\_

7. \_\_\_\_\_

8. \_\_\_\_\_

9. \_\_\_\_\_

10. \_\_\_\_\_

11. \_\_\_\_\_

12. \_\_\_\_\_

13. \_\_\_\_\_

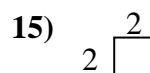
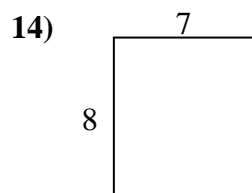
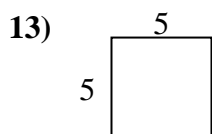
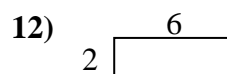
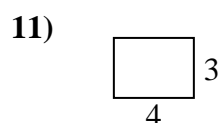
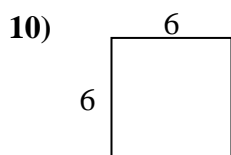
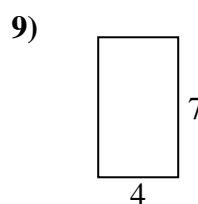
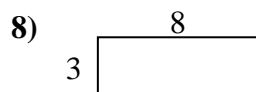
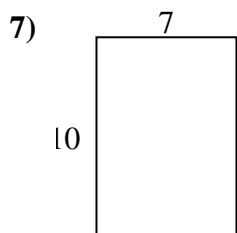
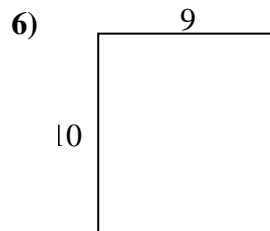
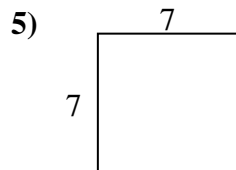
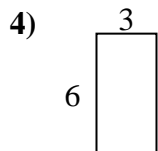
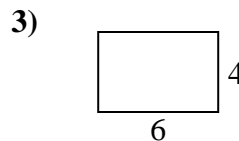

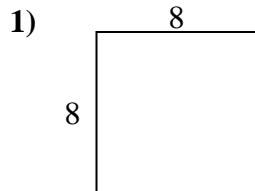
14. \_\_\_\_\_

15. \_\_\_\_\_



Bestimme den Umfang und die Fläche jeder Figur. Jede Figur ist in Zentimeter (cm).

Nicht maßstäblich.

Antworten

1. 32 cm 64 cm<sup>2</sup>

2. 24 cm 20 cm<sup>2</sup>

3. 20 cm 24 cm<sup>2</sup>

4. 18 cm 18 cm<sup>2</sup>

5. 28 cm 49 cm<sup>2</sup>

6. 38 cm 90 cm<sup>2</sup>

7. 34 cm 70 cm<sup>2</sup>

8. 22 cm 24 cm<sup>2</sup>

9. 22 cm 28 cm<sup>2</sup>

10. 24 cm 36 cm<sup>2</sup>

11. 14 cm 12 cm<sup>2</sup>

12. 16 cm 12 cm<sup>2</sup>

13. 20 cm 25 cm<sup>2</sup>

14. 30 cm 56 cm<sup>2</sup>

15. 8 cm 4 cm<sup>2</sup>