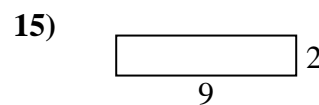
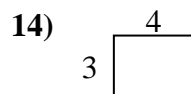
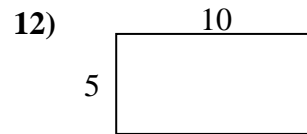
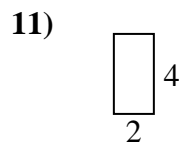
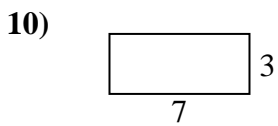
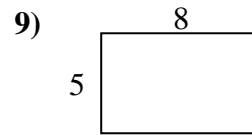
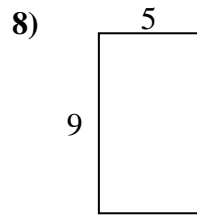
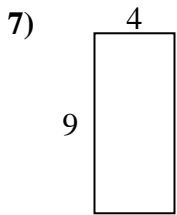
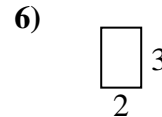
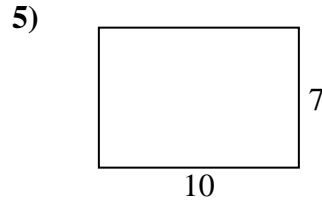
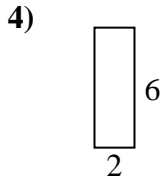
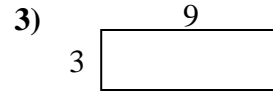
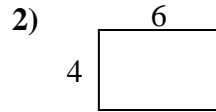
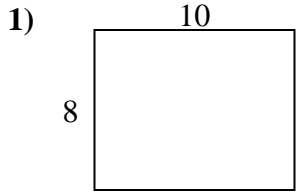




Bestimme den Umfang und die Fläche jeder Figur. Jede Figur ist in Zentimeter (cm).

Nicht maßstäblich.

Antworten

1. _____

2. _____

3. _____

4. _____

5. _____

6. _____

7. _____

8. _____

9. _____

10. _____

11. _____

12. _____

13. _____

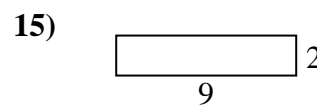
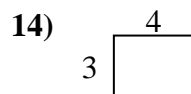
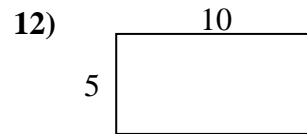
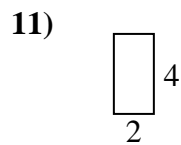
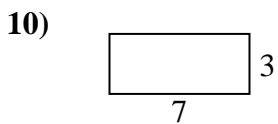
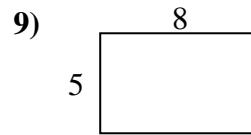
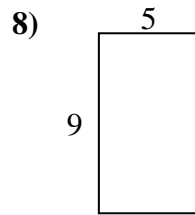
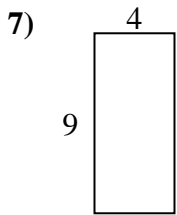
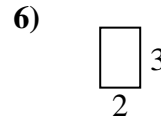
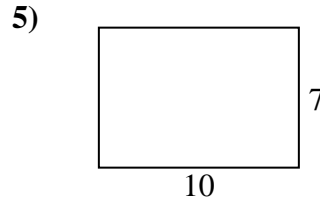
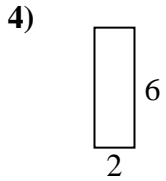
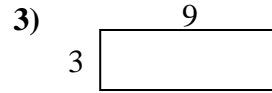
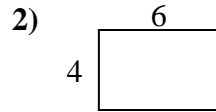
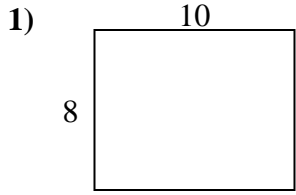
14. _____

15. _____



Bestimme den Umfang und die Fläche jeder Figur. Jede Figur ist in Zentimeter (cm).

Nicht maßstäblich.

Antworten

1. 36 cm 80 cm²

2. 20 cm 24 cm²

3. 24 cm 27 cm²

4. 16 cm 12 cm²

5. 34 cm 70 cm²

6. 10 cm 6 cm²

7. 26 cm 36 cm²

8. 28 cm 45 cm²

9. 26 cm 40 cm²

10. 20 cm 21 cm²

11. 12 cm 8 cm²

12. 30 cm 50 cm²

13. 20 cm 16 cm²

14. 14 cm 12 cm²

15. 22 cm 18 cm²