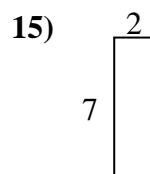
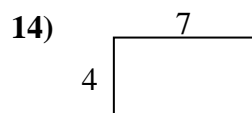
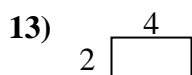
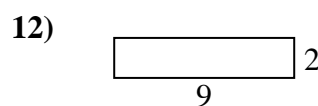
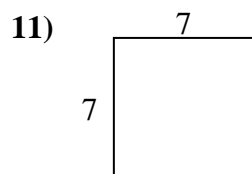
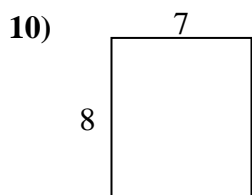
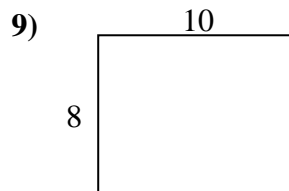
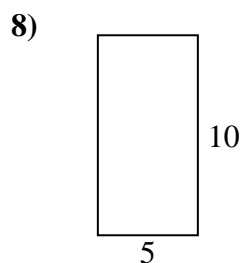
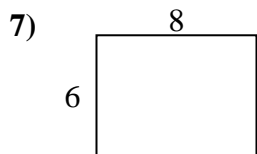
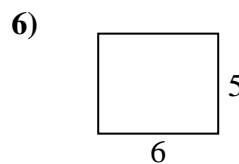
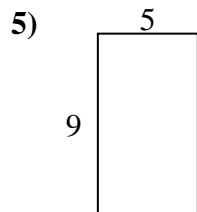
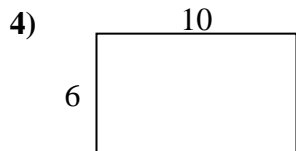
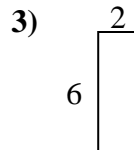
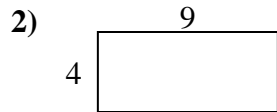
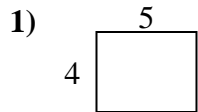




Bestimme den Umfang und die Fläche jeder Figur. Jede Figur ist in Zentimeter (cm).

Nicht maßstäblich.

Antworten

1. _____

2. _____

3. _____

4. _____

5. _____

6. _____

7. _____

8. _____

9. _____

10. _____

11. _____

12. _____

13. _____

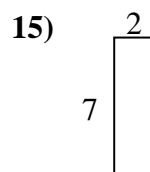
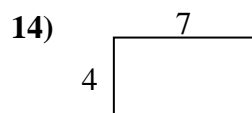
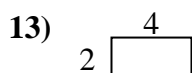
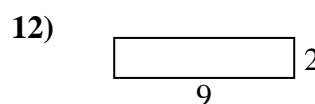
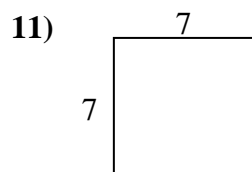
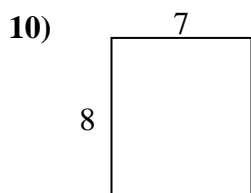
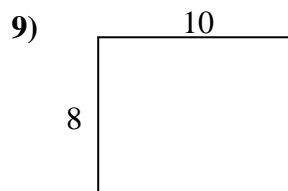
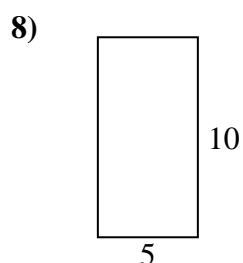
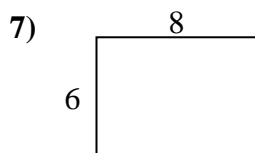
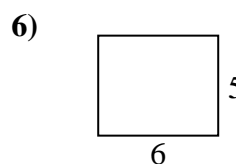
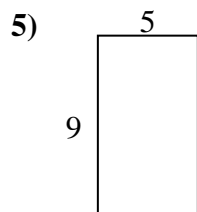
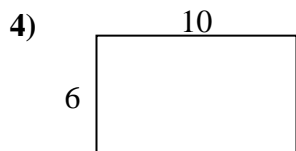
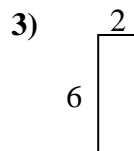
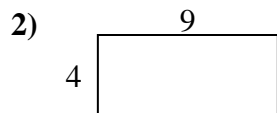
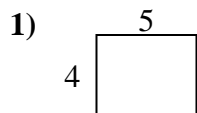
14. _____

15. _____



Bestimme den Umfang und die Fläche jeder Figur. Jede Figur ist in Zentimeter (cm).

Nicht maßstäblich.

Antworten

1. 18 cm 20 cm²

2. 26 cm 36 cm²

3. 16 cm 12 cm²

4. 32 cm 60 cm²

5. 28 cm 45 cm²

6. 22 cm 30 cm²

7. 28 cm 48 cm²

8. 30 cm 50 cm²

9. 36 cm 80 cm²

10. 30 cm 56 cm²

11. 28 cm 49 cm²

12. 22 cm 18 cm²

13. 12 cm 8 cm²

14. 22 cm 28 cm²

15. 18 cm 14 cm²