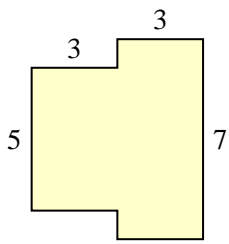


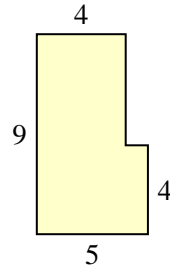


Bestimme die Gesamtfläche von jeder Form. Maßeinheit ist in mm. Abbildung ist nicht maßstäblich.

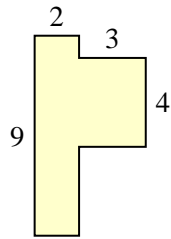
1)



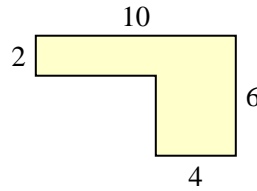
2)



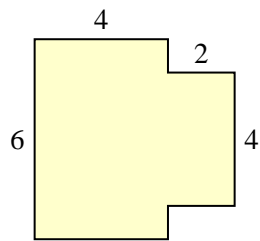
3)



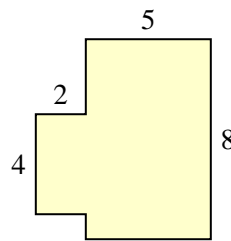
4)



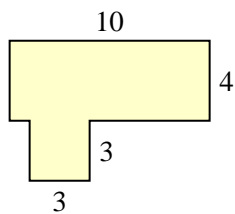
5)



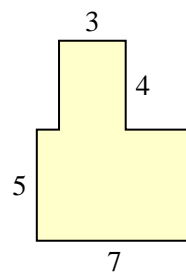
6)



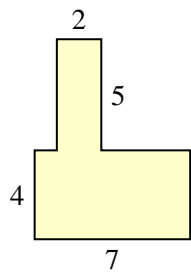
7)



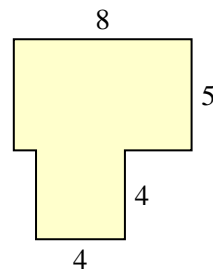
8)



9)



10)



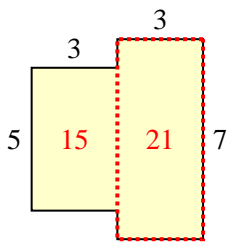
Antworten

- 1. \_\_\_\_\_
- 2. \_\_\_\_\_
- 3. \_\_\_\_\_
- 4. \_\_\_\_\_
- 5. \_\_\_\_\_
- 6. \_\_\_\_\_
- 7. \_\_\_\_\_
- 8. \_\_\_\_\_
- 9. \_\_\_\_\_
- 10. \_\_\_\_\_

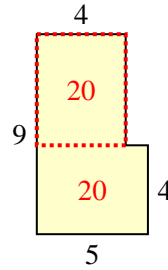


Bestimme die Gesamtfläche von jeder Form. Maßeinheit ist in mm. Abbildung ist nicht maßstäblich.

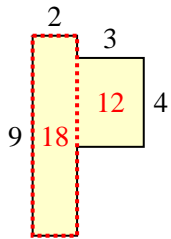
1)



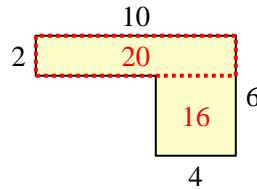
2)



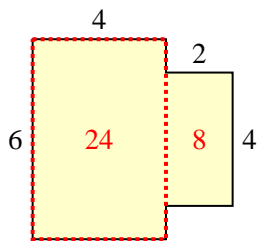
3)



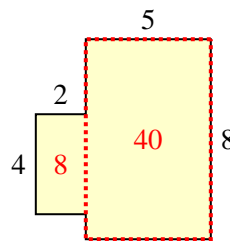
4)



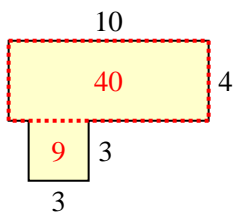
5)



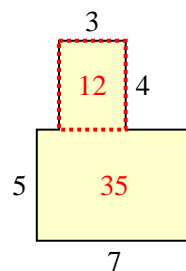
6)



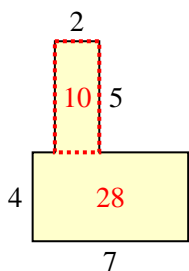
7)



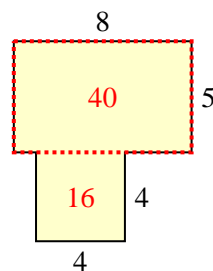
8)



9)



10)

**Antworten**1. 36 mm<sup>2</sup>2. 40 mm<sup>2</sup>3. 30 mm<sup>2</sup>4. 36 mm<sup>2</sup>5. 32 mm<sup>2</sup>6. 48 mm<sup>2</sup>7. 49 mm<sup>2</sup>8. 47 mm<sup>2</sup>9. 38 mm<sup>2</sup>10. 56 mm<sup>2</sup>