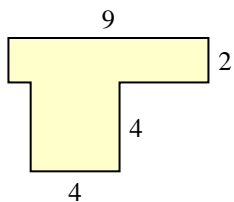


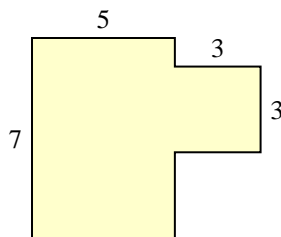


Bestimme die Gesamtfläche von jeder Form. Maßeinheit ist in mm. Abbildung ist nicht maßstäblich.

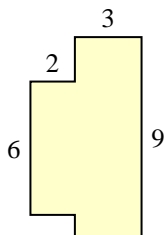
1)



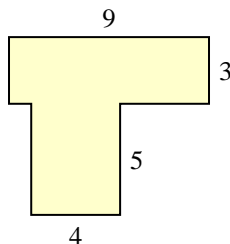
2)



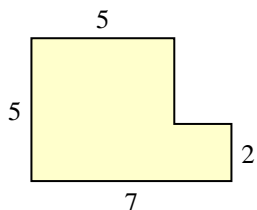
3)



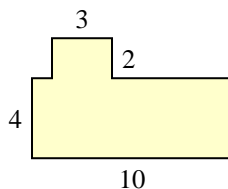
4)



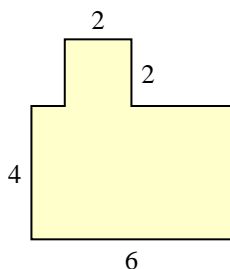
5)



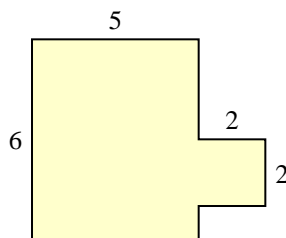
6)



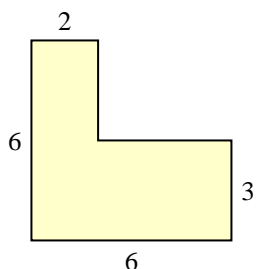
7)



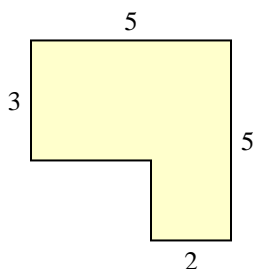
8)



9)



10)



Antworten

1. _____

2. _____

3. _____

4. _____

5. _____

6. _____

7. _____

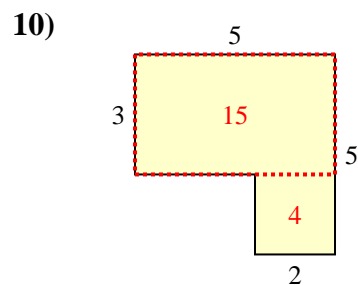
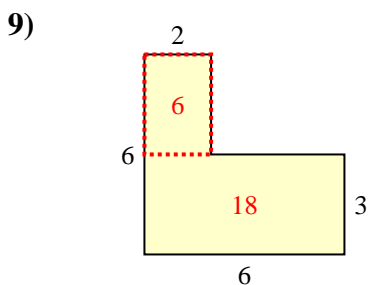
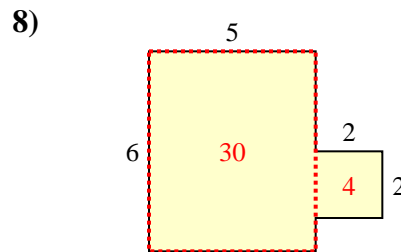
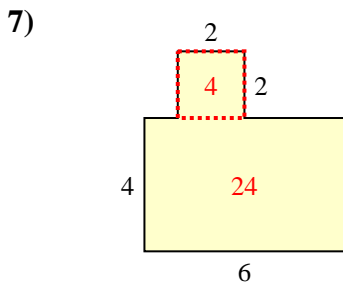
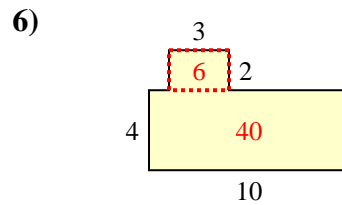
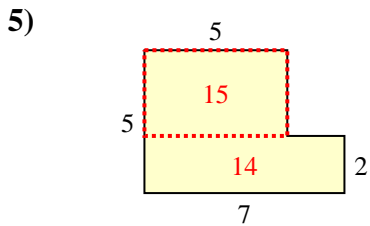
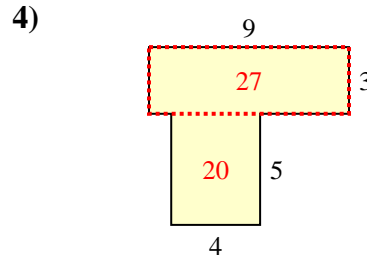
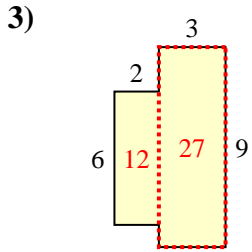
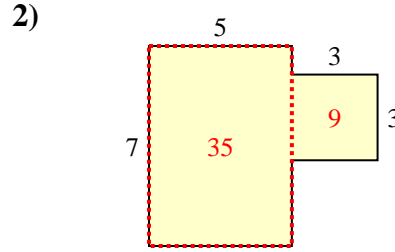
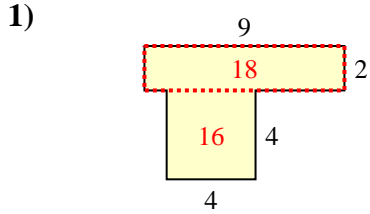
8. _____

9. _____

10. _____



Bestimme die Gesamtfläche von jeder Form. Maßeinheit ist in mm. Abbildung ist nicht maßstäblich.

**Antworten**

1. 34 mm²
2. 44 mm²
3. 39 mm²
4. 47 mm²
5. 29 mm²
6. 46 mm²
7. 28 mm²
8. 34 mm²
9. 24 mm²
10. 19 mm²