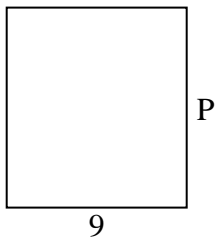





Berechne den Wert von "P".


1) Umfang = 38



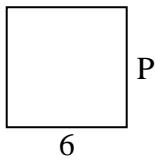
2) Umfang = 24



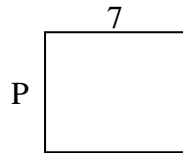
3) Umfang = 18



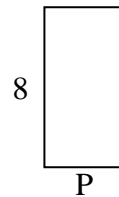
4) Umfang = 24



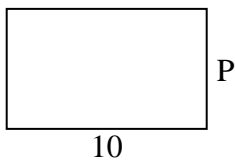
5) Umfang = 26




6) Umfang = 24



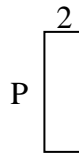
7) Umfang = 32



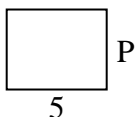
8) Umfang = 30



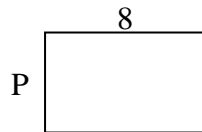
9) Umfang = 16



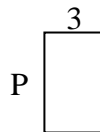
10) Umfang = 18



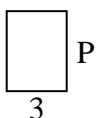
11) Umfang = 26



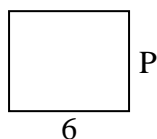
12) Umfang = 16




13) Umfang = 14



14) Umfang = 22



15) Umfang = 30



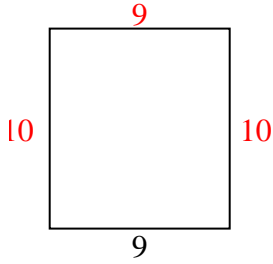
Antworten

1. _____
2. _____
3. _____
4. _____
5. _____
6. _____
7. _____
8. _____
9. _____
10. _____
11. _____
12. _____
13. _____
14. _____
15. _____

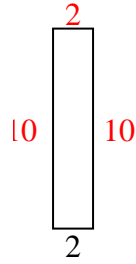


Berechne den Wert von "P".

1) Umfang = 38



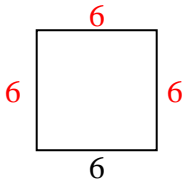
2) Umfang = 24



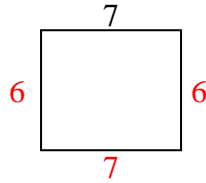
3) Umfang = 18



4) Umfang = 24



5) Umfang = 26



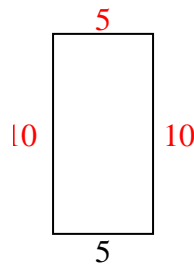
6) Umfang = 24



7) Umfang = 32



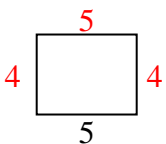
8) Umfang = 30



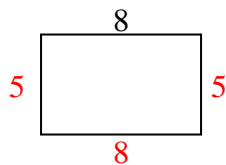
9) Umfang = 16



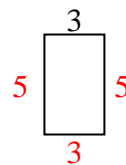
10) Umfang = 18



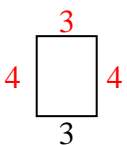
11) Umfang = 26



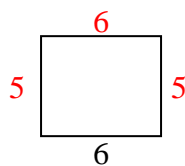
12) Umfang = 16



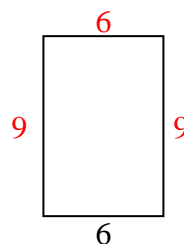
13) Umfang = 14



14) Umfang = 22



15) Umfang = 30

Antworten1. 10 cm2. 10 cm3. 7 cm4. 6 cm5. 6 cm6. 4 cm7. 6 cm8. 10 cm9. 6 cm10. 4 cm11. 5 cm12. 5 cm13. 4 cm14. 5 cm15. 9 cm