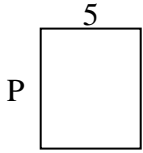


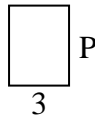


Berechne den Wert von "P".

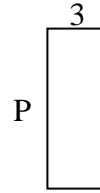
1) Umfang = 22




2) Umfang = 14



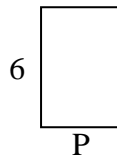
3) Umfang = 22



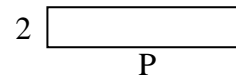
4) Umfang = 24



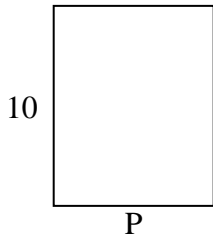
5) Umfang = 20



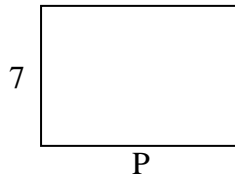
6) Umfang = 24



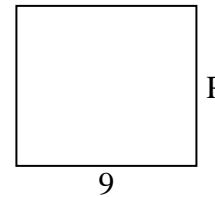
7) Umfang = 36




8) Umfang = 34



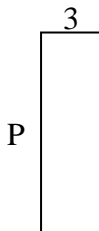
9) Umfang = 34



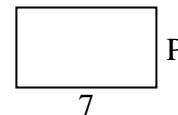
10) Umfang = 20



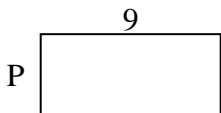
11) Umfang = 26



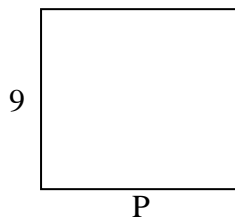
12) Umfang = 22



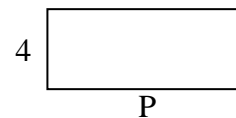
13) Umfang = 26



14) Umfang = 38



15) Umfang = 28

Antworten

1. _____

2. _____

3. _____

4. _____

5. _____

6. _____

7. _____

8. _____

9. _____

10. _____

11. _____

12. _____

13. _____

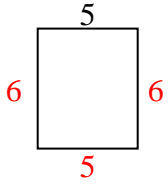
14. _____

15. _____

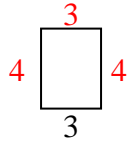


Berechne den Wert von "P".

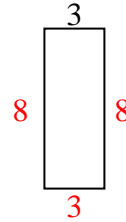
1) Umfang = 22



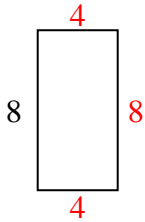
2) Umfang = 14



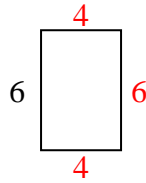
3) Umfang = 22




4) Umfang = 24



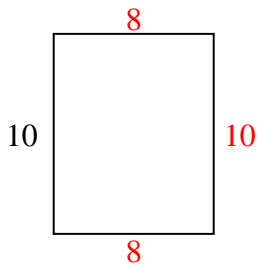
5) Umfang = 20



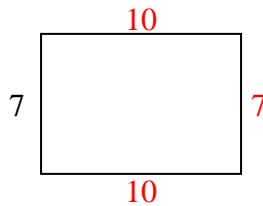
6) Umfang = 24



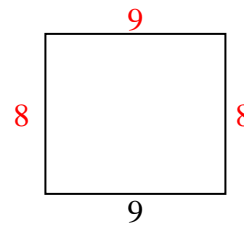
7) Umfang = 36



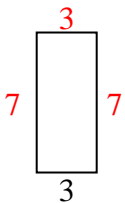
8) Umfang = 34




9) Umfang = 34



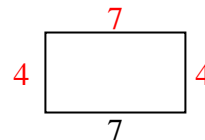
10) Umfang = 20



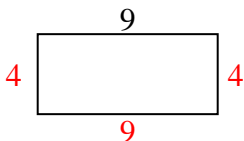
11) Umfang = 26



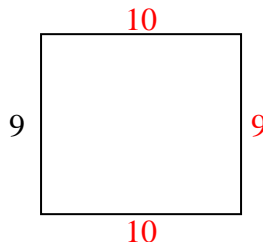
12) Umfang = 22



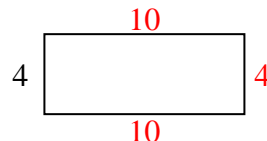
13) Umfang = 26



14) Umfang = 38



15) Umfang = 28

Antworten1. 6 cm2. 4 cm3. 8 cm4. 4 cm5. 4 cm6. 10 cm7. 8 cm8. 10 cm9. 8 cm10. 7 cm11. 10 cm12. 4 cm13. 4 cm14. 10 cm15. 10 cm