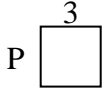


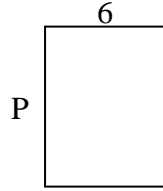


Berechne den Wert von "P".

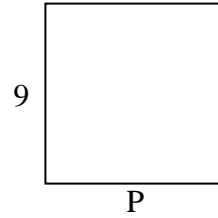
1) Umfang = 12



2) Umfang = 28



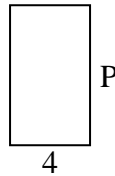
3) Umfang = 36




4) Umfang = 10



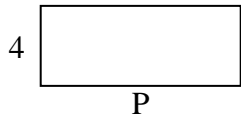
5) Umfang = 22



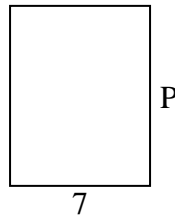
6) Umfang = 26



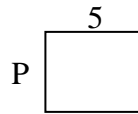
7) Umfang = 28



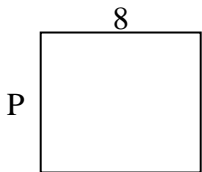
8) Umfang = 32



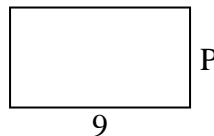
9) Umfang = 18



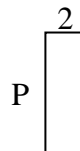
10) Umfang = 30



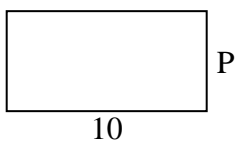
11) Umfang = 28




12) Umfang = 16



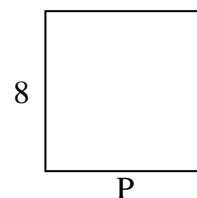
13) Umfang = 30



14) Umfang = 26



15) Umfang = 32



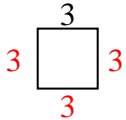
Antworten

1. _____
2. _____
3. _____
4. _____
5. _____
6. _____
7. _____
8. _____
9. _____
10. _____
11. _____
12. _____
13. _____
14. _____
15. _____

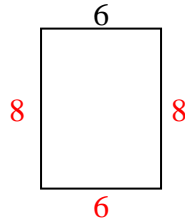


Berechne den Wert von "P".

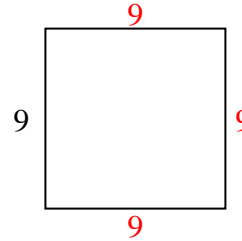
1) Umfang = 12



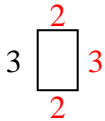
2) Umfang = 28



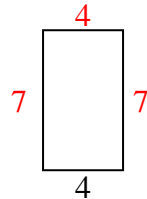
3) Umfang = 36



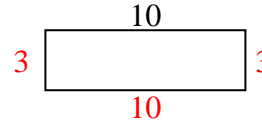
4) Umfang = 10



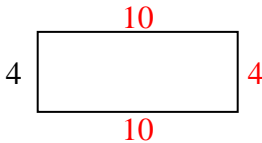
5) Umfang = 22



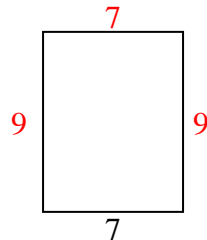
6) Umfang = 26



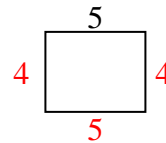
7) Umfang = 28



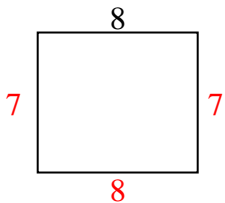
8) Umfang = 32



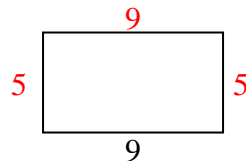
9) Umfang = 18



10) Umfang = 30



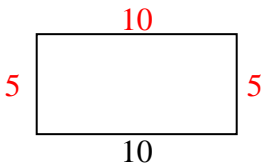
11) Umfang = 28



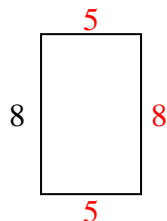
12) Umfang = 16



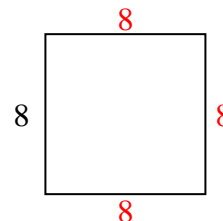
13) Umfang = 30



14) Umfang = 26



15) Umfang = 32

Antworten1. 3 cm2. 8 cm3. 9 cm4. 2 cm5. 7 cm6. 3 cm7. 10 cm8. 9 cm9. 4 cm10. 7 cm11. 5 cm12. 6 cm13. 5 cm14. 5 cm15. 8 cm