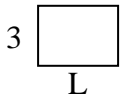


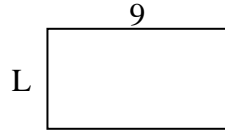


Berechne den Wert von 'L'.

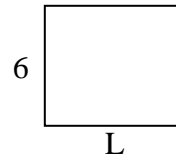
1) Fläche =  $12 \text{ u}^2$



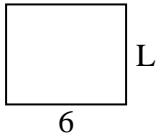
2) Fläche =  $45 \text{ u}^2$



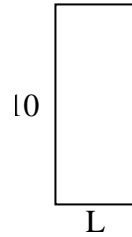
3) Fläche =  $42 \text{ u}^2$



4) Fläche =  $30 \text{ u}^2$



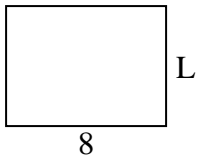
5) Fläche =  $40 \text{ u}^2$



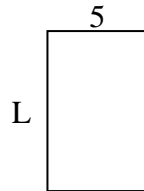
6) Fläche =  $27 \text{ u}^2$



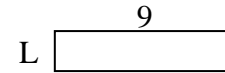
7) Fläche =  $48 \text{ u}^2$



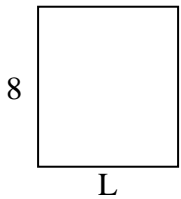
8) Fläche =  $40 \text{ u}^2$



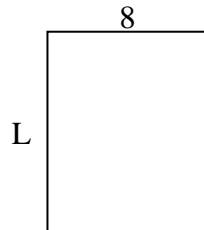
9) Fläche =  $18 \text{ u}^2$



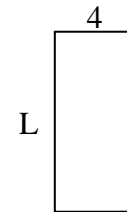
10) Fläche =  $56 \text{ u}^2$



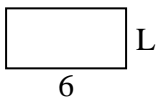
11) Fläche =  $80 \text{ u}^2$



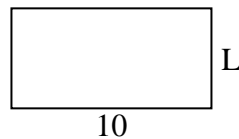
12) Fläche =  $36 \text{ u}^2$



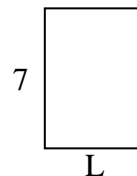
13) Fläche =  $18 \text{ u}^2$



14) Fläche =  $50 \text{ u}^2$



15) Fläche =  $35 \text{ u}^2$

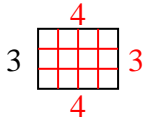
Antworten

1. \_\_\_\_\_
2. \_\_\_\_\_
3. \_\_\_\_\_
4. \_\_\_\_\_
5. \_\_\_\_\_
6. \_\_\_\_\_
7. \_\_\_\_\_
8. \_\_\_\_\_
9. \_\_\_\_\_
10. \_\_\_\_\_
11. \_\_\_\_\_
12. \_\_\_\_\_
13. \_\_\_\_\_
14. \_\_\_\_\_
15. \_\_\_\_\_

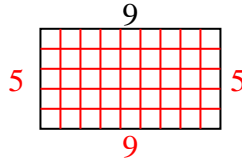


Berechne den Wert von 'L'.

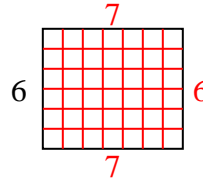
1) Fläche =  $12 \text{ u}^2$



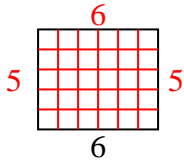
2) Fläche =  $45 \text{ u}^2$



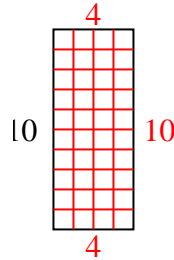
3) Fläche =  $42 \text{ u}^2$



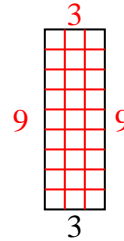
4) Fläche =  $30 \text{ u}^2$



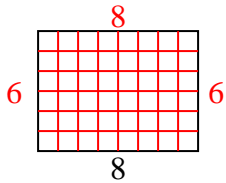
5) Fläche =  $40 \text{ u}^2$



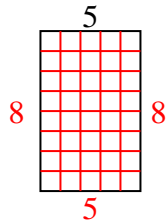
6) Fläche =  $27 \text{ u}^2$



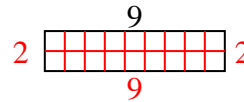
7) Fläche =  $48 \text{ u}^2$



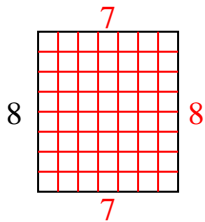
8) Fläche =  $40 \text{ u}^2$



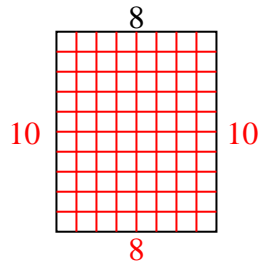
9) Fläche =  $18 \text{ u}^2$



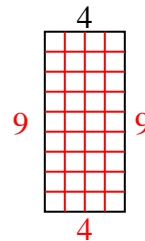
10) Fläche =  $56 \text{ u}^2$



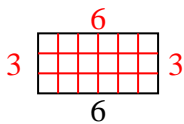
11) Fläche =  $80 \text{ u}^2$



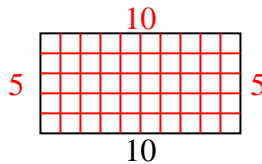
12) Fläche =  $36 \text{ u}^2$



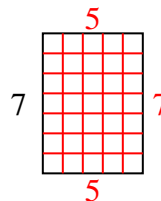
13) Fläche =  $18 \text{ u}^2$



14) Fläche =  $50 \text{ u}^2$



15) Fläche =  $35 \text{ u}^2$

**Antworten**1. 42. 53. 74. 55. 46. 97. 68. 89. 210. 711. 1012. 913. 314. 515. 5