


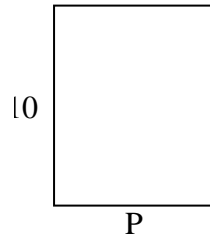


Berechne den Wert von 'P'.

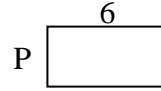
1) Fläche = 12 u^2



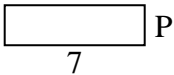
2) Fläche = 80 u^2



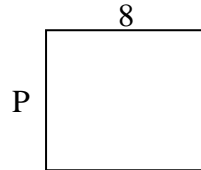
3) Fläche = 18 u^2



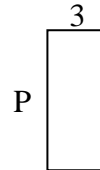
4) Fläche = 14 u^2



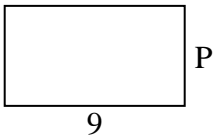
5) Fläche = 56 u^2



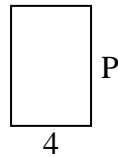
6) Fläche = 21 u^2



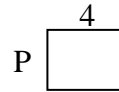
7) Fläche = 45 u^2



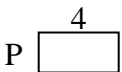
8) Fläche = 24 u^2



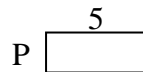
9) Fläche = 12 u^2



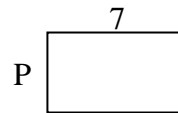
10) Fläche = 8 u^2



11) Fläche = 10 u^2



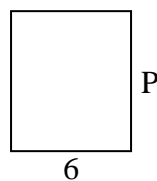
12) Fläche = 28 u^2



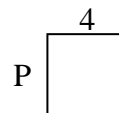
13) Fläche = 6 u^2



14) Fläche = 42 u^2



15) Fläche = 16 u^2

Antworten

1. _____

2. _____

3. _____

4. _____

5. _____

6. _____

7. _____

8. _____

9. _____

10. _____

11. _____

12. _____

13. _____

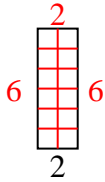
14. _____

15. _____

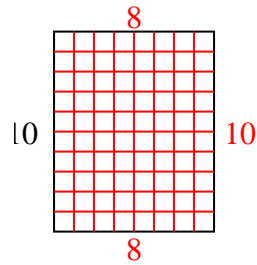


Berechne den Wert von 'P'.

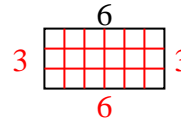
1) Fläche = 12 u^2



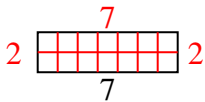
2) Fläche = 80 u^2



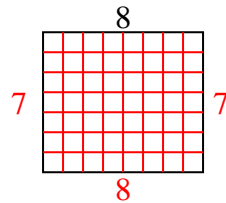
3) Fläche = 18 u^2



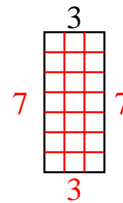
4) Fläche = 14 u^2



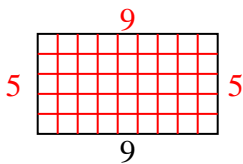
5) Fläche = 56 u^2



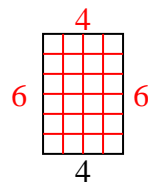
6) Fläche = 21 u^2



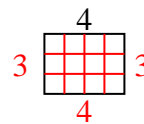
7) Fläche = 45 u^2



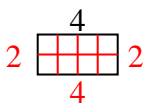
8) Fläche = 24 u^2



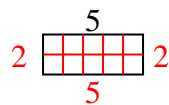
9) Fläche = 12 u^2



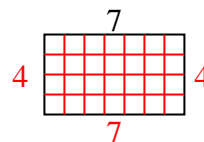
10) Fläche = 8 u^2



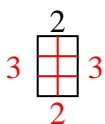
11) Fläche = 10 u^2



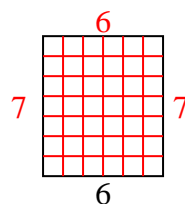
12) Fläche = 28 u^2



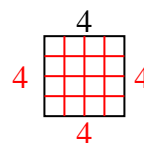
13) Fläche = 6 u^2



14) Fläche = 42 u^2



15) Fläche = 16 u^2

Antworten1. 62. 83. 34. 25. 76. 77. 58. 69. 310. 211. 212. 413. 314. 715. 4