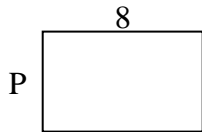





Berechne den Wert von 'P'.

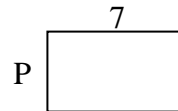
1) Fläche =  $40 \text{ u}^2$



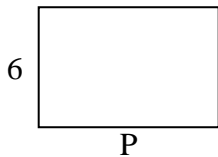
2) Fläche =  $50 \text{ u}^2$



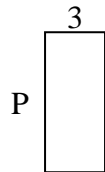
3) Fläche =  $28 \text{ u}^2$



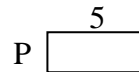
4) Fläche =  $54 \text{ u}^2$



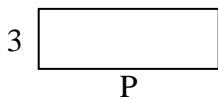
5) Fläche =  $21 \text{ u}^2$



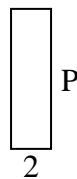
6) Fläche =  $10 \text{ u}^2$



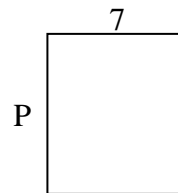
7) Fläche =  $27 \text{ u}^2$



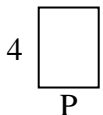
8) Fläche =  $14 \text{ u}^2$



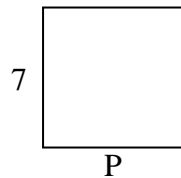
9) Fläche =  $56 \text{ u}^2$



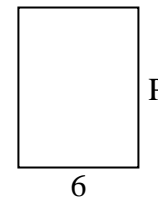
10) Fläche =  $12 \text{ u}^2$



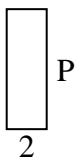
11) Fläche =  $49 \text{ u}^2$



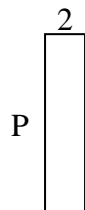
12) Fläche =  $48 \text{ u}^2$



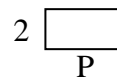
13) Fläche =  $12 \text{ u}^2$



14) Fläche =  $18 \text{ u}^2$



15) Fläche =  $8 \text{ u}^2$

Antworten

1. \_\_\_\_\_

2. \_\_\_\_\_

3. \_\_\_\_\_

4. \_\_\_\_\_

5. \_\_\_\_\_

6. \_\_\_\_\_

7. \_\_\_\_\_

8. \_\_\_\_\_

9. \_\_\_\_\_

10. \_\_\_\_\_

11. \_\_\_\_\_

12. \_\_\_\_\_

13. \_\_\_\_\_

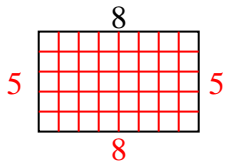
14. \_\_\_\_\_

15. \_\_\_\_\_

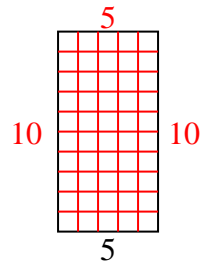


Berechne den Wert von 'P'.

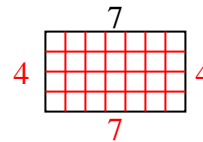
1) Fläche =  $40 \text{ u}^2$



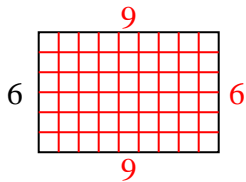
2) Fläche =  $50 \text{ u}^2$



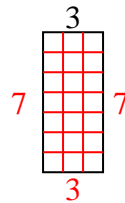
3) Fläche =  $28 \text{ u}^2$



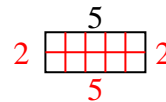
4) Fläche =  $54 \text{ u}^2$



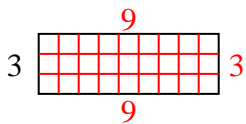
5) Fläche =  $21 \text{ u}^2$



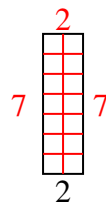
6) Fläche =  $10 \text{ u}^2$



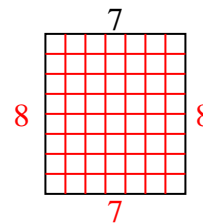
7) Fläche =  $27 \text{ u}^2$



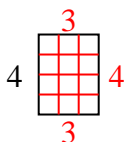
8) Fläche =  $14 \text{ u}^2$



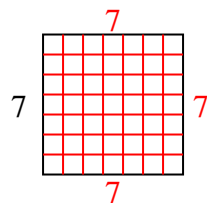
9) Fläche =  $56 \text{ u}^2$



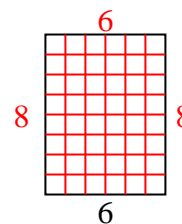
10) Fläche =  $12 \text{ u}^2$



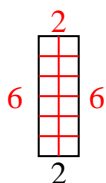
11) Fläche =  $49 \text{ u}^2$



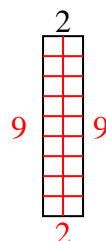
12) Fläche =  $48 \text{ u}^2$



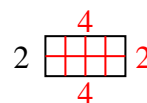
13) Fläche =  $12 \text{ u}^2$



14) Fläche =  $18 \text{ u}^2$



15) Fläche =  $8 \text{ u}^2$

**Antworten**1. 52. 103. 44. 95. 76. 27. 98. 79. 810. 311. 712. 813. 614. 915. 4