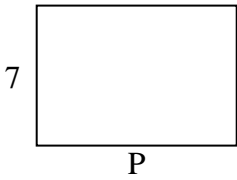


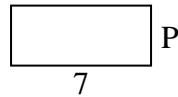


Berechne den Wert von 'P'.

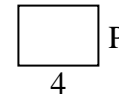
1) Fläche = 70 u^2



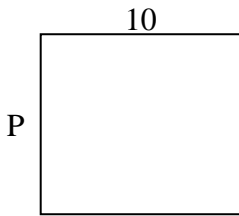
2) Fläche = 21 u^2



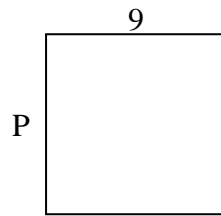
3) Fläche = 12 u^2



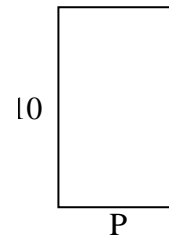
4) Fläche = 90 u^2



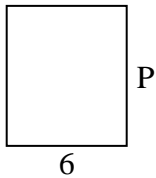
5) Fläche = 81 u^2



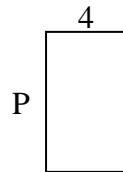
6) Fläche = 60 u^2



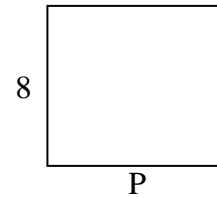
7) Fläche = 42 u^2



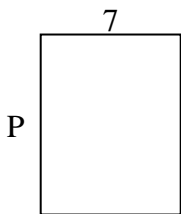
8) Fläche = 28 u^2



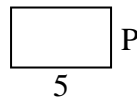
9) Fläche = 72 u^2



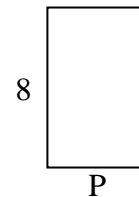
10) Fläche = 63 u^2



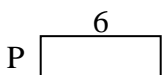
11) Fläche = 15 u^2



12) Fläche = 40 u^2



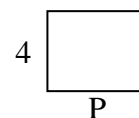
13) Fläche = 12 u^2



14) Fläche = 6 u^2



15) Fläche = 20 u^2

Antworten

1. _____

2. _____

3. _____

4. _____

5. _____

6. _____

7. _____

8. _____

9. _____

10. _____

11. _____

12. _____

13. _____

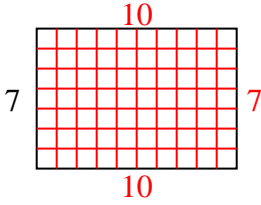
14. _____

15. _____

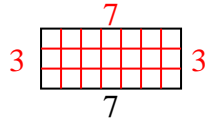


Berechne den Wert von 'P'.

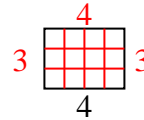
1) Fläche = 70 u^2



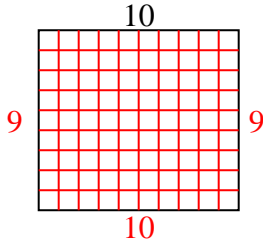
2) Fläche = 21 u^2



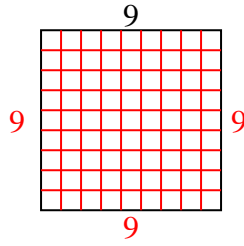
3) Fläche = 12 u^2



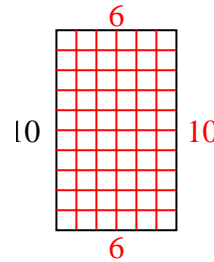
4) Fläche = 90 u^2



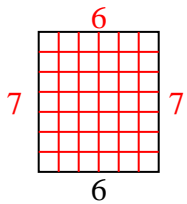
5) Fläche = 81 u^2



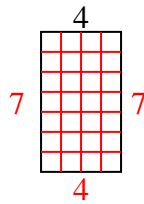
6) Fläche = 60 u^2



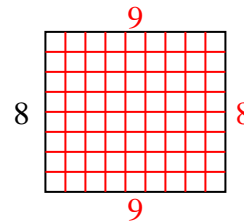
7) Fläche = 42 u^2



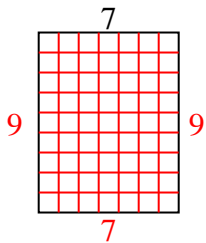
8) Fläche = 28 u^2



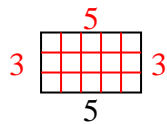
9) Fläche = 72 u^2



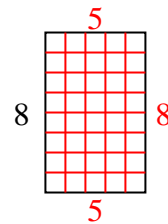
10) Fläche = 63 u^2



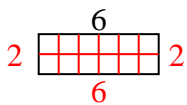
11) Fläche = 15 u^2



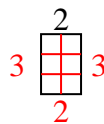
12) Fläche = 40 u^2



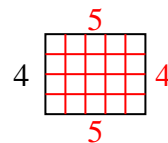
13) Fläche = 12 u^2



14) Fläche = 6 u^2



15) Fläche = 20 u^2

Antworten1. 102. 33. 34. 95. 96. 67. 78. 79. 910. 911. 312. 513. 214. 315. 5