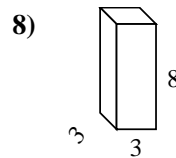
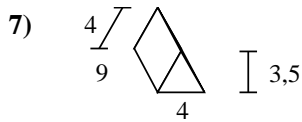
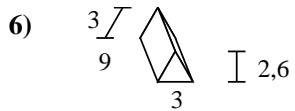
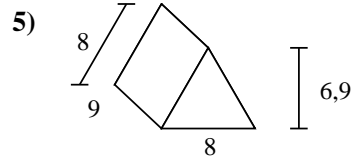
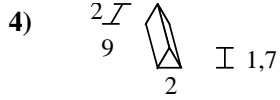
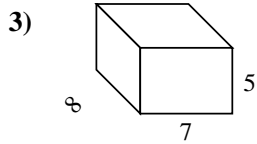
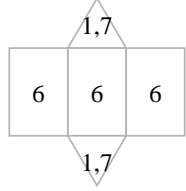
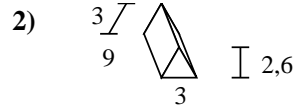
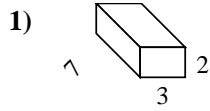
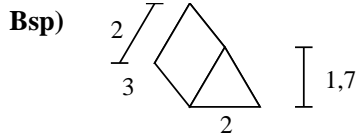




Berechne die Oberfläche jeder Figur.



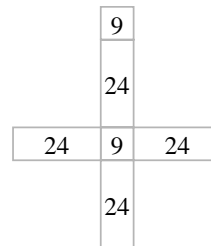
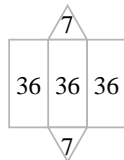
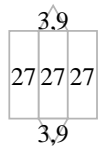
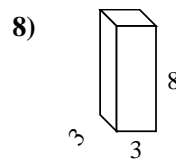
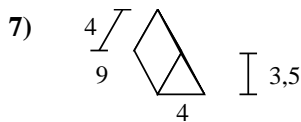
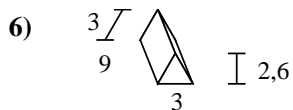
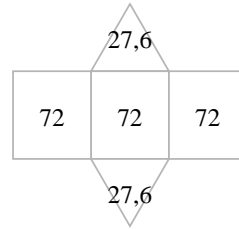
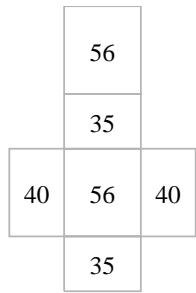
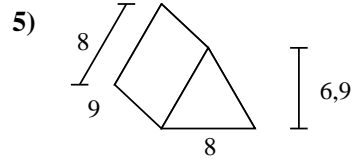
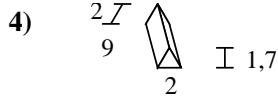
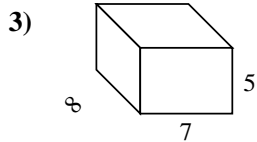
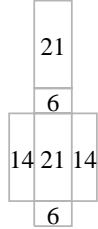
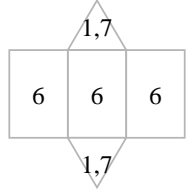
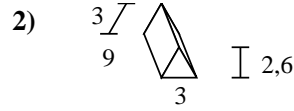
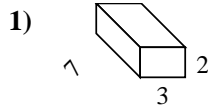
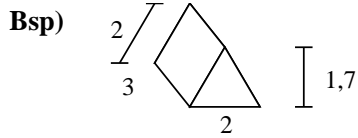
Antworten

Bsp. 21,4 cm²

- 1. _____
- 2. _____
- 3. _____
- 4. _____
- 5. _____
- 6. _____
- 7. _____
- 8. _____



Berechne die Oberfläche jeder Figur.



Antworten

Bsp. 21,4 cm²

1. 82 cm²

2. 88,8 cm²

3. 262 cm²

4. 57,4 cm²

5. 271,2 cm²

6. 88,8 cm²

7. 122 cm²

8. 114 cm²