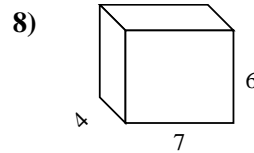
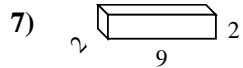
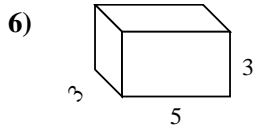
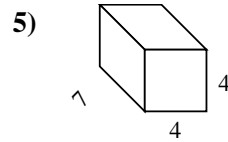
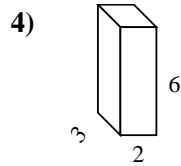
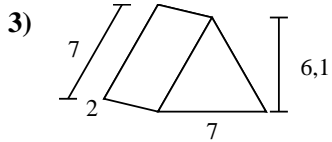
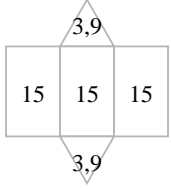
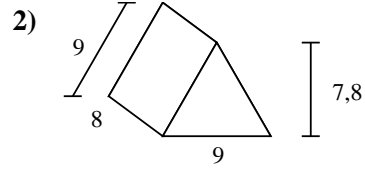
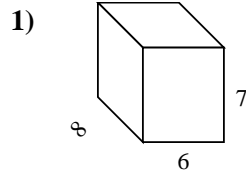
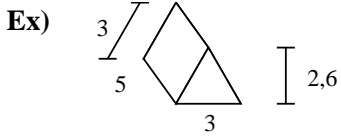




Berechne die Oberfläche jeder Figur.



Antworten

Bsp. 52,8 cm²

1. _____

2. _____

3. _____

4. _____

5. _____

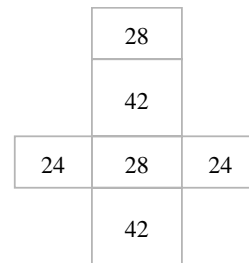
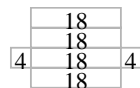
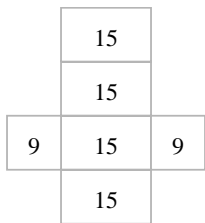
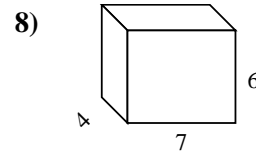
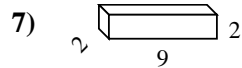
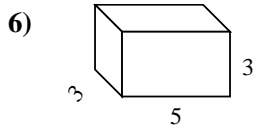
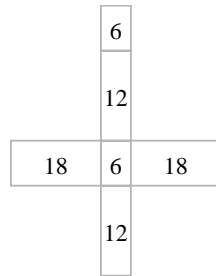
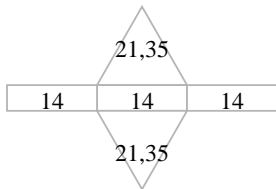
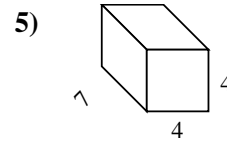
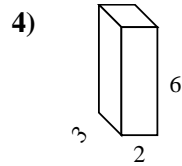
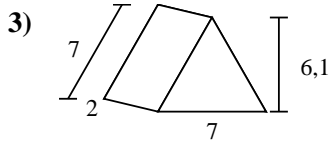
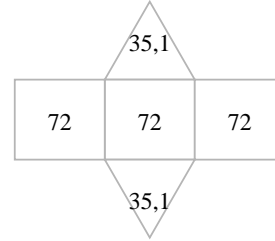
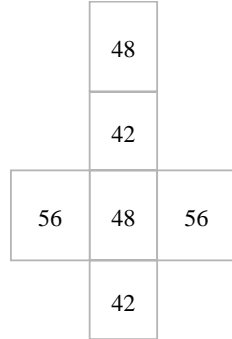
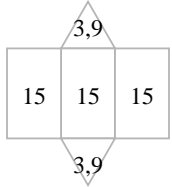
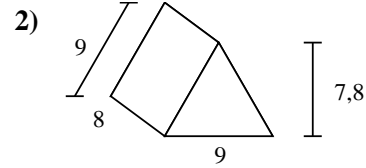
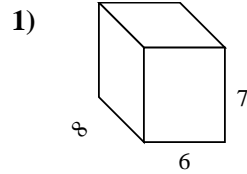
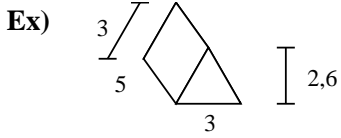
6. _____

7. _____

8. _____



Berechne die Oberfläche jeder Figur.



Antworten

Bsp. 52,8 cm²

1. 292 cm²

2. 286,2 cm²

3. 84,7 cm²

4. 72 cm²

5. 144 cm²

6. 78 cm²

7. 80 cm²

8. 188 cm²