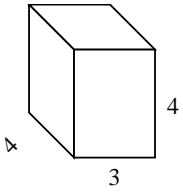


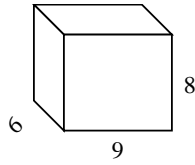


Berechne die Oberfläche jeder Figur.

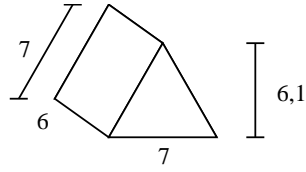
Ex)



1)



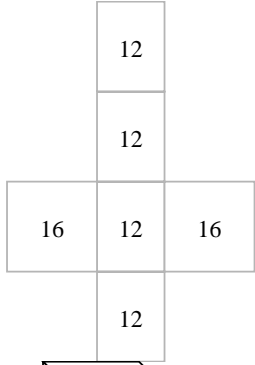
2)



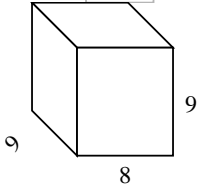
Antworten

Bsp. 80 cm²

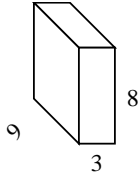
- 1. _____
- 2. _____
- 3. _____
- 4. _____
- 5. _____
- 6. _____
- 7. _____
- 8. _____



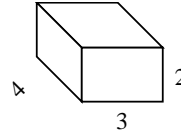
3)



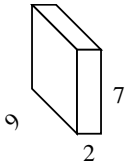
4)



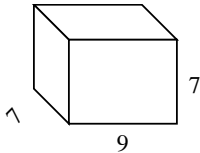
5)



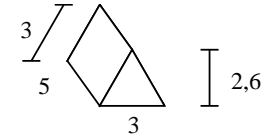
6)



7)



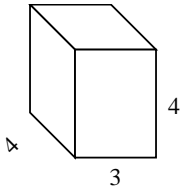
8)



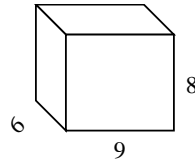


Berechne die Oberfläche jeder Figur.

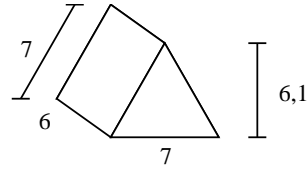
Ex)



1)



2)



Antworten

Bsp. 80 cm²

1. 348 cm²

2. 168,7 cm²

3. 450 cm²

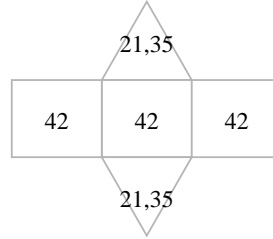
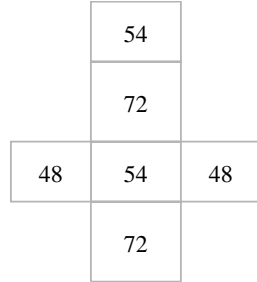
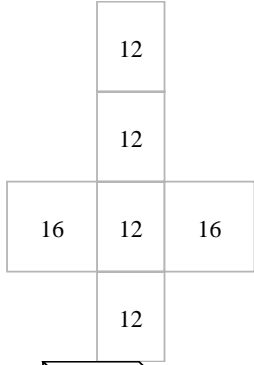
4. 246 cm²

5. 52 cm²

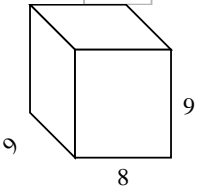
6. 190 cm²

7. 350 cm²

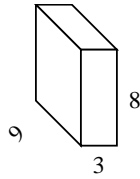
8. 52,8 cm²



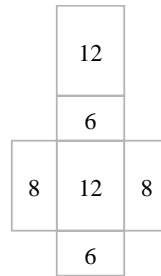
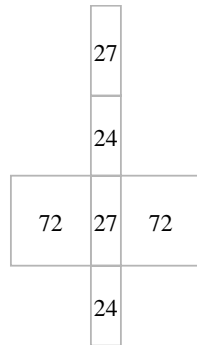
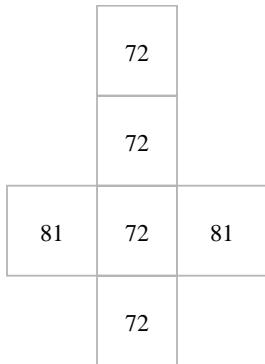
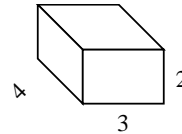
3)



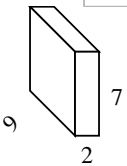
4)



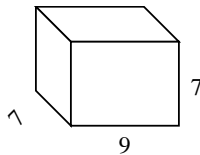
5)



6)



7)



8)

