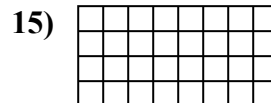
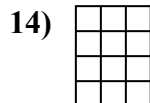
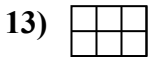
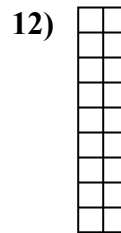
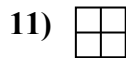
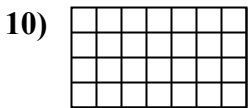

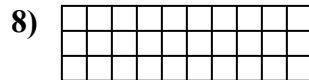


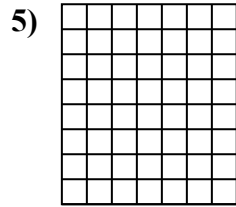
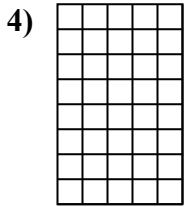
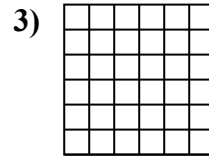
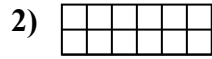
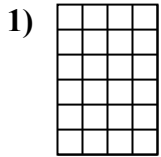




Berechne die Fläche. Jeder Block entspricht 1 Einheit ( $u^2$ ).

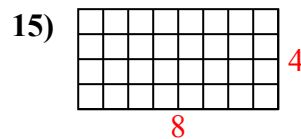
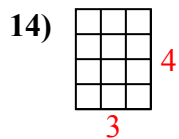
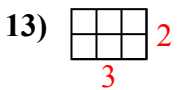
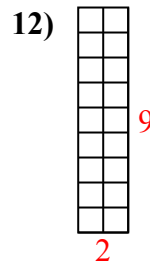
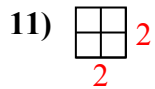
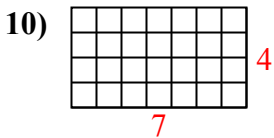
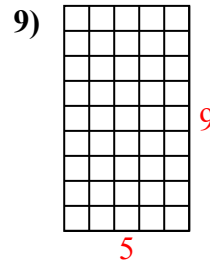
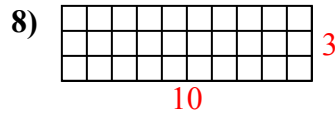
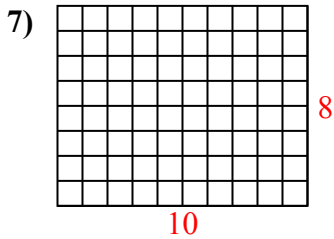
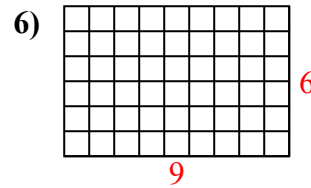
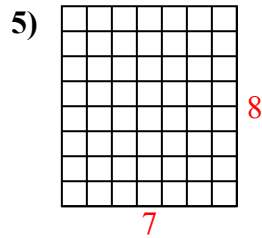
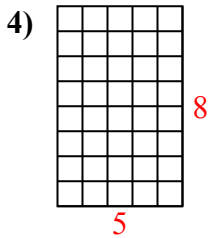
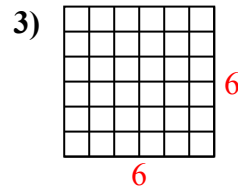
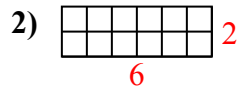
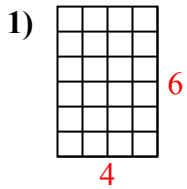


**Antworten**

1. \_\_\_\_\_
2. \_\_\_\_\_
3. \_\_\_\_\_
4. \_\_\_\_\_
5. \_\_\_\_\_
6. \_\_\_\_\_
7. \_\_\_\_\_
8. \_\_\_\_\_
9. \_\_\_\_\_
10. \_\_\_\_\_
11. \_\_\_\_\_
12. \_\_\_\_\_
13. \_\_\_\_\_
14. \_\_\_\_\_
15. \_\_\_\_\_



Berechne die Fläche. Jeder Block entspricht 1 Einheit ( $u^2$ ).



**Antworten**

1. 24  $u^2$

2. 12  $u^2$

3. 36  $u^2$

4. 40  $u^2$

5. 56  $u^2$

6. 54  $u^2$

7. 80  $u^2$

8. 30  $u^2$

9. 45  $u^2$

10. 28  $u^2$

11. 4  $u^2$

12. 18  $u^2$

13. 6  $u^2$

14. 12  $u^2$

15. 32  $u^2$