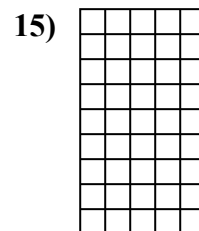
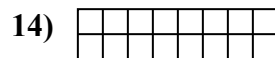
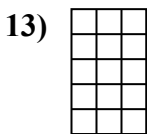
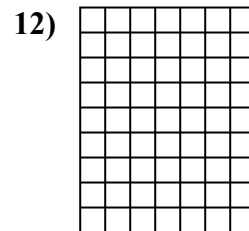
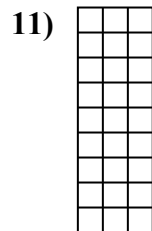
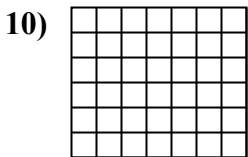
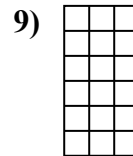
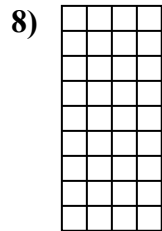
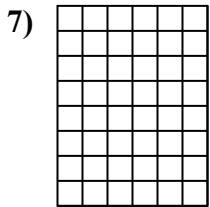
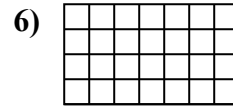
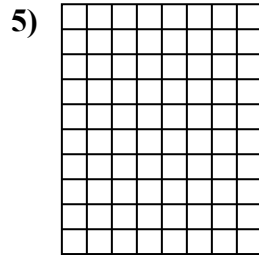
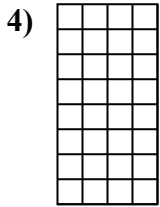
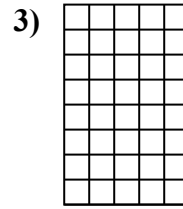
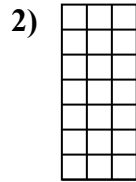
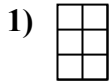




Berechne die Fläche. Jeder Block entspricht 1 Einheit (u^2).

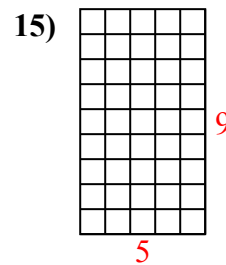
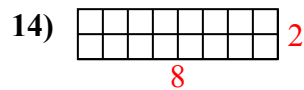
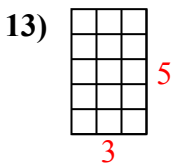
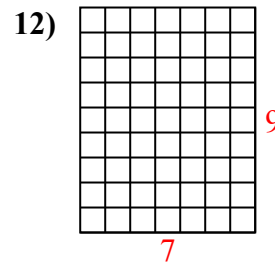
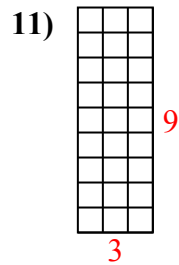
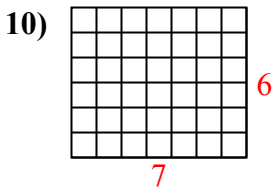
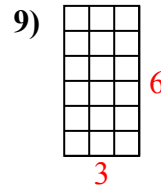
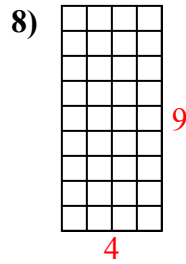
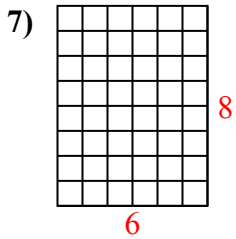
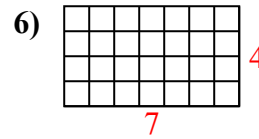
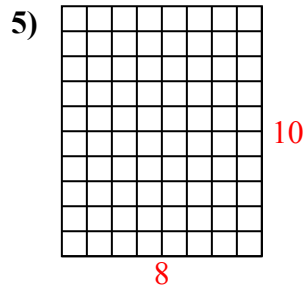
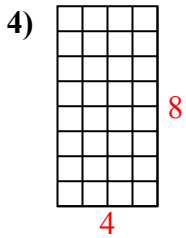
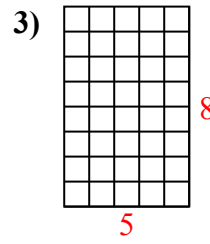
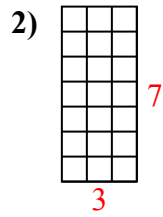
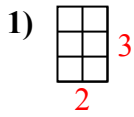


Antworten

1. _____
2. _____
3. _____
4. _____
5. _____
6. _____
7. _____
8. _____
9. _____
10. _____
11. _____
12. _____
13. _____
14. _____
15. _____



Berechne die Fläche. Jeder Block entspricht 1 Einheit (u^2).



Antworten

1. 6 u^2

2. 21 u^2

3. 40 u^2

4. 32 u^2

5. 80 u^2

6. 28 u^2

7. 48 u^2

8. 36 u^2

9. 18 u^2

10. 42 u^2

11. 27 u^2

12. 63 u^2

13. 15 u^2

14. 16 u^2

15. 45 u^2