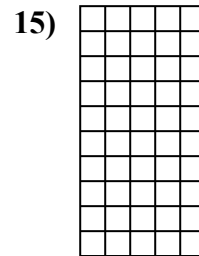
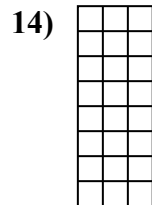
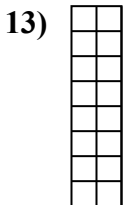
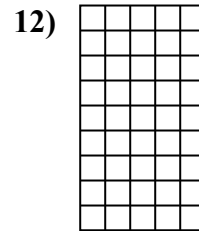
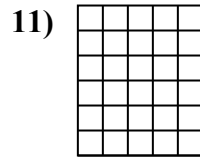
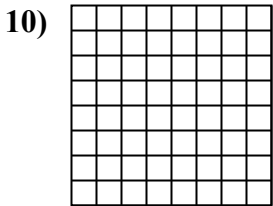
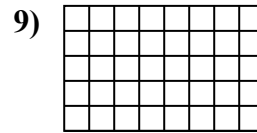
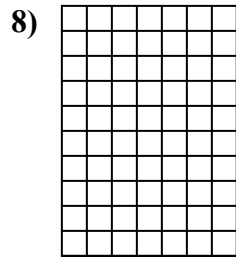


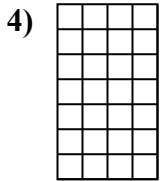

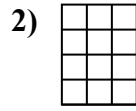
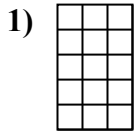




Berechne die Fläche. Jeder Block entspricht 1 Einheit ( $u^2$ ).



**Antworten**

1. \_\_\_\_\_

2. \_\_\_\_\_

3. \_\_\_\_\_

4. \_\_\_\_\_

5. \_\_\_\_\_

6. \_\_\_\_\_

7. \_\_\_\_\_

8. \_\_\_\_\_

9. \_\_\_\_\_

10. \_\_\_\_\_

11. \_\_\_\_\_

12. \_\_\_\_\_

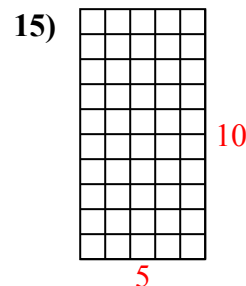
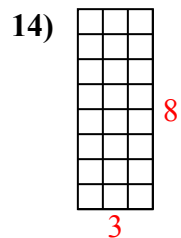
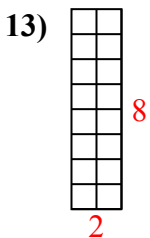
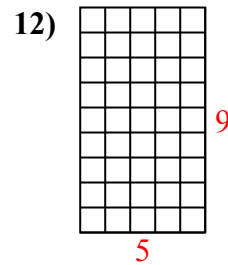
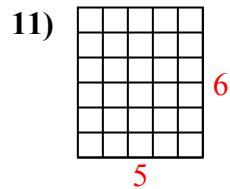
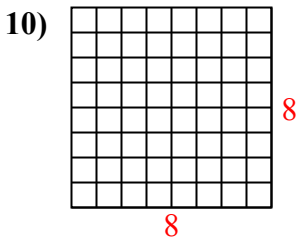
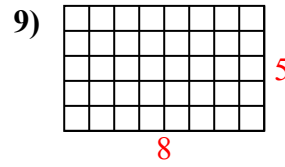
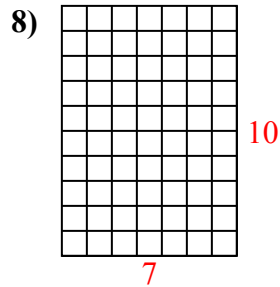
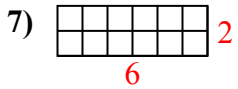
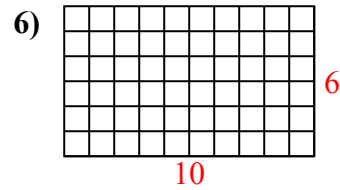
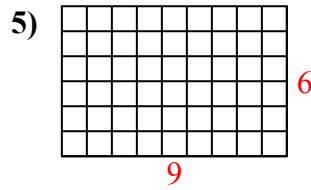
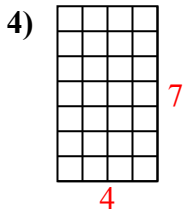
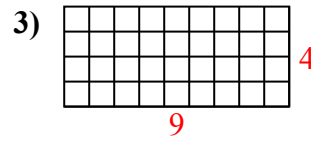
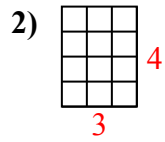
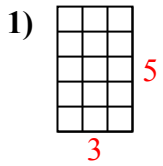
13. \_\_\_\_\_

14. \_\_\_\_\_

15. \_\_\_\_\_



Berechne die Fläche. Jeder Block entspricht 1 Einheit ( $u^2$ ).



Antworten

1. 15  $u^2$

2. 12  $u^2$

3. 36  $u^2$

4. 28  $u^2$

5. 54  $u^2$

6. 60  $u^2$

7. 12  $u^2$

8. 70  $u^2$

9. 40  $u^2$

10. 64  $u^2$

11. 30  $u^2$

12. 45  $u^2$

13. 16  $u^2$

14. 24  $u^2$

15. 50  $u^2$