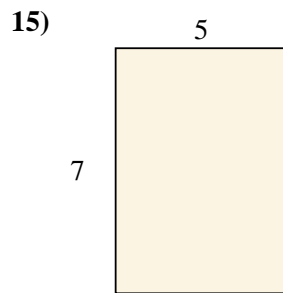
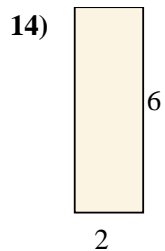
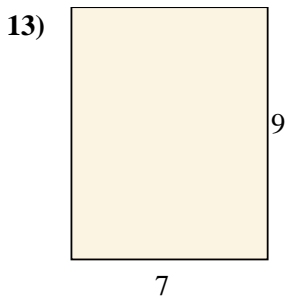
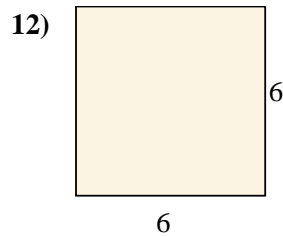
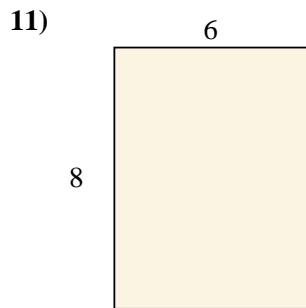
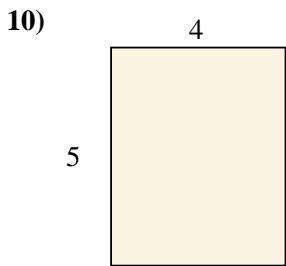
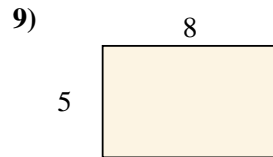
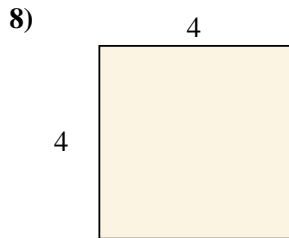
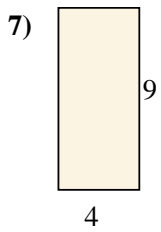
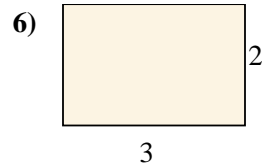
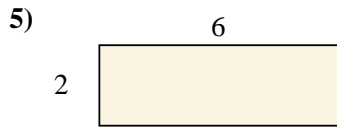
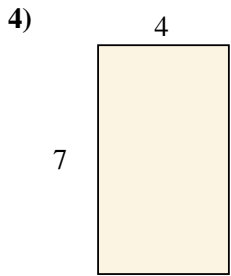
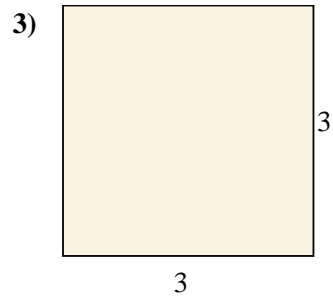
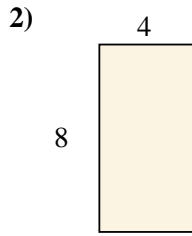
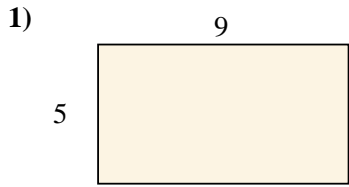




Berechne die Fläche der gezeigten Rechtecke.

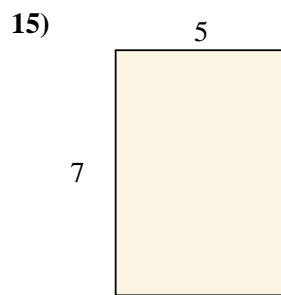
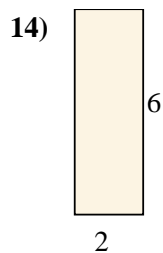
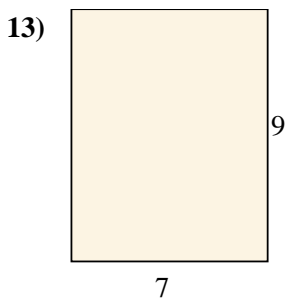
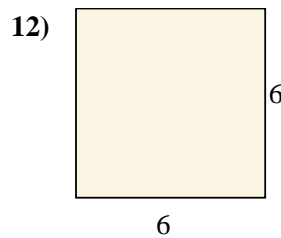
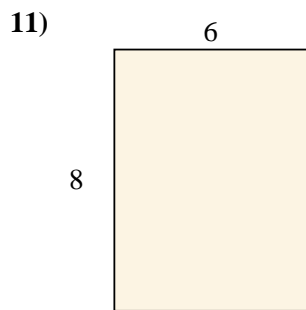
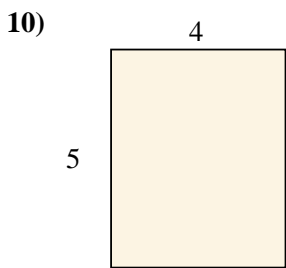
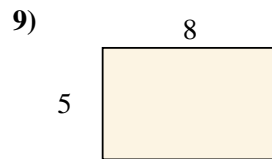
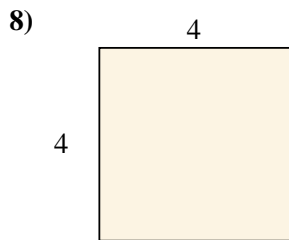
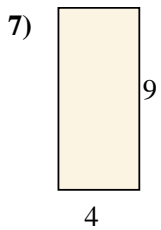
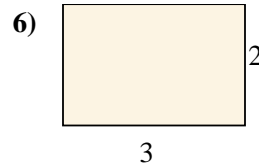
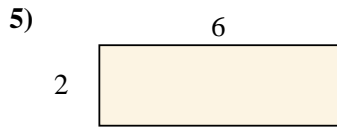
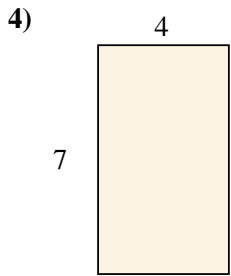
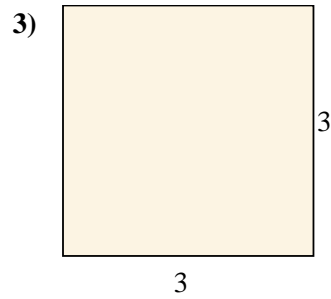
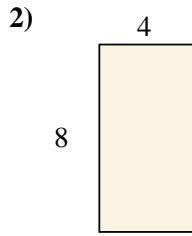
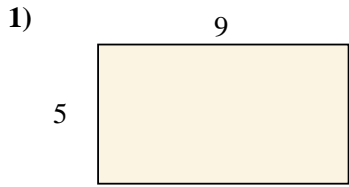
Antworten



- 1. _____
- 2. _____
- 3. _____
- 4. _____
- 5. _____
- 6. _____
- 7. _____
- 8. _____
- 9. _____
- 10. _____
- 11. _____
- 12. _____
- 13. _____
- 14. _____
- 15. _____



Berechne die Fläche der gezeigten Rechtecke.



Antworten

1. 45 cm²

2. 32 cm²

3. 9 cm²

4. 28 cm²

5. 12 cm²

6. 6 cm²

7. 36 cm²

8. 16 cm²

9. 40 cm²

10. 20 cm²

11. 48 cm²

12. 36 cm²

13. 63 cm²

14. 12 cm²

15. 35 cm²