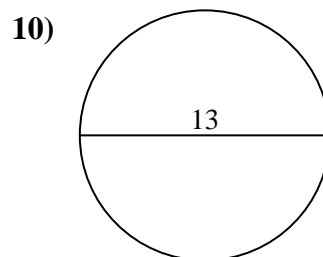
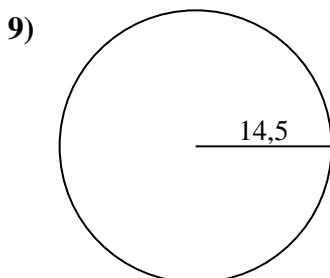
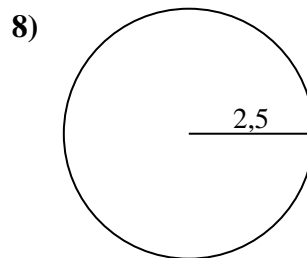
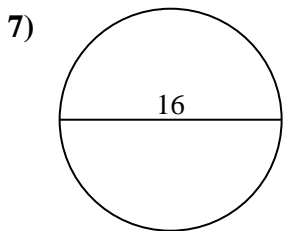
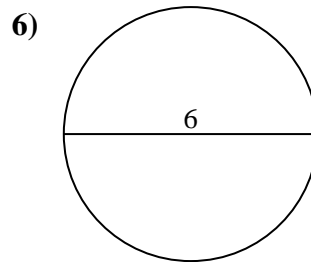
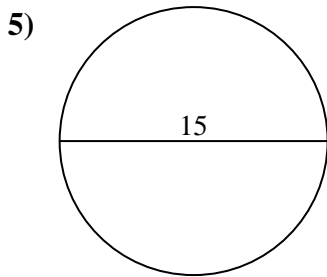
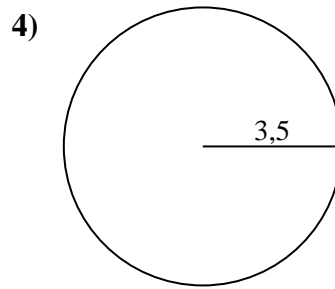
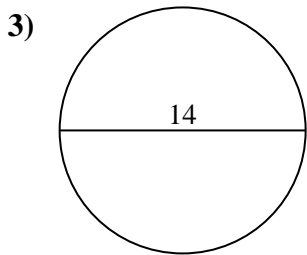
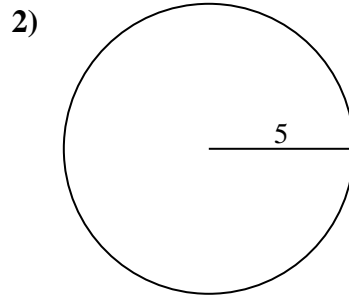
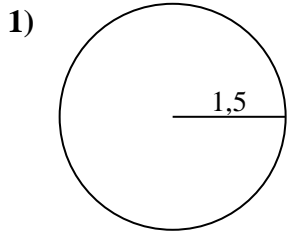




Berechne jeden Kreisumfang. Die Kreise sind nicht maßstäblich.

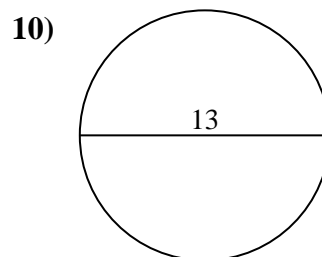
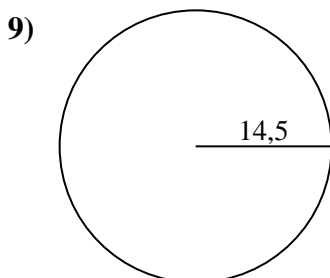
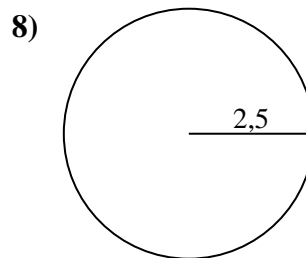
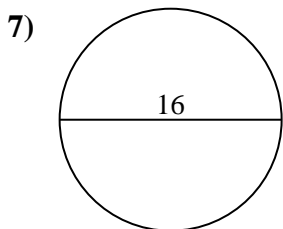
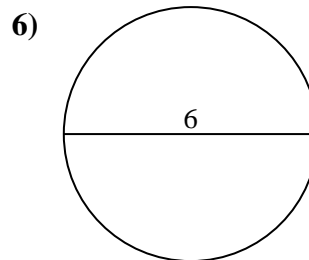
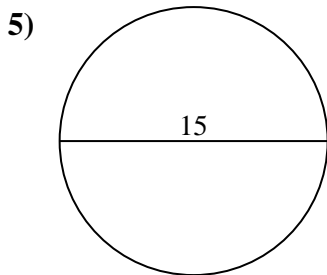
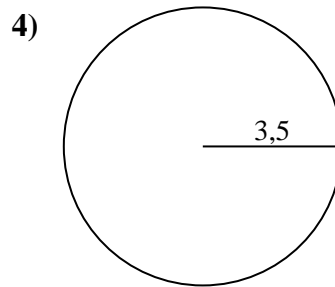
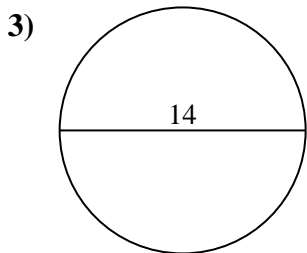
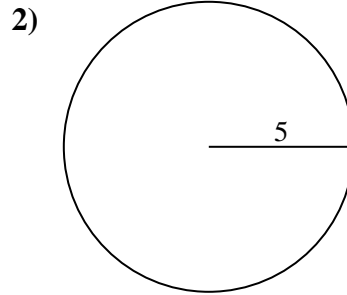
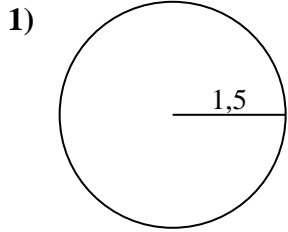


Antworten

- 1. _____
- 2. _____
- 3. _____
- 4. _____
- 5. _____
- 6. _____
- 7. _____
- 8. _____
- 9. _____
- 10. _____



Berechne jeden Kreisumfang. Die Kreise sind nicht maßstäblich.

**Antworten**1. 9,42 cm2. 31,42 cm3. 43,98 cm4. 21,99 cm5. 47,12 cm6. 18,85 cm7. 50,27 cm8. 15,71 cm9. 91,11 cm10. 40,84 cm



Berechne jeden Kreisumfang. Die Kreise sind nicht maßstäblich.

Antworten

21,99 cm	15,71 cm	9,42 cm	50,27 cm	31,42 cm
91,11 cm	43,98 cm	18,85 cm	40,84 cm	47,12 cm

1. _____
2. _____
3. _____
4. _____
5. _____
6. _____
7. _____
8. _____
9. _____
10. _____

