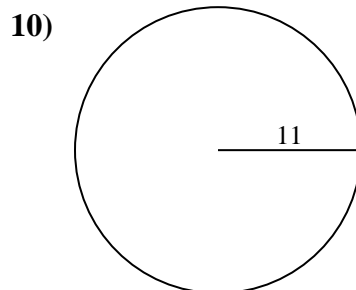
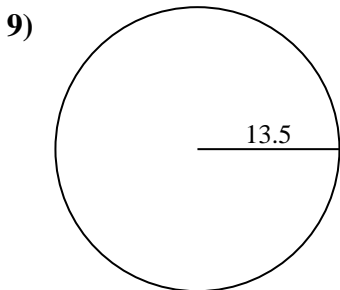
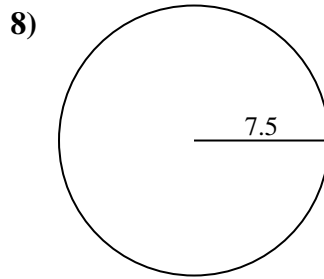
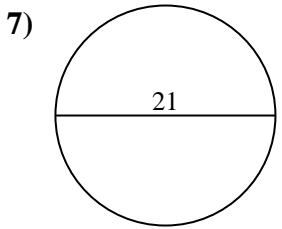
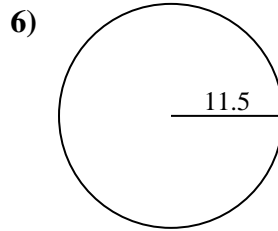
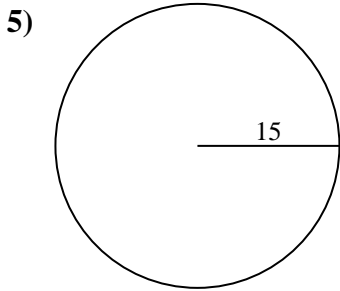
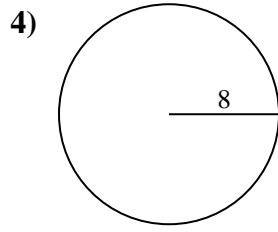
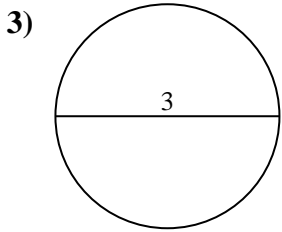
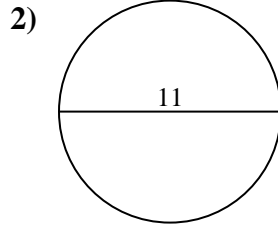
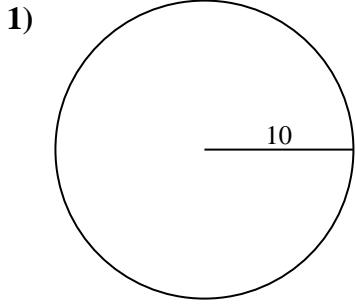




Berechne jeden Kreisumfang. Die Kreise sind nicht maßstäblich.



Antworten

1. \_\_\_\_\_

2. \_\_\_\_\_

3. \_\_\_\_\_

4. \_\_\_\_\_

5. \_\_\_\_\_

6. \_\_\_\_\_

7. \_\_\_\_\_

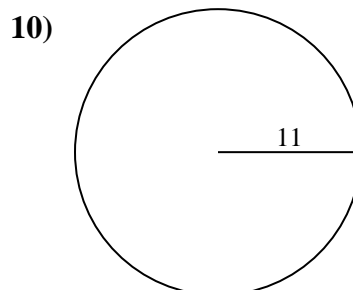
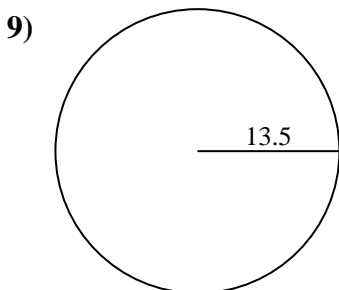
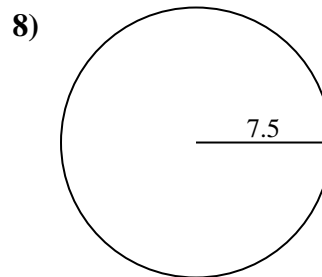
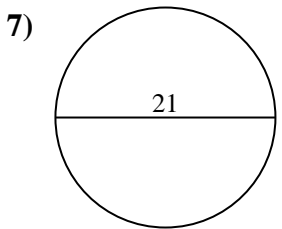
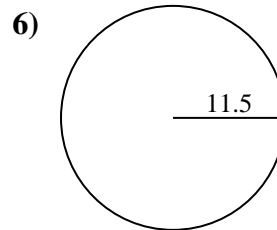
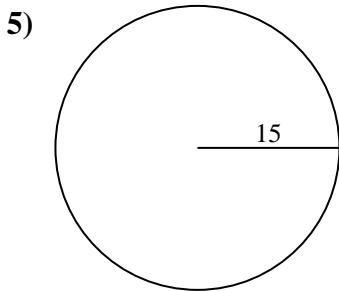
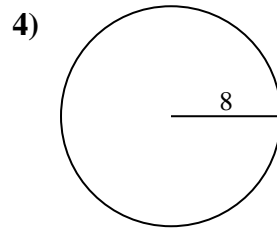
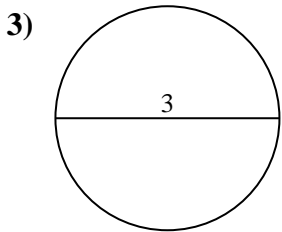
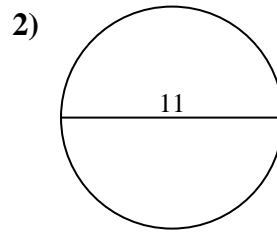
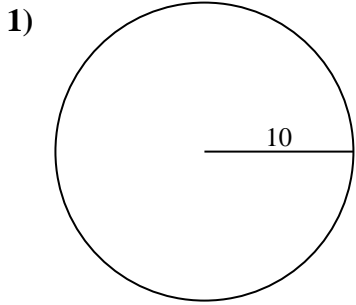
8. \_\_\_\_\_

9. \_\_\_\_\_

10. \_\_\_\_\_



Berechne jeden Kreisumfang. Die Kreise sind nicht maßstäblich.

**Antworten**1. 62,83 cm2. 34,56 cm3. 9,42 cm4. 50,27 cm5. 94,25 cm6. 72,26 cm7. 65,97 cm8. 47,12 cm9. 84,82 cm10. 69,12 cm



Berechne jeden Kreisumfang. Die Kreise sind nicht maßstäblich.

50,27 cm

34,56 cm

65,97 cm

69,12 cm

94,25 cm

84,82 cm

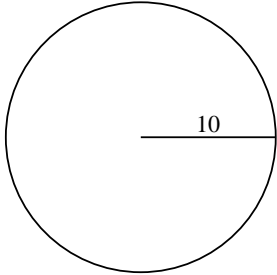
72,26 cm

62,83 cm

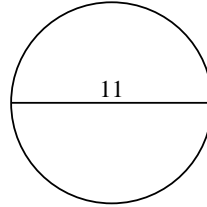
9,42 cm

47,12 cm

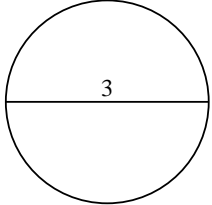
1)



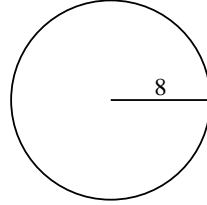
2)



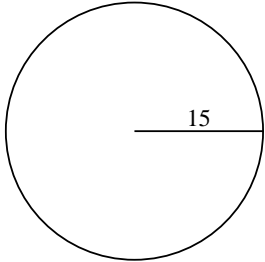
3)



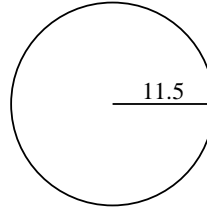
4)



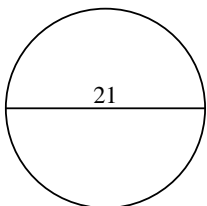
5)



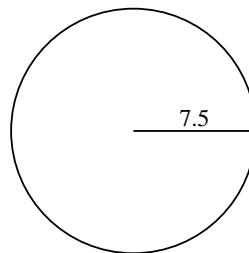
6)



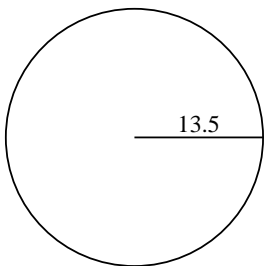
7)



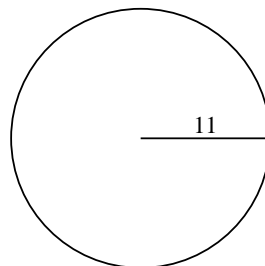
8)



9)



10)



Antworten

1. \_\_\_\_\_

2. \_\_\_\_\_

3. \_\_\_\_\_

4. \_\_\_\_\_

5. \_\_\_\_\_

6. \_\_\_\_\_

7. \_\_\_\_\_

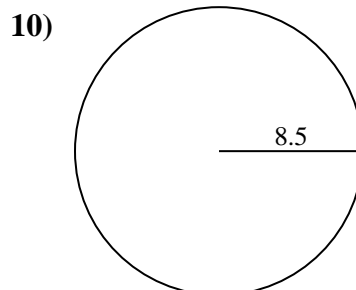
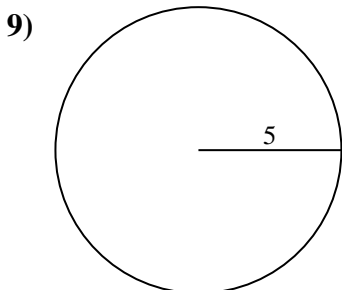
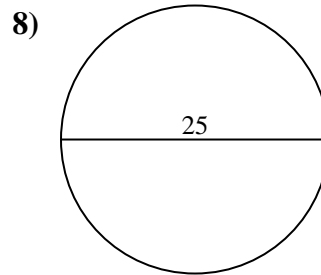
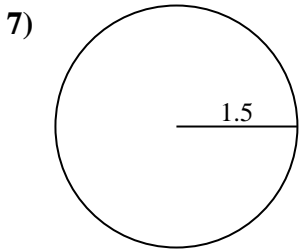
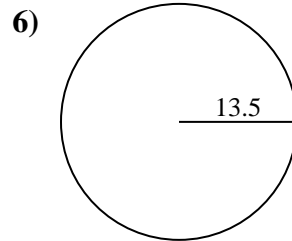
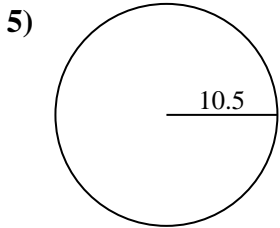
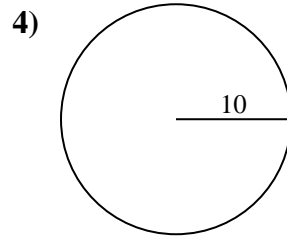
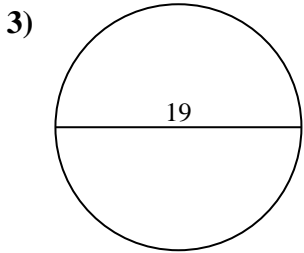
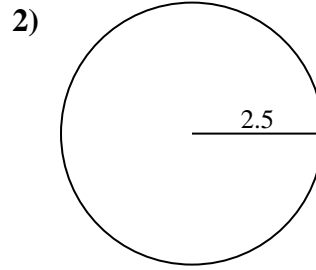
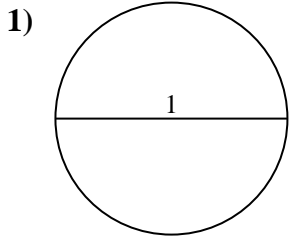
8. \_\_\_\_\_

9. \_\_\_\_\_

10. \_\_\_\_\_



Berechne jeden Kreisumfang. Die Kreise sind nicht maßstäblich.

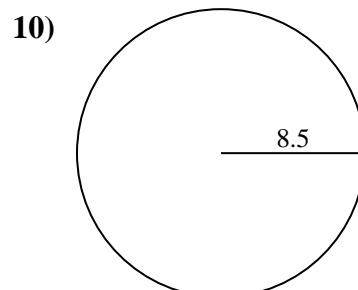
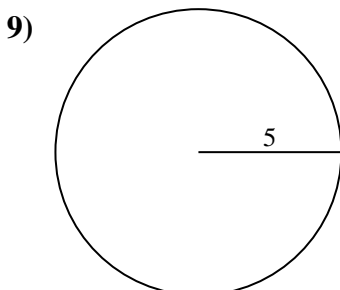
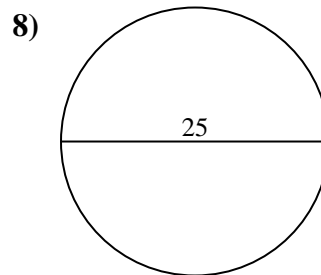
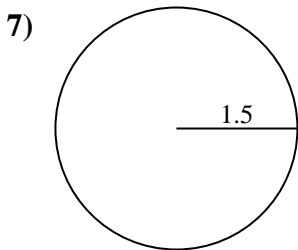
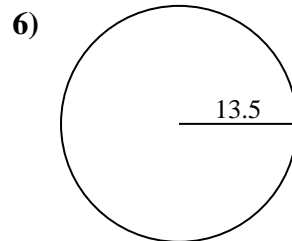
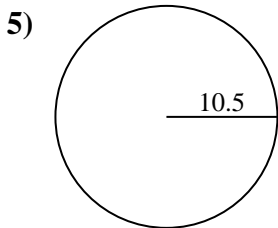
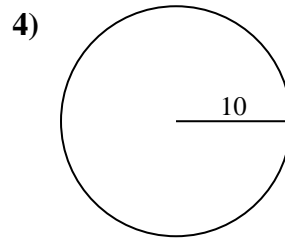
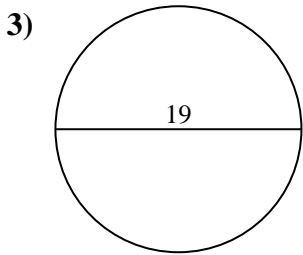
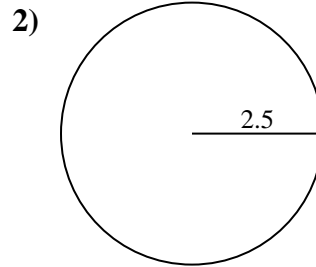
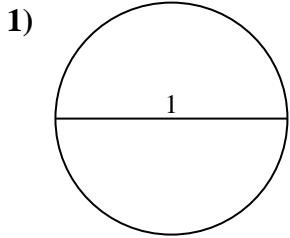


Antworten

- 1. \_\_\_\_\_
- 2. \_\_\_\_\_
- 3. \_\_\_\_\_
- 4. \_\_\_\_\_
- 5. \_\_\_\_\_
- 6. \_\_\_\_\_
- 7. \_\_\_\_\_
- 8. \_\_\_\_\_
- 9. \_\_\_\_\_
- 10. \_\_\_\_\_



Berechne jeden Kreisumfang. Die Kreise sind nicht maßstäblich.

**Antworten**1. 3,14 cm2. 15,71 cm3. 59,69 cm4. 62,83 cm5. 65,97 cm6. 84,82 cm7. 9,42 cm8. 78,54 cm9. 31,42 cm10. 53,41 cm



Berechne jeden Kreisumfang. Die Kreise sind nicht maßstäblich.

59,69 cm

31,42 cm

3,14 cm

78,54 cm

9,42 cm

65,97 cm

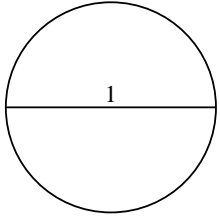
84,82 cm

62,83 cm

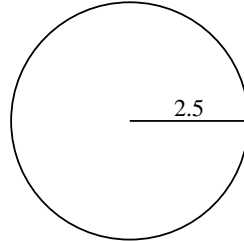
15,71 cm

53,41 cm

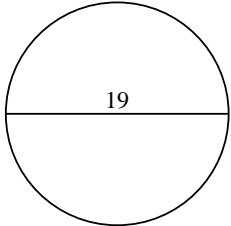
1)



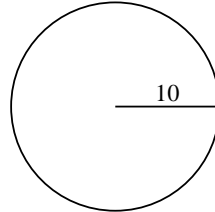
2)



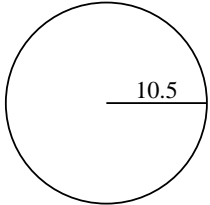
3)



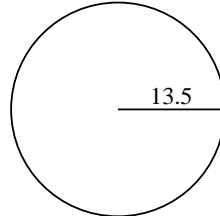
4)



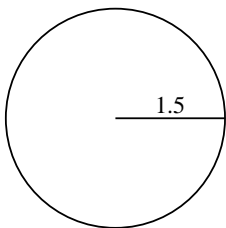
5)



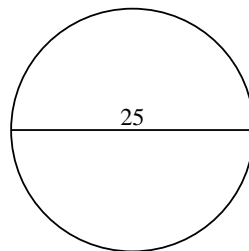
6)



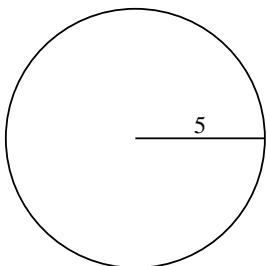
7)



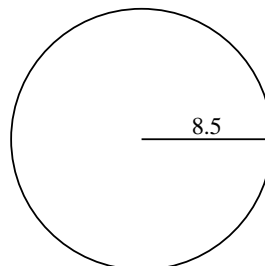
8)



9)



10)



Antworten

1. \_\_\_\_\_

2. \_\_\_\_\_

3. \_\_\_\_\_

4. \_\_\_\_\_

5. \_\_\_\_\_

6. \_\_\_\_\_

7. \_\_\_\_\_

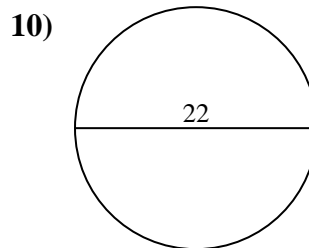
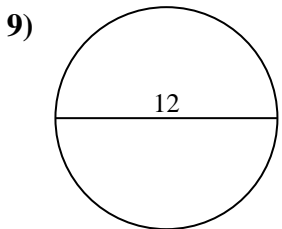
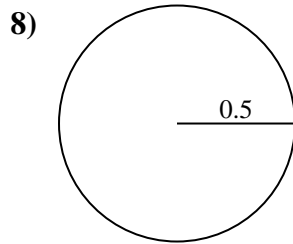
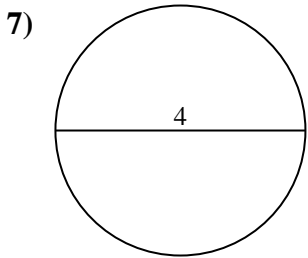
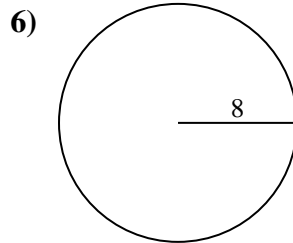
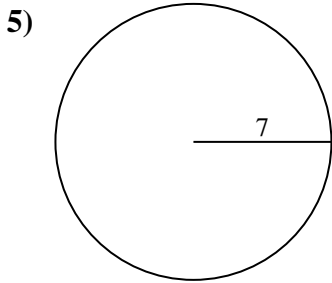
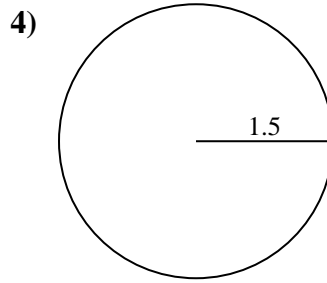
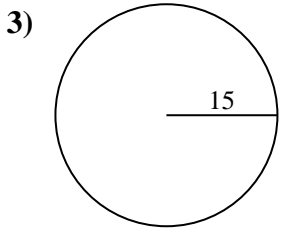
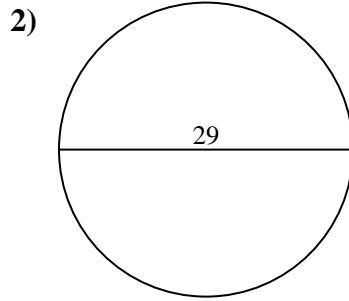
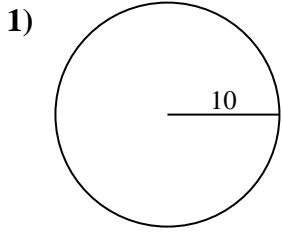
8. \_\_\_\_\_

9. \_\_\_\_\_

10. \_\_\_\_\_



Berechne jeden Kreisumfang. Die Kreise sind nicht maßstäblich.

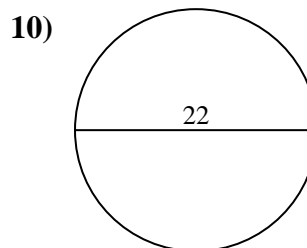
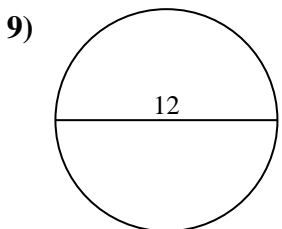
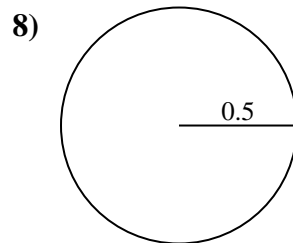
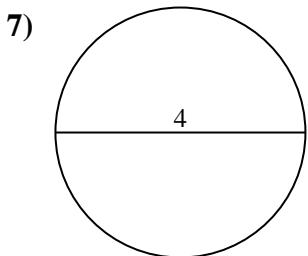
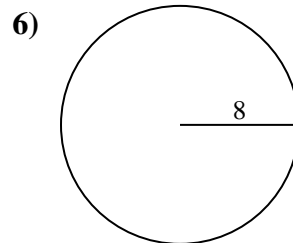
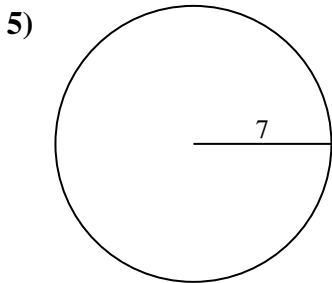
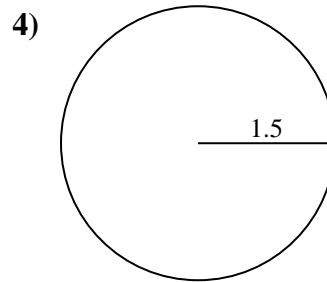
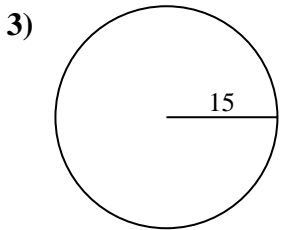
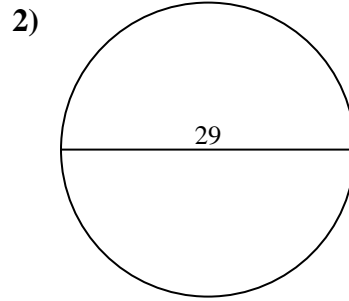
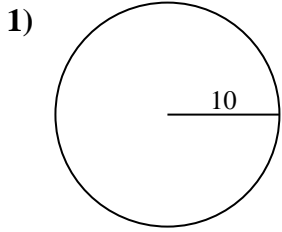


Antworten

- 1. \_\_\_\_\_
- 2. \_\_\_\_\_
- 3. \_\_\_\_\_
- 4. \_\_\_\_\_
- 5. \_\_\_\_\_
- 6. \_\_\_\_\_
- 7. \_\_\_\_\_
- 8. \_\_\_\_\_
- 9. \_\_\_\_\_
- 10. \_\_\_\_\_



Berechne jeden Kreisumfang. Die Kreise sind nicht maßstäblich.

**Antworten**1. **62,83 cm**2. **91,11 cm**3. **94,25 cm**4. **9,42 cm**5. **43,98 cm**6. **50,27 cm**7. **12,57 cm**8. **3,14 cm**9. **37,7 cm**10. **69,12 cm**





Berechne jeden Kreisumfang. Die Kreise sind nicht maßstäblich.

**Antworten**

3,14 cm

50,27 cm

69,12 cm

37,7 cm

43,98 cm

62,83 cm

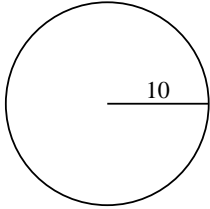
9,42 cm

91,11 cm

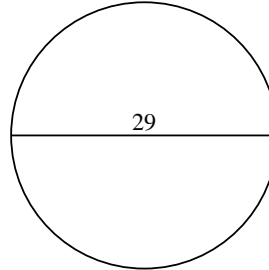
94,25 cm

12,57 cm

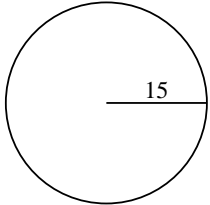
1)



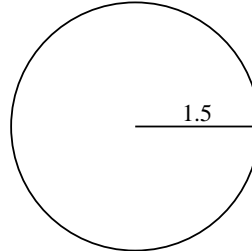
2)



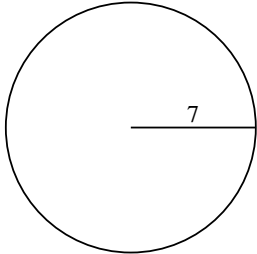
3)



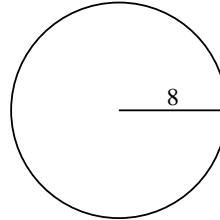
4)



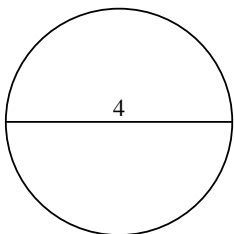
5)



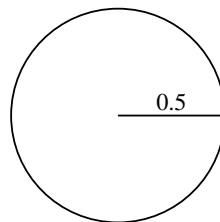
6)



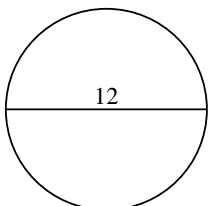
7)



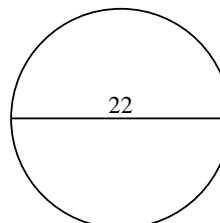
8)



9)



10)



1. \_\_\_\_\_

2. \_\_\_\_\_

3. \_\_\_\_\_

4. \_\_\_\_\_

5. \_\_\_\_\_

6. \_\_\_\_\_

7. \_\_\_\_\_

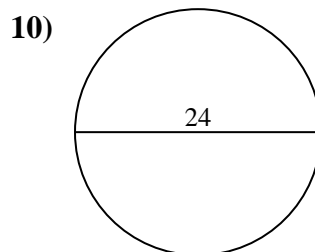
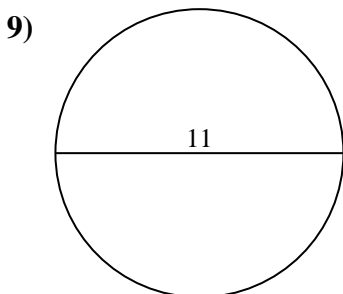
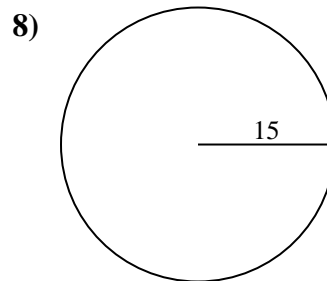
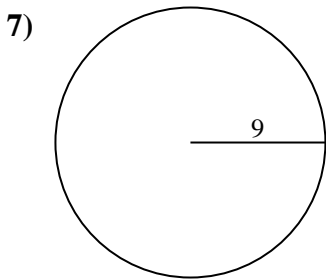
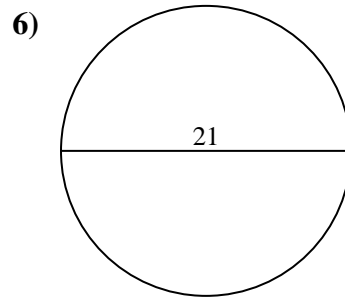
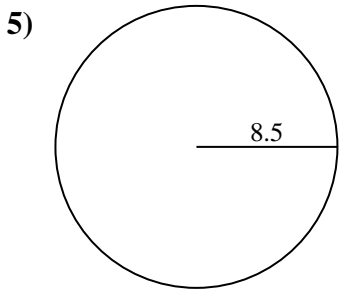
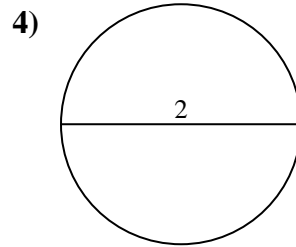
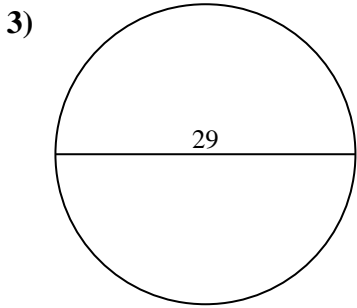
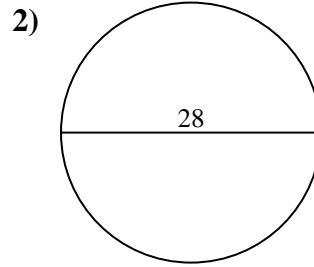
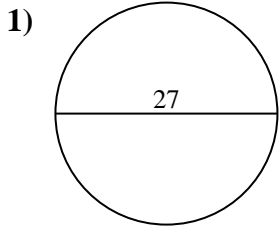
8. \_\_\_\_\_

9. \_\_\_\_\_

10. \_\_\_\_\_



Berechne jeden Kreisumfang. Die Kreise sind nicht maßstäblich.

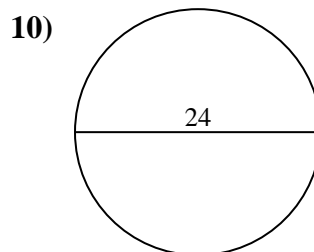
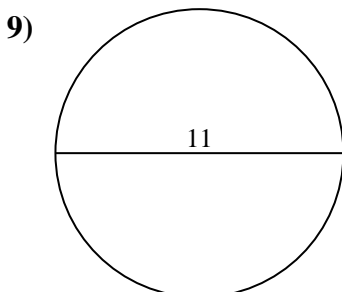
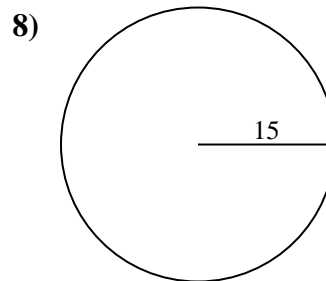
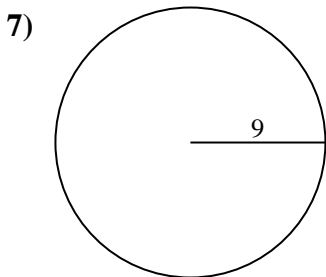
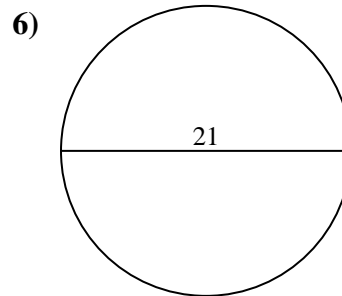
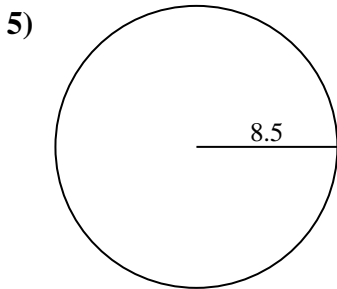
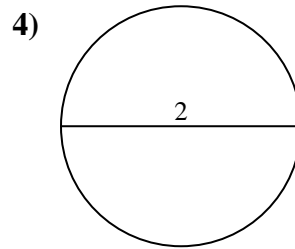
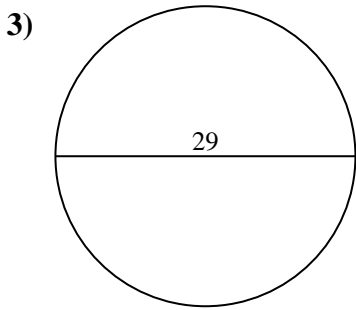
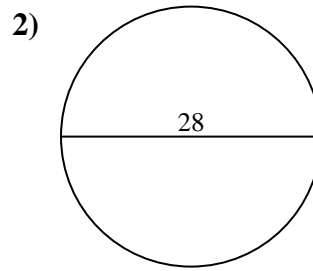
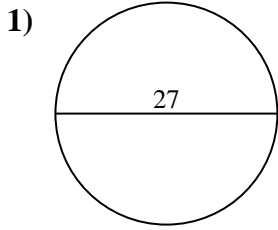


Antworten

- 1. \_\_\_\_\_
- 2. \_\_\_\_\_
- 3. \_\_\_\_\_
- 4. \_\_\_\_\_
- 5. \_\_\_\_\_
- 6. \_\_\_\_\_
- 7. \_\_\_\_\_
- 8. \_\_\_\_\_
- 9. \_\_\_\_\_
- 10. \_\_\_\_\_



Berechne jeden Kreisumfang. Die Kreise sind nicht maßstäblich.

**Antworten**1. 84,82 cm2. 87,96 cm3. 91,11 cm4. 6,28 cm5. 53,41 cm6. 65,97 cm7. 56,55 cm8. 94,25 cm9. 34,56 cm10. 75,4 cm



Berechne jeden Kreisumfang. Die Kreise sind nicht maßstäblich.

**Antworten**

87,96 cm

56,55 cm

65,97 cm

75,4 cm

91,11 cm

34,56 cm

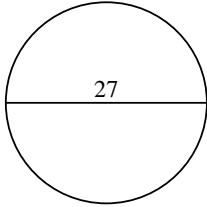
53,41 cm

6,28 cm

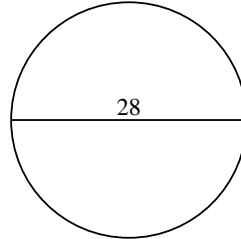
94,25 cm

84,82 cm

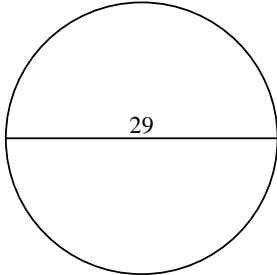
1)



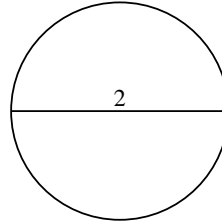
2)



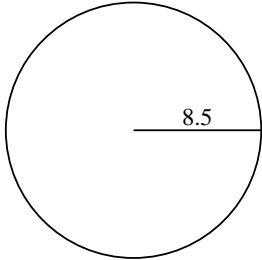
3)



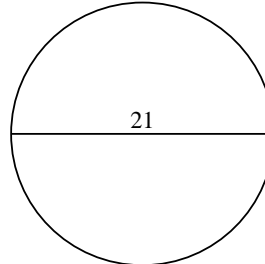
4)



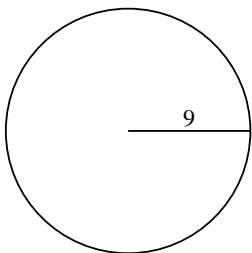
5)



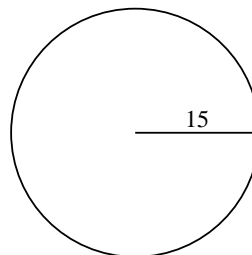
6)



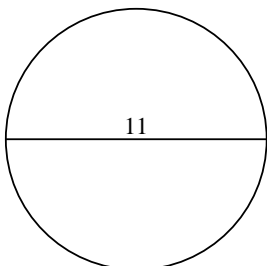
7)



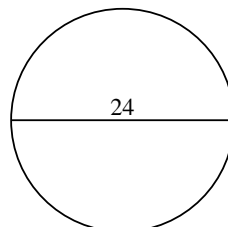
8)



9)



10)



1. \_\_\_\_\_

2. \_\_\_\_\_

3. \_\_\_\_\_

4. \_\_\_\_\_

5. \_\_\_\_\_

6. \_\_\_\_\_

7. \_\_\_\_\_

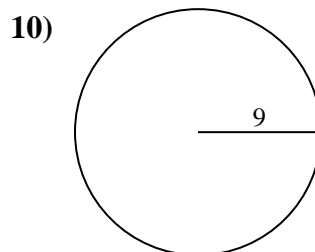
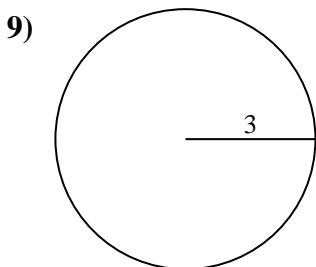
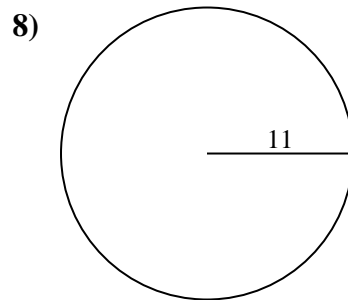
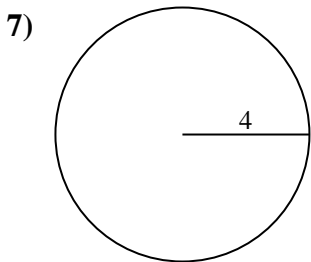
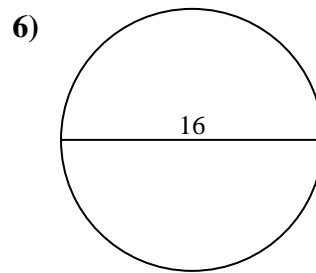
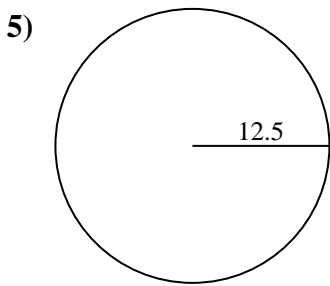
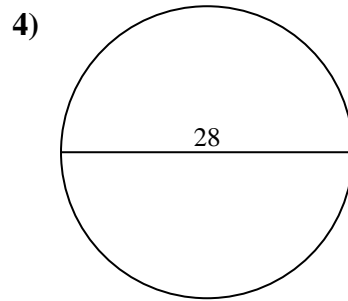
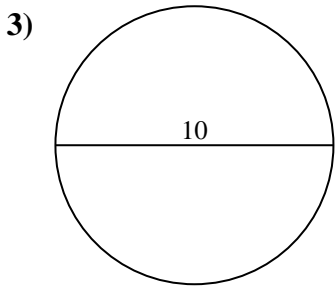
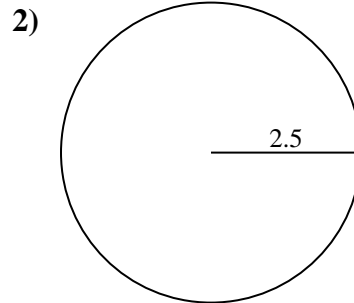
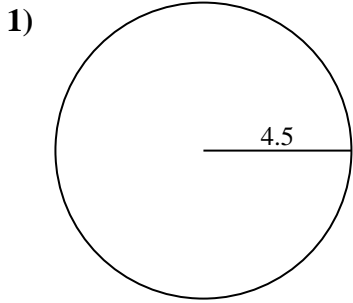
8. \_\_\_\_\_

9. \_\_\_\_\_

10. \_\_\_\_\_



Berechne jeden Kreisumfang. Die Kreise sind nicht maßstäblich.

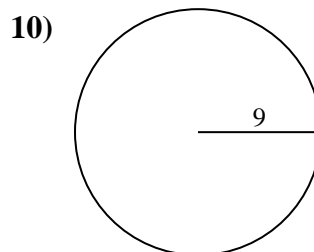
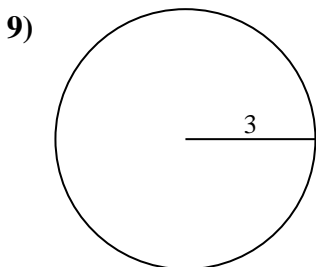
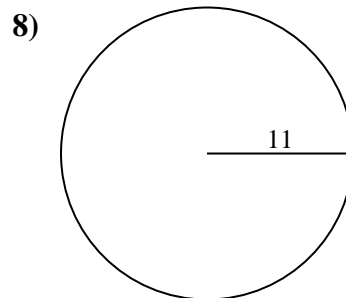
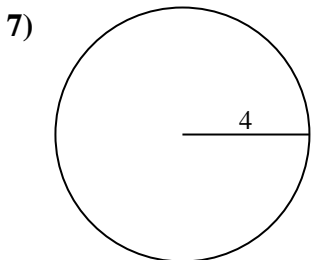
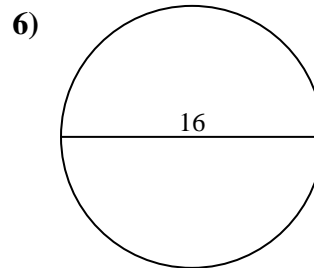
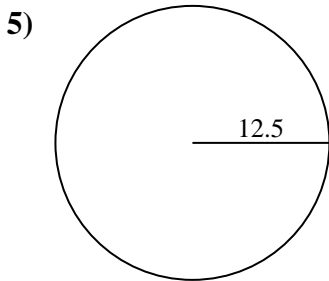
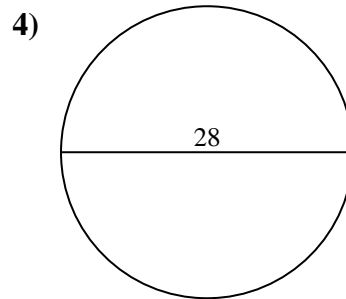
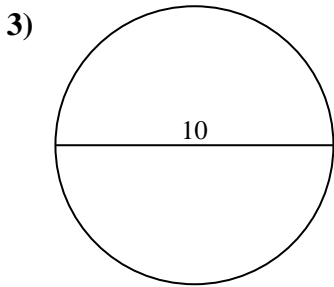
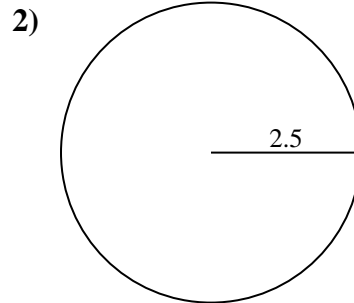
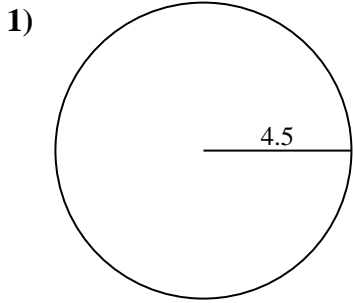


Antworten

- 1. \_\_\_\_\_
- 2. \_\_\_\_\_
- 3. \_\_\_\_\_
- 4. \_\_\_\_\_
- 5. \_\_\_\_\_
- 6. \_\_\_\_\_
- 7. \_\_\_\_\_
- 8. \_\_\_\_\_
- 9. \_\_\_\_\_
- 10. \_\_\_\_\_



Berechne jeden Kreisumfang. Die Kreise sind nicht maßstäblich.

**Antworten**1. 28,27 cm2. 15,71 cm3. 31,42 cm4. 87,96 cm5. 78,54 cm6. 50,27 cm7. 25,13 cm8. 69,12 cm9. 18,85 cm10. 56,55 cm



Berechne jeden Kreisumfang. Die Kreise sind nicht maßstäblich.

69,12 cm

50,27 cm

78,54 cm

18,85 cm

31,42 cm

25,13 cm

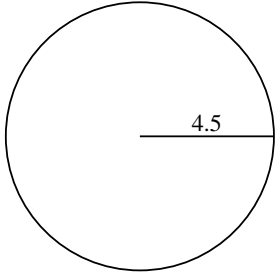
28,27 cm

15,71 cm

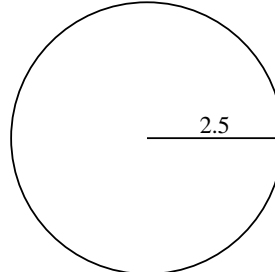
56,55 cm

87,96 cm

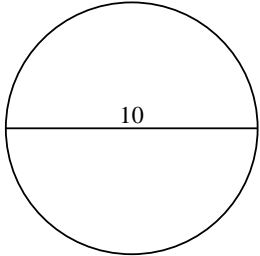
1)



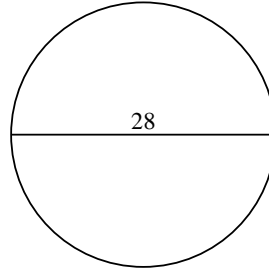
2)



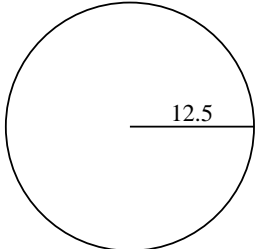
3)



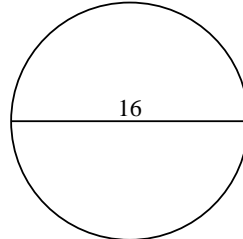
4)



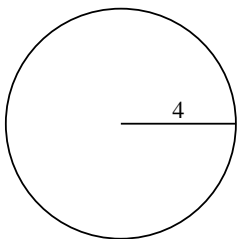
5)



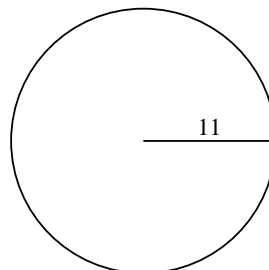
6)



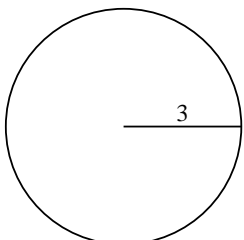
7)



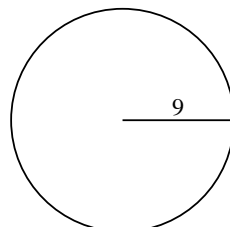
8)



9)



10)



Antworten

1. \_\_\_\_\_

2. \_\_\_\_\_

3. \_\_\_\_\_

4. \_\_\_\_\_

5. \_\_\_\_\_

6. \_\_\_\_\_

7. \_\_\_\_\_

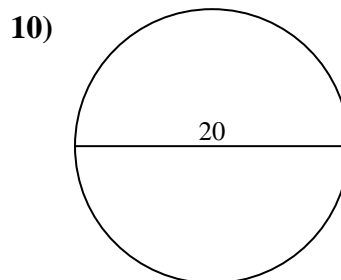
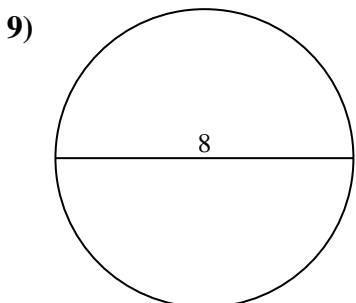
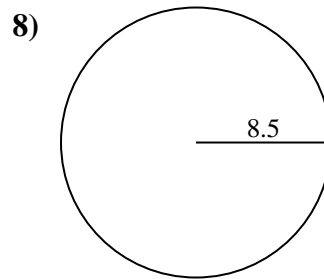
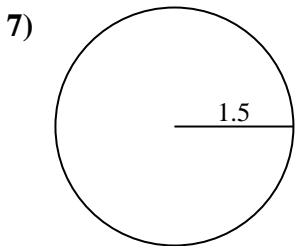
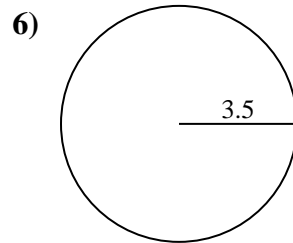
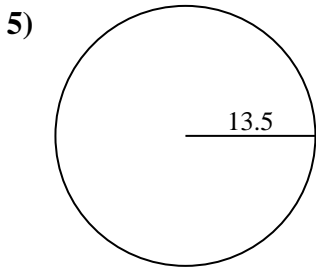
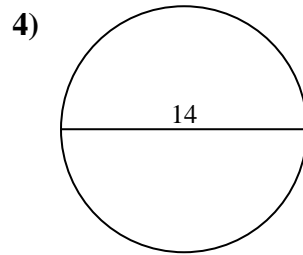
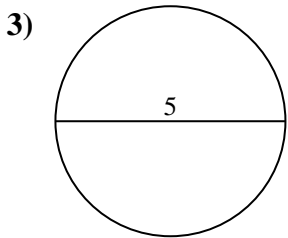
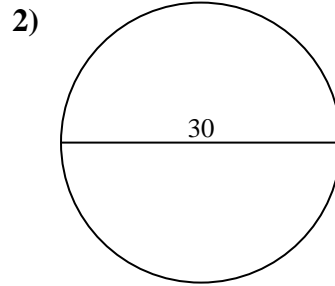
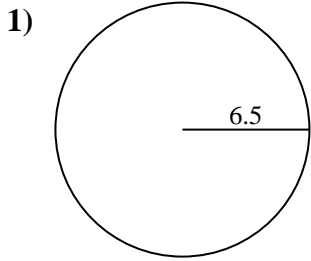
8. \_\_\_\_\_

9. \_\_\_\_\_

10. \_\_\_\_\_



Berechne jeden Kreisumfang. Die Kreise sind nicht maßstäblich.



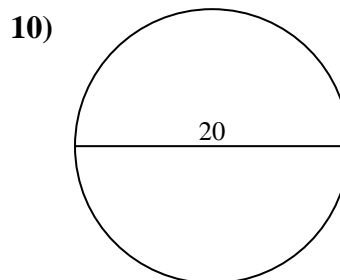
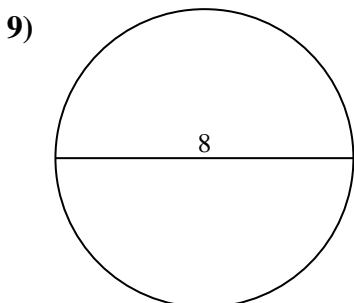
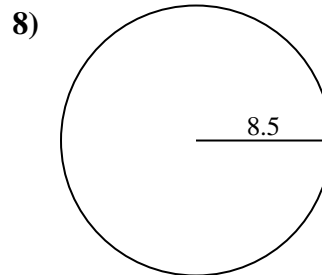
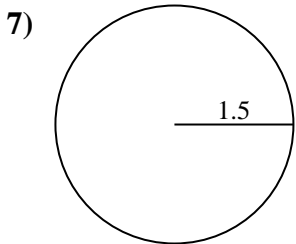
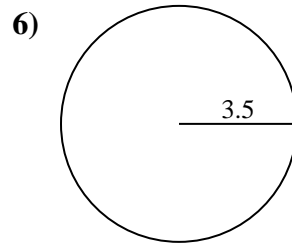
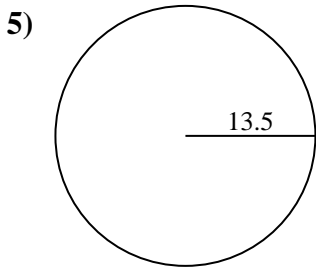
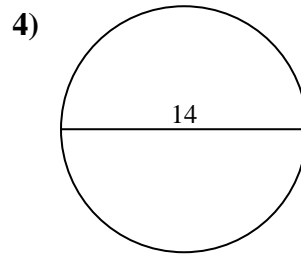
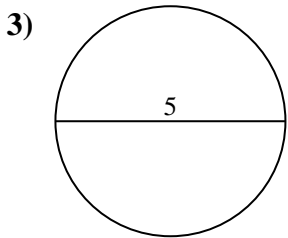
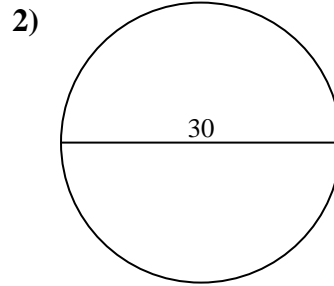
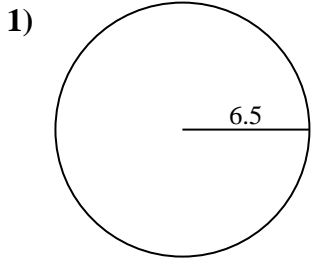
Antworten

- 1. \_\_\_\_\_
- 2. \_\_\_\_\_
- 3. \_\_\_\_\_
- 4. \_\_\_\_\_
- 5. \_\_\_\_\_
- 6. \_\_\_\_\_
- 7. \_\_\_\_\_
- 8. \_\_\_\_\_
- 9. \_\_\_\_\_
- 10. \_\_\_\_\_





Berechne jeden Kreisumfang. Die Kreise sind nicht maßstäblich.

**Antworten**1. 40,84 cm2. 94,25 cm3. 15,71 cm4. 43,98 cm5. 84,82 cm6. 21,99 cm7. 9,42 cm8. 53,41 cm9. 25,13 cm10. 62,83 cm



Berechne jeden Kreisumfang. Die Kreise sind nicht maßstäblich.

**Antworten**

43,98 cm

9,42 cm

62,83 cm

40,84 cm

21,99 cm

15,71 cm

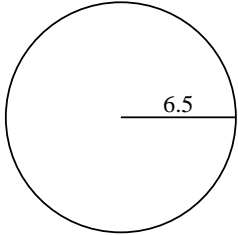
84,82 cm

94,25 cm

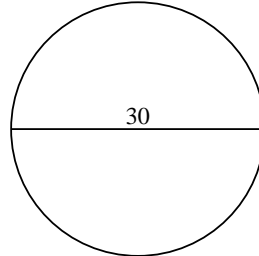
25,13 cm

53,41 cm

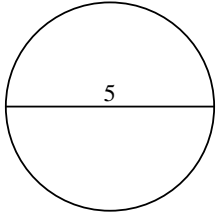
1)



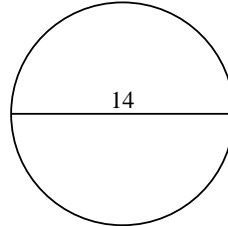
2)



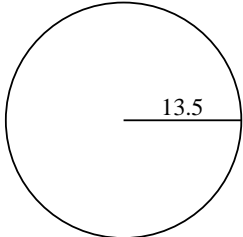
3)



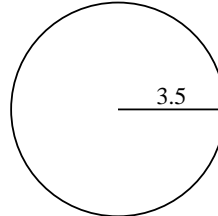
4)



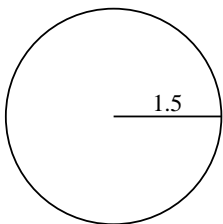
5)



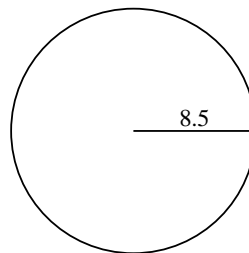
6)



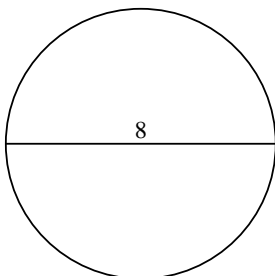
7)



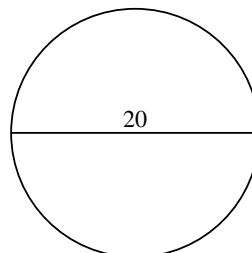
8)



9)



10)



1. \_\_\_\_\_

2. \_\_\_\_\_

3. \_\_\_\_\_

4. \_\_\_\_\_

5. \_\_\_\_\_

6. \_\_\_\_\_

7. \_\_\_\_\_

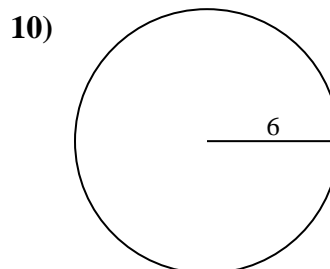
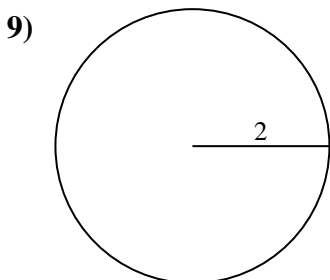
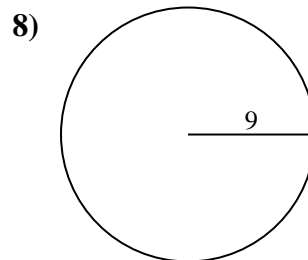
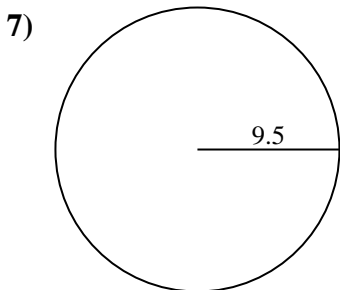
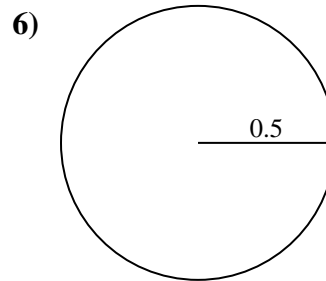
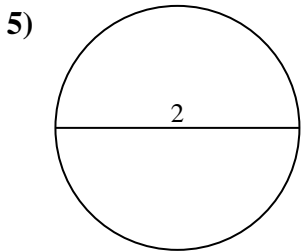
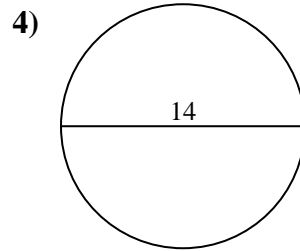
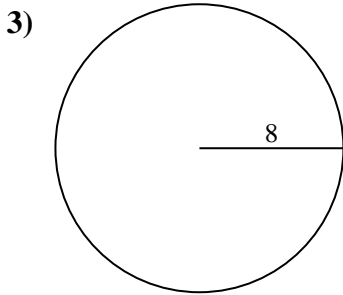
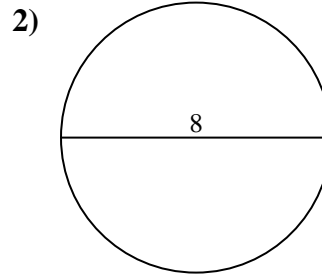
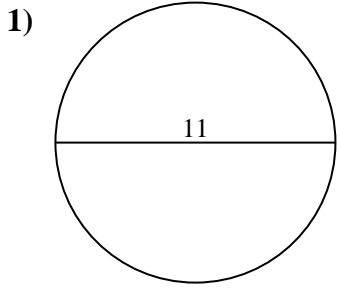
8. \_\_\_\_\_

9. \_\_\_\_\_

10. \_\_\_\_\_



Berechne jeden Kreisumfang. Die Kreise sind nicht maßstäblich.

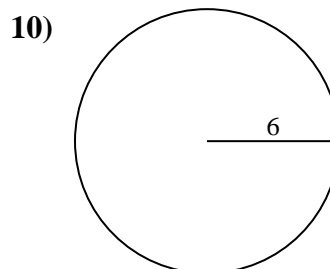
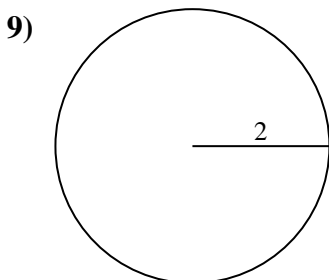
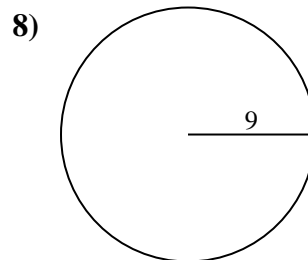
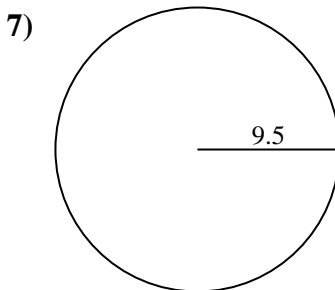
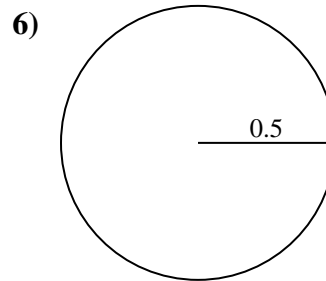
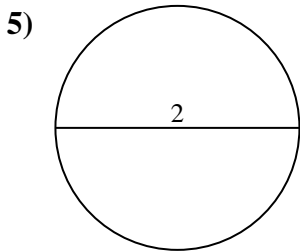
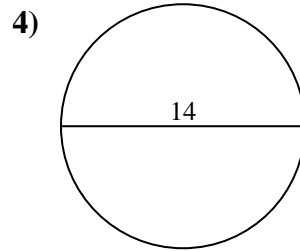
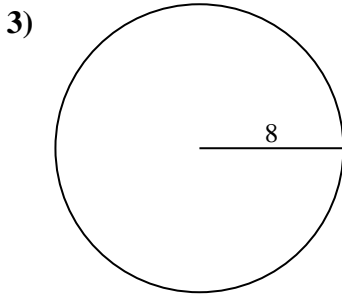
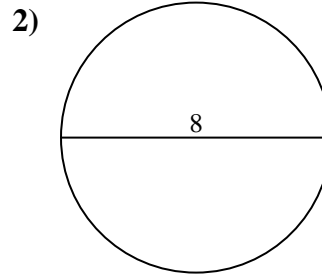
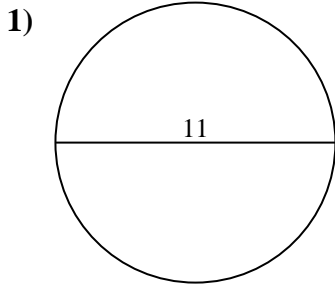


Antworten

- 1. \_\_\_\_\_
- 2. \_\_\_\_\_
- 3. \_\_\_\_\_
- 4. \_\_\_\_\_
- 5. \_\_\_\_\_
- 6. \_\_\_\_\_
- 7. \_\_\_\_\_
- 8. \_\_\_\_\_
- 9. \_\_\_\_\_
- 10. \_\_\_\_\_



Berechne jeden Kreisumfang. Die Kreise sind nicht maßstäblich.

**Antworten**1. 34,56 cm2. 25,13 cm3. 50,27 cm4. 43,98 cm5. 6,28 cm6. 3,14 cm7. 59,69 cm8. 56,55 cm9. 12,57 cm10. 37,7 cm



Berechne jeden Kreisumfang. Die Kreise sind nicht maßstäblich.

50,27 cm

25,13 cm

3,14 cm

59,69 cm

37,7 cm

43,98 cm

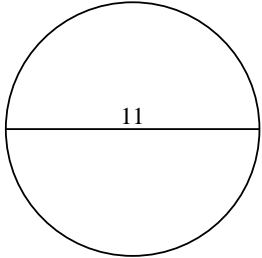
34,56 cm

56,55 cm

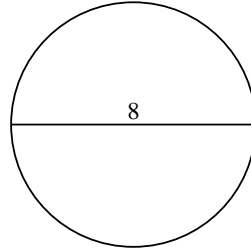
12,57 cm

6,28 cm

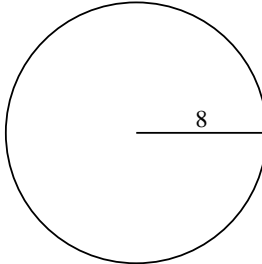
1)



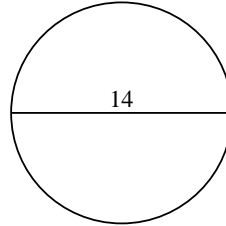
2)



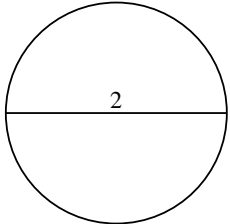
3)



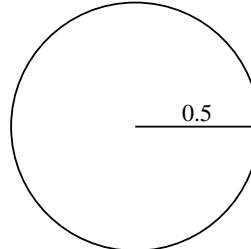
4)



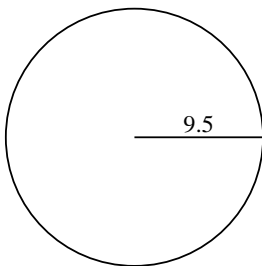
5)



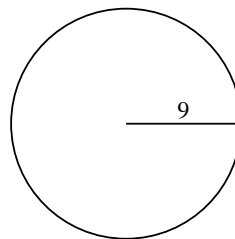
6)



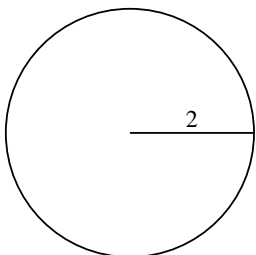
7)



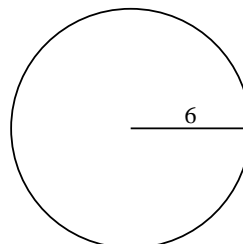
8)



9)



10)



Antworten

1. \_\_\_\_\_

2. \_\_\_\_\_

3. \_\_\_\_\_

4. \_\_\_\_\_

5. \_\_\_\_\_

6. \_\_\_\_\_

7. \_\_\_\_\_

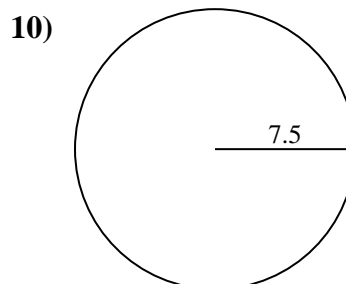
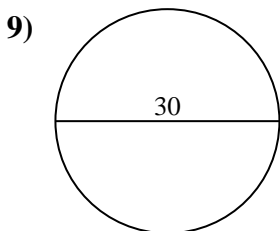
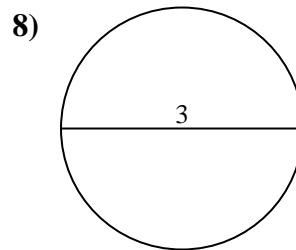
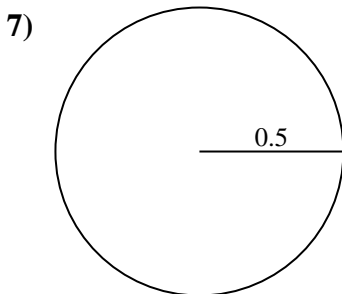
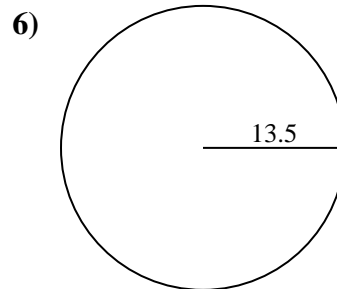
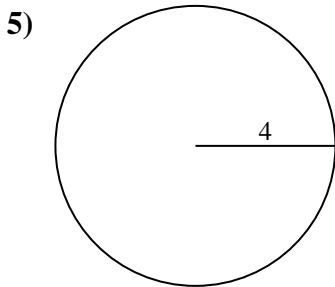
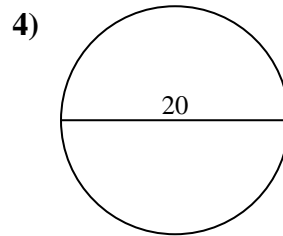
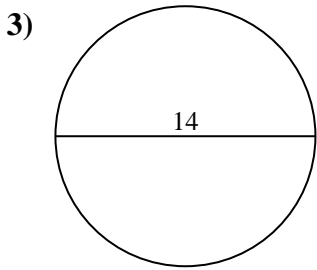
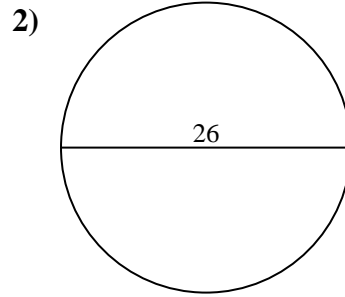
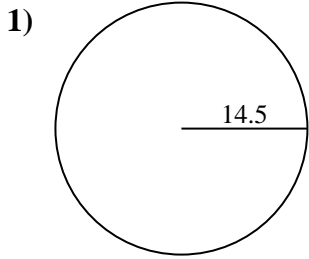
8. \_\_\_\_\_

9. \_\_\_\_\_

10. \_\_\_\_\_



Berechne jeden Kreisumfang. Die Kreise sind nicht maßstäblich.

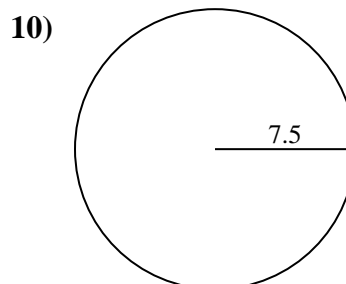
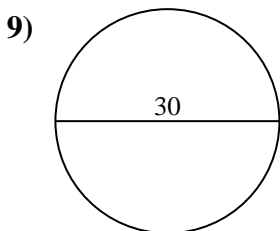
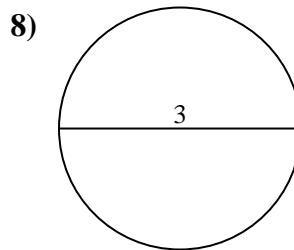
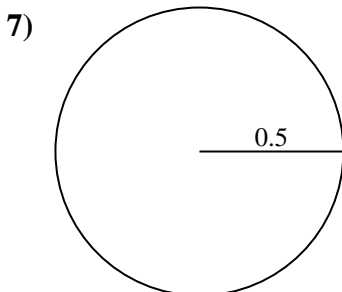
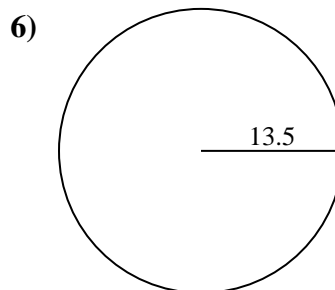
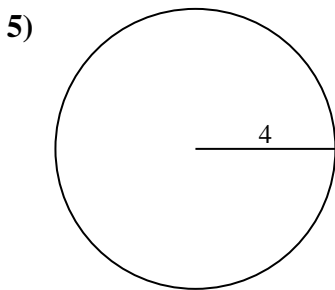
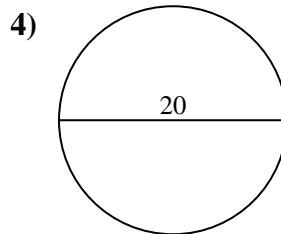
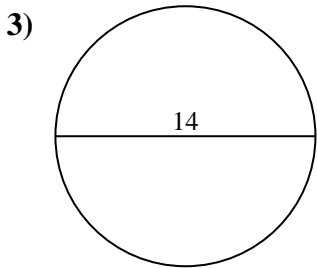
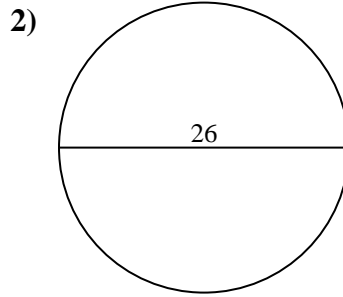
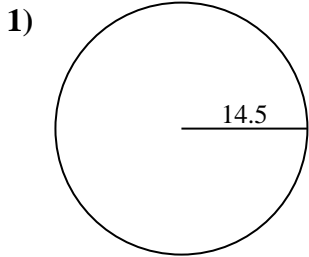


Antworten

- 1. \_\_\_\_\_
- 2. \_\_\_\_\_
- 3. \_\_\_\_\_
- 4. \_\_\_\_\_
- 5. \_\_\_\_\_
- 6. \_\_\_\_\_
- 7. \_\_\_\_\_
- 8. \_\_\_\_\_
- 9. \_\_\_\_\_
- 10. \_\_\_\_\_



Berechne jeden Kreisumfang. Die Kreise sind nicht maßstäblich.

**Antworten**1. 91,11 cm2. 81,68 cm3. 43,98 cm4. 62,83 cm5. 25,13 cm6. 84,82 cm7. 3,14 cm8. 9,42 cm9. 94,25 cm10. 47,12 cm



Berechne jeden Kreisumfang. Die Kreise sind nicht maßstäblich.

84,82 cm

81,68 cm

9,42 cm

94,25 cm

47,12 cm

43,98 cm

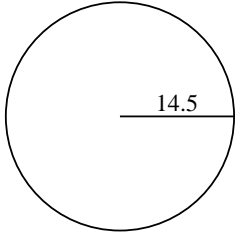
91,11 cm

3,14 cm

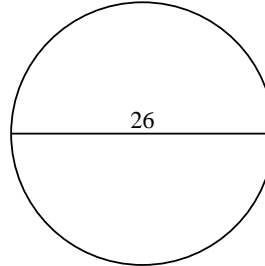
62,83 cm

25,13 cm

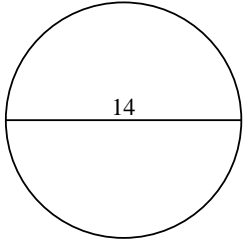
1)



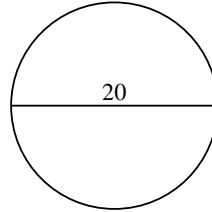
2)



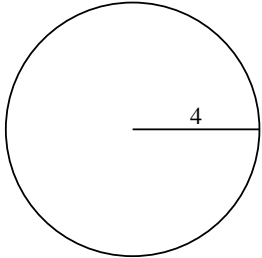
3)



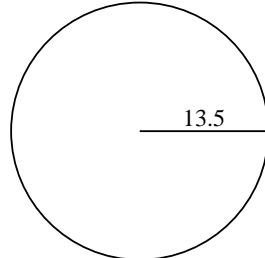
4)



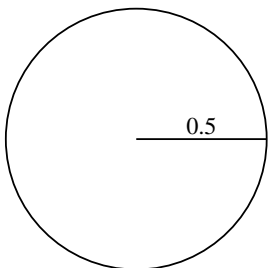
5)



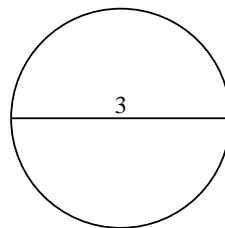
6)



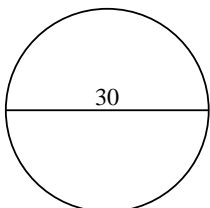
7)



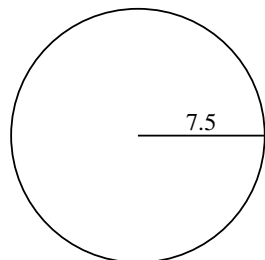
8)



9)



10)



Antworten

1. \_\_\_\_\_

2. \_\_\_\_\_

3. \_\_\_\_\_

4. \_\_\_\_\_

5. \_\_\_\_\_

6. \_\_\_\_\_

7. \_\_\_\_\_

8. \_\_\_\_\_

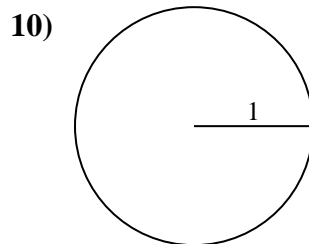
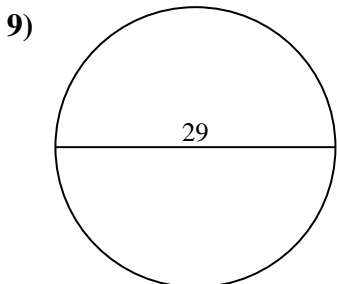
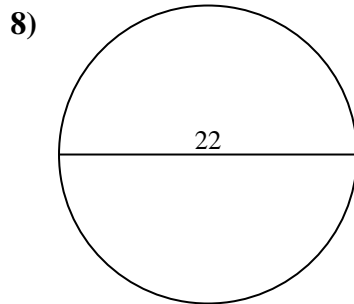
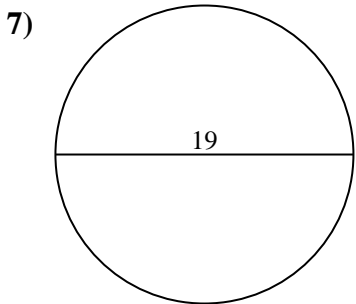
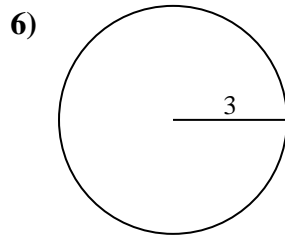
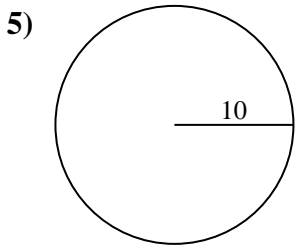
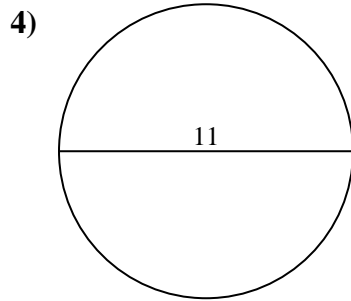
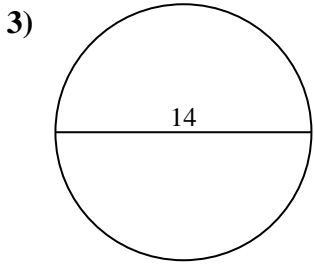
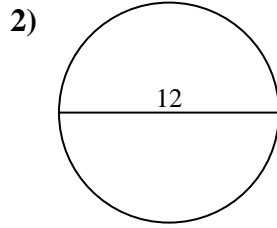
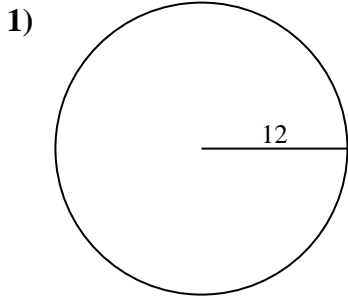
9. \_\_\_\_\_

10. \_\_\_\_\_





Berechne jeden Kreisumfang. Die Kreise sind nicht maßstäblich.



**Antworten**

1. \_\_\_\_\_

2. \_\_\_\_\_

3. \_\_\_\_\_

4. \_\_\_\_\_

5. \_\_\_\_\_

6. \_\_\_\_\_

7. \_\_\_\_\_

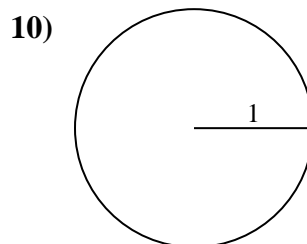
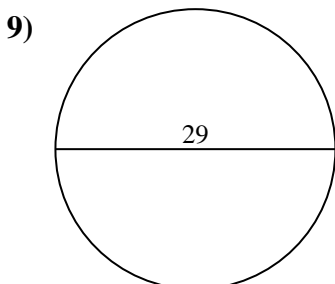
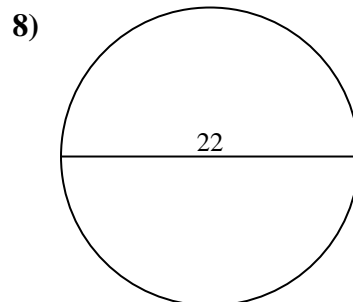
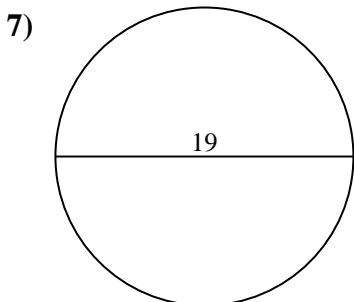
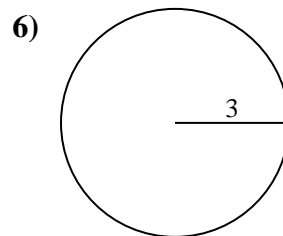
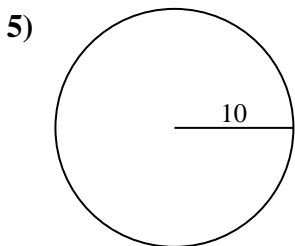
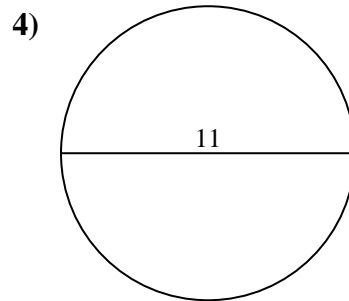
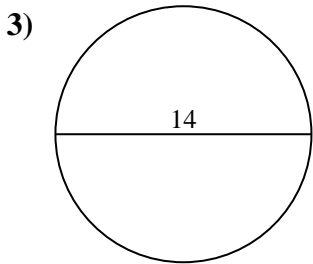
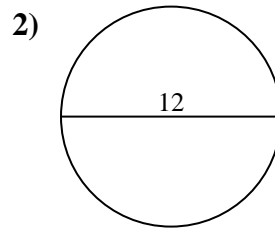
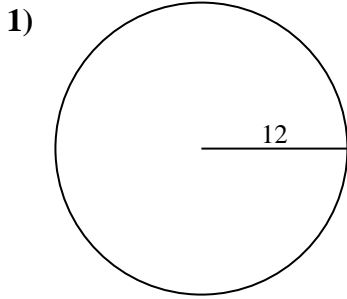
8. \_\_\_\_\_

9. \_\_\_\_\_

10. \_\_\_\_\_



Berechne jeden Kreisumfang. Die Kreise sind nicht maßstäblich.

**Antworten**1. 75,4 cm2. 37,7 cm3. 43,98 cm4. 34,56 cm5. 62,83 cm6. 18,85 cm7. 59,69 cm8. 69,12 cm9. 91,11 cm10. 6,28 cm



Berechne jeden Kreisumfang. Die Kreise sind nicht maßstäblich.

69,12 cm

43,98 cm

62,83 cm

91,11 cm

18,85 cm

34,56 cm

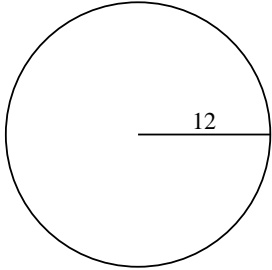
75,4 cm

6,28 cm

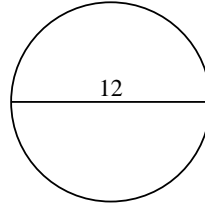
59,69 cm

37,7 cm

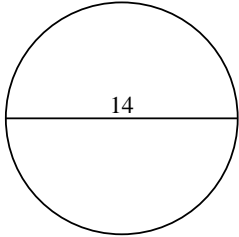
1)



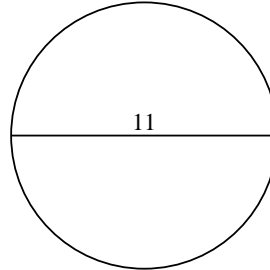
2)



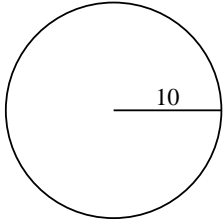
3)



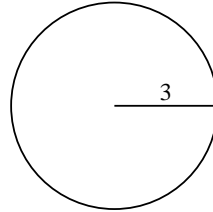
4)



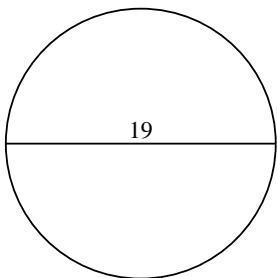
5)



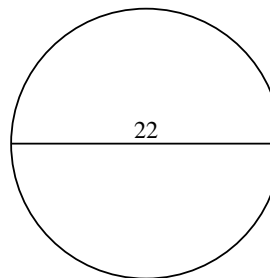
6)



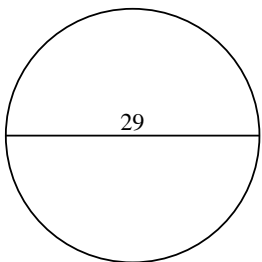
7)



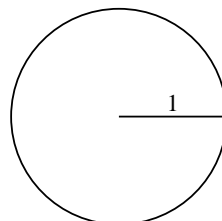
8)



9)



10)



**Antworten**

1. \_\_\_\_\_

2. \_\_\_\_\_

3. \_\_\_\_\_

4. \_\_\_\_\_

5. \_\_\_\_\_

6. \_\_\_\_\_

7. \_\_\_\_\_

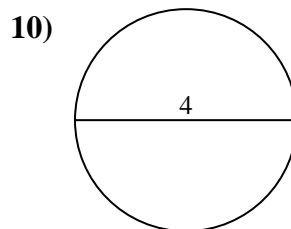
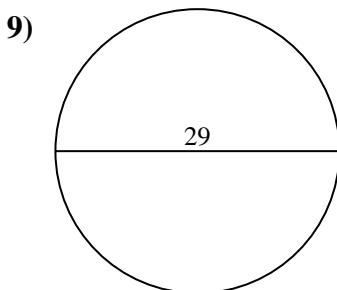
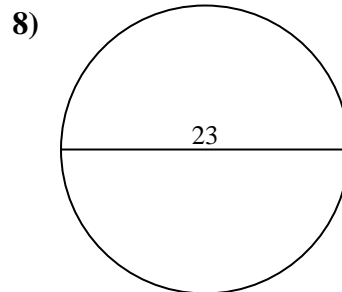
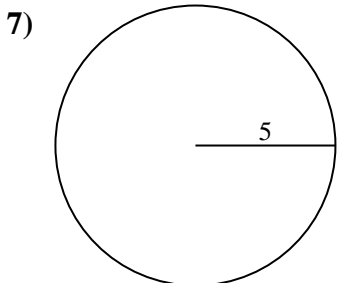
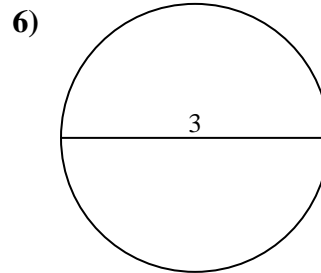
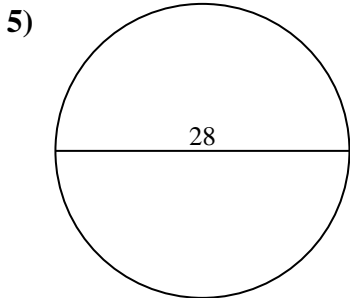
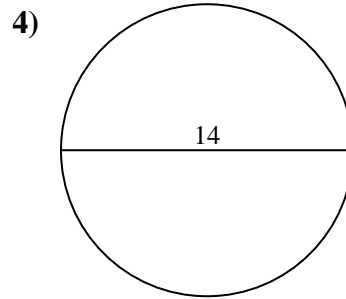
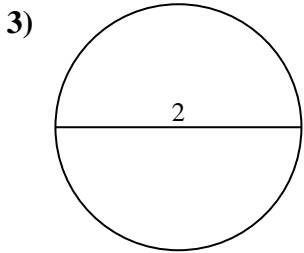
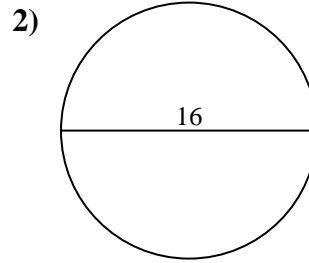
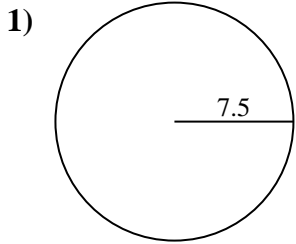
8. \_\_\_\_\_

9. \_\_\_\_\_

10. \_\_\_\_\_



Berechne jeden Kreisumfang. Die Kreise sind nicht maßstäblich.

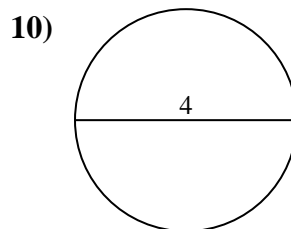
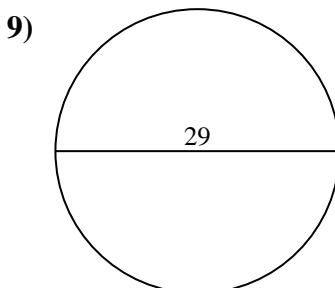
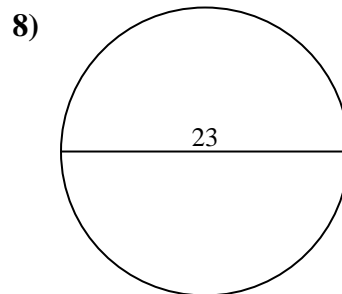
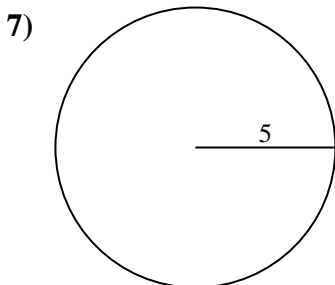
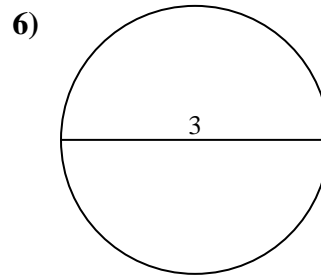
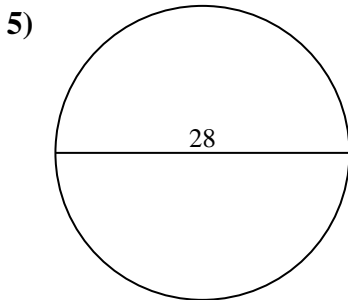
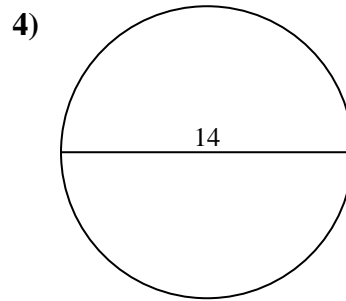
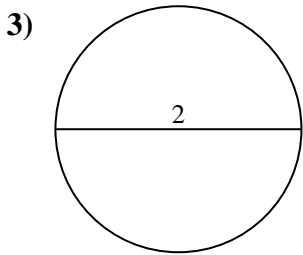
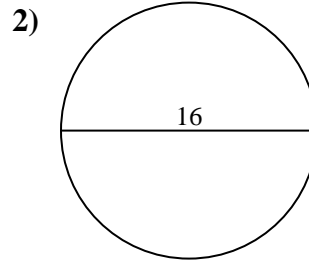
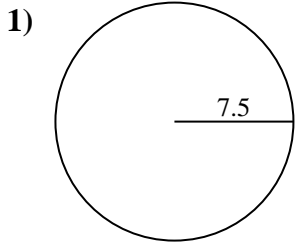


Antworten

- 1. \_\_\_\_\_
- 2. \_\_\_\_\_
- 3. \_\_\_\_\_
- 4. \_\_\_\_\_
- 5. \_\_\_\_\_
- 6. \_\_\_\_\_
- 7. \_\_\_\_\_
- 8. \_\_\_\_\_
- 9. \_\_\_\_\_
- 10. \_\_\_\_\_



Berechne jeden Kreisumfang. Die Kreise sind nicht maßstäblich.

**Antworten**1. 47,12 cm2. 50,27 cm3. 6,28 cm4. 43,98 cm5. 87,96 cm6. 9,42 cm7. 31,42 cm8. 72,26 cm9. 91,11 cm10. 12,57 cm



Berechne jeden Kreisumfang. Die Kreise sind nicht maßstäblich.

12,57 cm

43,98 cm

6,28 cm

87,96 cm

91,11 cm

47,12 cm

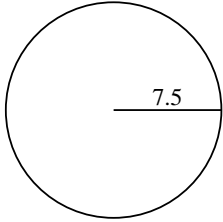
31,42 cm

9,42 cm

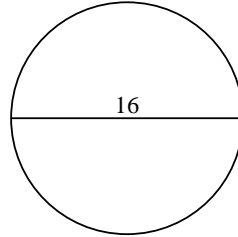
72,26 cm

50,27 cm

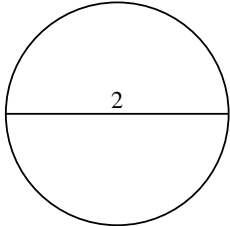
1)



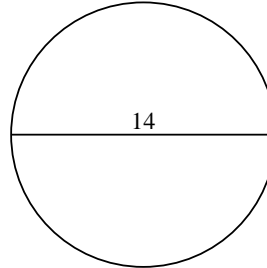
2)



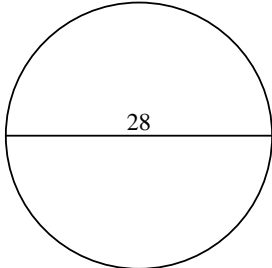
3)



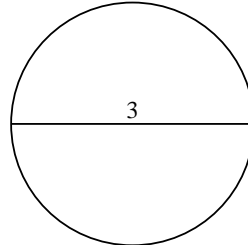
4)



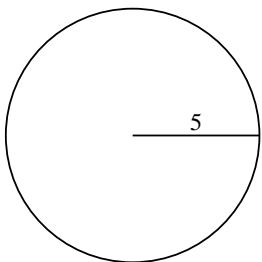
5)



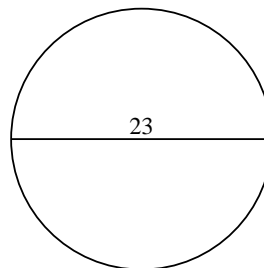
6)



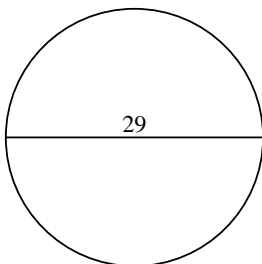
7)



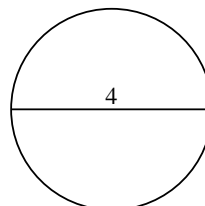
8)



9)



10)



**Antworten**

1. \_\_\_\_\_

2. \_\_\_\_\_

3. \_\_\_\_\_

4. \_\_\_\_\_

5. \_\_\_\_\_

6. \_\_\_\_\_

7. \_\_\_\_\_

8. \_\_\_\_\_

9. \_\_\_\_\_

10. \_\_\_\_\_