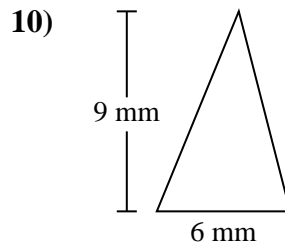
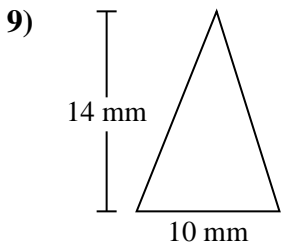
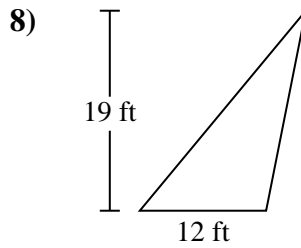
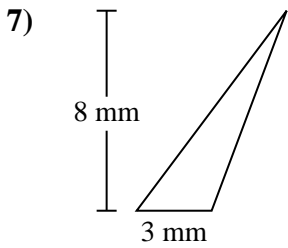
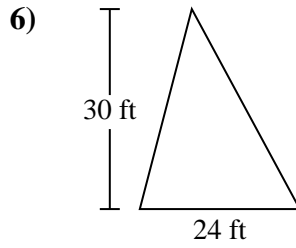
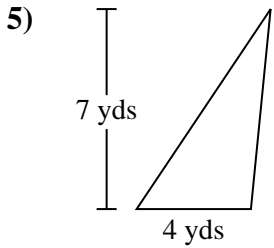
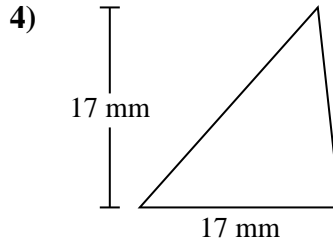
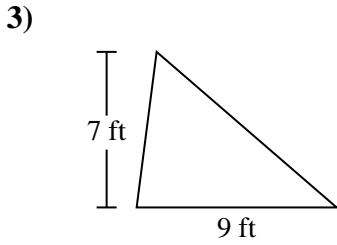
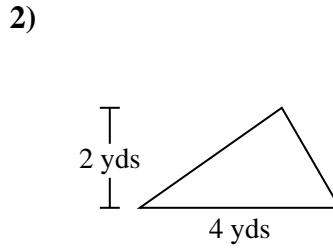
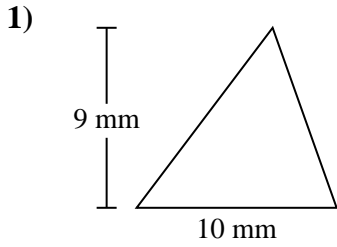




Berechne die Fläche jedes Dreiecks. Die Einheiten sind nicht maßstäblich.

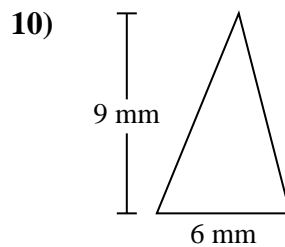
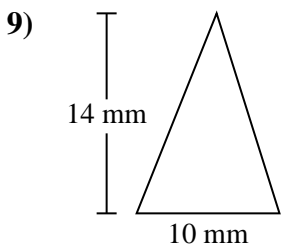
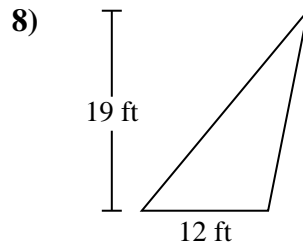
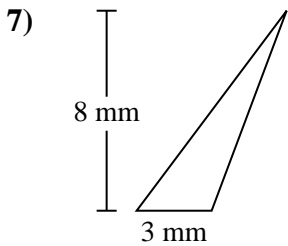
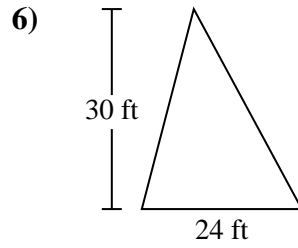
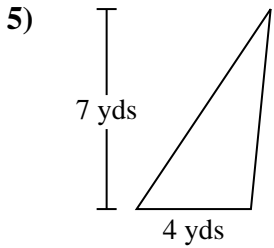
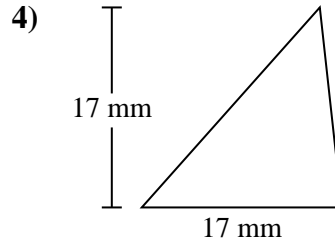
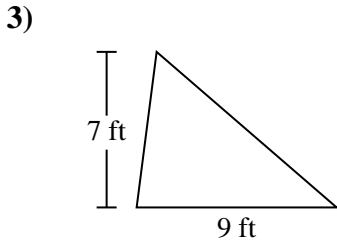
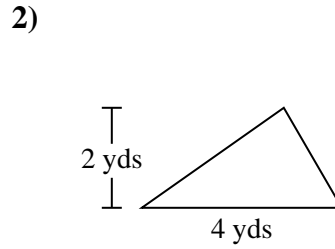
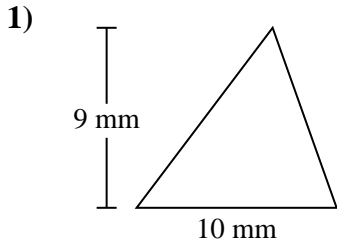
Antworten



- 1. _____
- 2. _____
- 3. _____
- 4. _____
- 5. _____
- 6. _____
- 7. _____
- 8. _____
- 9. _____
- 10. _____



Berechne die Fläche jedes Dreiecks. Die Einheiten sind nicht maßstäblich.



Antworten

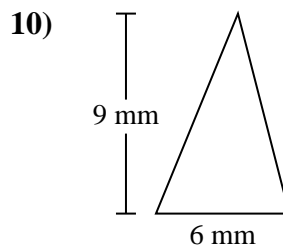
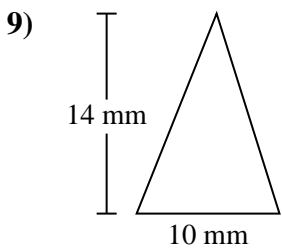
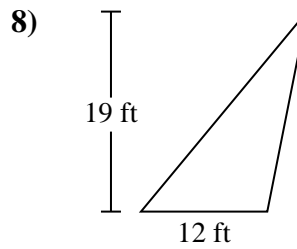
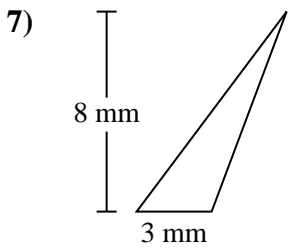
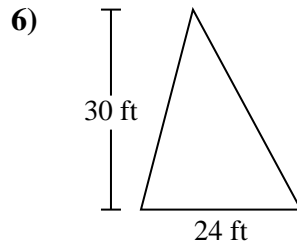
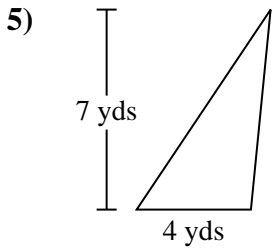
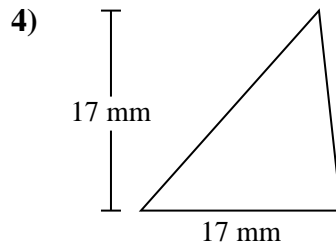
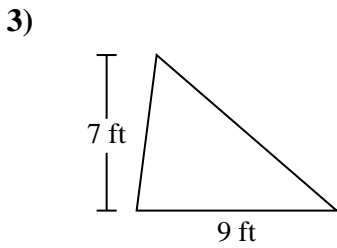
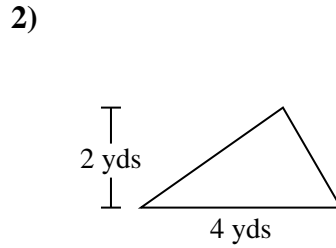
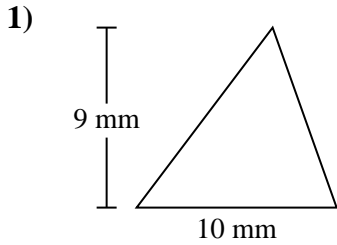
1. 45 mm²
2. 4 yds²
3. 31,5 ft²
4. 144,5 mm²
5. 14 yds²
6. 360 ft²
7. 12 mm²
8. 114 ft²
9. 70 mm²
10. 27 mm²



Berechne die Fläche jedes Dreiecks. Die Einheiten sind nicht maßstäblich.

Antworten

12 mm ²	31,5 ft ²	45 mm ²	70 mm ²
360 ft ²	114 ft ²	27 mm ²	144,5 mm ²
14 yds ²	4 yds ²		



1. _____
2. _____
3. _____
4. _____
5. _____
6. _____
7. _____
8. _____
9. _____
10. _____