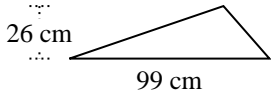


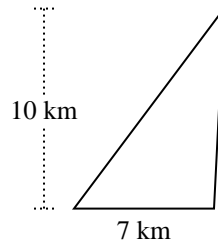


Berechne die Fläche jedes Dreiecks. Die Einheiten sind nicht maßstäblich.

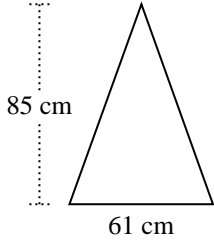
1)



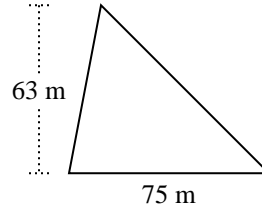
2)



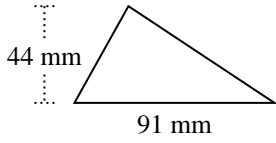
3)



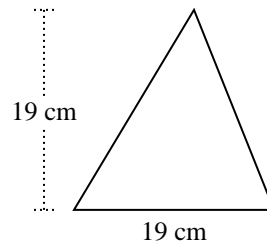
4)



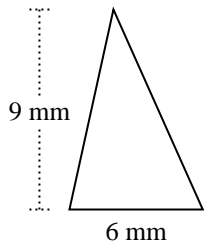
5)



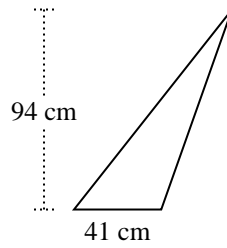
6)



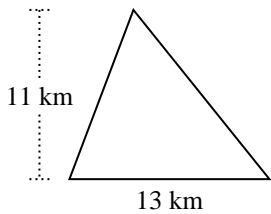
7)



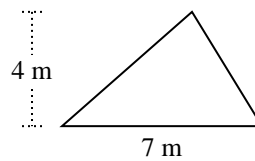
8)



9)



10)



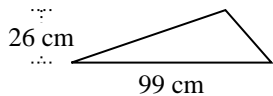
Antworten

- 1. _____
- 2. _____
- 3. _____
- 4. _____
- 5. _____
- 6. _____
- 7. _____
- 8. _____
- 9. _____
- 10. _____

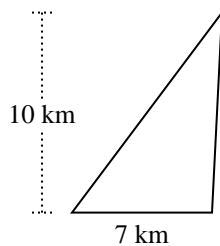


Berechne die Fläche jedes Dreiecks. Die Einheiten sind nicht maßstäblich.

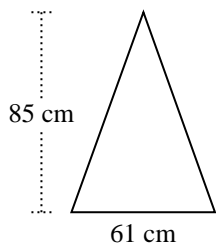
1)



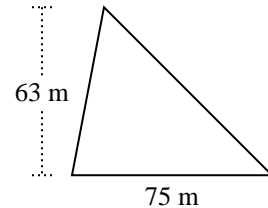
2)



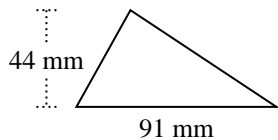
3)



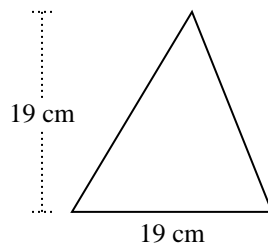
4)



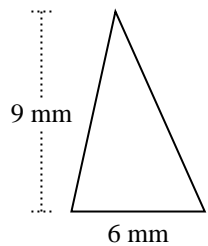
5)



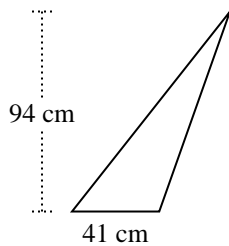
6)



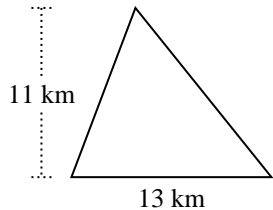
7)



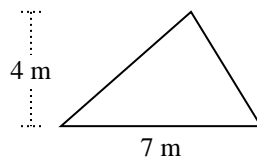
8)



9)



10)



Antworten

1. 1.287 cm²

2. 35 km²

3. 2.592,5 cm²

4. 2.362,5 m²

5. 2.002 mm²

6. 180,5 cm²

7. 27 mm²

8. 1.927 cm²

9. 71,5 km²

10. 14 m²



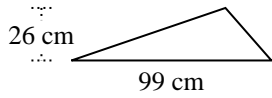
Berechne die Fläche jedes Dreiecks. Die Einheiten sind nicht maßstäblich.

180,5	2.362,5	71,5	27
1.287	35	1.927	2.002
14	2.592,5		

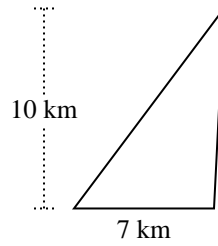
Antworten

1. _____
2. _____
3. _____
4. _____
5. _____
6. _____
7. _____
8. _____
9. _____
10. _____

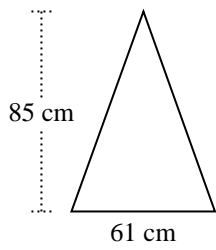
1)



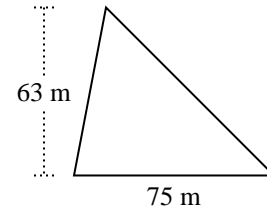
2)



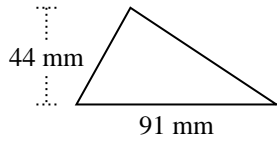
3)



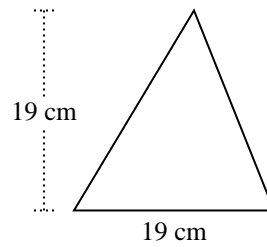
4)



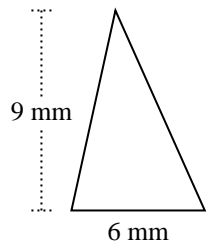
5)



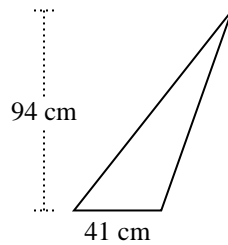
6)



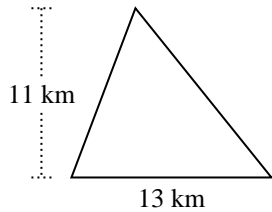
7)



8)



9)



10)

