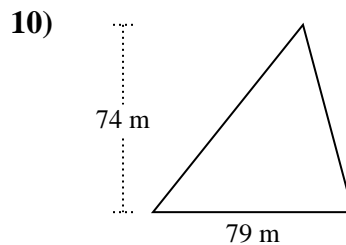
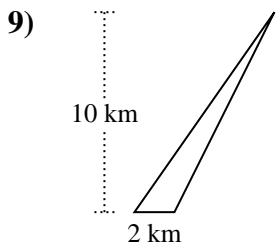
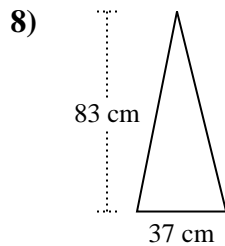
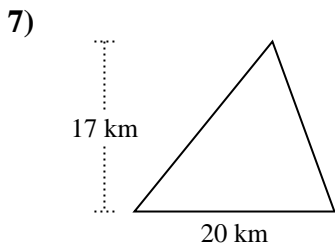
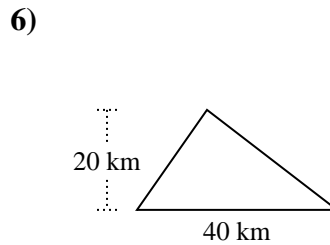
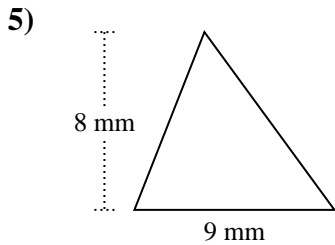
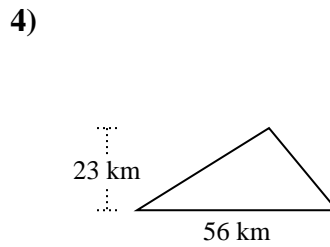
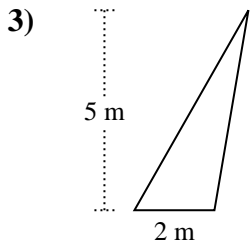
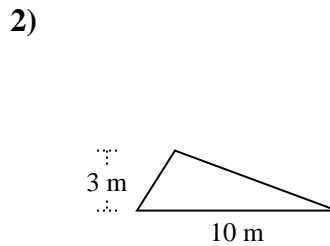
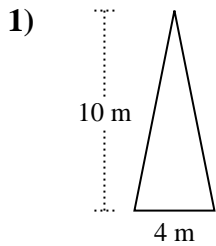




Berechne die Fläche jedes Dreiecks. Die Einheiten sind nicht maßstäblich.

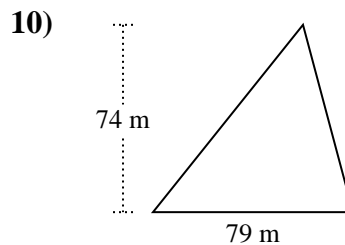
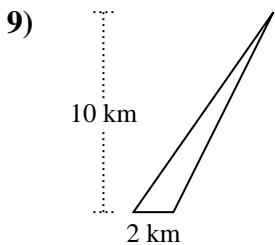
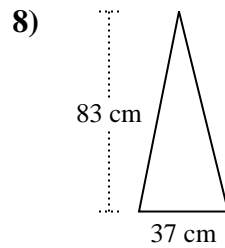
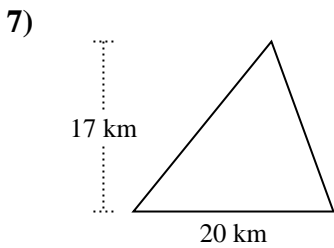
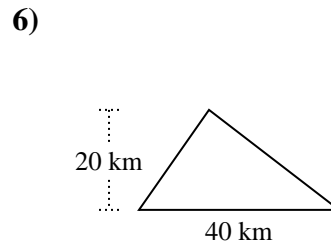
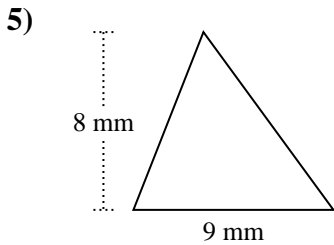
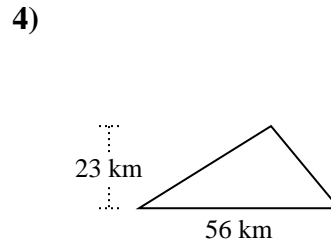
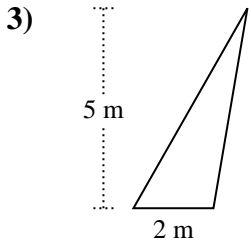
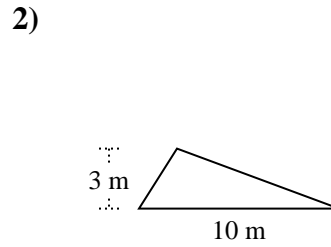
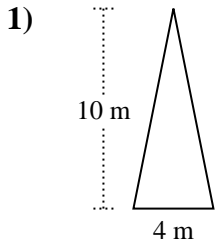


Antworten

- 1. _____
- 2. _____
- 3. _____
- 4. _____
- 5. _____
- 6. _____
- 7. _____
- 8. _____
- 9. _____
- 10. _____



Berechne die Fläche jedes Dreiecks. Die Einheiten sind nicht maßstäblich.



Antworten

1. 20 m²

2. 15 m²

3. 5 m²

4. 644 km²

5. 36 mm²

6. 400 km²

7. 170 km²

8. 1.535,5 cm²

9. 10 km²

10. 2.923 m²



Berechne die Fläche jedes Dreiecks. Die Einheiten sind nicht maßstäblich.

5	1.535,5	10	20
400	36	2.923	15
170	644		

Antworten

1. _____
2. _____
3. _____
4. _____
5. _____
6. _____
7. _____
8. _____
9. _____
10. _____

