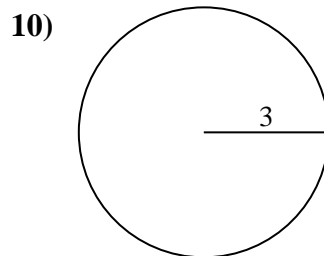
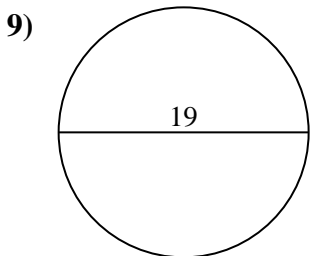
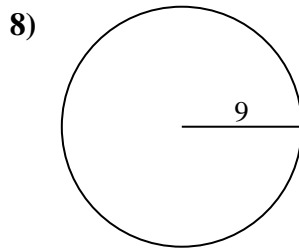
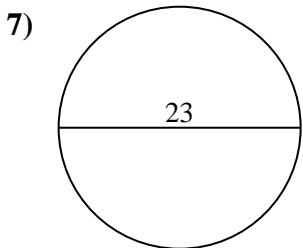
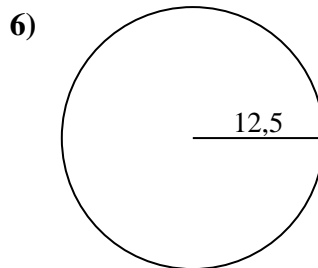
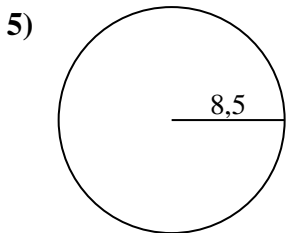
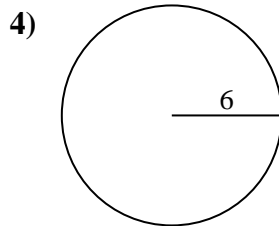
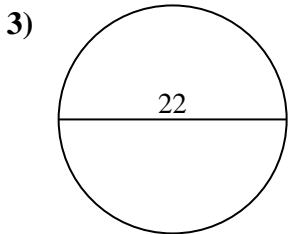
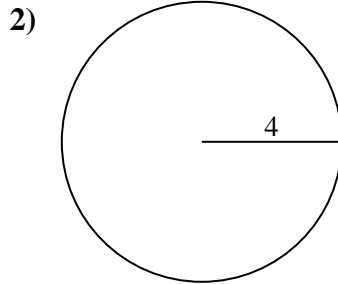
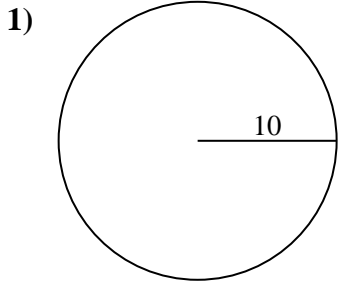




Berechne die Kreisfläche. Die Kreise sind nicht maßstäblich.



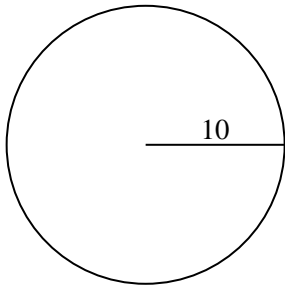
Antworten

- 1. _____
- 2. _____
- 3. _____
- 4. _____
- 5. _____
- 6. _____
- 7. _____
- 8. _____
- 9. _____
- 10. _____

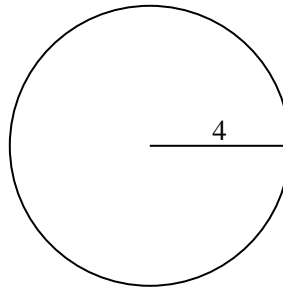


Berechne die Kreisfläche. Die Kreise sind nicht maßstäblich.

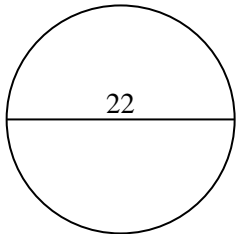
1)



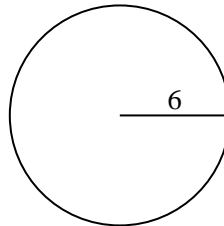
2)



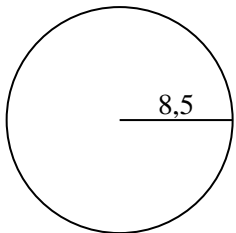
3)



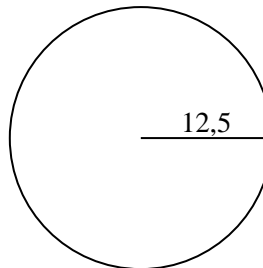
4)



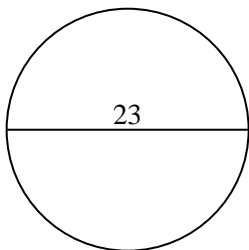
5)



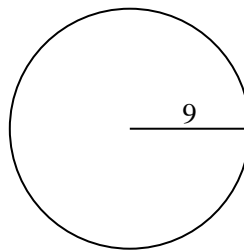
6)



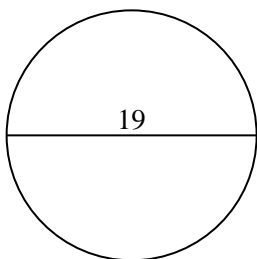
7)



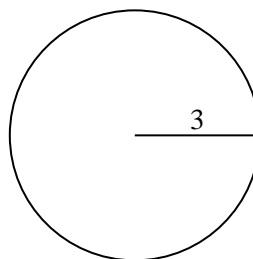
8)



9)



10)

**Antworten**

1. 314,16 cm²

2. 50,27 cm²

3. 380,13 cm²

4. 113,1 cm²

5. 226,98 cm²

6. 490,87 cm²

7. 415,48 cm²

8. 254,47 cm²

9. 283,53 cm²

10. 28,27 cm²