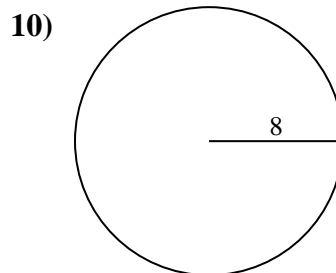
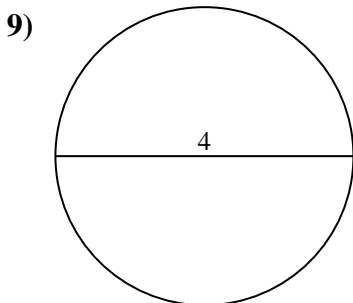
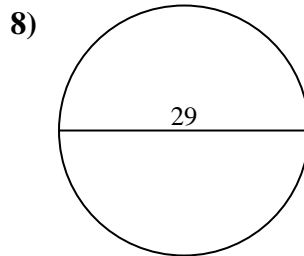
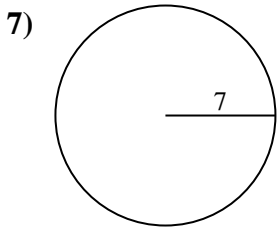
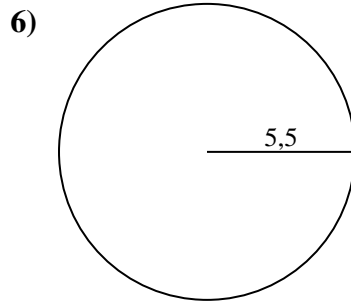
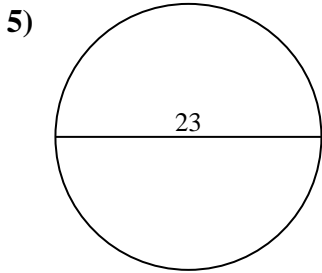
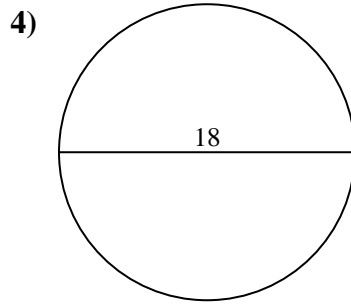
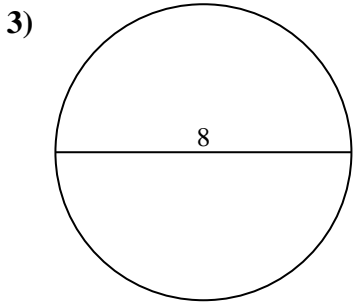
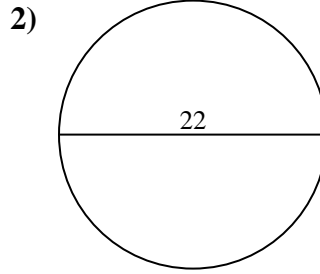
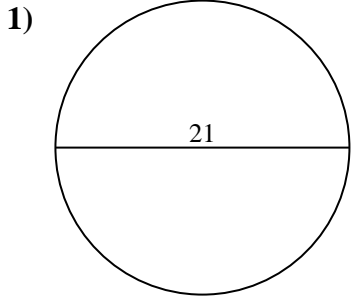




Berechne die Kreisfläche. Die Kreise sind nicht maßstäblich.

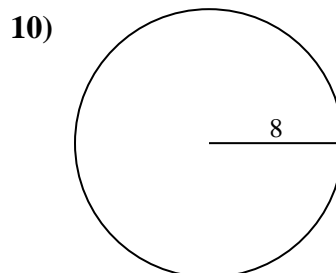
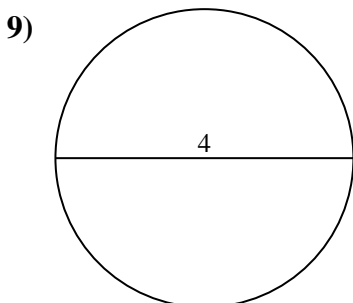
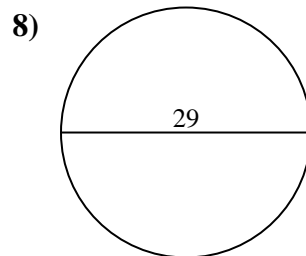
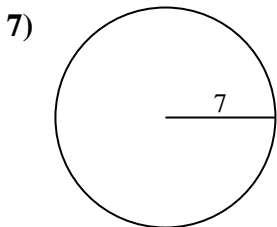
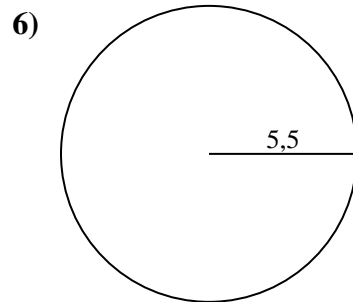
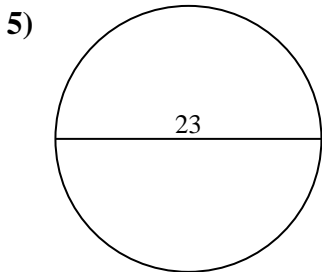
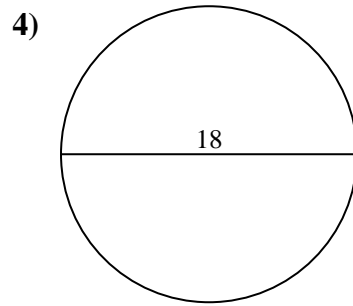
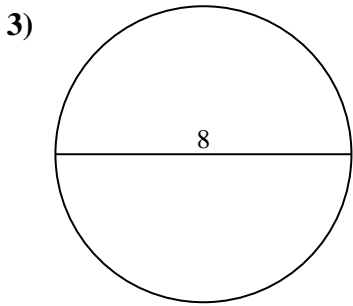
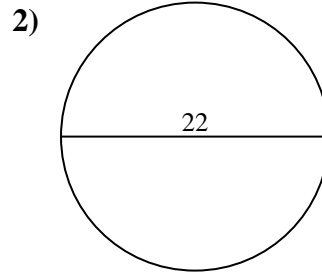
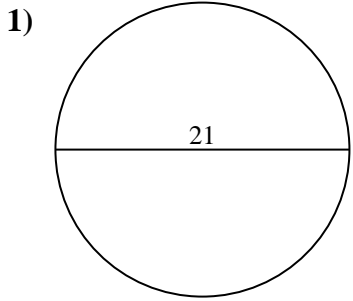


Antworten

- 1. \_\_\_\_\_
- 2. \_\_\_\_\_
- 3. \_\_\_\_\_
- 4. \_\_\_\_\_
- 5. \_\_\_\_\_
- 6. \_\_\_\_\_
- 7. \_\_\_\_\_
- 8. \_\_\_\_\_
- 9. \_\_\_\_\_
- 10. \_\_\_\_\_



Berechne die Kreisfläche. Die Kreise sind nicht maßstäblich.

**Antworten**

1. 346,36 cm<sup>2</sup>
2. 380,13 cm<sup>2</sup>
3. 50,27 cm<sup>2</sup>
4. 254,47 cm<sup>2</sup>
5. 415,48 cm<sup>2</sup>
6. 95,03 cm<sup>2</sup>
7. 153,94 cm<sup>2</sup>
8. 660,52 cm<sup>2</sup>
9. 12,57 cm<sup>2</sup>
10. 201,06 cm<sup>2</sup>



Berechne die Kreisfläche. Die Kreise sind nicht maßstäblich.

415,48 cm<sup>2</sup>

95,03 cm<sup>2</sup>

660,52 cm<sup>2</sup>

201,06 cm<sup>2</sup>

380,13 cm<sup>2</sup>

50,27 cm<sup>2</sup>

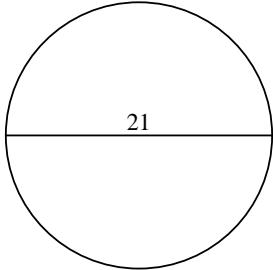
254,47 cm<sup>2</sup>

12,57 cm<sup>2</sup>

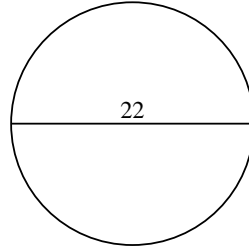
153,94 cm<sup>2</sup>

346,36 cm<sup>2</sup>

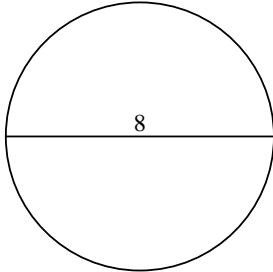
1)



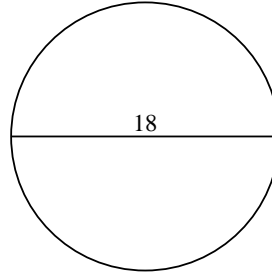
2)



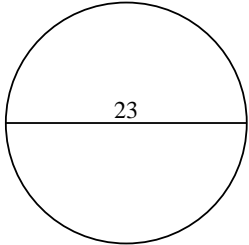
3)



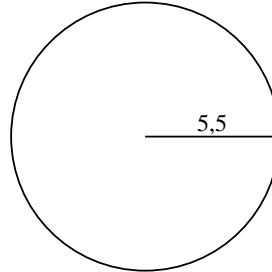
4)



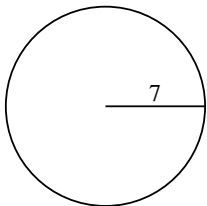
5)



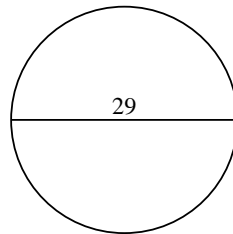
6)



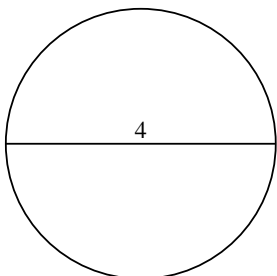
7)



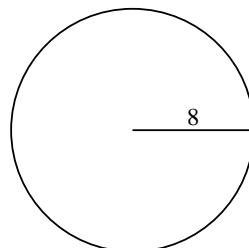
8)



9)



10)



**Antworten**

1. \_\_\_\_\_

2. \_\_\_\_\_

3. \_\_\_\_\_

4. \_\_\_\_\_

5. \_\_\_\_\_

6. \_\_\_\_\_

7. \_\_\_\_\_

8. \_\_\_\_\_

9. \_\_\_\_\_

10. \_\_\_\_\_