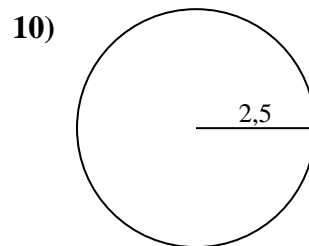
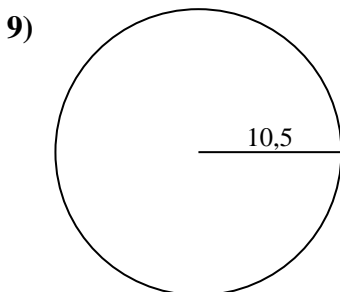
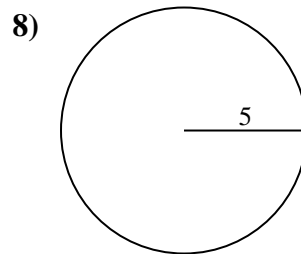
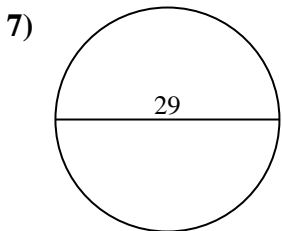
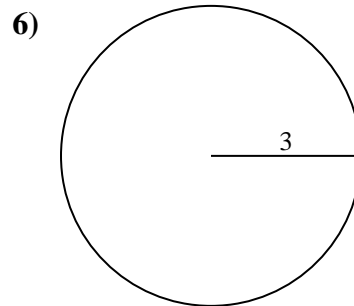
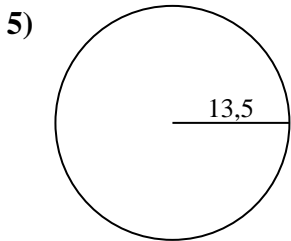
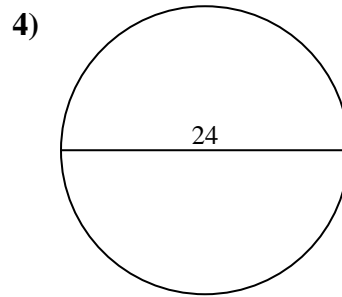
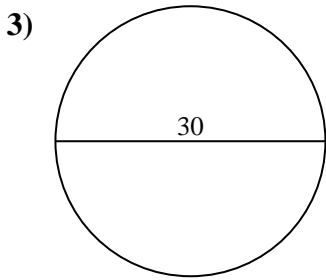
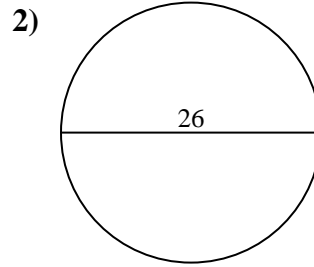
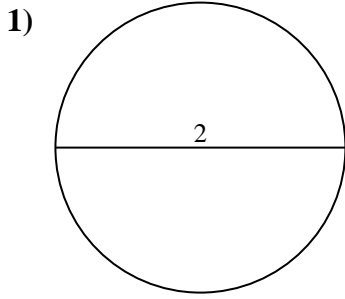




Berechne die Kreisfläche. Die Kreise sind nicht maßstäblich.

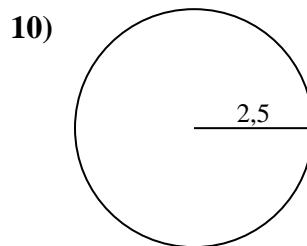
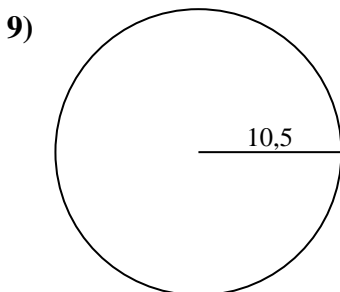
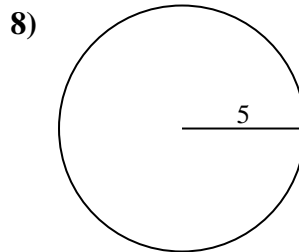
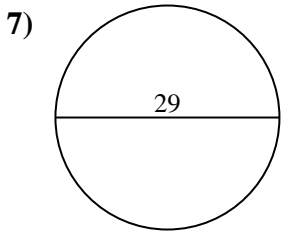
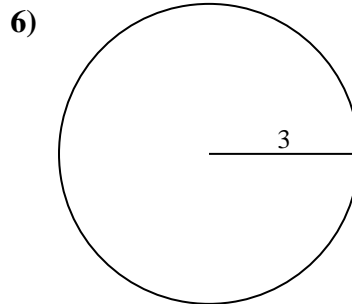
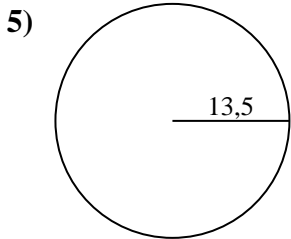
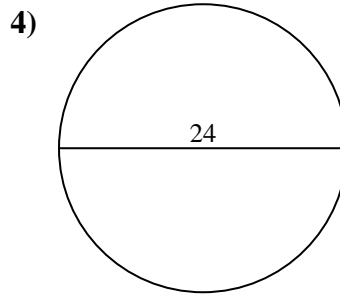
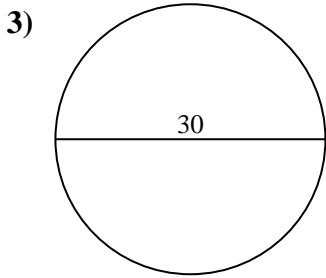
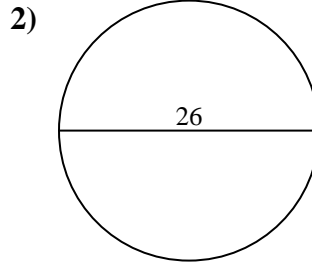
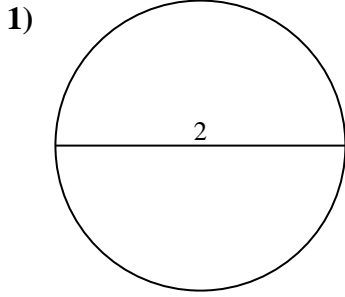


Antworten

- 1. _____
- 2. _____
- 3. _____
- 4. _____
- 5. _____
- 6. _____
- 7. _____
- 8. _____
- 9. _____
- 10. _____



Berechne die Kreisfläche. Die Kreise sind nicht maßstäblich.

**Antworten**

1. 3,14 cm²

2. 530,93 cm²

3. 706,86 cm²

4. 452,39 cm²

5. 572,56 cm²

6. 28,27 cm²

7. 660,52 cm²

8. 78,54 cm²

9. 346,36 cm²

10. 19,63 cm²



Berechne die Kreisfläche. Die Kreise sind nicht maßstäblich.

Antworten

78,54 cm²

28,27 cm²

19,63 cm²

660,52 cm²

572,56 cm²

1. _____

706,86 cm²

530,93 cm²

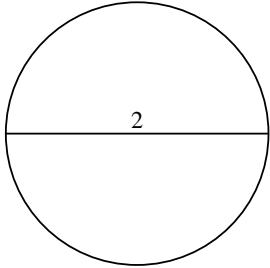
3,14 cm²

346,36 cm²

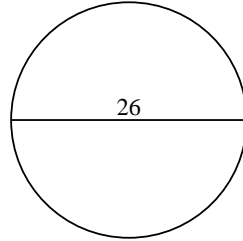
452,39 cm²

2. _____

1)

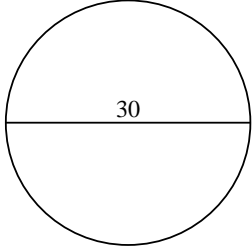


2)

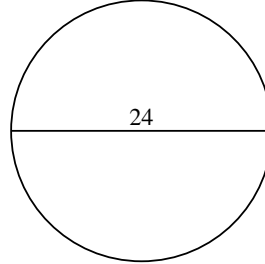


3. _____

3)

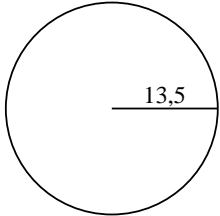


4)

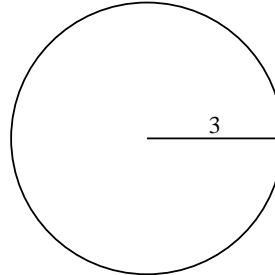


4. _____

5)

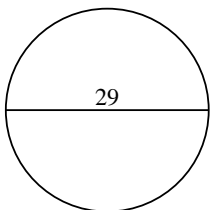


6)

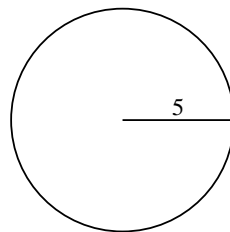


5. _____

7)

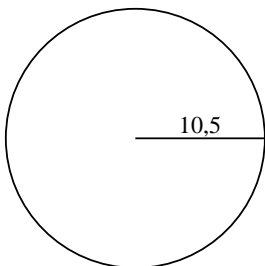


8)

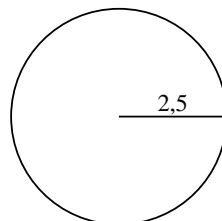


6. _____

9)



10)



7. _____

8. _____

9. _____

10. _____