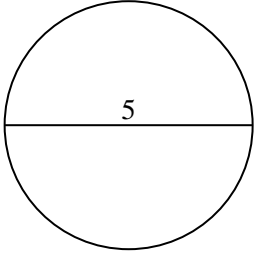


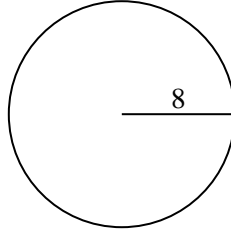


Berechne die Kreisfläche und den Kreisumfang jedes Kreises. Die Kreise sind nicht maßstäblich.

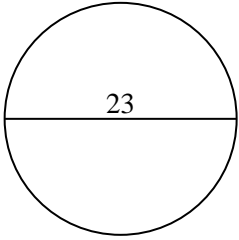
1)



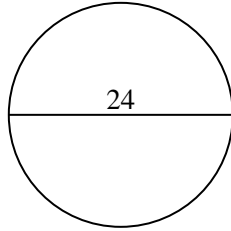
2)



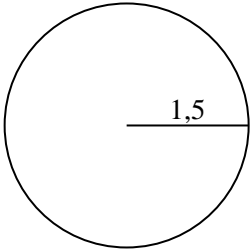
3)



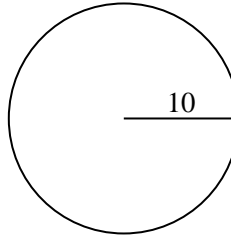
4)



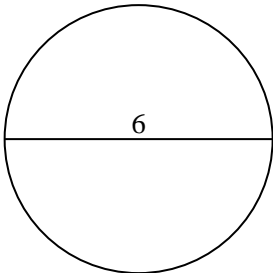
5)



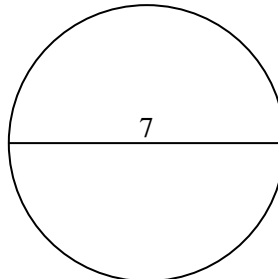
6)



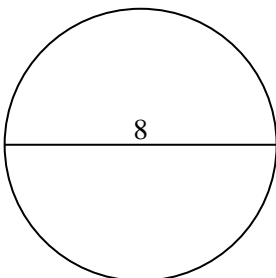
7)



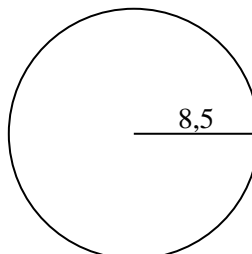
8)



9)



10)



Antworten

1a. _____

1c. _____

2a. _____

2c. _____

3a. _____

3c. _____

4a. _____

4c. _____

5a. _____

5c. _____

6a. _____

6c. _____

7a. _____

7c. _____

8a. _____

8c. _____

9a. _____

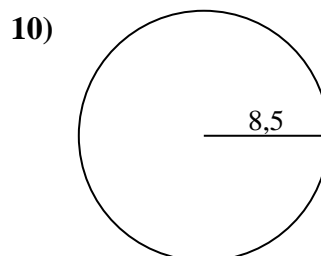
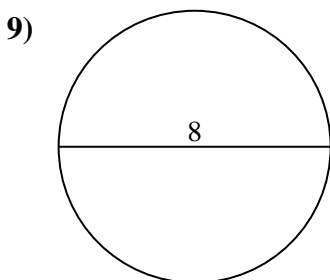
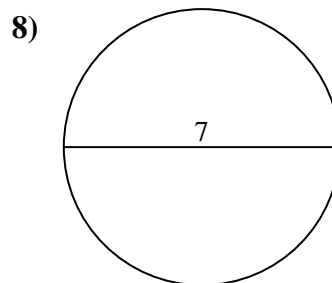
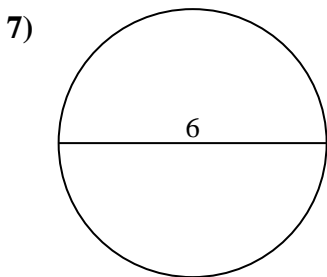
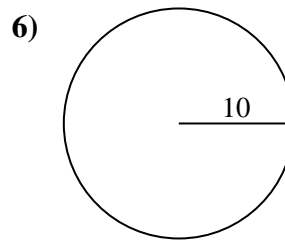
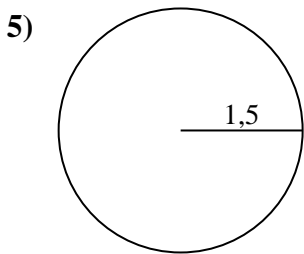
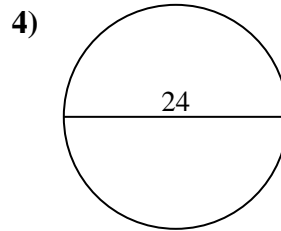
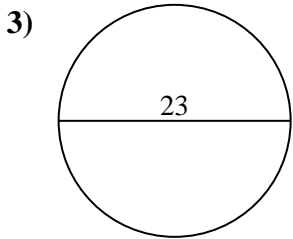
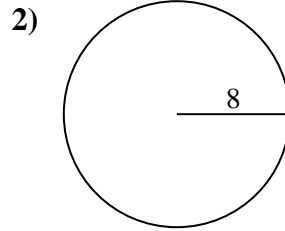
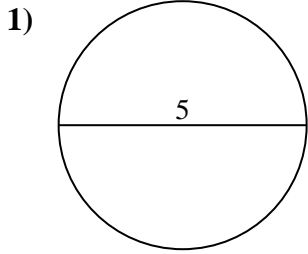
9c. _____

10a. _____

10c. _____



Berechne die Kreisfläche und den Kreisumfang jedes Kreises. Die Kreise sind nicht maßstäblich.

**Antworten**

1a. 19,63 cm²

1c. 15,71 cm

2a. 201,06 cm²

2c. 50,27 cm

3a. 415,48 cm²

3c. 72,26 cm

4a. 452,39 cm²

4c. 75,4 cm

5a. 7,07 cm²

5c. 9,42 cm

6a. 314,16 cm²

6c. 62,83 cm

7a. 28,27 cm²

7c. 18,85 cm

8a. 38,48 cm²

8c. 21,99 cm

9a. 50,27 cm²

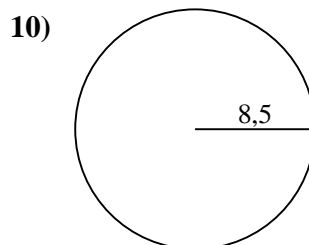
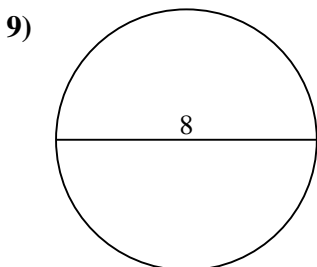
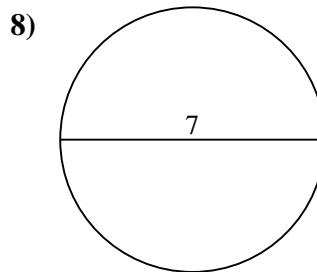
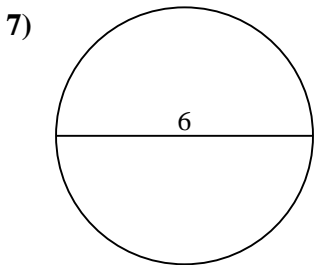
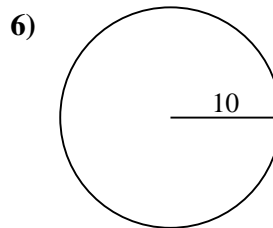
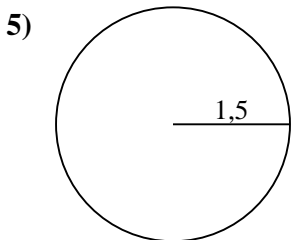
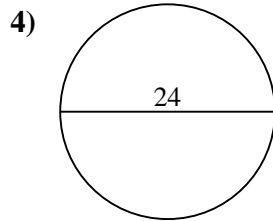
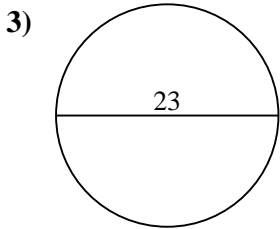
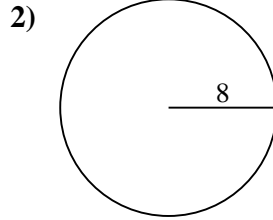
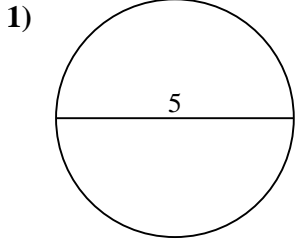
9c. 25,13 cm

10a. 226,98 cm²

10c. 53,41 cm



Berechne die Kreisfläche und den Kreisumfang jedes Kreises. Die Kreise sind nicht maßstäblich.



Antworten

1a. _____

1c. _____

2a. _____

2c. _____

3a. _____

3c. _____

4a. _____

4c. _____

5a. _____

5c. _____

6a. _____

6c. _____

7a. _____

7c. _____

8a. _____

8c. _____

9a. _____

9c. _____

10a. _____

10c. _____