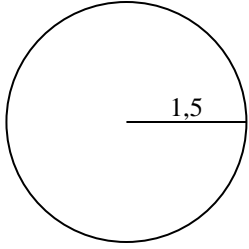


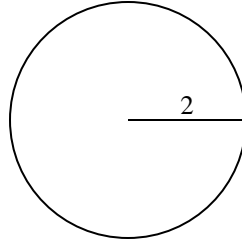


Berechne die Kreisfläche und den Kreisumfang jedes Kreises. Die Kreise sind nicht maßstäblich.

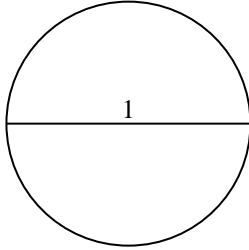
1)



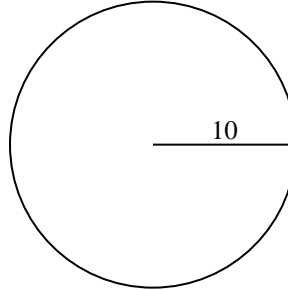
2)



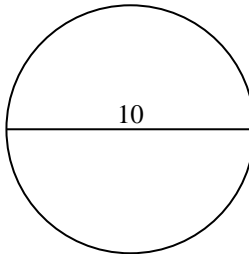
3)



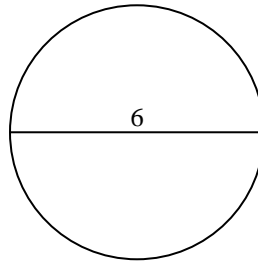
4)



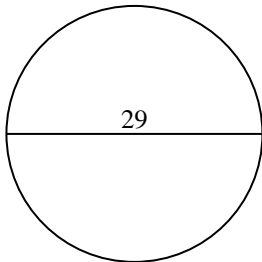
5)



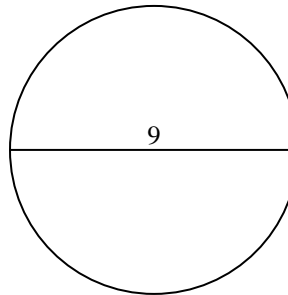
6)



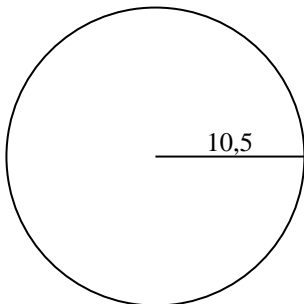
7)



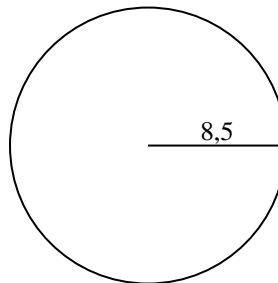
8)



9)



10)



Antworten

1a. \_\_\_\_\_

1c. \_\_\_\_\_

2a. \_\_\_\_\_

2c. \_\_\_\_\_

3a. \_\_\_\_\_

3c. \_\_\_\_\_

4a. \_\_\_\_\_

4c. \_\_\_\_\_

5a. \_\_\_\_\_

5c. \_\_\_\_\_

6a. \_\_\_\_\_

6c. \_\_\_\_\_

7a. \_\_\_\_\_

7c. \_\_\_\_\_

8a. \_\_\_\_\_

8c. \_\_\_\_\_

9a. \_\_\_\_\_

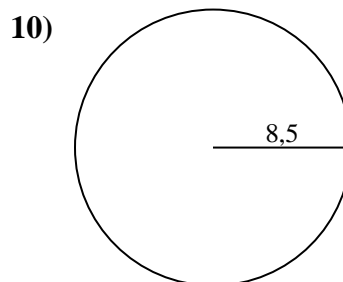
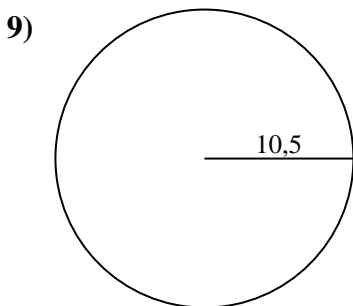
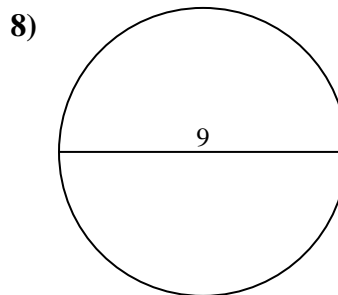
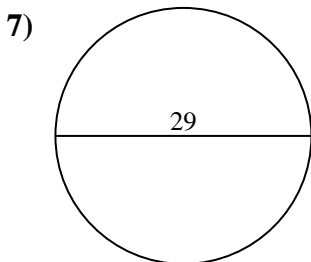
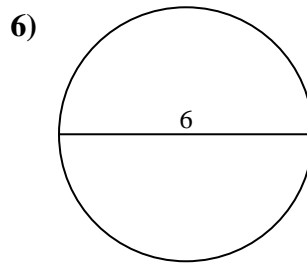
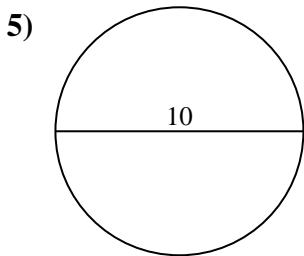
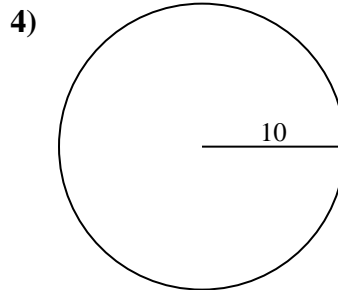
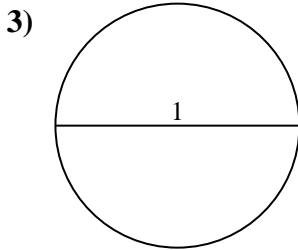
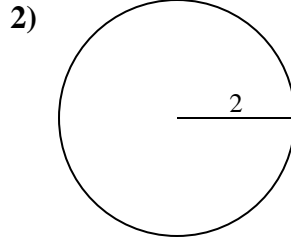
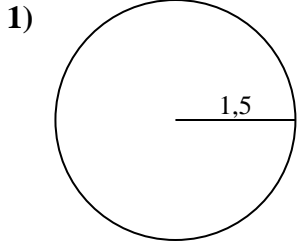
9c. \_\_\_\_\_

10a. \_\_\_\_\_

10c. \_\_\_\_\_



Berechne die Kreisfläche und den Kreisumfang jedes Kreises. Die Kreise sind nicht maßstäblich.



**Antworten**

1a. 7,07 cm<sup>2</sup>

1c. 9,42 cm

2a. 12,57 cm<sup>2</sup>

2c. 12,57 cm

3a. 0,79 cm<sup>2</sup>

3c. 3,14 cm

4a. 314,16 cm<sup>2</sup>

4c. 62,83 cm

5a. 78,54 cm<sup>2</sup>

5c. 31,42 cm

6a. 28,27 cm<sup>2</sup>

6c. 18,85 cm

7a. 660,52 cm<sup>2</sup>

7c. 91,11 cm

8a. 63,62 cm<sup>2</sup>

8c. 28,27 cm

9a. 346,36 cm<sup>2</sup>

9c. 65,97 cm

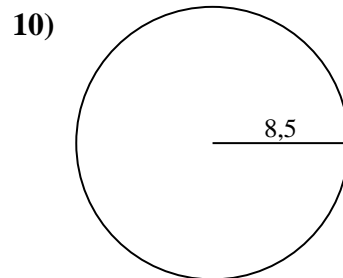
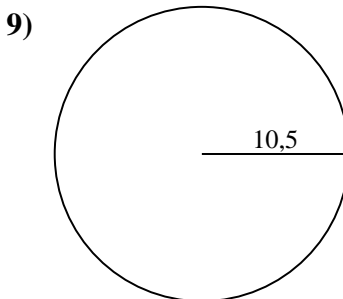
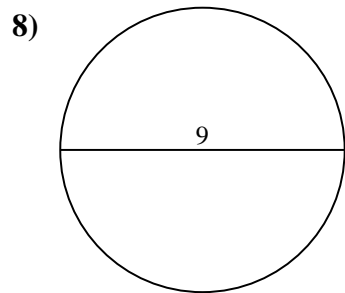
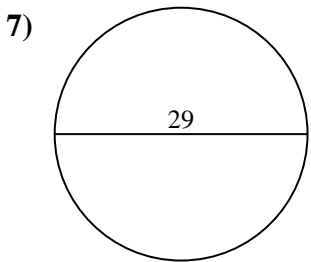
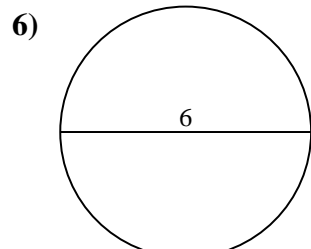
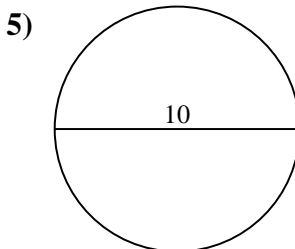
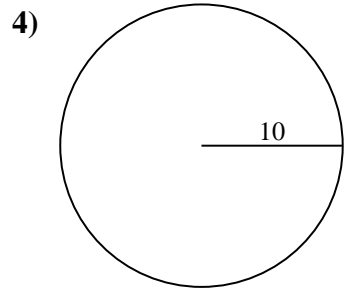
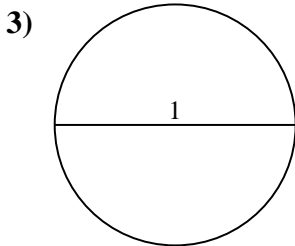
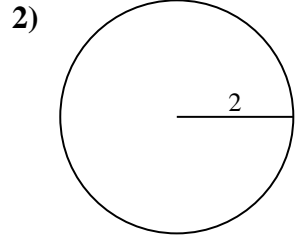
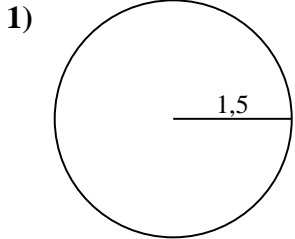
10a. 226,98 cm<sup>2</sup>

10c. 53,41 cm



Berechne die Kreisfläche und den Kreisumfang jedes Kreises. Die Kreise sind nicht maßstäblich.

18,85 cm	31,42 cm	12,57 cm <sup>2</sup>	7,07 cm <sup>2</sup>	65,97 cm
3,14 cm	28,27 cm <sup>2</sup>	53,41 cm	12,57 cm	660,52 cm <sup>2</sup>
91,11 cm	63,62 cm <sup>2</sup>	62,83 cm	28,27 cm	0,79 cm <sup>2</sup>
78,54 cm <sup>2</sup>	226,98 cm <sup>2</sup>	346,36 cm <sup>2</sup>	9,42 cm	314,16 cm <sup>2</sup>



Antworten

1a. \_\_\_\_\_

1c. \_\_\_\_\_

2a. \_\_\_\_\_

2c. \_\_\_\_\_

3a. \_\_\_\_\_

3c. \_\_\_\_\_

4a. \_\_\_\_\_

4c. \_\_\_\_\_

5a. \_\_\_\_\_

5c. \_\_\_\_\_

6a. \_\_\_\_\_

6c. \_\_\_\_\_

7a. \_\_\_\_\_

7c. \_\_\_\_\_

8a. \_\_\_\_\_

8c. \_\_\_\_\_

9a. \_\_\_\_\_

9c. \_\_\_\_\_

10a. \_\_\_\_\_

10c. \_\_\_\_\_