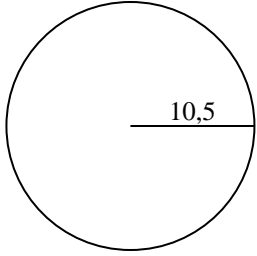


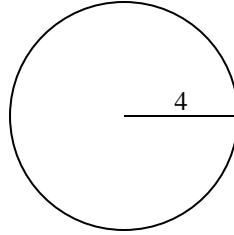


Berechne die Kreisfläche und den Kreisumfang jedes Kreises. Die Kreise sind nicht maßstäblich.

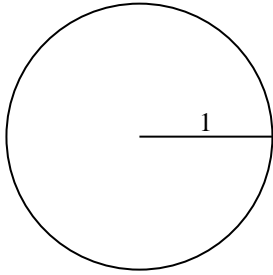
1)



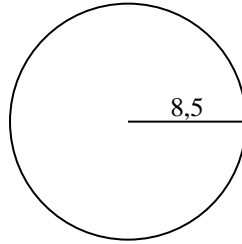
2)



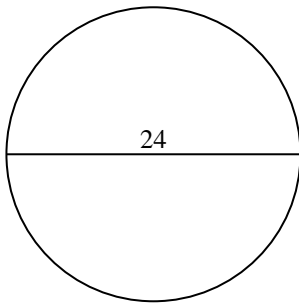
3)



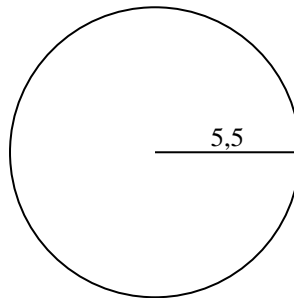
4)



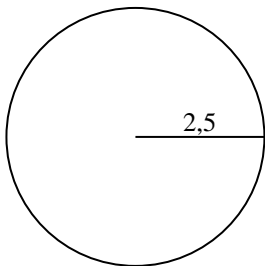
5)



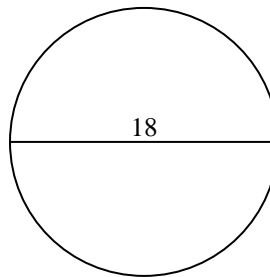
6)



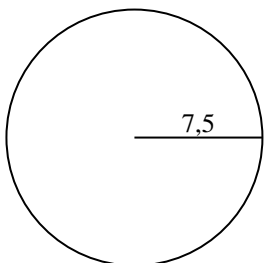
7)



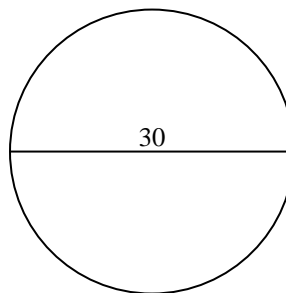
8)



9)



10)



Antworten

1a. _____

1c. _____

2a. _____

2c. _____

3a. _____

3c. _____

4a. _____

4c. _____

5a. _____

5c. _____

6a. _____

6c. _____

7a. _____

7c. _____

8a. _____

8c. _____

9a. _____

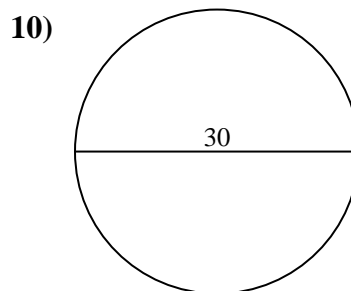
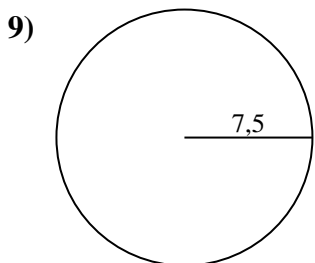
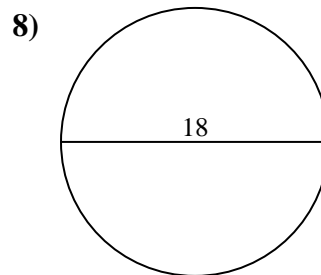
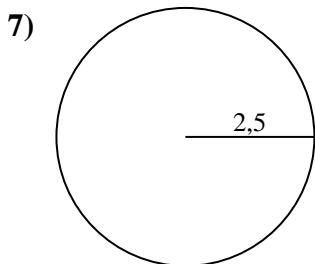
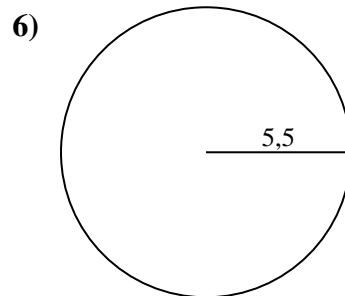
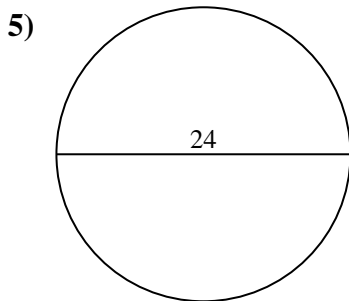
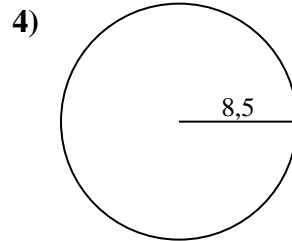
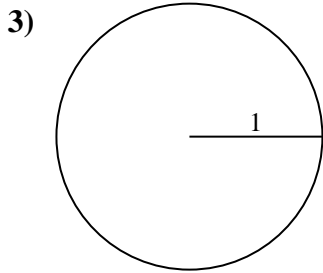
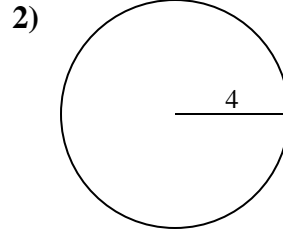
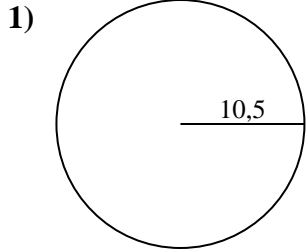
9c. _____

10a. _____

10c. _____



Berechne die Kreisfläche und den Kreisumfang jedes Kreises. Die Kreise sind nicht maßstäblich.

**Antworten**

1a. **346,36 cm²**

1c. **65,97 cm**

2a. **50,27 cm²**

2c. **25,13 cm**

3a. **3,14 cm²**

3c. **6,28 cm**

4a. **226,98 cm²**

4c. **53,41 cm**

5a. **452,39 cm²**

5c. **75,4 cm**

6a. **95,03 cm²**

6c. **34,56 cm**

7a. **19,63 cm²**

7c. **15,71 cm**

8a. **254,47 cm²**

8c. **56,55 cm**

9a. **176,71 cm²**

9c. **47,12 cm**

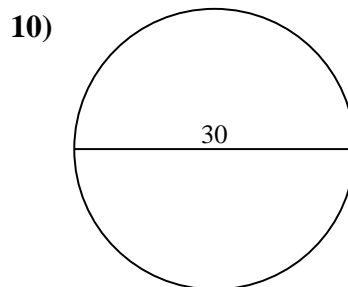
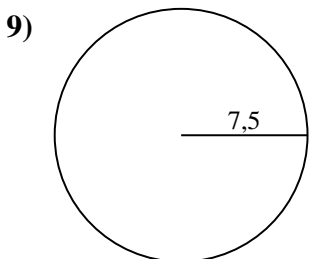
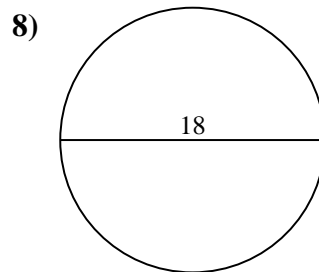
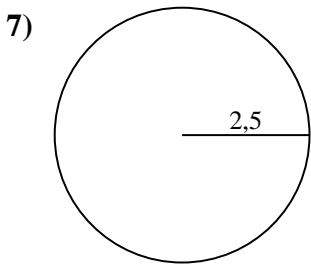
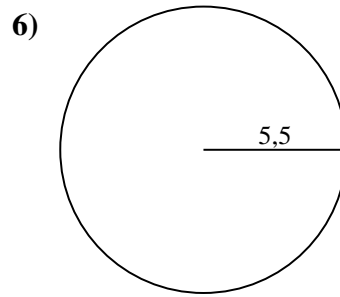
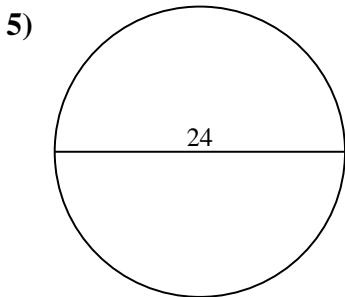
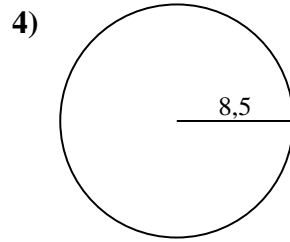
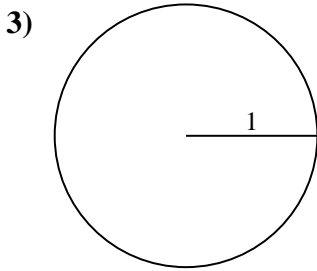
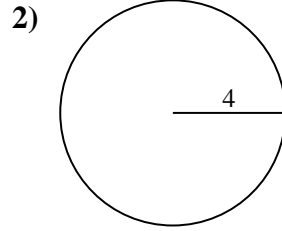
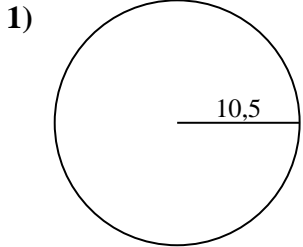
10a. **706,86 cm²**

10c. **94,25 cm**



Berechne die Kreisfläche und den Kreisumfang jedes Kreises. Die Kreise sind nicht maßstäblich.

94,25 cm	15,71 cm	346,36 cm ²	3,14 cm ²	452,39 cm ²
50,27 cm ²	19,63 cm ²	34,56 cm	56,55 cm	65,97 cm
47,12 cm	25,13 cm	176,71 cm ²	75,4 cm	53,41 cm
95,03 cm ²	6,28 cm	226,98 cm ²	706,86 cm ²	254,47 cm ²



Antworten

1a. _____

1c. _____

2a. _____

2c. _____

3a. _____

3c. _____

4a. _____

4c. _____

5a. _____

5c. _____

6a. _____

6c. _____

7a. _____

7c. _____

8a. _____

8c. _____

9a. _____

9c. _____

10a. _____

10c. _____