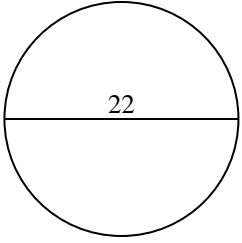


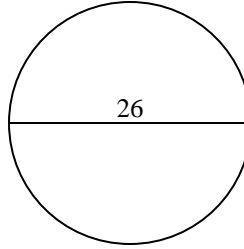


Berechne die Kreisfläche und den Kreisumfang jedes Kreises. Die Kreise sind nicht maßstäblich.

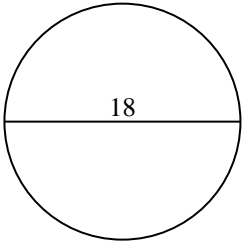
1)



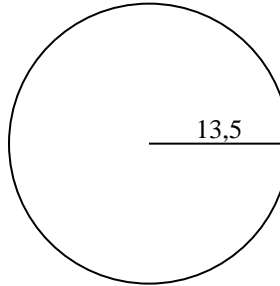
2)



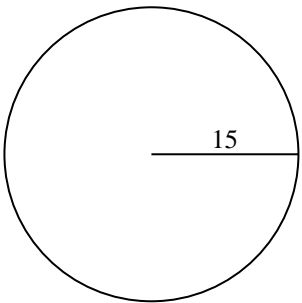
3)



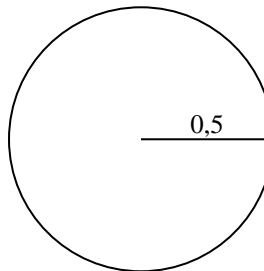
4)



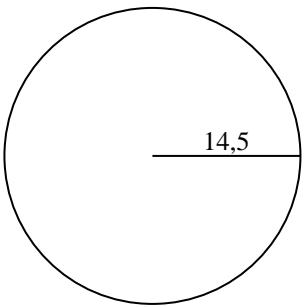
5)



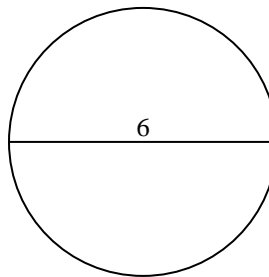
6)



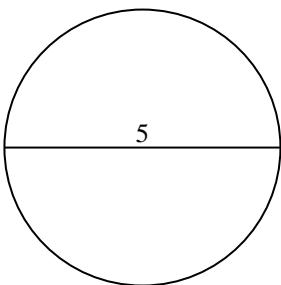
7)



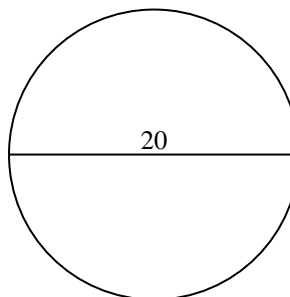
8)



9)



10)



Antworten

1a. _____

1c. _____

2a. _____

2c. _____

3a. _____

3c. _____

4a. _____

4c. _____

5a. _____

5c. _____

6a. _____

6c. _____

7a. _____

7c. _____

8a. _____

8c. _____

9a. _____

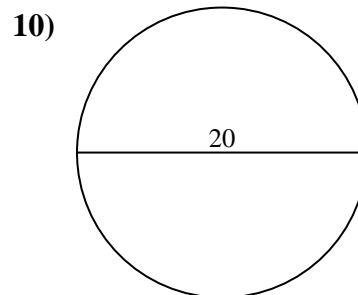
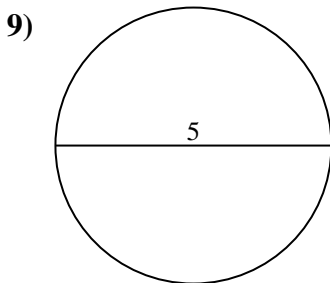
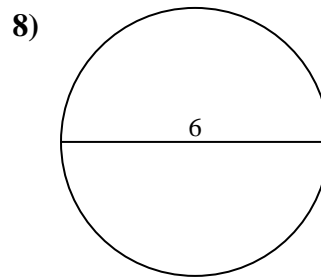
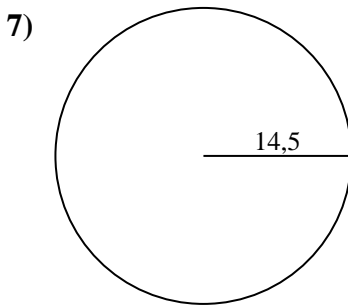
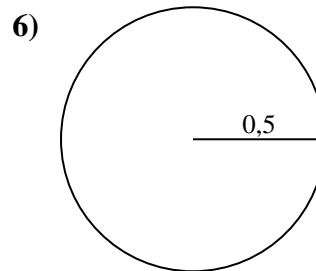
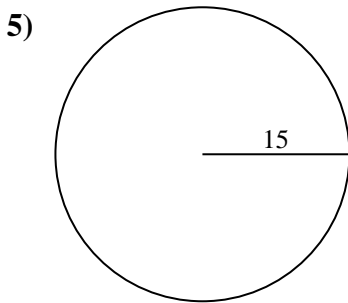
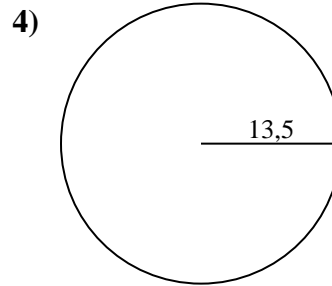
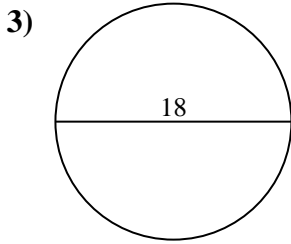
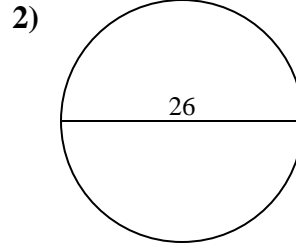
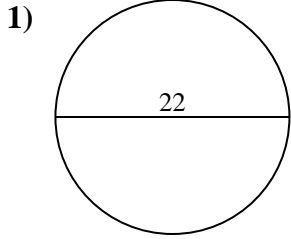
9c. _____

10a. _____

10c. _____



Berechne die Kreisfläche und den Kreisumfang jedes Kreises. Die Kreise sind nicht maßstäblich.

**Antworten**

1a. **380,13 cm²**

1c. **69,12 cm**

2a. **530,93 cm²**

2c. **81,68 cm**

3a. **254,47 cm²**

3c. **56,55 cm**

4a. **572,56 cm²**

4c. **84,82 cm**

5a. **706,86 cm²**

5c. **94,25 cm**

6a. **0,79 cm²**

6c. **3,14 cm**

7a. **660,52 cm²**

7c. **91,11 cm**

8a. **28,27 cm²**

8c. **18,85 cm**

9a. **19,63 cm²**

9c. **15,71 cm**

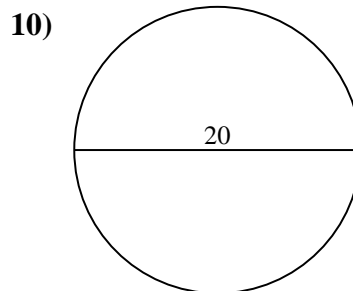
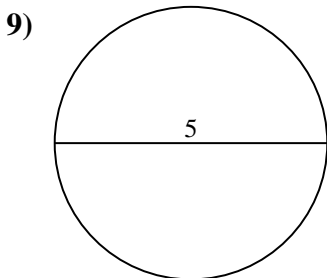
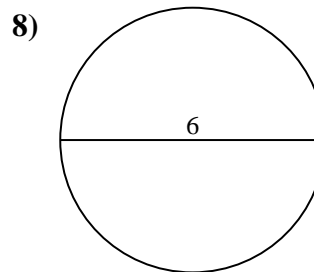
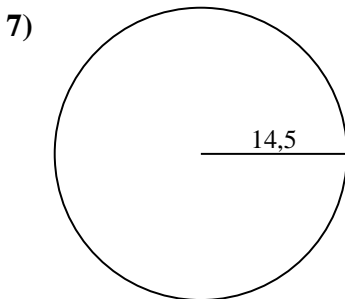
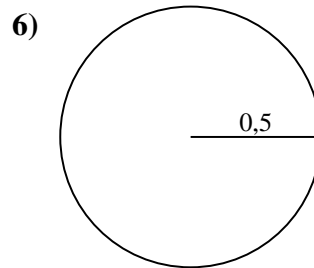
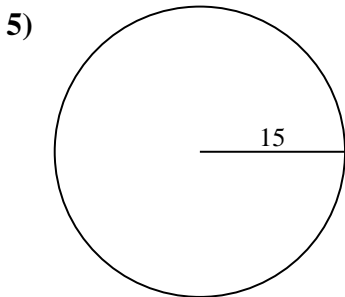
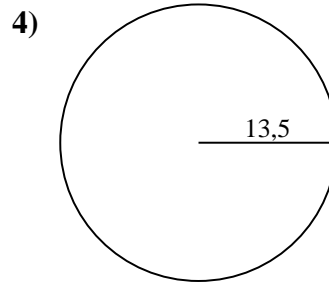
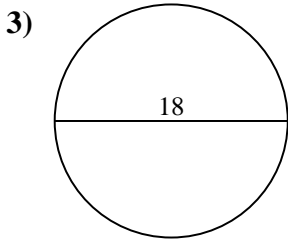
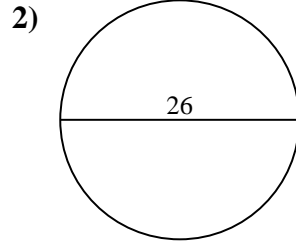
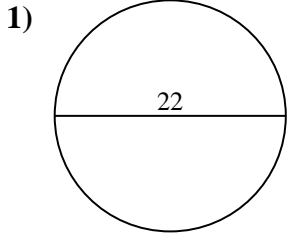
10a. **314,16 cm²**

10c. **62,83 cm**



Berechne die Kreisfläche und den Kreisumfang jedes Kreises. Die Kreise sind nicht maßstäblich.

28,27 cm ²	3,14 cm	84,82 cm	62,83 cm	19,63 cm ²
572,56 cm ²	530,93 cm ²	660,52 cm ²	94,25 cm	69,12 cm
706,86 cm ²	91,11 cm	15,71 cm	380,13 cm ²	56,55 cm
81,68 cm	314,16 cm ²	0,79 cm ²	254,47 cm ²	18,85 cm



Antworten

1a. _____

1c. _____

2a. _____

2c. _____

3a. _____

3c. _____

4a. _____

4c. _____

5a. _____

5c. _____

6a. _____

6c. _____

7a. _____

7c. _____

8a. _____

8c. _____

9a. _____

9c. _____

10a. _____

10c. _____