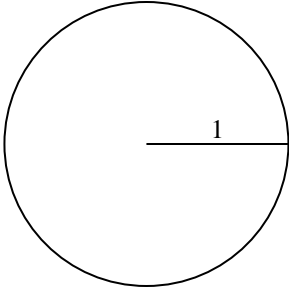


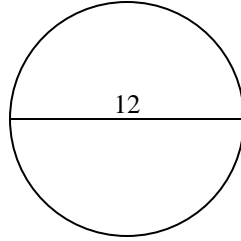


Berechne die Kreisfläche und den Kreisumfang jedes Kreises. Die Kreise sind nicht maßstäblich.

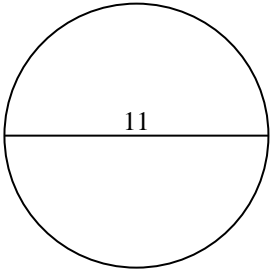
1)



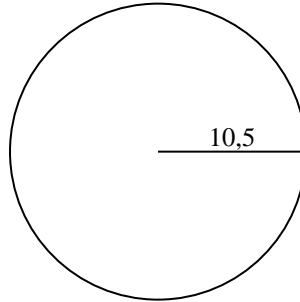
2)



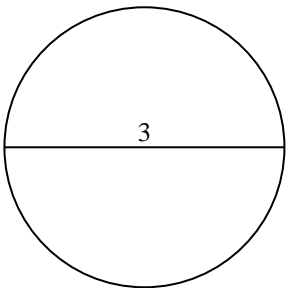
3)



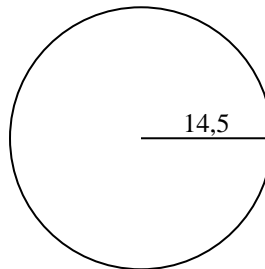
4)



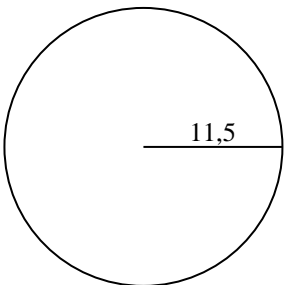
5)



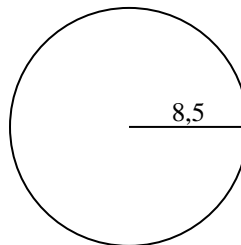
6)



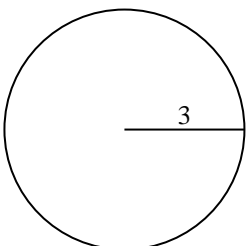
7)



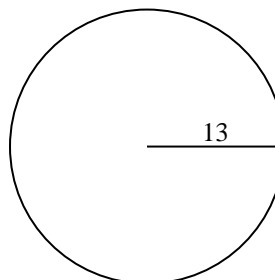
8)



9)



10)



Antworten

1a. _____

1c. _____

2a. _____

2c. _____

3a. _____

3c. _____

4a. _____

4c. _____

5a. _____

5c. _____

6a. _____

6c. _____

7a. _____

7c. _____

8a. _____

8c. _____

9a. _____

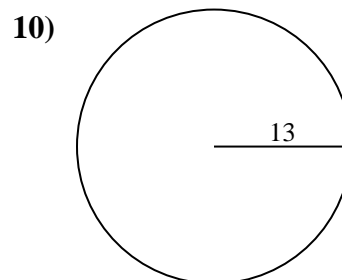
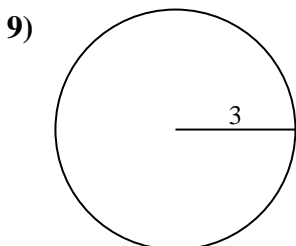
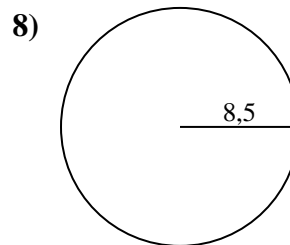
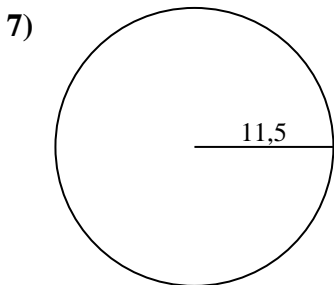
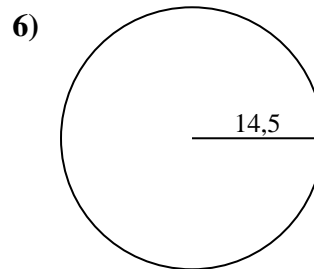
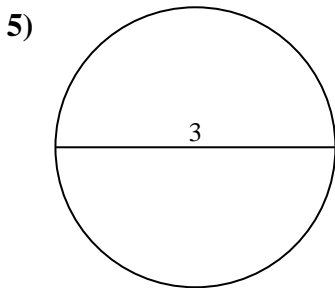
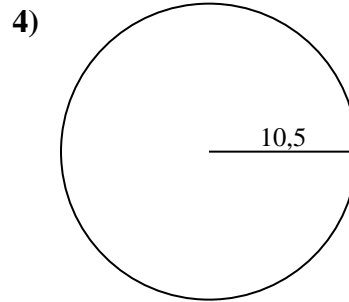
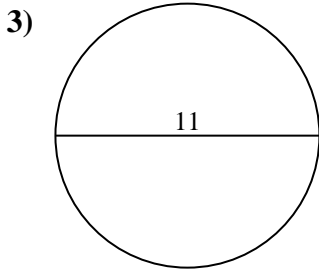
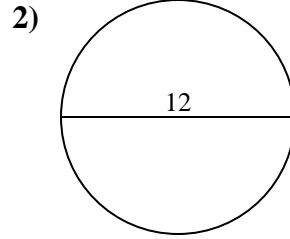
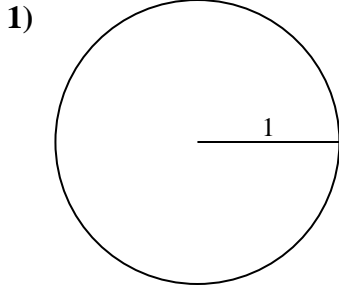
9c. _____

10a. _____

10c. _____



Berechne die Kreisfläche und den Kreisumfang jedes Kreises. Die Kreise sind nicht maßstäblich.

**Antworten**

1a. 3,14 cm²

1c. 6,28 cm

2a. 113,1 cm²

2c. 37,7 cm

3a. 95,03 cm²

3c. 34,56 cm

4a. 346,36 cm²

4c. 65,97 cm

5a. 7,07 cm²

5c. 9,42 cm

6a. 660,52 cm²

6c. 91,11 cm

7a. 415,48 cm²

7c. 72,26 cm

8a. 226,98 cm²

8c. 53,41 cm

9a. 28,27 cm²

9c. 18,85 cm

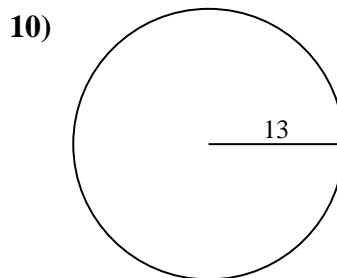
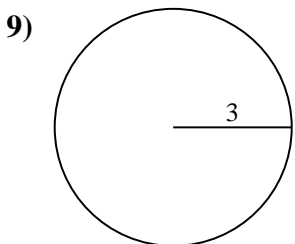
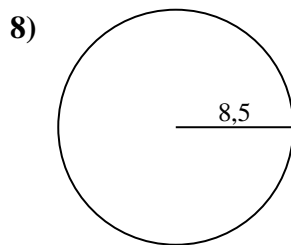
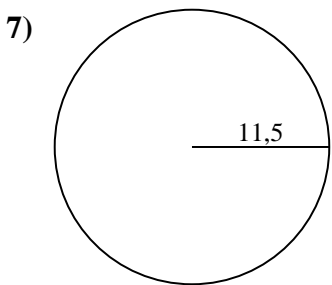
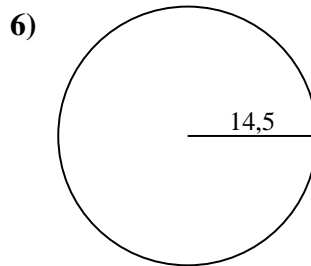
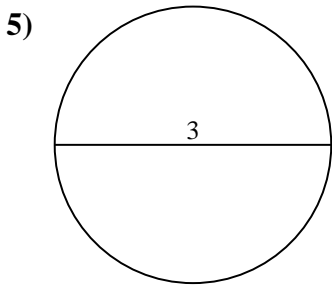
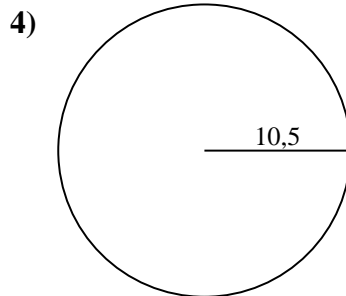
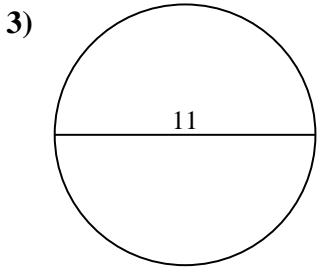
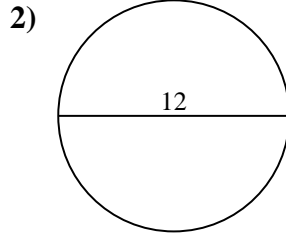
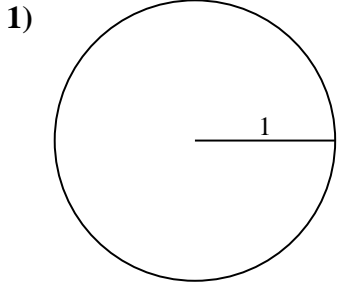
10a. 530,93 cm²

10c. 81,68 cm



Berechne die Kreisfläche und den Kreisumfang jedes Kreises. Die Kreise sind nicht maßstäblich.

9,42 cm	415,48 cm ²	95,03 cm ²	7,07 cm ²	346,36 cm ²
72,26 cm	65,97 cm	113,1 cm ²	53,41 cm	37,7 cm
18,85 cm	226,98 cm ²	28,27 cm ²	530,93 cm ²	81,68 cm
3,14 cm ²	91,11 cm	34,56 cm	660,52 cm ²	6,28 cm



Antworten

1a. _____

1c. _____

2a. _____

2c. _____

3a. _____

3c. _____

4a. _____

4c. _____

5a. _____

5c. _____

6a. _____

6c. _____

7a. _____

7c. _____

8a. _____

8c. _____

9a. _____

9c. _____

10a. _____

10c. _____