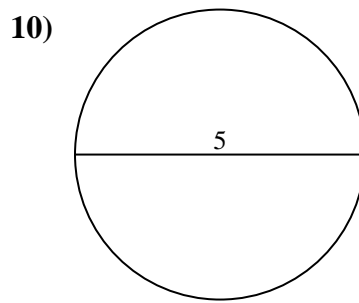
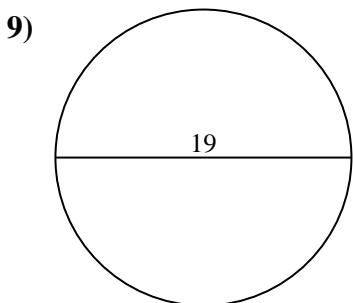
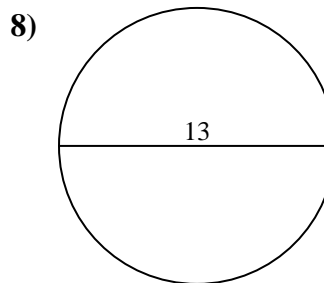
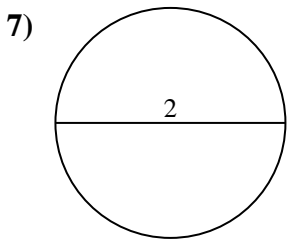
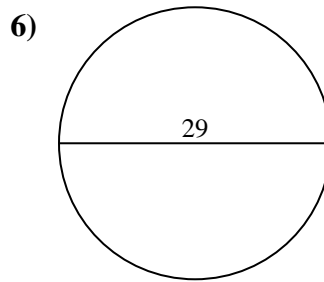
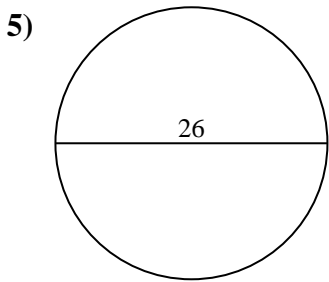
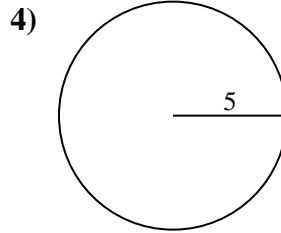
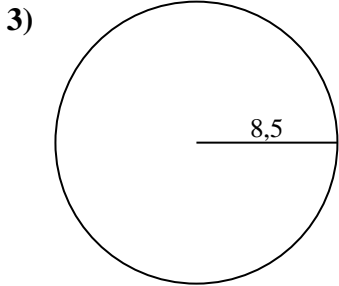
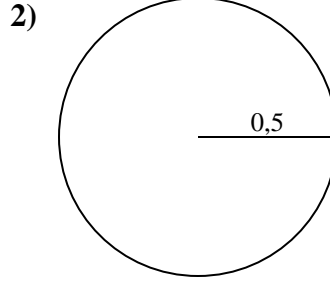
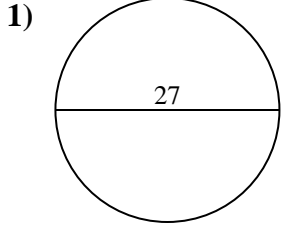




Berechne die Kreisfläche und den Kreisumfang jedes Kreises. Die Kreise sind nicht maßstäblich.



Antworten

1a. _____

1c. _____

2a. _____

2c. _____

3a. _____

3c. _____

4a. _____

4c. _____

5a. _____

5c. _____

6a. _____

6c. _____

7a. _____

7c. _____

8a. _____

8c. _____

9a. _____

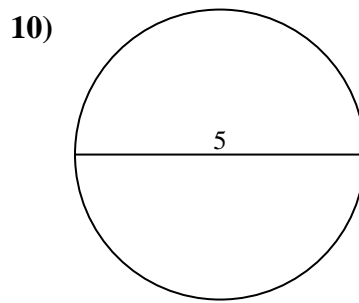
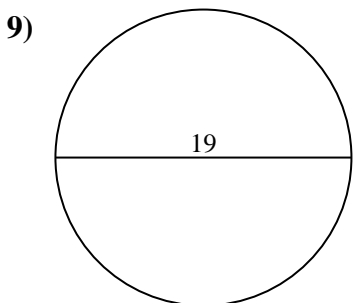
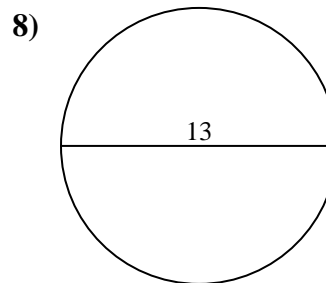
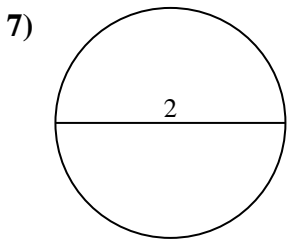
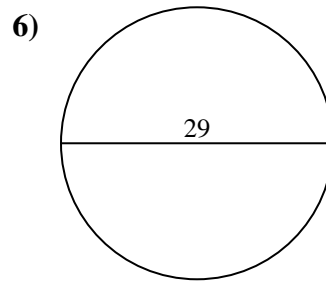
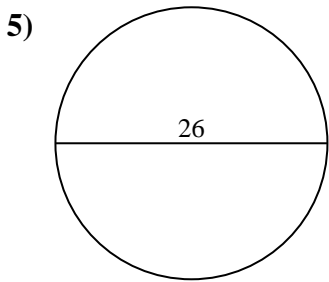
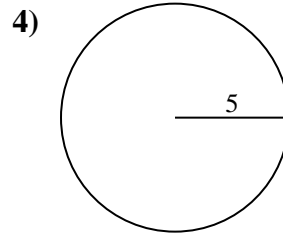
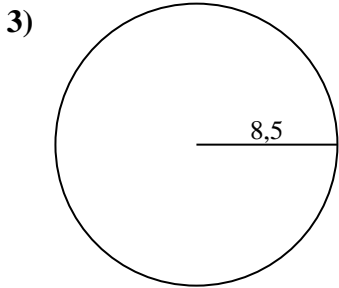
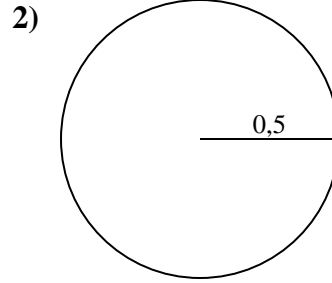
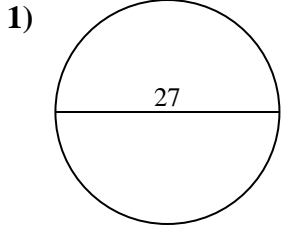
9c. _____

10a. _____

10c. _____



Berechne die Kreisfläche und den Kreisumfang jedes Kreises. Die Kreise sind nicht maßstäblich.



Antworten

1a. 572,56 cm²

1c. 84,82 cm

2a. 0,79 cm²

2c. 3,14 cm

3a. 226,98 cm²

3c. 53,41 cm

4a. 78,54 cm²

4c. 31,42 cm

5a. 530,93 cm²

5c. 81,68 cm

6a. 660,52 cm²

6c. 91,11 cm

7a. 3,14 cm²

7c. 6,28 cm

8a. 132,73 cm²

8c. 40,84 cm

9a. 283,53 cm²

9c. 59,69 cm

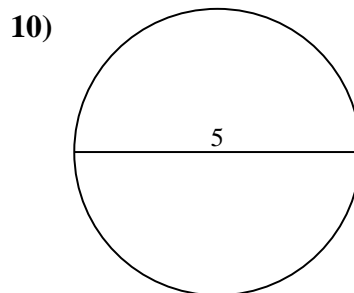
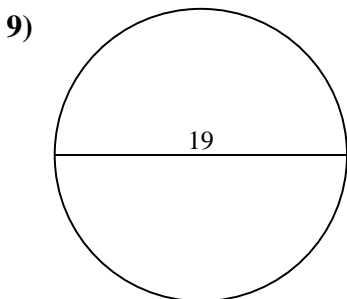
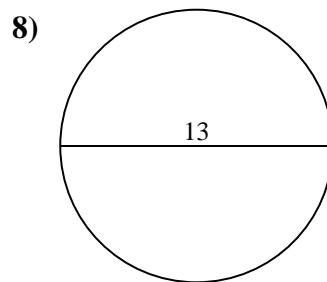
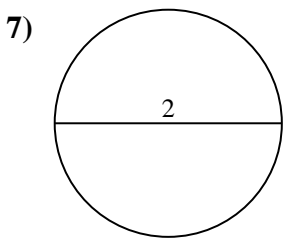
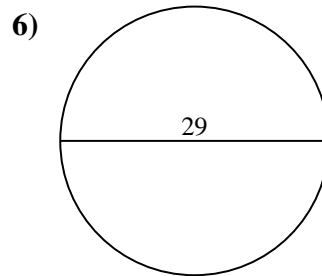
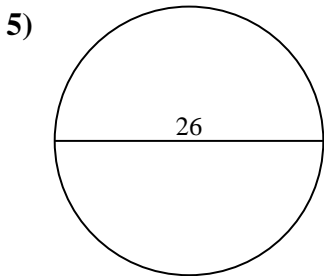
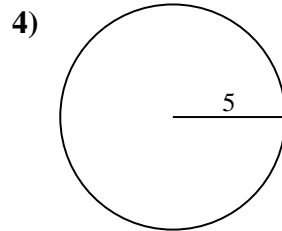
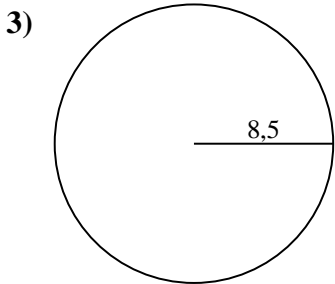
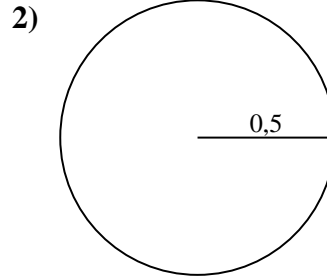
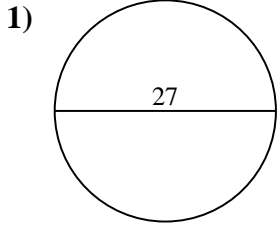
10a. 19,63 cm²

10c. 15,71 cm



Berechne die Kreisfläche und den Kreisumfang jedes Kreises. Die Kreise sind nicht maßstäblich.

0,79 cm ²	226,98 cm ²	91,11 cm	53,41 cm	59,69 cm
31,42 cm	19,63 cm ²	78,54 cm ²	283,53 cm ²	81,68 cm
6,28 cm	132,73 cm ²	530,93 cm ²	3,14 cm	84,82 cm
15,71 cm	572,56 cm ²	660,52 cm ²	3,14 cm ²	40,84 cm



Antworten

1a. _____

1c. _____

2a. _____

2c. _____

3a. _____

3c. _____

4a. _____

4c. _____

5a. _____

5c. _____

6a. _____

6c. _____

7a. _____

7c. _____

8a. _____

8c. _____

9a. _____

9c. _____

10a. _____

10c. _____