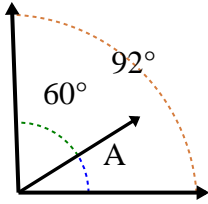


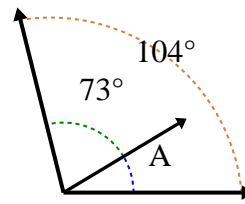


Finde den Größenwert von 'A'.

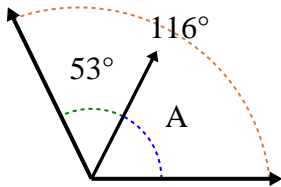
1)



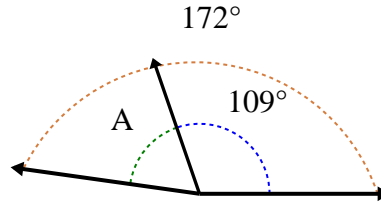
2)



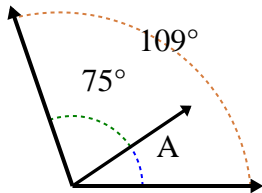
3)



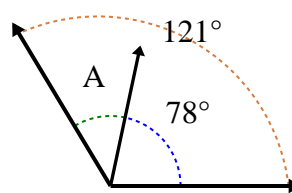
4)



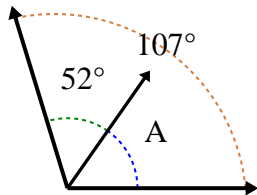
5)



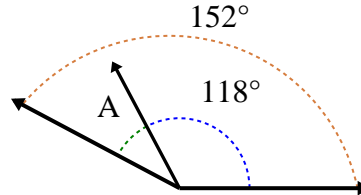
6)



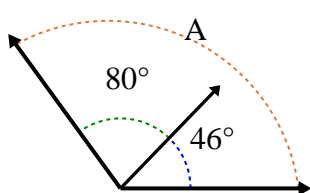
7)



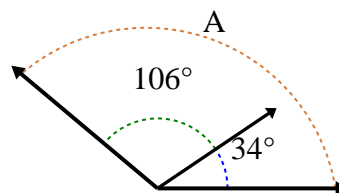
8)



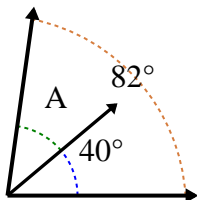
9)



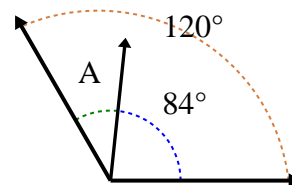
10)



11)



12)



Antworten

1. \_\_\_\_\_

2. \_\_\_\_\_

3. \_\_\_\_\_

4. \_\_\_\_\_

5. \_\_\_\_\_

6. \_\_\_\_\_

7. \_\_\_\_\_

8. \_\_\_\_\_

9. \_\_\_\_\_

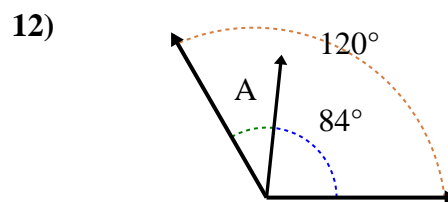
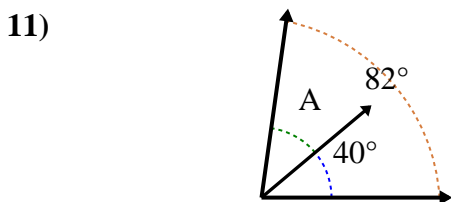
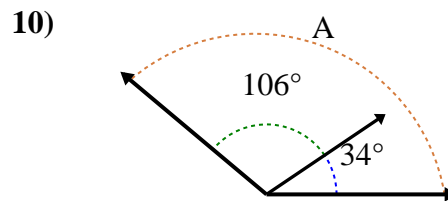
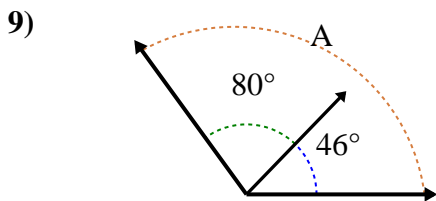
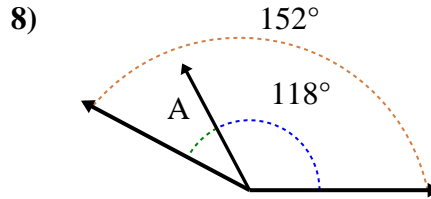
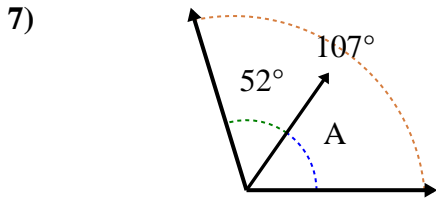
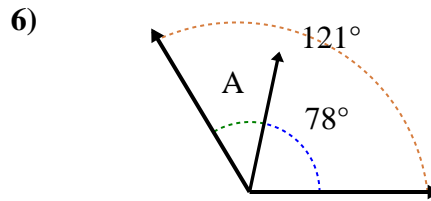
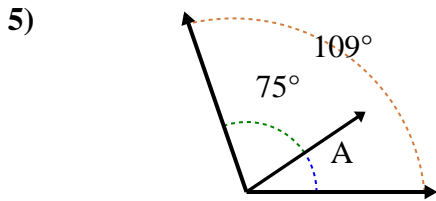
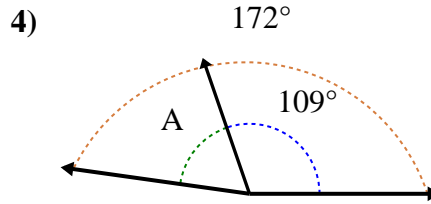
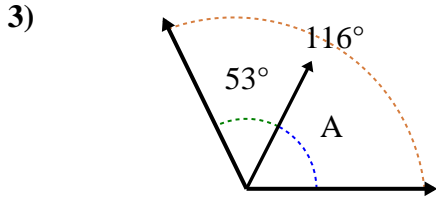
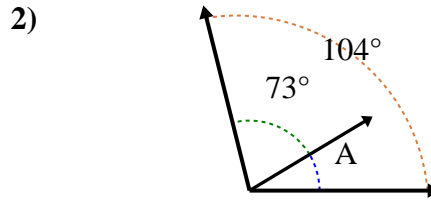
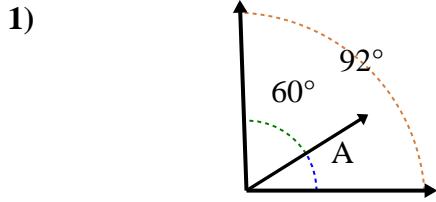
10. \_\_\_\_\_

11. \_\_\_\_\_

12. \_\_\_\_\_



Finde den Größenwert von 'A'.



Antworten

1. **32°**

2. **31°**

3. **63°**

4. **63°**

5. **34°**

6. **43°**

7. **55°**

8. **34°**

9. **126°**

10. **140°**

11. **42°**

12. **36°**