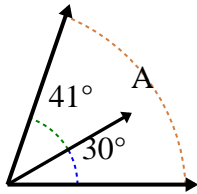


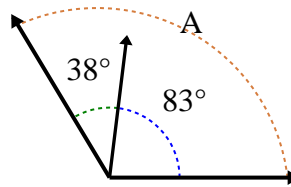


Finde den Größenwert von 'A'.

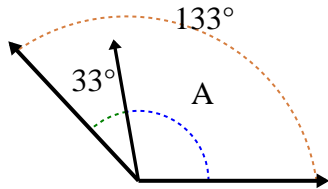
1)



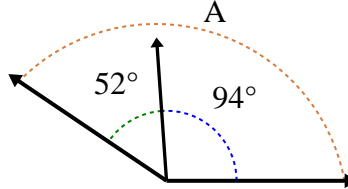
2)



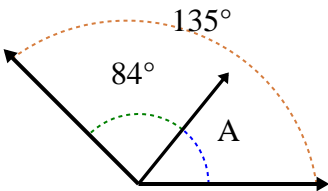
3)



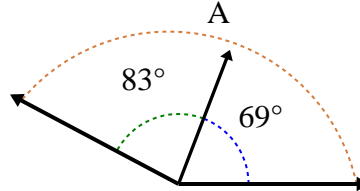
4)



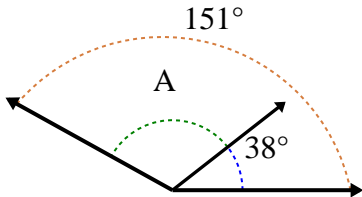
5)



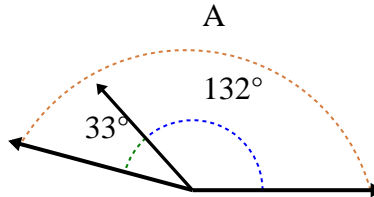
6)



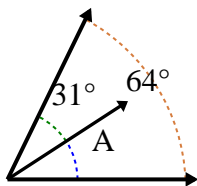
7)



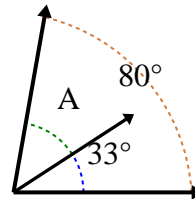
8)



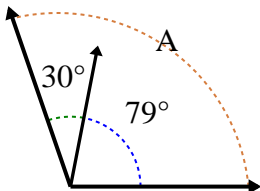
9)



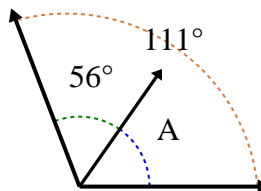
10)



11)



12)



Antworten

1. _____

2. _____

3. _____

4. _____

5. _____

6. _____

7. _____

8. _____

9. _____

10. _____

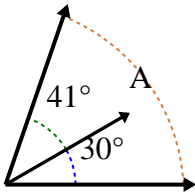
11. _____

12. _____

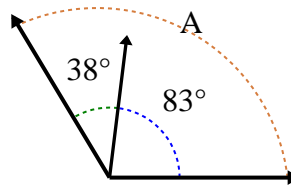


Finde den Größenwert von 'A'.

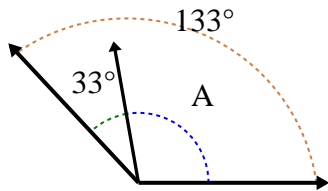
1)



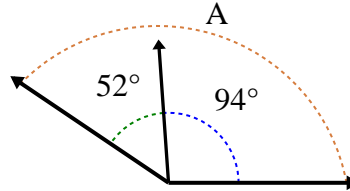
2)



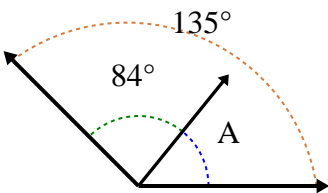
3)



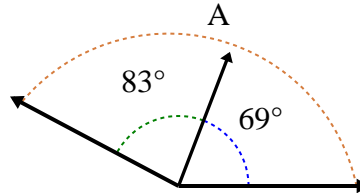
4)



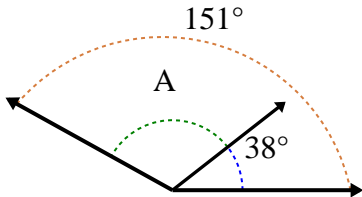
5)



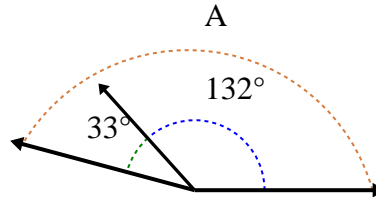
6)



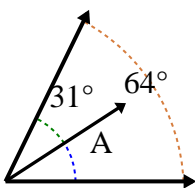
7)



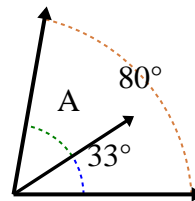
8)



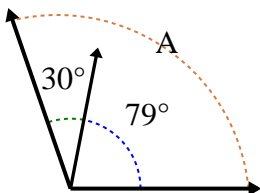
9)



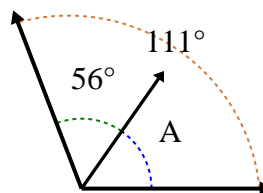
10)



11)



12)

**Antworten**1. **71°**2. **121°**3. **100°**4. **146°**5. **51°**6. **152°**7. **113°**8. **165°**9. **33°**10. **47°**11. **109°**12. **55°**