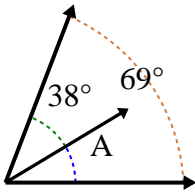


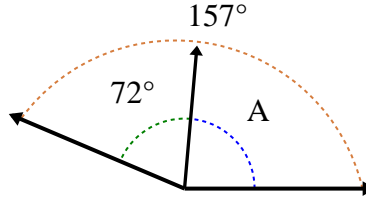


Finde den Größenwert von 'A'.

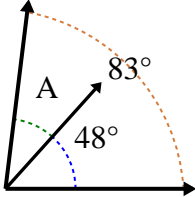
1)



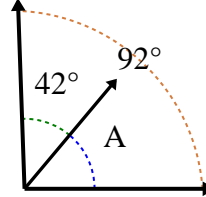
2)



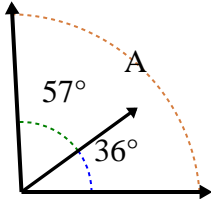
3)



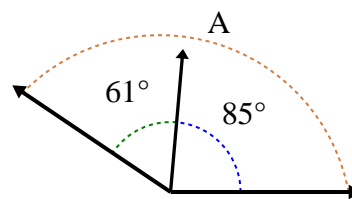
4)



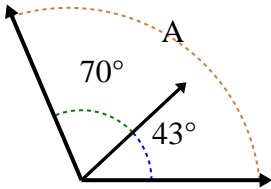
5)



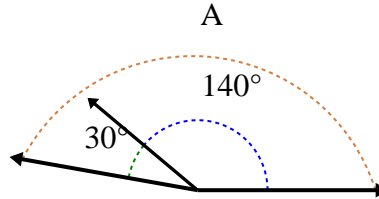
6)



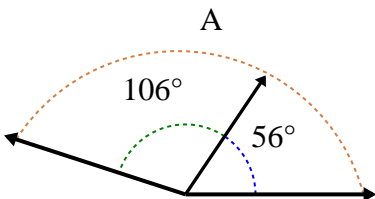
7)



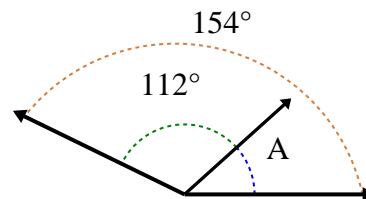
8)



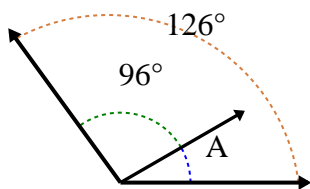
9)



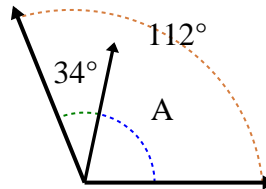
10)



11)



12)



Antworten

1. _____

2. _____

3. _____

4. _____

5. _____

6. _____

7. _____

8. _____

9. _____

10. _____

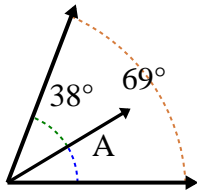
11. _____

12. _____

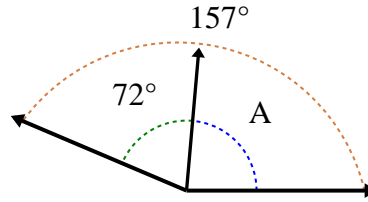


Finde den Größenwert von 'A'.

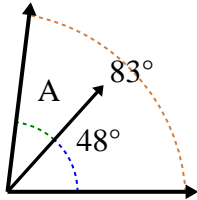
1)



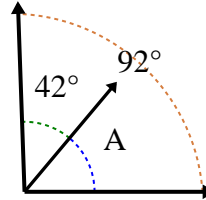
2)



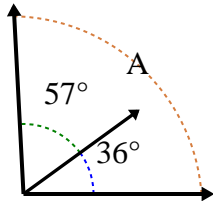
3)



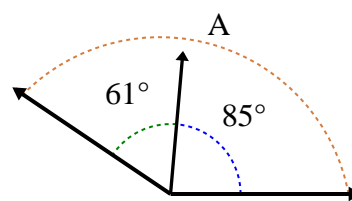
4)



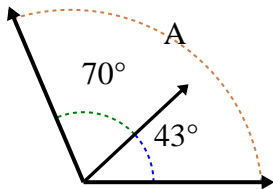
5)



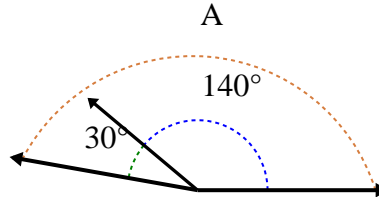
6)



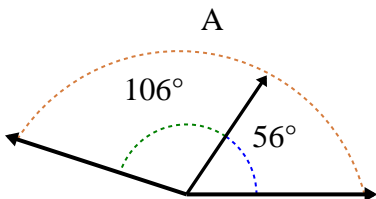
7)



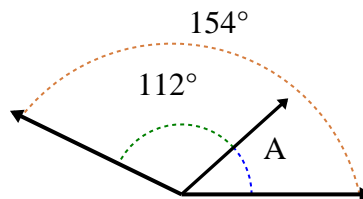
8)



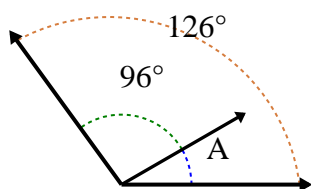
9)



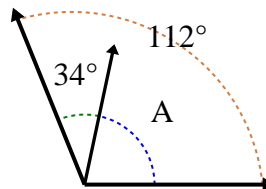
10)



11)



12)



Antworten

1. **31°**

2. **85°**

3. **35°**

4. **50°**

5. **93°**

6. **146°**

7. **113°**

8. **170°**

9. **162°**

10. **42°**

11. **30°**

12. **78°**