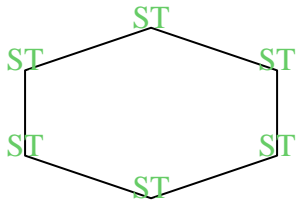




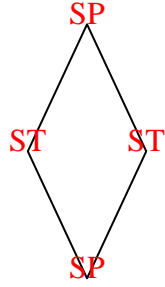


Zähle die Anzahl von spitzwinkligen, stumpfwinkligen, rechtwinkligen und überstumpften Winkeln in jeder Form.

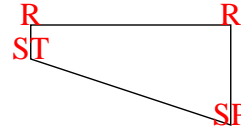
Bsp)



1)



2)



**Antworten**

SP ST R Ü

Bsp. 0 6 0 0

1. 2 2 0 0

2. 1 1 2 0

3. 1 1 3 1

4. 0 2 3 0

5. 2 1 4 4

6. 2 2 1 2

7. 2 2 1 1

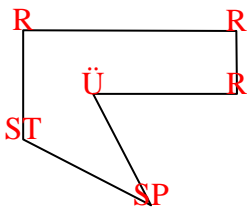
8. 2 2 0 0

9. 1 2 4 2

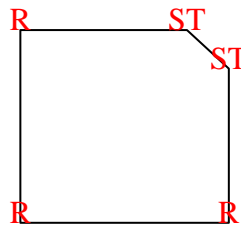
10. 0 0 4 0

11. 1 3 4 3

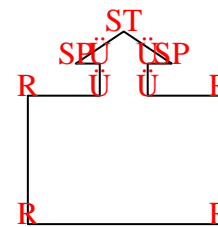
3)



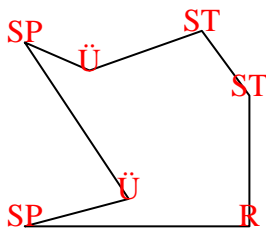
4)



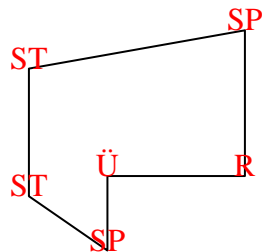
5)



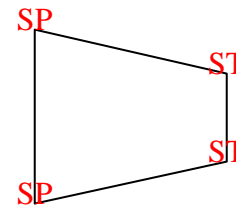
6)



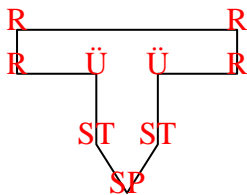
7)



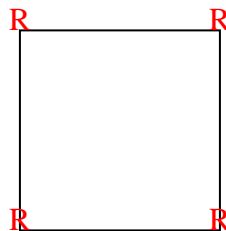
8)



9)



10)



11)

