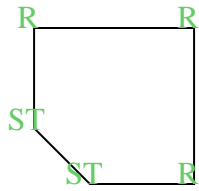




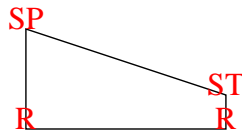


Zähle die Anzahl von spitzwinkligen, stumpfwinkligen und rechten Winkeln in jeder Form.

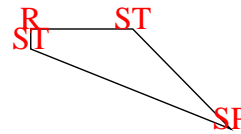
Bsp)



1)



2)



**Antworten**

SP ST R

Bsp. 0 2 3

1. 1 1 2

2. 1 2 1

3. 2 2 0

4. 1 4 0

5. 0 3 2

6. 0 4 2

7. 0 4 1

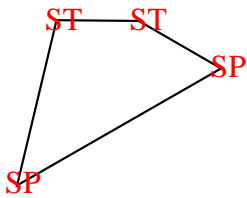
8. 2 2 0

9. 0 6 0

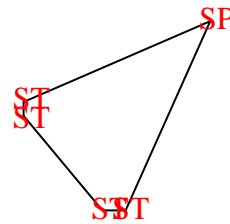
10. 0 0 4

11. 3 0 0

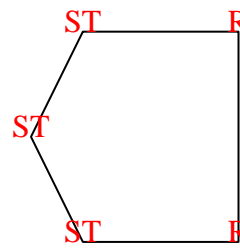
3)



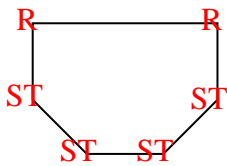
4)



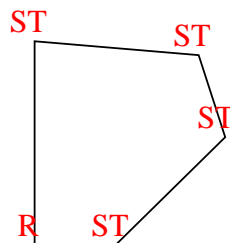
5)



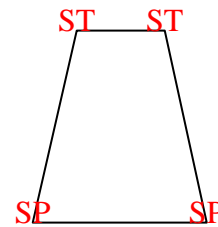
6)



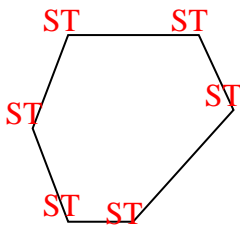
7)



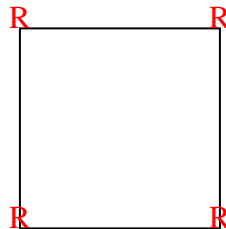
8)



9)



10)



11)

