




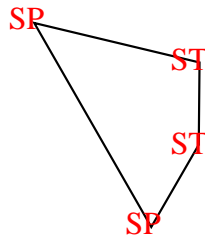


Zähle die Anzahl von spitzwinkligen, stumpfwinkligen und rechten Winkeln in jeder Form.

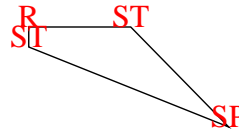
Bsp)



1)



2)



**Antworten**

SP ST R

Bsp. 0 0 4

1. 2 2 0

2. 1 2 1

3. 2 0 1

4. 0 0 4

5. 0 4 2

6. 2 2 0

7. 0 6 0

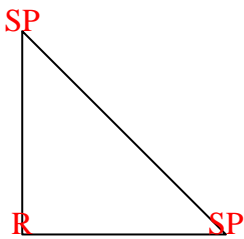
8. 3 0 0

9. 2 2 0

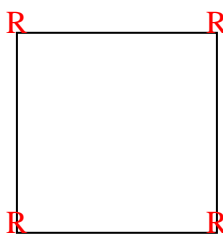
10. 0 3 2

11. 0 2 3

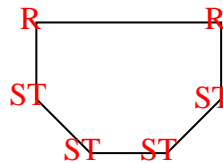
3)



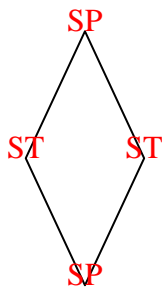
4)



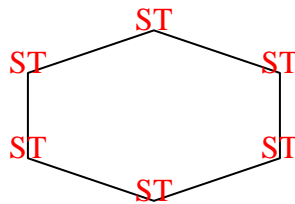
5)



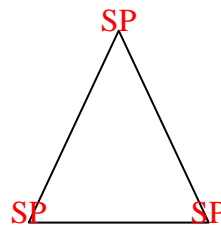
6)



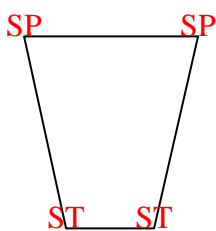
7)



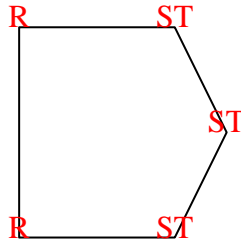
8)



9)



10)



11)

