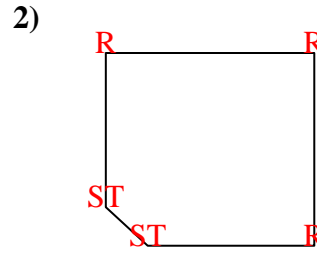
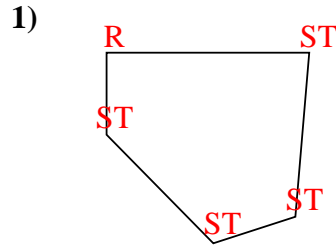
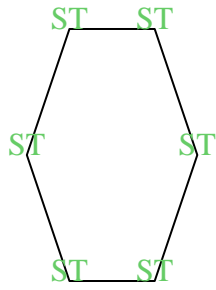




Zähle die Anzahl von spitzwinkligen, stumpfwinkligen und rechten Winkeln in jeder Form.

Bsp)



Antworten

SP ST R

Bsp. 0 6 0

1. 0 4 1

2. 0 2 3

3. 0 4 2

4. 0 6 0

5. 0 0 4

6. 2 2 0

7. 0 0 4

8. 0 7 0

9. 0 3 2

10. 1 4 0

11. 2 2 0

