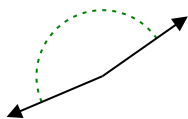


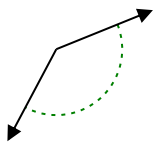


Stelle fest, ob der gezeigte Winkel spitzwinklig, stumpfwinklig, rechtwinklig oder geradwinklig ist.

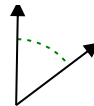
Bsp)



1)



2)



Bsp.

stumpfwinklig

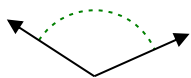
1. _____

2. _____

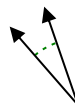
3)



4)



5)

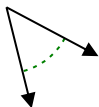


3. _____

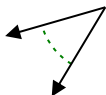
4. _____

5. _____

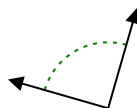
6)



7)



8)

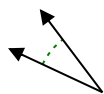


6. _____

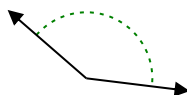
7. _____

8. _____

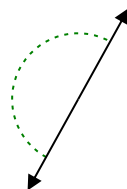
9)



10)



11)

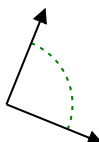


9. _____

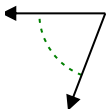
10. _____

11. _____


12)



13)



14)

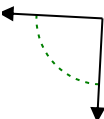


12. _____

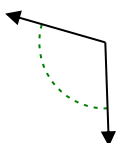
13. _____

14. _____

15)



16)



17)

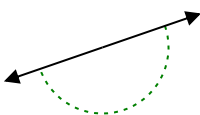


15. _____

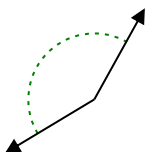
16. _____

17. _____

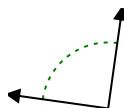
18)



19)



20)



18. _____

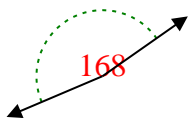
19. _____

20. _____

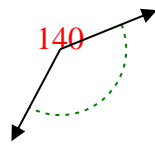


Stelle fest, ob der gezeigte Winkel spitzwinklig, stumpfwinklig, rechtwinklig oder geradwinklig ist.

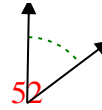
Bsp)



1)



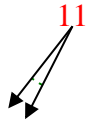
2)



Bsp.

stumpfwinklig

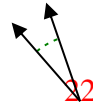
3)



4)



5)



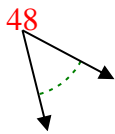
1.

stumpfwinklig

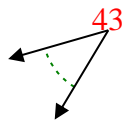
2.

spitzwinklig

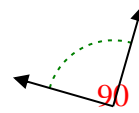
6)



7)



8)



3.

spitzwinklig

4.

stumpfwinklig

5.

spitzwinklig

6.

spitzwinklig

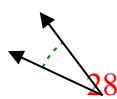
7.

spitzwinklig

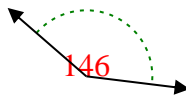
8.

rechtwinklig

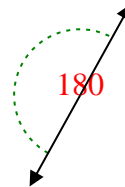
9)



10)



11)



9.

spitzwinklig

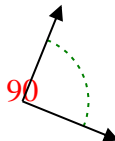
10.

stumpfwinklig

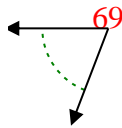
11.

gestreckt

12)



13)



14)



12.

rechtwinklig

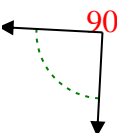
13.

spitzwinklig

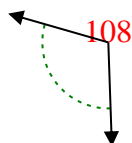
14.

gestreckt

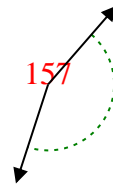
15)



16)



17)



15.

rechtwinklig

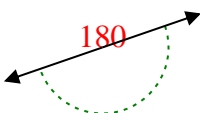
16.

stumpfwinklig

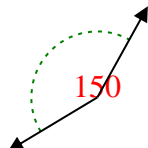
17.

stumpfwinklig

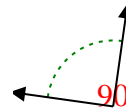
18)



19)



20)



18.

gestreckt

19.

stumpfwinklig

20.

rechtwinklig