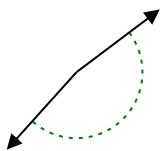


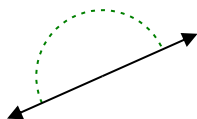


Stelle fest, ob der gezeigte Winkel spitzwinklig, stumpfwinklig, rechtwinklig oder geradwinklig ist.

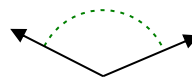
Bsp)



1)



2)



Bsp. stumpfwinklig

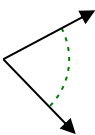
1. _____

2. _____

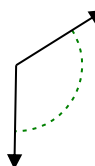
3)



4)



5)

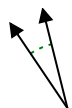


3. _____

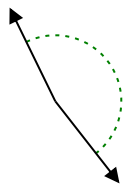
4. _____

5. _____

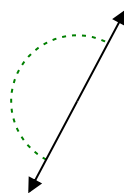
6)



7)



8)



6. _____

7. _____

8. _____

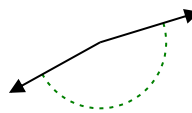
9)



10)



11)

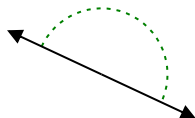


9. _____

10. _____

11. _____

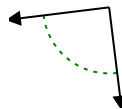
12)



13)



14)

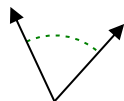


12. _____

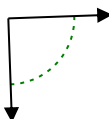
13. _____

14. _____

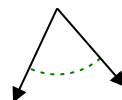
15)



16)



17)

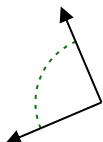


15. _____

16. _____

17. _____

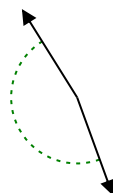
18)



19)



20)



18. _____

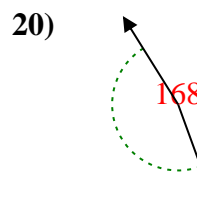
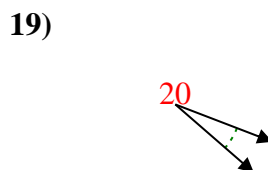
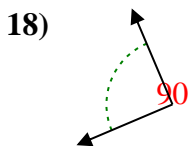
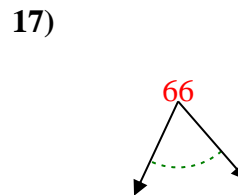
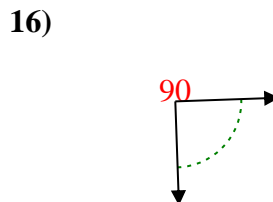
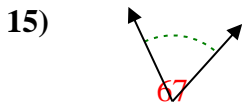
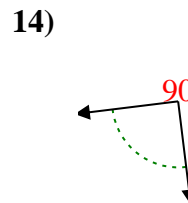
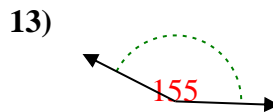
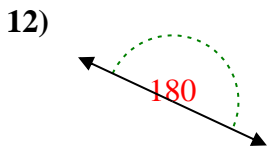
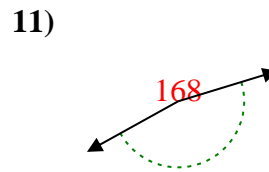
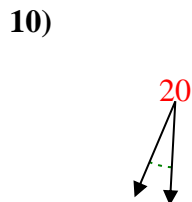
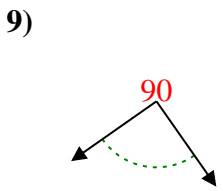
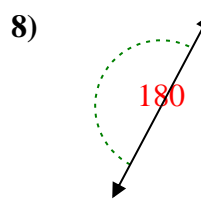
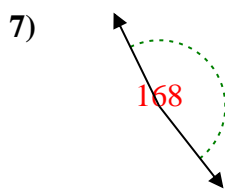
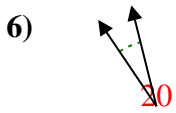
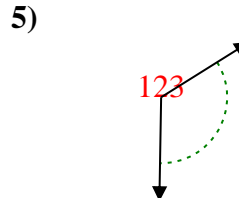
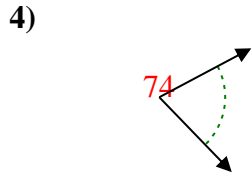
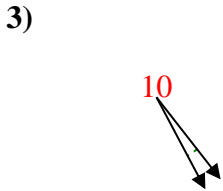
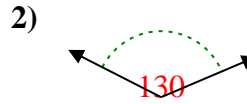
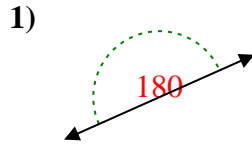
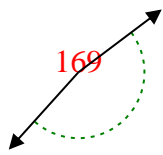
19. _____

20. _____



Stelle fest, ob der gezeigte Winkel spitzwinklig, stumpfwinklig, rechtwinklig oder geradwinklig ist.

Bsp)



Antworten

Bsp. stumpfwinklig

1. gestreckt

2. stumpfwinklig

3. spitzwinklig

4. spitzwinklig

5. stumpfwinklig

6. spitzwinklig

7. stumpfwinklig

8. gestreckt

9. rechtwinklig

10. spitzwinklig

11. stumpfwinklig

12. gestreckt

13. stumpfwinklig

14. rechtwinklig

15. spitzwinklig

16. rechtwinklig

17. spitzwinklig

18. rechtwinklig

19. spitzwinklig

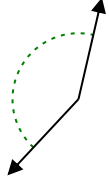
20. stumpfwinklig

1-10	95	90	85	80	75	70	65	60	55	50
11-20	45	40	35	30	25	20	15	10	5	0

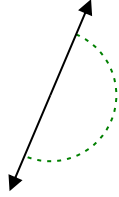


Stelle fest, ob der gezeigte Winkel spitzwinklig, stumpfwinklig oder geradwinklig ist.

Bsp)



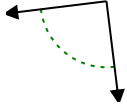
1)



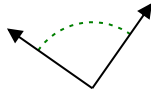
2)



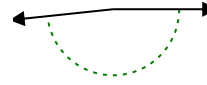
3)



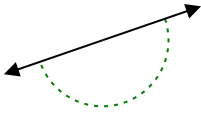
4)



5)



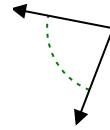
6)



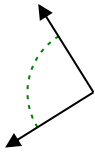
7)



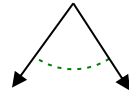
8)



9)



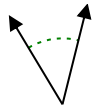
10)



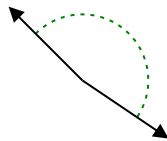
11)



12)



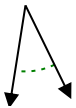
13)



14)



15)



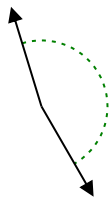
16)



17)



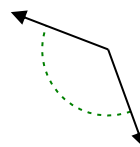
18)



19)



20)



Antworten

Bsp. stumpfwinklig

1. _____

2. _____

3. _____

4. _____

5. _____

6. _____

7. _____

8. _____

9. _____

10. _____

11. _____

12. _____

13. _____

14. _____

15. _____

16. _____

17. _____

18. _____

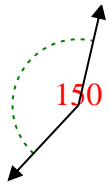
19. _____

20. _____

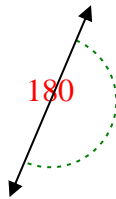


Stelle fest, ob der gezeigte Winkel spitzwinklig, stumpfwinklig, rechtwinklig oder geradwinklig ist.

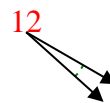
Bsp)



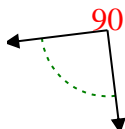
1)



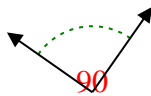
2)



3)



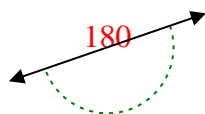
4)



5)



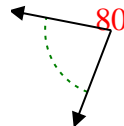
6)



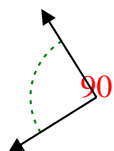
7)



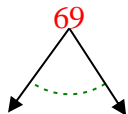
8)



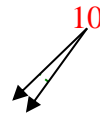
9)



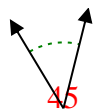
10)



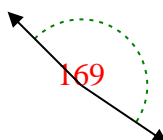
11)



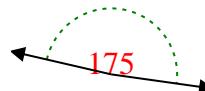
12)



13)



14)



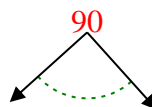
15)



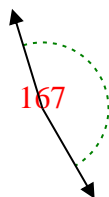
16)



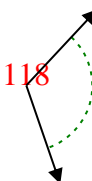
17)



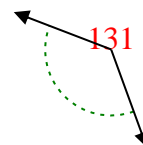
18)



19)



20)



Antworten

Bsp. stumpfwinklig

1. gestreckt

2. spitzwinklig

3. rechtwinklig

4. rechtwinklig

5. stumpfwinklig

6. gestreckt

7. spitzwinklig

8. spitzwinklig

9. rechtwinklig

10. spitzwinklig

11. spitzwinklig

12. spitzwinklig

13. stumpfwinklig

14. stumpfwinklig

15. spitzwinklig

16. spitzwinklig

17. rechtwinklig

18. stumpfwinklig

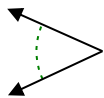
19. stumpfwinklig

20. stumpfwinklig

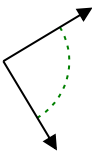


Stelle fest, ob der gezeigte Winkel spitzwinklig, stumpfwinklig, rechtwinklig oder geradwinklig ist.

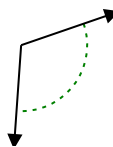
Bsp)



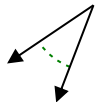
1)



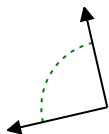
2)



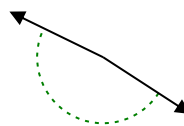
3)



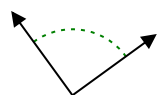
4)



5)



6)



7)



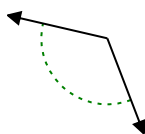
8)



9)



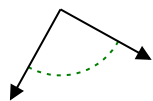
10)



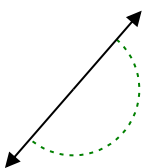
11)



12)



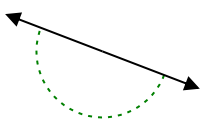
13)



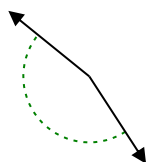
14)



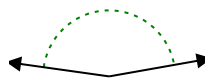
15)



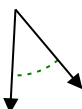
16)



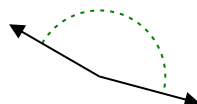
17)



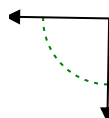
18)



19)



20)



Antworten

Bsp. spitzwinklig

1. _____

2. _____

3. _____

4. _____

5. _____

6. _____

7. _____

8. _____

9. _____

10. _____

11. _____

12. _____

13. _____

14. _____

15. _____

16. _____

17. _____

18. _____

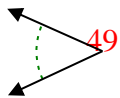
19. _____

20. _____

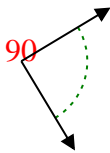


Stelle fest, ob der gezeigte Winkel spitzwinklig, stumpfwinklig, rechtwinklig oder geradwinklig ist.

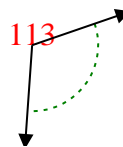
Bsp)



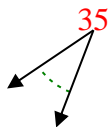
1)



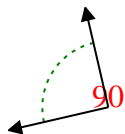
2)



3)



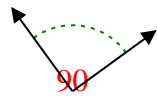
4)



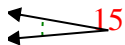
5)



6)



7)



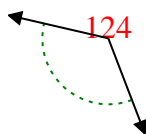
8)



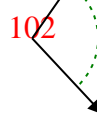
9)



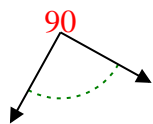
10)



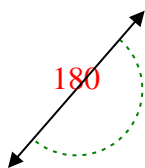
11)



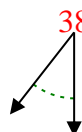
12)



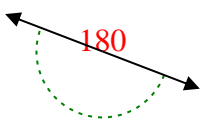
13)



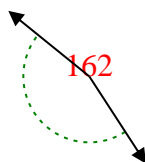
14)



15)



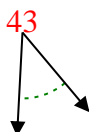
16)



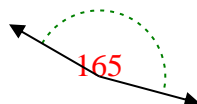
17)



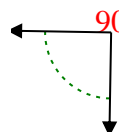
18)



19)



20)



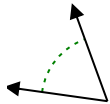
Antworten

- Bsp. spitzwinklig
1. rechtwinklig
2. stumpfwinklig
3. spitzwinklig
4. rechtwinklig
5. stumpfwinklig
6. rechtwinklig
7. spitzwinklig
8. spitzwinklig
9. spitzwinklig
10. stumpfwinklig
11. stumpfwinklig
12. rechtwinklig
13. gestreckt
14. spitzwinklig
15. gestreckt
16. stumpfwinklig
17. stumpfwinklig
18. spitzwinklig
19. stumpfwinklig
20. rechtwinklig

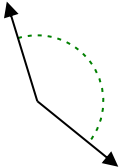


Stelle fest, ob der gezeigte Winkel spitzwinklig, stumpfwinklig, rechtwinklig oder geradwinklig ist.

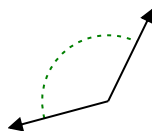
Bsp)



1)



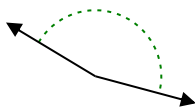
2)



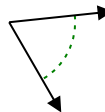
3)



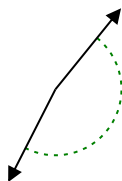
4)



5)



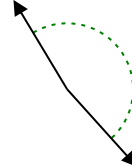
6)



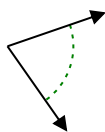
7)



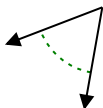
8)



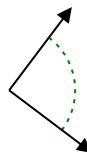
9)



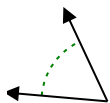
10)



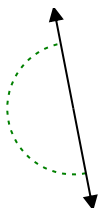
11)



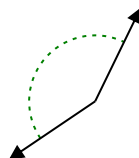
12)



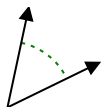
13)



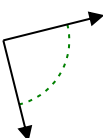
14)



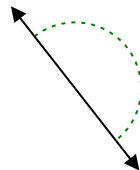
15)



16)



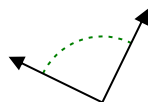
17)



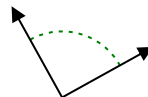
18)



19)



20)



Antworten

Bsp. spitzwinklig

1. _____

2. _____

3. _____

4. _____

5. _____

6. _____

7. _____

8. _____

9. _____

10. _____

11. _____

12. _____

13. _____

14. _____

15. _____

16. _____

17. _____

18. _____

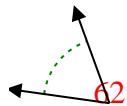
19. _____

20. _____

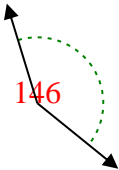


Stelle fest, ob der gezeigte Winkel spitzwinklig, stumpfwinklig, rechtwinklig oder geradwinklig ist.

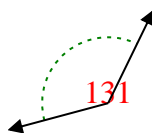
Bsp)



1)



2)



Antworten

Bsp.

spitzwinklig

1. stumpfwinklig

2. stumpfwinklig

3. spitzwinklig

4. stumpfwinklig

5. spitzwinklig

6. stumpfwinklig

7. spitzwinklig

8. stumpfwinklig

9. spitzwinklig

10. spitzwinklig

11. rechtwinklig

12. spitzwinklig

13. gestreckt

14. stumpfwinklig

15. spitzwinklig

16. rechtwinklig

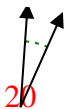
17. gestreckt

18. stumpfwinklig

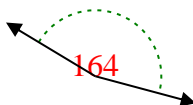
19. rechtwinklig

20. rechtwinklig

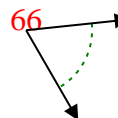
3)



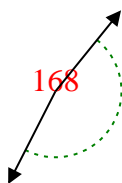
4)



5)



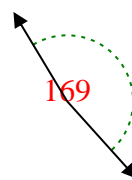
6)



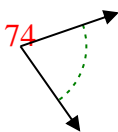
7)



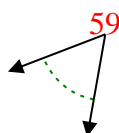
8)



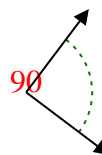
9)



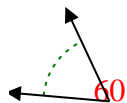
10)



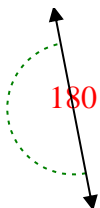
11)



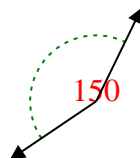
12)



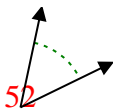
13)



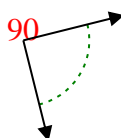
14)



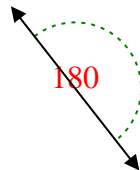
15)



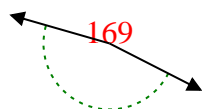
16)



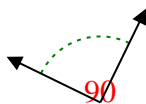
17)



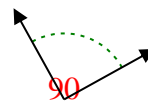
18)



19)



20)

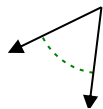


1-10	95	90	85	80	75	70	65	60	55	50
11-20	45	40	35	30	25	20	15	10	5	0

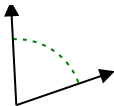


Stelle fest, ob der gezeigte Winkel spitzwinklig, stumpfwinklig, rechtwinklig oder geradwinklig ist.

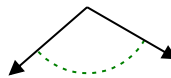
Bsp)



1)



2)



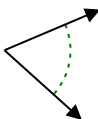
Bsp.

spitzwinklig

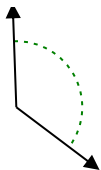
1. _____

2. _____

3)



4)



5)



3. _____

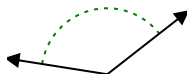
4. _____

5. _____

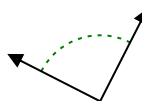
6)



7)



8)

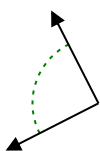


6. _____

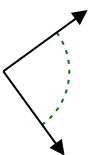
7. _____

8. _____

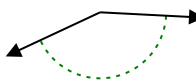
9)



10)



11)

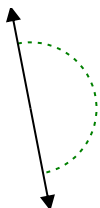


9. _____

10. _____

11. _____

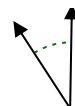
12)



13)



14)

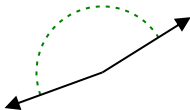


12. _____

13. _____

14. _____

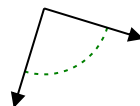
15)



16)



17)

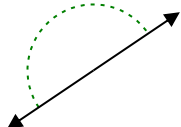


15. _____

16. _____

17. _____

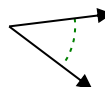
18)



19)



20)



18. _____

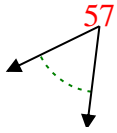
19. _____

20. _____

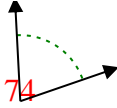


Stelle fest, ob der gezeigte Winkel spitzwinklig, stumpfwinklig, rechtwinklig oder geradwinklig ist.

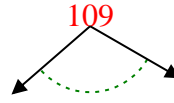
Bsp)



1)



2)

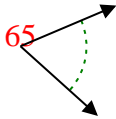


Antworten

Bsp.

spitzwinklig

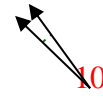
3)



4)



5)



1. spitzwinklig

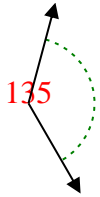
2. stumpfwinklig

3. spitzwinklig

4. stumpfwinklig

5. spitzwinklig

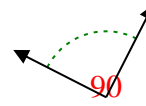
6)



7)



8)

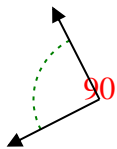


6. stumpfwinklig

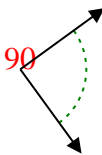
7. stumpfwinklig

8. rechtwinklig

9)



10)



11)

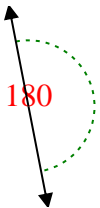


9. rechtwinklig

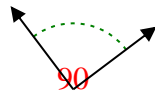
10. rechtwinklig

11. stumpfwinklig

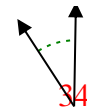
12)



13)



14)

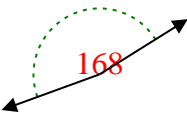


12. gestreckt

13. rechtwinklig

14. spitzwinklig

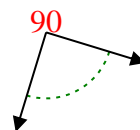
15)



16)



17)

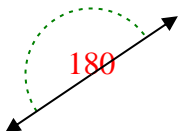


15. stumpfwinklig

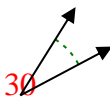
16. stumpfwinklig

17. rechtwinklig

18)



19)



20)



18. gestreckt

19. spitzwinklig

20. spitzwinklig

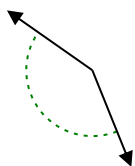


Stelle fest, ob der gezeigte Winkel spitzwinklig, stumpfwinklig, rechtwinklig oder geradwinklig ist.

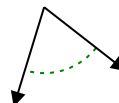
Bsp)



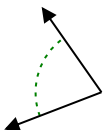
1)



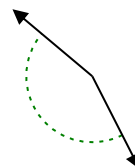
2)



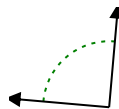
3)



4)



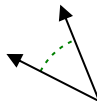
5)



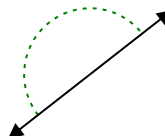
6)



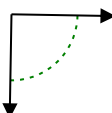
7)



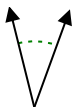
8)



9)



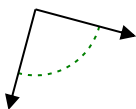
10)



11)



12)



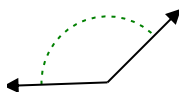
13)



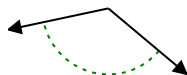
14)



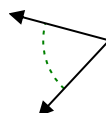
15)



16)



17)



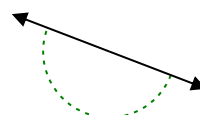
18)



19)



20)



Antworten

Bsp. rechtwinklig

1. _____

2. _____

3. _____

4. _____

5. _____

6. _____

7. _____

8. _____

9. _____

10. _____

11. _____

12. _____

13. _____

14. _____

15. _____

16. _____

17. _____

18. _____

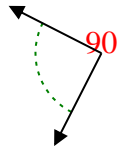
19. _____

20. _____

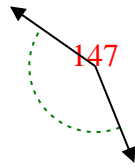


Stelle fest, ob der gezeigte Winkel spitzwinklig, stumpfwinklig, rechtwinklig oder geradwinklig ist.

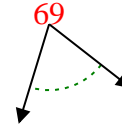
Bsp)



1)



2)



Antworten

Bsp. rechtwinklig

1. stumpfwinklig

2. spitzwinklig

3. spitzwinklig

4. stumpfwinklig

5. rechtwinklig

6. stumpfwinklig

7. spitzwinklig

8. gestreckt

9. rechtwinklig

10. spitzwinklig

11. spitzwinklig

12. rechtwinklig

13. stumpfwinklig

14. stumpfwinklig

15. stumpfwinklig

16. stumpfwinklig

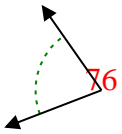
17. spitzwinklig

18. spitzwinklig

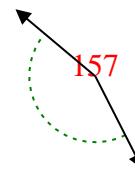
19. stumpfwinklig

20. gestreckt

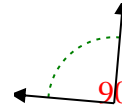
3)



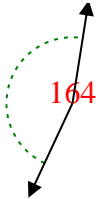
4)



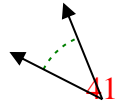
5)



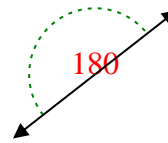
6)



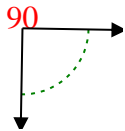
7)



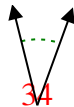
8)



9)



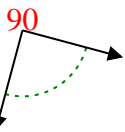
10)



11)



12)



13)



14)



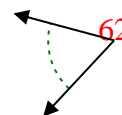
15)



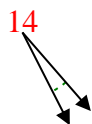
16)



17)



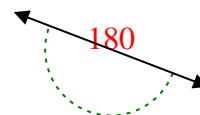
18)



19)



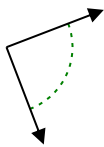
20)





Stelle fest, ob der gezeigte Winkel spitzwinklig, stumpfwinklig, rechtwinklig oder geradwinklig ist.

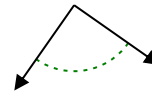
Bsp)



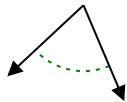
1)



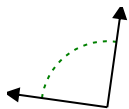
2)



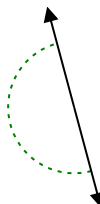
3)



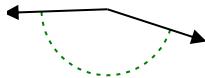
4)



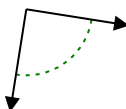
5)



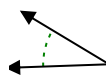
6)



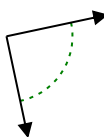
7)



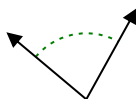
8)



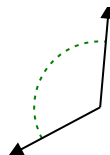
9)



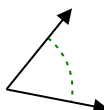
10)



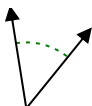
11)



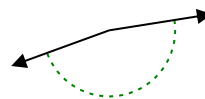
12)



13)



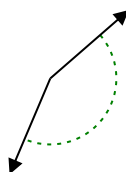
14)



15)



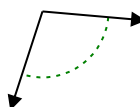
16)



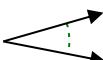
17)



18)



19)



20)



Antworten

Bsp. rechtwinklig

1. _____

2. _____

3. _____

4. _____

5. _____

6. _____

7. _____

8. _____

9. _____

10. _____

11. _____

12. _____

13. _____

14. _____

15. _____

16. _____

17. _____

18. _____

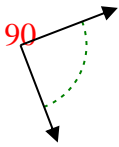
19. _____

20. _____

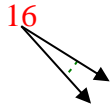


Stelle fest, ob der gezeigte Winkel spitzwinklig, stumpfwinklig, rechtwinklig oder geradwinklig ist.

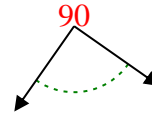
Bsp)



1)



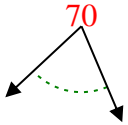
2)



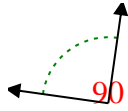
Bsp.

rechtwinklig

3)



4)



5)



1.

spitzwinklig

2.

rechtwinklig

3.

spitzwinklig

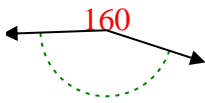
4.

rechtwinklig

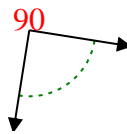
5.

gestreckt

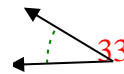
6)



7)



8)



6.

stumpfwinklig

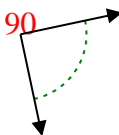
7.

rechtwinklig

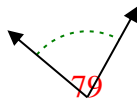
8.

spitzwinklig

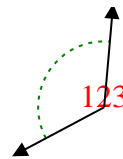
9)



10)



11)



9.

rechtwinklig

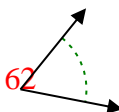
10.

spitzwinklig

11.

stumpfwinklig

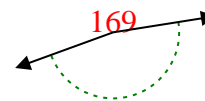
12)



13)



14)



12.

spitzwinklig

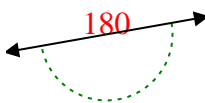
13.

spitzwinklig

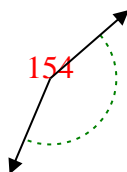
14.

stumpfwinklig

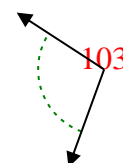
15)



16)



17)



15.

gestreckt

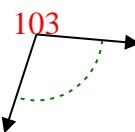
16.

stumpfwinklig

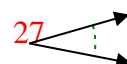
17.

stumpfwinklig

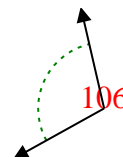
18)



19)



20)



18.

stumpfwinklig

19.

spitzwinklig

20.

stumpfwinklig



Stelle fest, ob der gezeigte Winkel spitzwinklig, stumpfwinklig, rechtwinklig oder geradwinklig ist.

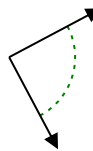
Bsp)



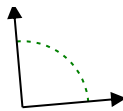
1)



2)



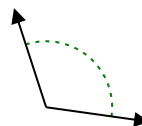
3)



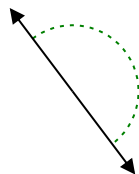
4)



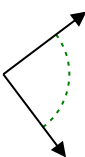
5)



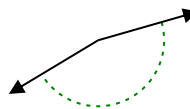
6)



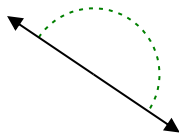
7)



8)



9)



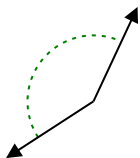
10)



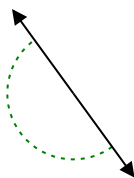
11)



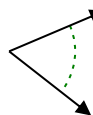
12)



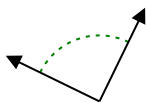
13)



14)



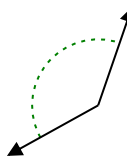
15)



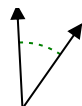
16)



17)



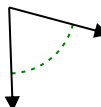
18)



19)



20)



Antworten

Bsp. spitzwinklig

1. _____

2. _____

3. _____

4. _____

5. _____

6. _____

7. _____

8. _____

9. _____

10. _____

11. _____

12. _____

13. _____

14. _____

15. _____

16. _____

17. _____

18. _____

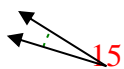
19. _____

20. _____

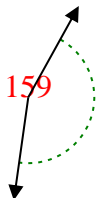


Stelle fest, ob der gezeigte Winkel spitzwinklig, stumpfwinklig, rechtwinklig oder geradwinklig ist.

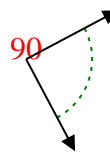
Bsp)



1)



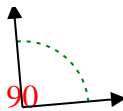
2)



Bsp.

spitzwinklig

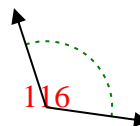
3)



4)



5)



1. stumpfwinklig

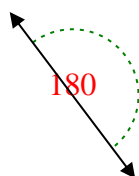
2. rechtwinklig

3. rechtwinklig

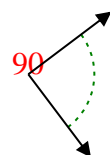
4. stumpfwinklig

5. stumpfwinklig

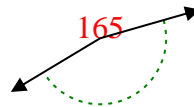
6)



7)



8)

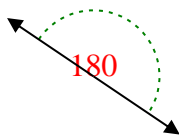


6. gestreckt

7. rechtwinklig

8. stumpfwinklig

9)



10)



11)

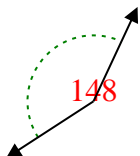


9. gestreckt

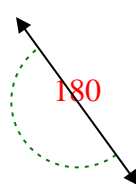
10. spitzwinklig

11. spitzwinklig

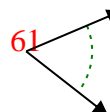
12)



13)



14)

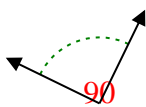


12. stumpfwinklig

13. gestreckt

14. spitzwinklig

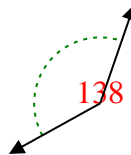
15)



16)



17)



15. rechtwinklig

16. stumpfwinklig

17. stumpfwinklig

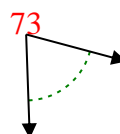
18)



19)



20)



18. spitzwinklig

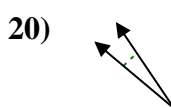
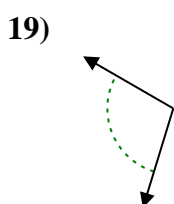
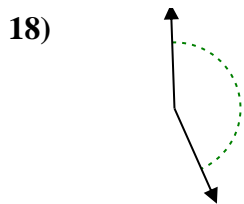
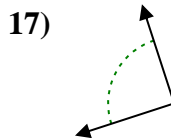
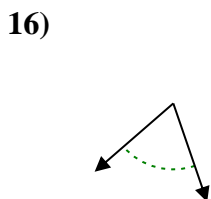
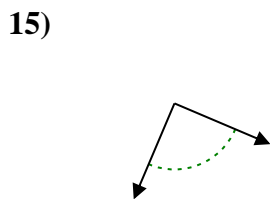
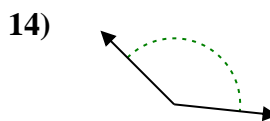
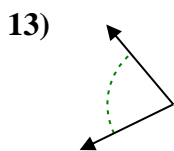
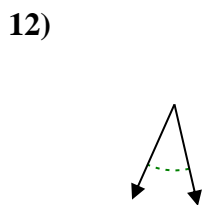
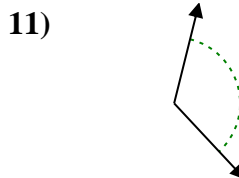
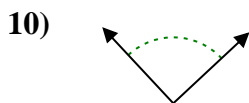
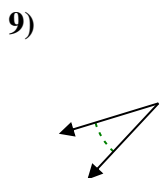
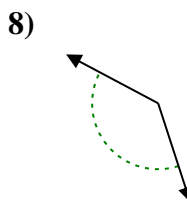
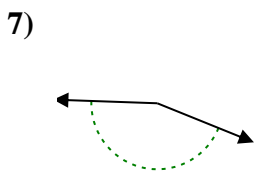
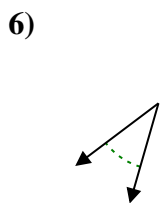
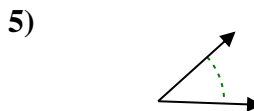
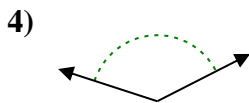
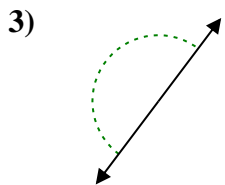
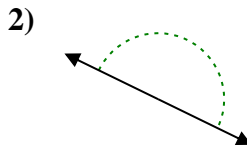
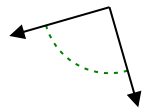
19. spitzwinklig

20. spitzwinklig



Stelle fest, ob der gezeigte Winkel spitzwinklig, stumpfwinklig, rechtwinklig oder geradwinklig ist.

Bsp)



Antworten

Bsp. rechtwinklig

1. _____

2. _____

3. _____

4. _____

5. _____

6. _____

7. _____

8. _____

9. _____

10. _____

11. _____

12. _____

13. _____

14. _____

15. _____

16. _____

17. _____

18. _____

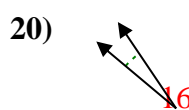
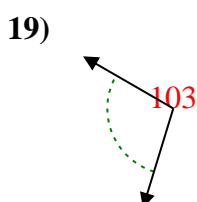
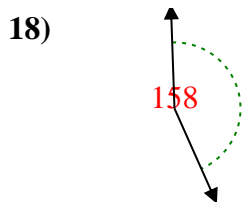
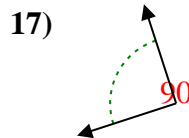
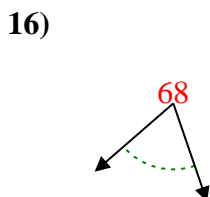
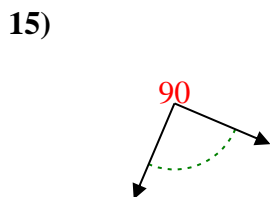
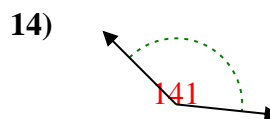
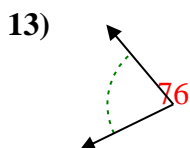
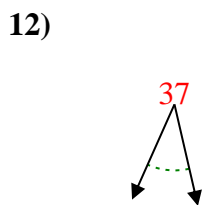
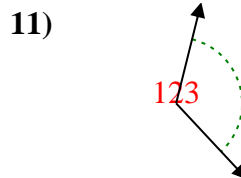
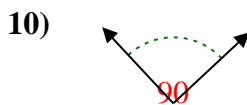
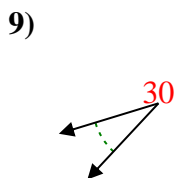
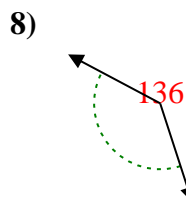
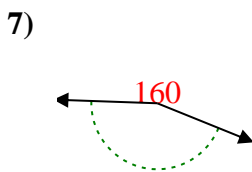
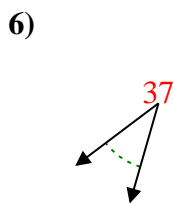

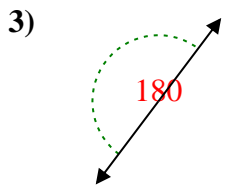
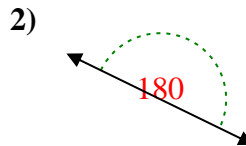
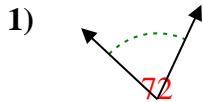
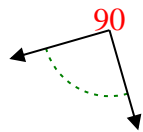
19. _____

20. _____



Stelle fest, ob der gezeigte Winkel spitzwinklig, stumpfwinklig, rechtwinklig oder geradwinklig ist.

Bsp)



Antworten

Bsp. rechtwinklig

1. spitzwinklig

2. gestreckt

3. gestreckt

4. stumpfwinklig

5. spitzwinklig

6. spitzwinklig

7. stumpfwinklig

8. stumpfwinklig

9. spitzwinklig

10. rechtwinklig

11. stumpfwinklig

12. spitzwinklig

13. spitzwinklig

14. stumpfwinklig

15. rechtwinklig

16. spitzwinklig

17. rechtwinklig

18. stumpfwinklig

19. stumpfwinklig

20. spitzwinklig

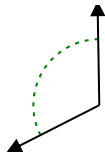


Stelle fest, ob der gezeigte Winkel spitzwinklig, stumpfwinklig, rechtwinklig oder geradwinklig ist.

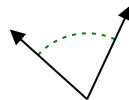
Bsp)



1)



2)



Bsp. rechtwinklig

1. _____

2. _____

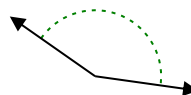
3)



4)



5)

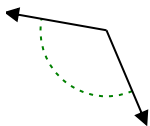


3. _____

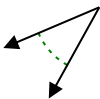
4. _____

5. _____

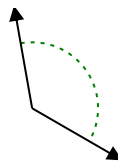
6)



7)



8)



6. _____

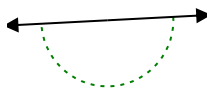
7. _____

8. _____

9)



10)



11)

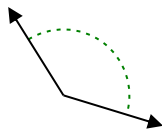


9. _____

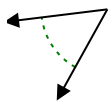
10. _____

11. _____

12)



13)



14)

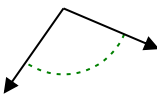


12. _____

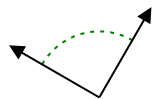
13. _____

14. _____

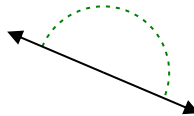
15)



16)



17)

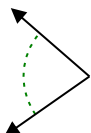


15. _____

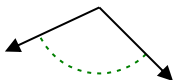
16. _____

17. _____

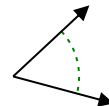
18)



19)



20)



18. _____

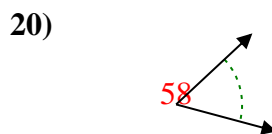
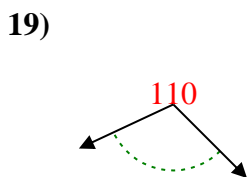
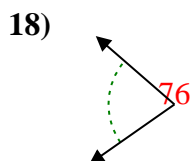
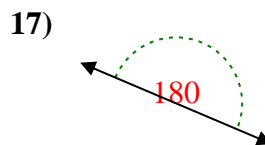
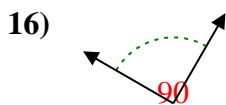
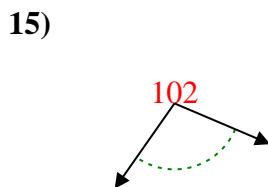
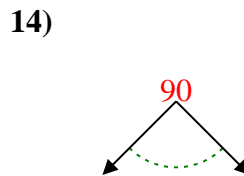
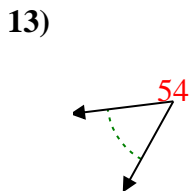
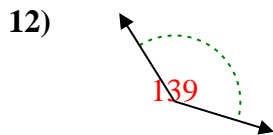
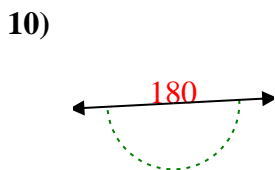
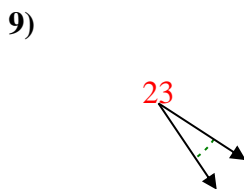
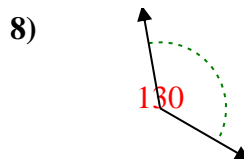
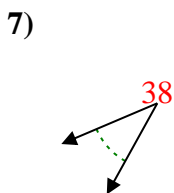
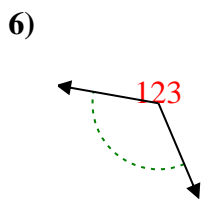
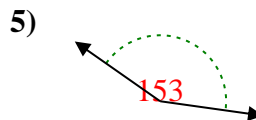
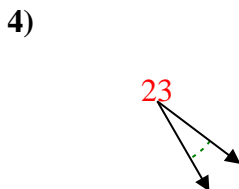
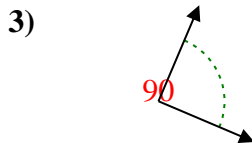
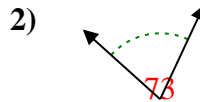
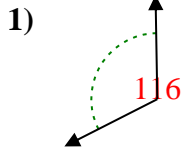
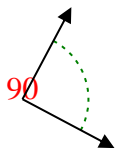
19. _____

20. _____



Stelle fest, ob der gezeigte Winkel spitzwinklig, stumpfwinklig, rechtwinklig oder geradwinklig ist.

Bsp)



Antworten

Bsp. rechtwinklig

1. stumpfwinklig

2. spitzwinklig

3. rechtwinklig

4. spitzwinklig

5. stumpfwinklig

6. stumpfwinklig

7. spitzwinklig

8. stumpfwinklig

9. spitzwinklig

10. gestreckt

11. spitzwinklig

12. stumpfwinklig

13. spitzwinklig

14. rechtwinklig

15. stumpfwinklig

16. rechtwinklig

17. gestreckt

18. spitzwinklig

19. stumpfwinklig

20. spitzwinklig